

UDĚLEJTE SI TEST IQ

Úkoly k procvičení mozku



**V 30 sekundách se
pokuste objevit
písmeno B**


[illegible]

A co dál?




?

A)



B)



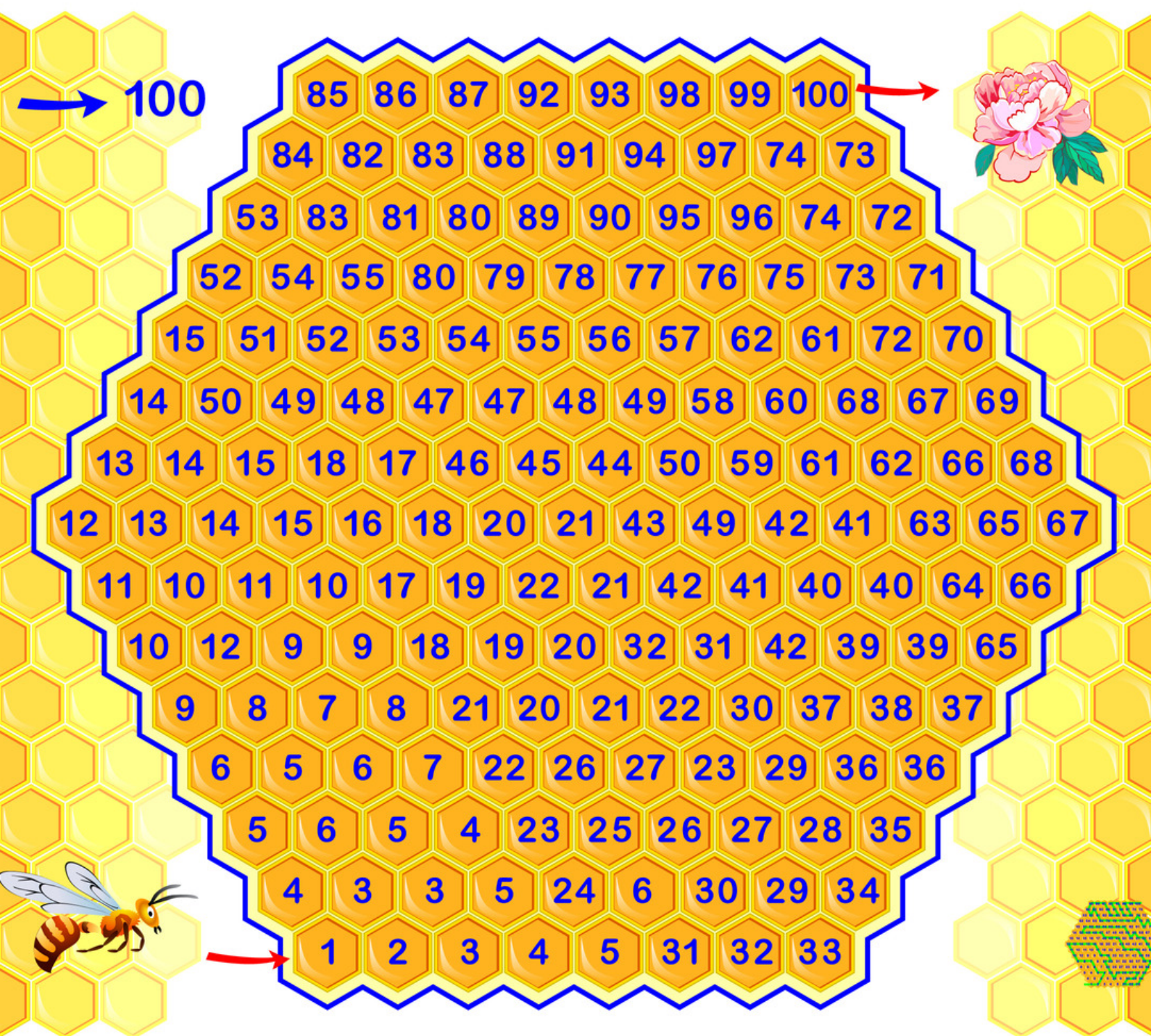
C)



D)



Najděte cestu od 1 až po 100



Vyřešte případ a spočítejte hodnotu hrací karty

1 2 3 4 5
6 7 8 9 10

$$6 \spadesuit \times 6 \heartsuit = 6 \clubsuit$$

$$6 \clubsuit + 6 \spadesuit = 6 \diamondsuit + 6 \diamondsuit$$

$$6 \diamondsuit + 6 \spadesuit = 6 \clubsuit - 6 \diamondsuit$$

$$6 \heartsuit \times 6 \diamondsuit = 6 \clubsuit + 6 \clubsuit + 6 \clubsuit$$

$$6 \clubsuit + 6 \diamondsuit + 6 \spadesuit + 6 \heartsuit = 23$$



$$6 \spadesuit = \bigcirc$$

$$6 \heartsuit = \bigcirc$$

$$6 \diamondsuit = \bigcirc$$

$$6 \clubsuit = \bigcirc$$

Spočítejte hodnotu šachové figurky

$$\text{P} \times \text{N} = 3 \times \text{R} + \text{P}$$


$$\text{N} + \text{R} = \text{P} + \text{P}$$

$$\text{R} \times \text{P} = 8 \times \text{N} - \text{P}$$

$$\text{N} \times \text{P} = \text{R} + \text{P}$$



$$\text{R} =$$



- 1
- 2
- 3
- 4
- 5
- 6
- 7
- 8
- 9
- 10