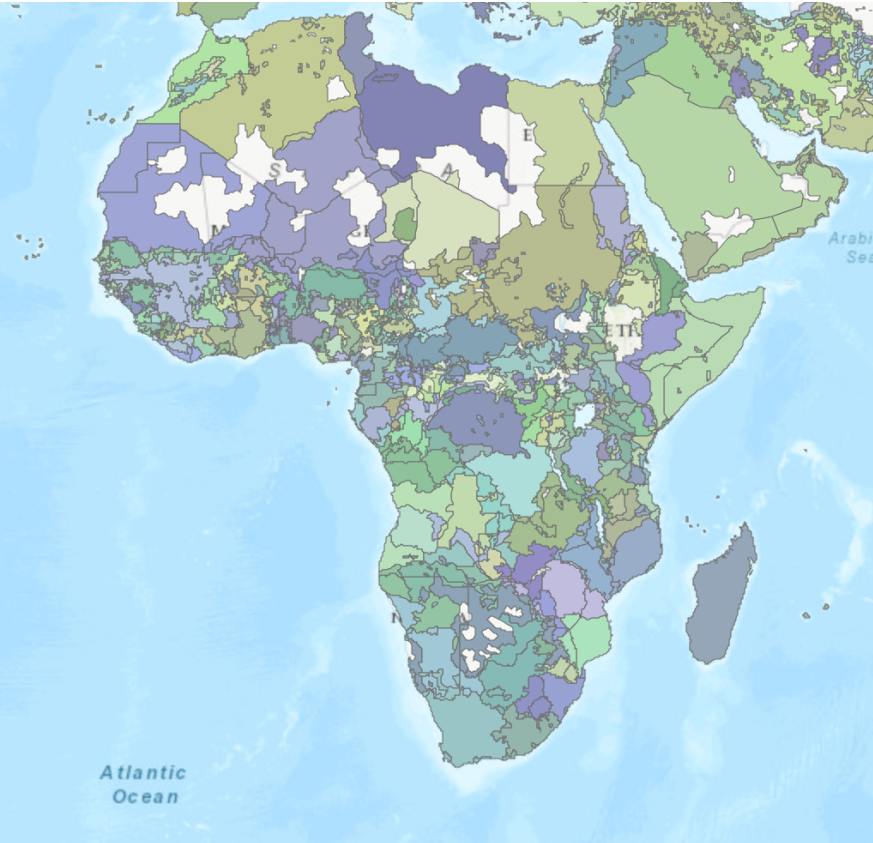




4.1 Map of African Ethnicities

The Map to the below shows the different ethnic groups of Africa and which part of the continent they each live in. **An ethnic group is a social group bound together by a common language, ancestry, history, or culture.**



Map From Harvard Map Viewer - <https://worldmap.maps.arcgis.com/home/webmap/viewer.html?useExisting=1>

What parts of Africa have the most ethnic groups?

What does the number of colors tell us about Africa?

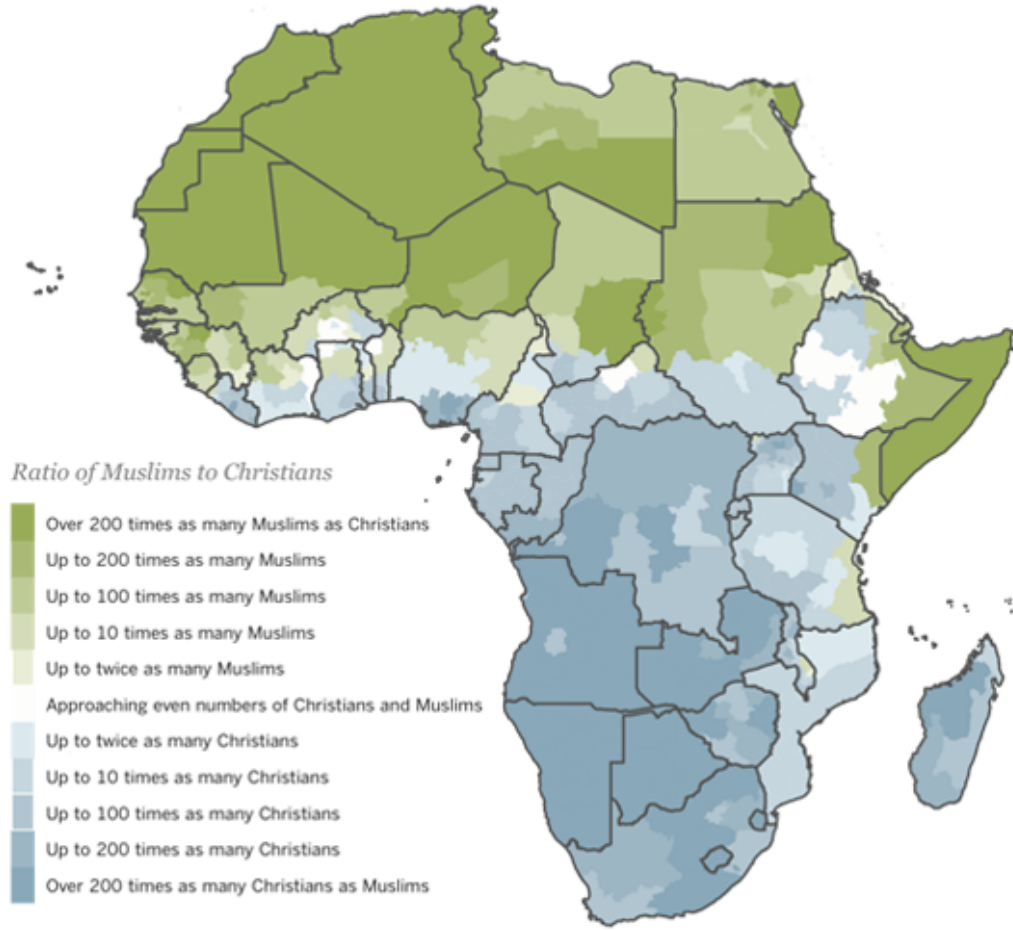


4.2 Map of Religion

The map to the below shows the different religions of Africa. The darker the shade the more concentrated a particular religion is.

Muslims and Christians in Africa

This map shows the ratio of Muslims to Christians in each country and province. The north is heavily Muslim, and the south is heavily Christian.



Sources: censuses, demographic and health surveys, and the World Religion Database
Pew Forum on Religion & Public Life, April 2010

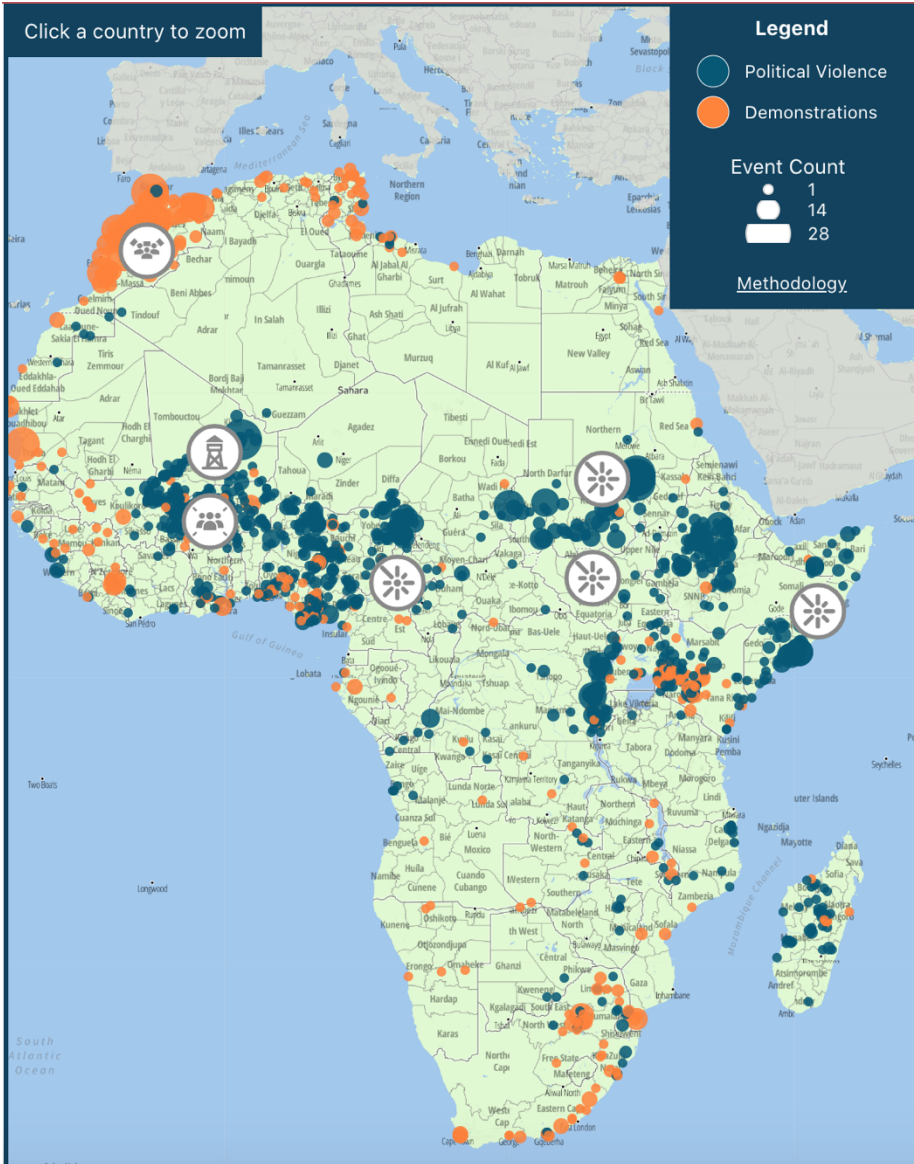
What parts of Africa are more Muslim? More Christian?

Compare this map to the map in section 4.1. What connection do you notice between them?



4.3 – Map of Conflict

The map to the right shows the different conflicts of Africa. The Blue Dots on the graph represent *political violence* which means active wars, battles, and general violence. The orange dots represent *demonstrations* which are not violent but are in danger of becoming violent.



Map From - <https://acleddata.com/2023/12/07/regional-overview-africa-november-2023/>

Answer the questions below based off the map above.

What parts of Africa have the most blue dots (political violence)?

Blank space for the student's answer to the first question.

Compare this map to the map in section 4.1. What connection do you notice between them?

Blank space for the student's answer to the second question.



Lesson 4.4 – The Berlin Conference

After watching the 4.4 video, answer the questions below.

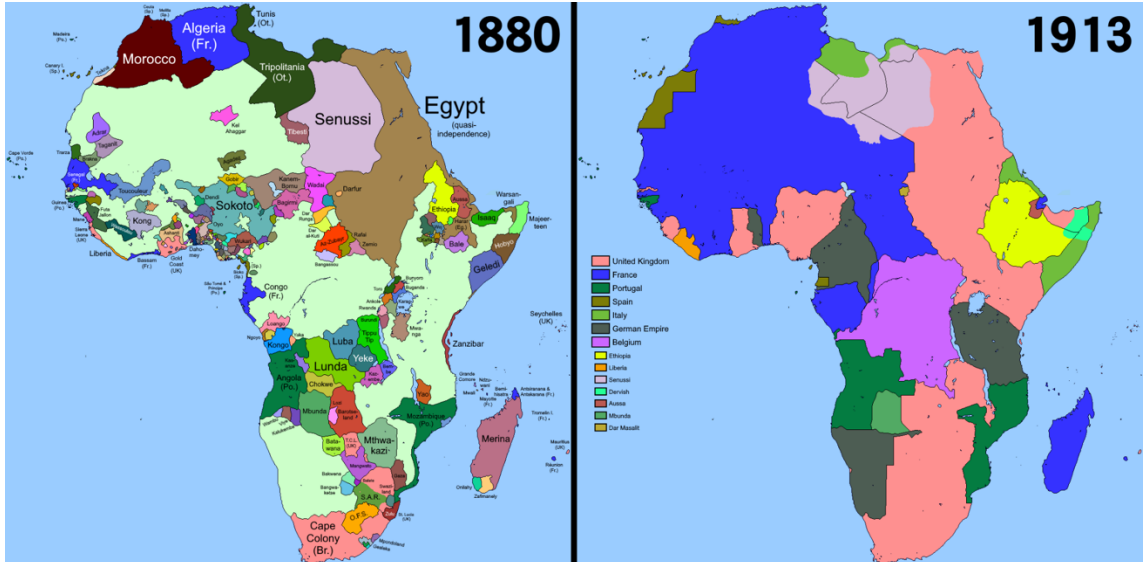
What was the “Scramble for Africa

Blank answer box

What made Ethiopia unique?

Blank answer box

4.5 – Africa Before and After the Scramble:



Answer the questions below based on the map above.

Compare the Map of 1880 to the map in 4.1. How do they compare?

Blank answer box

Compare the Map of 1913 Africa to the map on 4.1. How do they compare?

Blank answer box

How does ethnicity and new borders relate?

Blank answer box



4.6 Drawing Conclusions

Answer the following prompt in complete sentences.

Review over the maps and video from the previous lessons (4.1 - 4.5). Write a paragraph explaining why the maps are all related. Cite specific details from individual maps in your answer.

4.7 – The New Scramble (Bonus)

After watching the video answer the corresponding questions.

What is the new scramble for Africa?

What negative consequences might this have on the continent?



Link 4.4 –

