





Solve the division problems below.


	$9 \div 3 =$
---	--------------


	$14 \div 2 =$
--	---------------

	$20 \div 2 =$
--	---------------

	$10 \div 5 =$
--	---------------

	$6 \div 3 =$
--	--------------

	$16 \div 2 =$
--	---------------

	$4 \div 4 =$
---	--------------