


Two Times Tables

Count up the groups of 2 ice creams to master your two times table

1 x 2 = 

2 x 2 = 

3 x 2 = 

4 x 2 = 

5 x 2 = 

6 x 2 = 

7 x 2 = 

8 x 2 = 

9 x 2 = 

10 x 2 = 

11 x 2 = 

12 x 2 = 




GO TO [GLTC.CO.UK](https://www.gltc.co.uk) FOR MORE HOME LEARNING IDEAS

Here are some numbers counted up in 2's, can you fill in all the boxes?
The first two have been done for you...


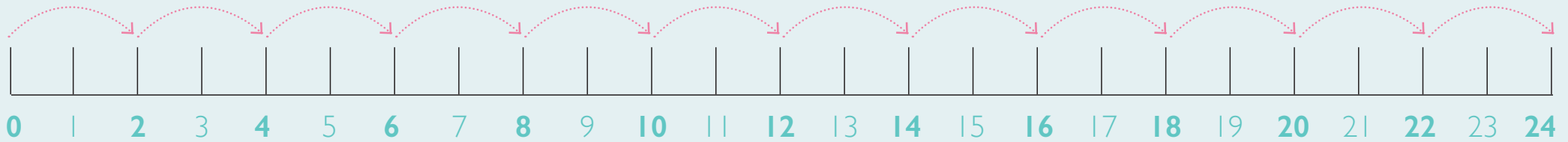
2 4 6 8 10 12 14 16 18 20 24

26 28



This is a number line.

Can you see how the pink line skips in counts of 2?




$3 \times 2 = 6$ Look! Rosie the sheep has skipped 3 counts of 2 to work out her sum.



How many skips has Daisy the cow done?

Can you write your own sum to match Daisy's skips of 2?

$$\square \times \square = \square$$



Now, using your counting in 2's knowledge, see if you can complete your two times table.

$1 \times 2 = \square$

$2 \times 2 = \square$

$3 \times 2 = \square$

$4 \times 2 = \square$

$5 \times 2 = \square$

$6 \times 2 = \square$

$7 \times 2 = \square$

$8 \times 2 = \square$

$9 \times 2 = \square$

$10 \times 2 = \square$

$11 \times 2 = \square$

$12 \times 2 = \square$



GO TO GLTC.CO.UK FOR MORE HOME LEARNING IDEAS