

RISOLVI IL TEST DEL QI

Esercizi per rafforzare il cervello!



Trova la lettera B in 30 secondi

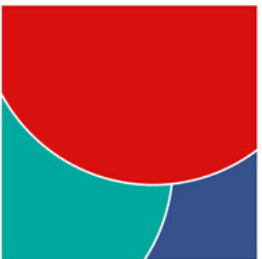
[illegible]

Cosa viene dopo?



?


A)



B)



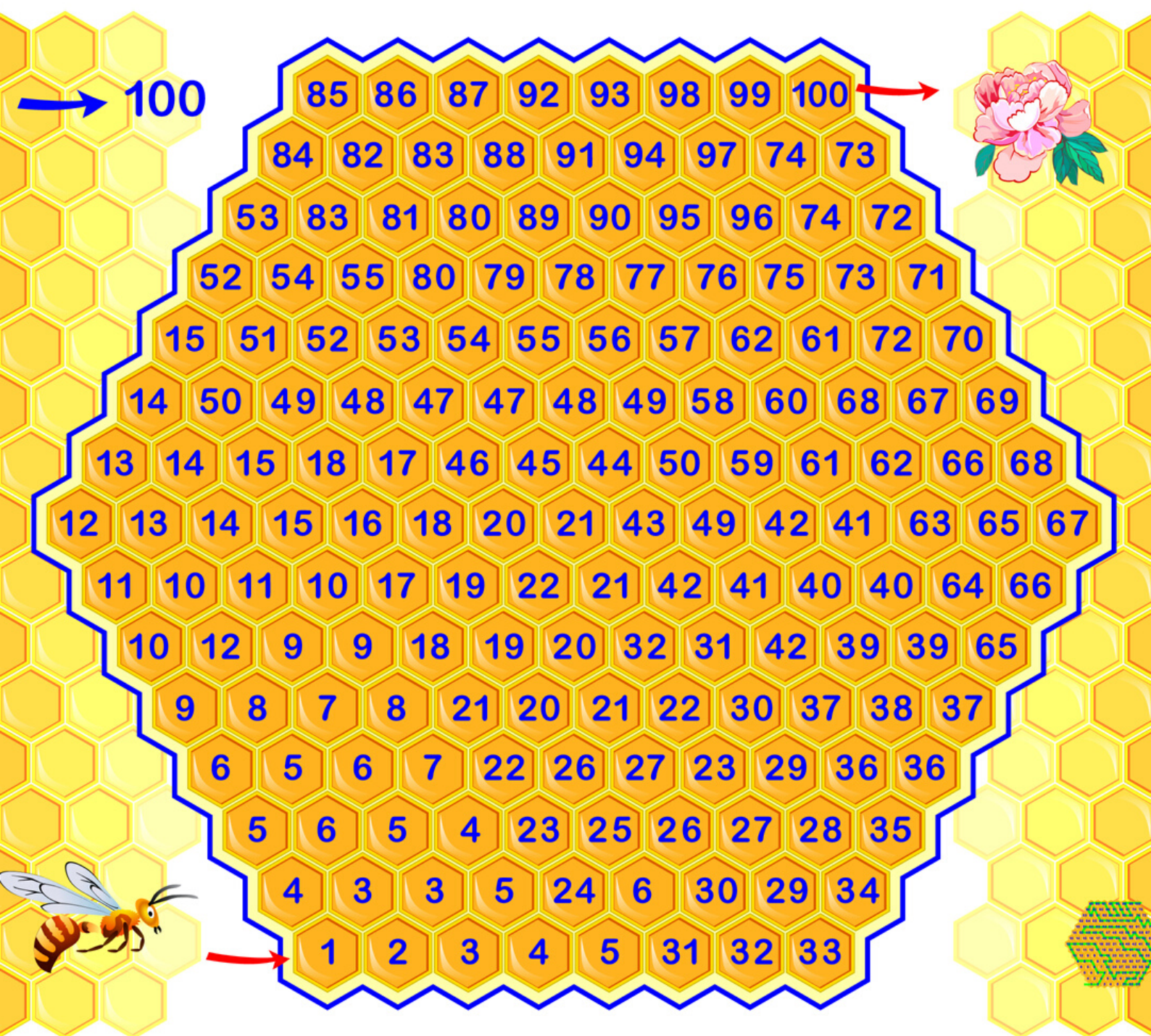
C)




D)



Trova il percorso da 1 a 100



Risolvi l'esempio e conta il valore della carta da gioco



$$6 \spadesuit \times 6 \heartsuit = 6 \clubsuit$$

$$6 \clubsuit + 6 \spadesuit = 6 \diamondsuit + 6 \diamondsuit$$

$$6 \diamondsuit + 6 \spadesuit = 6 \clubsuit - 6 \diamondsuit$$

$$6 \heartsuit \times 6 \diamondsuit = 6 \clubsuit + 6 \clubsuit + 6 \clubsuit$$

$$6 \clubsuit + 6 \diamondsuit + 6 \spadesuit + 6 \heartsuit = 23$$



$$6 \spadesuit = \bigcirc$$

$$6 \heartsuit = \bigcirc$$

$$6 \diamondsuit = \bigcirc$$

$$6 \clubsuit = \bigcirc$$

Conta il valore di un pezzo degli scacchi

$$\text{P} \times \text{C} = 3 \times \text{R} + \text{P}$$

$$\text{C} + \text{R} = \text{P} + \text{P}$$

$$\text{R} \times \text{P} = 8 \times \text{C} - \text{P}$$

$$\text{C} \times \text{P} = \text{R} + \text{P}$$



$$\text{R} =$$



1 2 3 4 5 6 7 8 9 10