









MATH EQUATIONS

Direction: Solve the equations. Find the value of each image and fill it.

$$\text{Heart} + \text{Star} + \text{Star} = 9$$

$$\text{Heart} + \text{Star} = 8$$

$$\text{Car} + \text{Car} + \text{Star} = 7$$

$$\text{Ice cream} + \text{Gift} + \text{Car} = 12$$

$$\text{Ice cream} + \text{Gift} = \text{Star} + \text{Cheese}$$





$$\text{Cheese} + \text{Gift} = 12$$











MATH EQUATIONS





Direction: Solve the equations. The 2x2 squares can help you find the values of each image. The numbers outside the 2x2 squares show what's the sum of each row and column. Try to fill all the missing numbers.





									

		6
		7
7	6	

		6
		11
2	15	

		12
		11
15	8	

		10
		18
16	12	

		11
		10
17	4	





		10
		15
9	16	







MATH EQUATIONS





Direction: Solve the equations. The 2x2 squares can help you find the values of each image. The numbers outside the 2x2 squares show what's the sum of each row and column. Try to fill all the missing numbers.





									





		15
		13
17	11	

		3
		9
5	7	

		13
		19
15	17	

		7
		12
9	10	

		10
		13
8	15	

		7
		13
8	12	