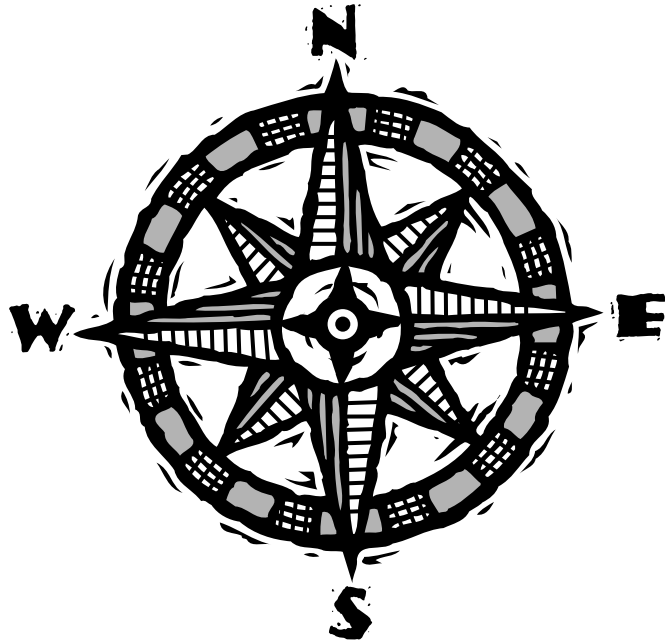


# Trail Guide to U.S. Geography



## GEOGRAPHY NOTEBOOK

by \_\_\_\_\_



## U.S. Geography Notebook

© 20\_\_\_\_\_ by \_\_\_\_\_

All rights reserved. This book may not be duplicated in any way without the expressed written consent of the author.



# TABLE OF CONTENTS

## New England States.....

Maine.....

Massachusetts.....

New Hampshire.....

Vermont.....

Connecticut.....

Rhode Island.....

## Mid-Atlantic States.....

New York.....

New Jersey.....

Pennsylvania.....

West Virginia.....

Maryland.....

Delaware.....

## Southern States.....

North Carolina.....

Virginia.....

Kentucky.....

Tennessee.....

South Carolina.....

Georgia.....

Alabama.....

Mississippi.....

Florida.....

Arkansas.....

Louisiana.....

## Midwest States.....

Ohio.....

Michigan.....

Indiana.....

Illinois.....

Wisconsin.....

Minnesota.....

Iowa.....

Missouri.....

North Dakota.....

South Dakota.....

Nebraska.....

Kansas.....

## Southwest States.....

Oklahoma.....

Texas.....

New Mexico.....

Arizona.....

## Rocky Mountain States.....

Montana.....

Idaho.....

Wyoming.....

Colorado.....

Utah.....

Nevada.....

## Pacific Coast States.....

Washington.....

Oregon.....

California.....

Alaska.....

Hawaii.....

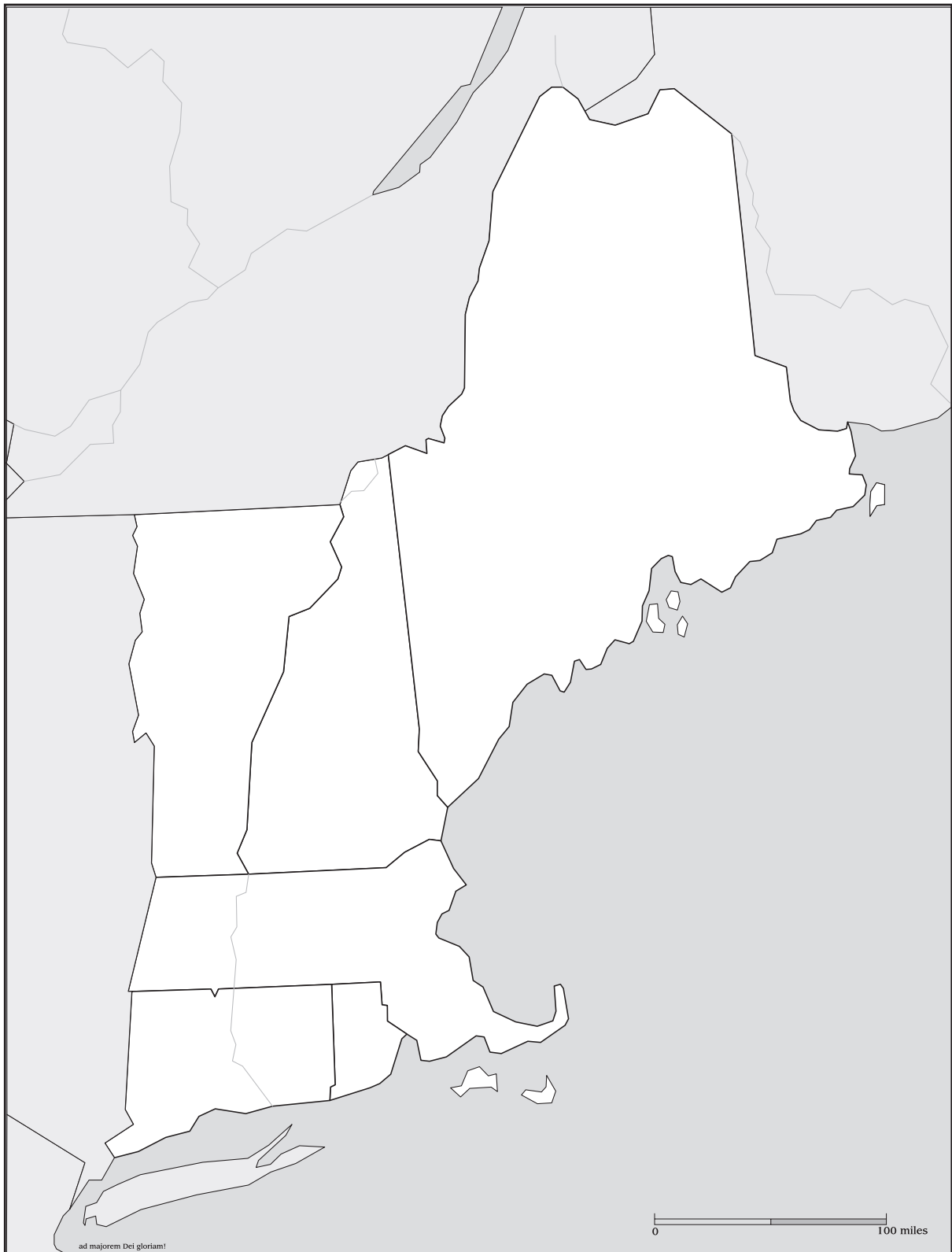
Lewis and Clark.....

Geography Dictionary.....

Vocabulary.....



# NEW ENGLAND STATES



# DRILLS & MAPPING

## Week 1 - New England States

### Day 1

What is Maine's state bird? \_\_\_\_\_

Name one river in Maine that flows into the Atlantic Ocean. \_\_\_\_\_

### Day 2

What river flows from Moosehead Lake to the Atlantic Ocean? \_\_\_\_\_

What is the only state that touches Maine? \_\_\_\_\_

### Day 3

Where in Massachusetts are the Berkshire Hills located? \_\_\_\_\_

What river flows into Boston Bay? \_\_\_\_\_

### Day 4

What five states border Massachusetts? \_\_\_\_\_

What is the highest point in Massachusetts? \_\_\_\_\_

## MAPPING

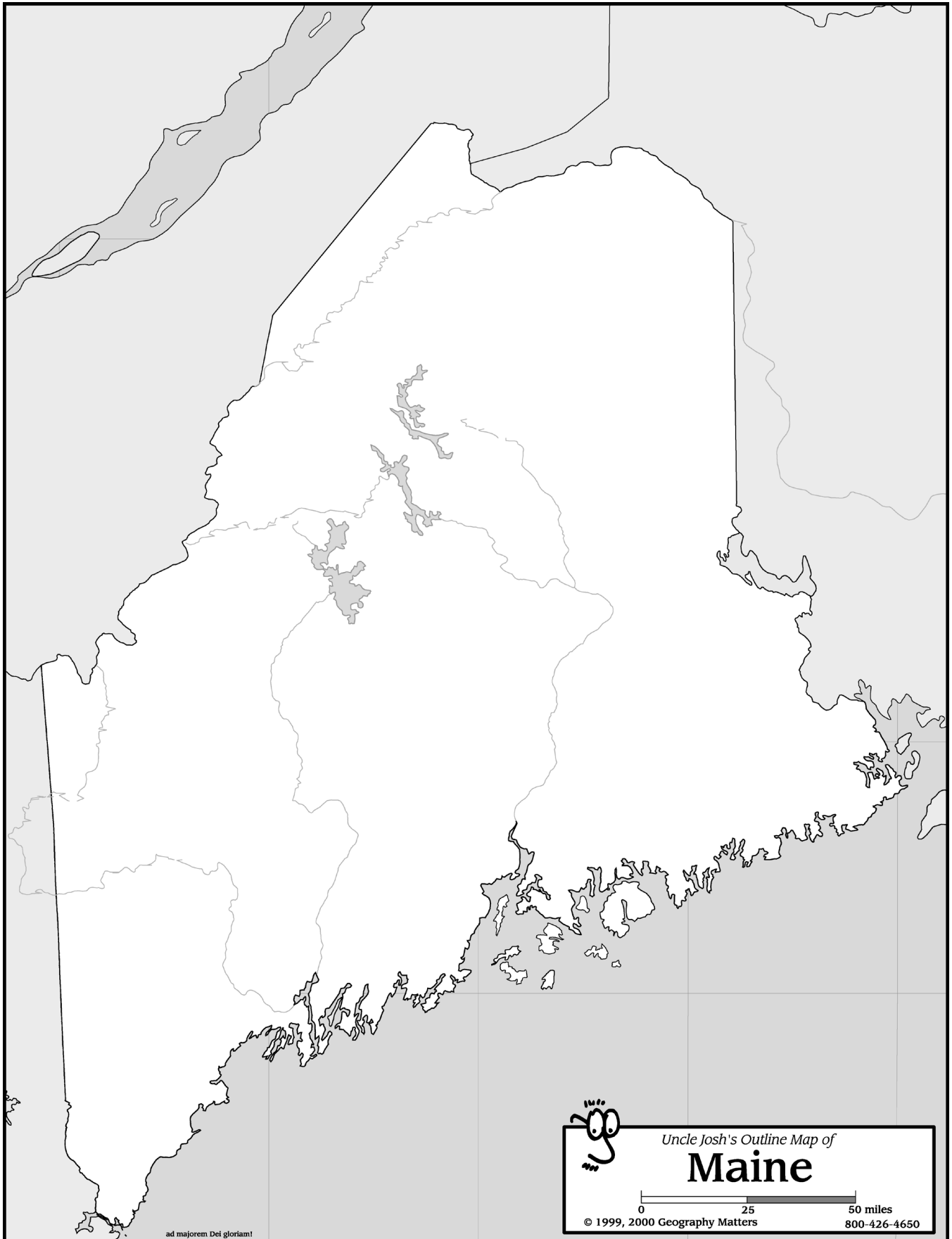
### Maine

- Place a brown triangle at Mount Katahdin and label its name and elevation.
- Draw and label the St. John, St. Croix, Kennebec, and Penobscot Rivers.
- Shade and label Moosehead and Sebago lakes.
- Label Canada, New Hampshire, and the Atlantic Ocean.
- Label Augusta, Portland, Eastport, Fort Kent, and Bangor.

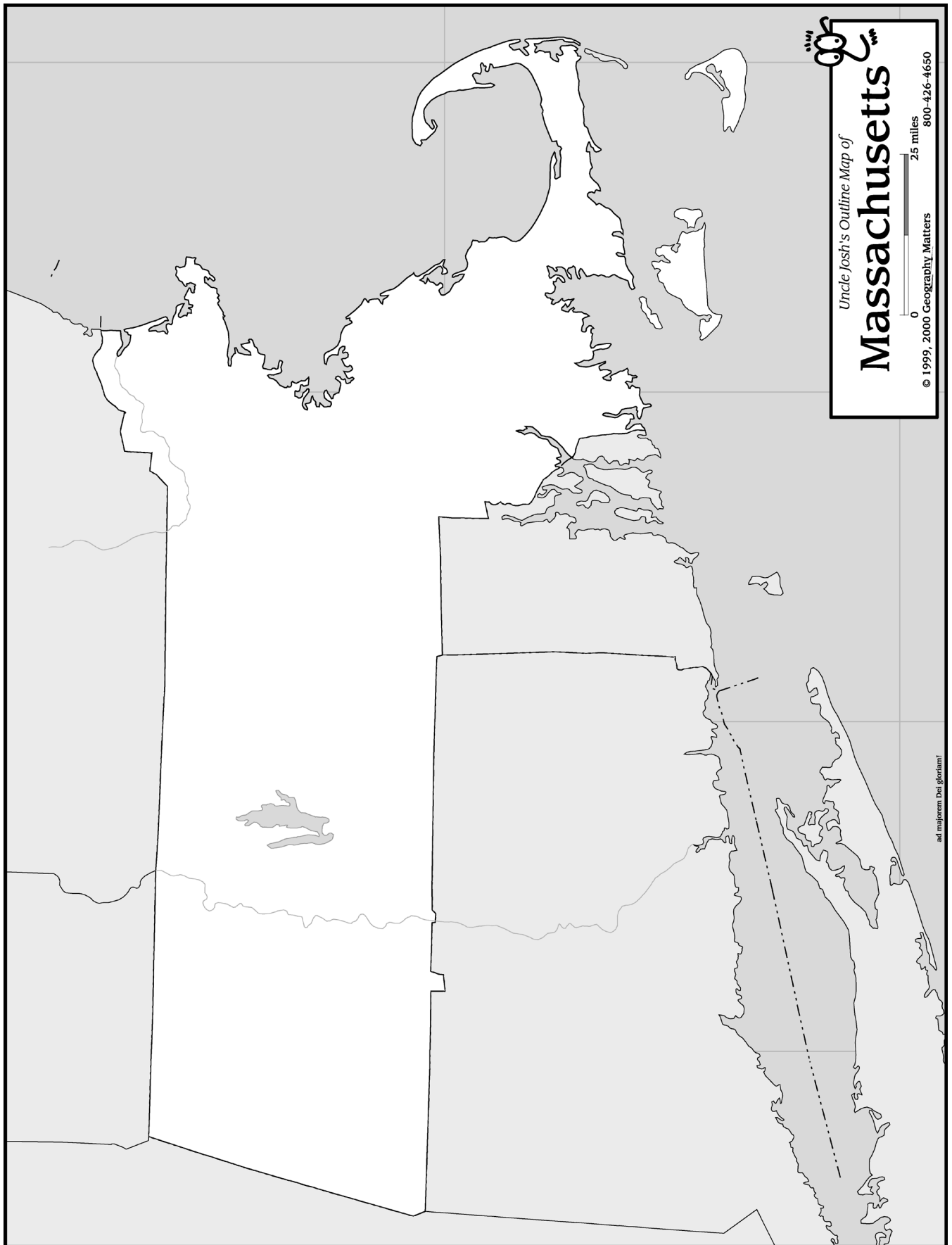


### Massachusetts

- Shade and label the Berkshire Hills.
- Place a brown triangle at Mount Greylock and label its name and elevation.
- Draw and label the Merrimack, Connecticut, Concord, and Charles Rivers.
- Label Cape Cod, Nantucket Sound, Martha's Vineyard, and Nantucket Island.
- Label New York, Vermont, New Hampshire, Rhode Island, Connecticut, and the Atlantic Ocean.
- Label Boston, Concord, Plymouth, Springfield, and Lexington.









# NATIVE AMERICANS



---

---

---

---

---

---


---

---

---

---

---



---

---

---

• Relationships with Colonists •

---

---

---

---

---

---

---

---

---

---

---

---

---

---

---

---

---

---

---

# DRILLS & MAPPING

## Week 2 - New England States

### Day 1

Name four cities in New Hampshire that lie along the Merrimack River? \_\_\_\_\_

\_\_\_\_\_

When it is noon in Denver, Colorado, what time is it in New Hampshire's state capital?  
(hint: see time zone map in the Appendix.) \_\_\_\_\_

### Day 2

What is the highest point in New Hampshire? \_\_\_\_\_

What northern New Hampshire lake crosses the boundary into Maine? \_\_\_\_\_

### Day 3

What lake forms the northwest boundary of Vermont? \_\_\_\_\_

What is the only New England state without a seacoast? \_\_\_\_\_

### Day 4

What river flows through the small town of Middlebury, Vermont? \_\_\_\_\_

The West River is a tributary (flows into) of what river? \_\_\_\_\_

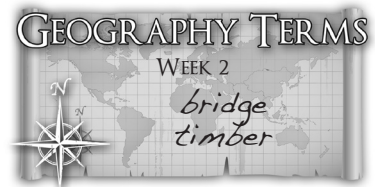
## MAPPING

### New Hampshire

- Place a brown triangle at Mount Washington and label its name and elevation.
- Shade and label Lake Winnepesaukee.
- Draw and label the Connecticut, Merrimack, and Pemigewasset Rivers.
- Label Canada, Maine, the Atlantic Ocean, Massachusetts, and Vermont.
- Label Concord, Dover, Portsmouth, Manchester, and Nashua.

### Vermont

- Place a brown triangle at Mount Mansfield and label its name and elevation.
- Shade and label Lake Champlain.
- Draw and label the Connecticut, Lamoille, and Winooski Rivers.
- Label Canada, New York, Massachusetts, and New Hampshire.
- Label Montpelier, Burlington, Middlebury, and Springfield.





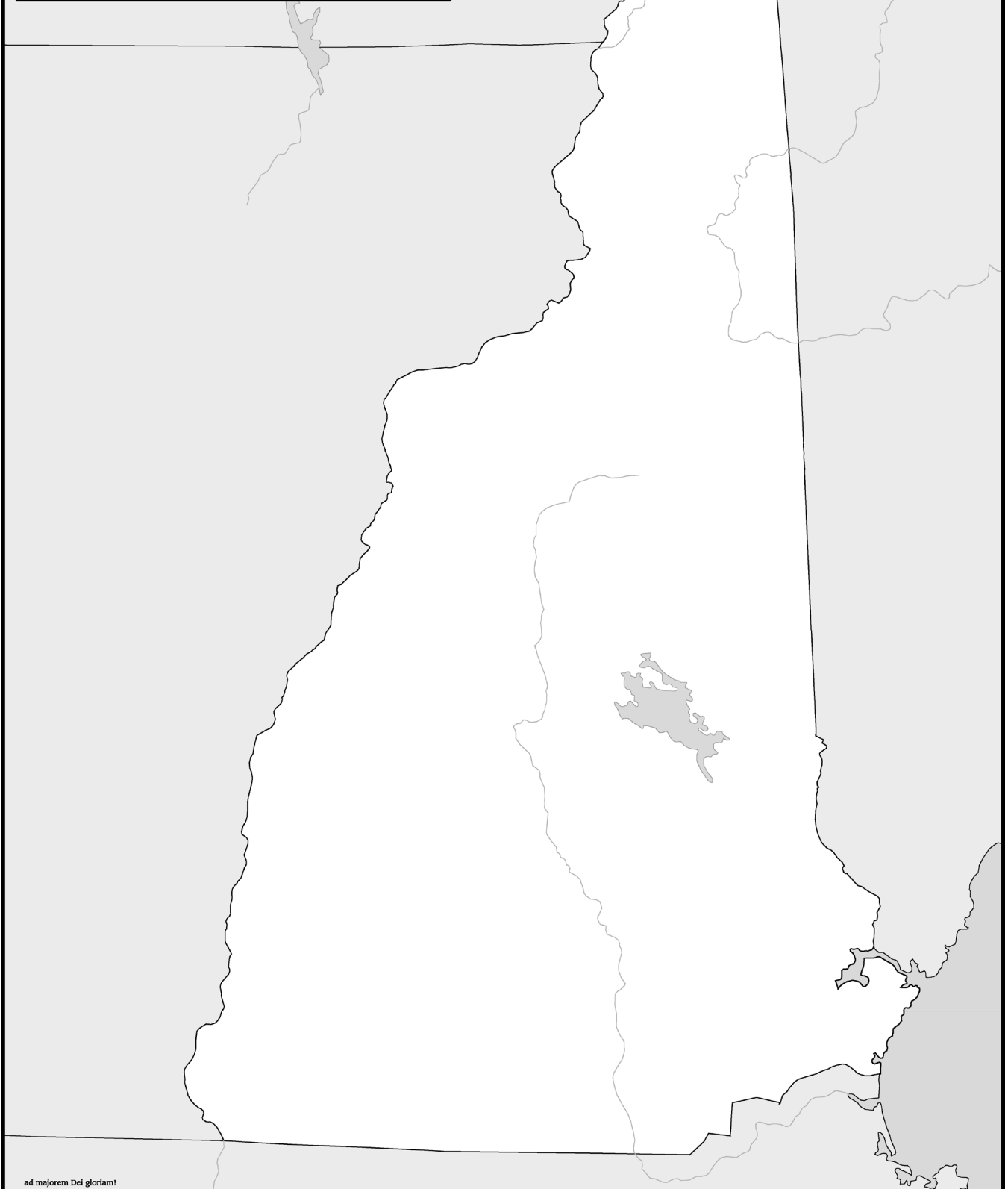
Uncle Josh's Outline Map of

# New Hampshire

0 25 50 miles

© 2004 Geography Matters

800-426-4650



ad majorem Dei gloriam!

# GRANITE

---

• Uses •

---

---

---

---

---

---

---

---

---

---

---

---

---

---

---

---

---

---

---

---

---

---

---

---

---

---

• How Granite is Quarried •

---

---

---

---

---

---

---

---

---

---

---

---

---

---

---

---

---

---

---

---

---


---

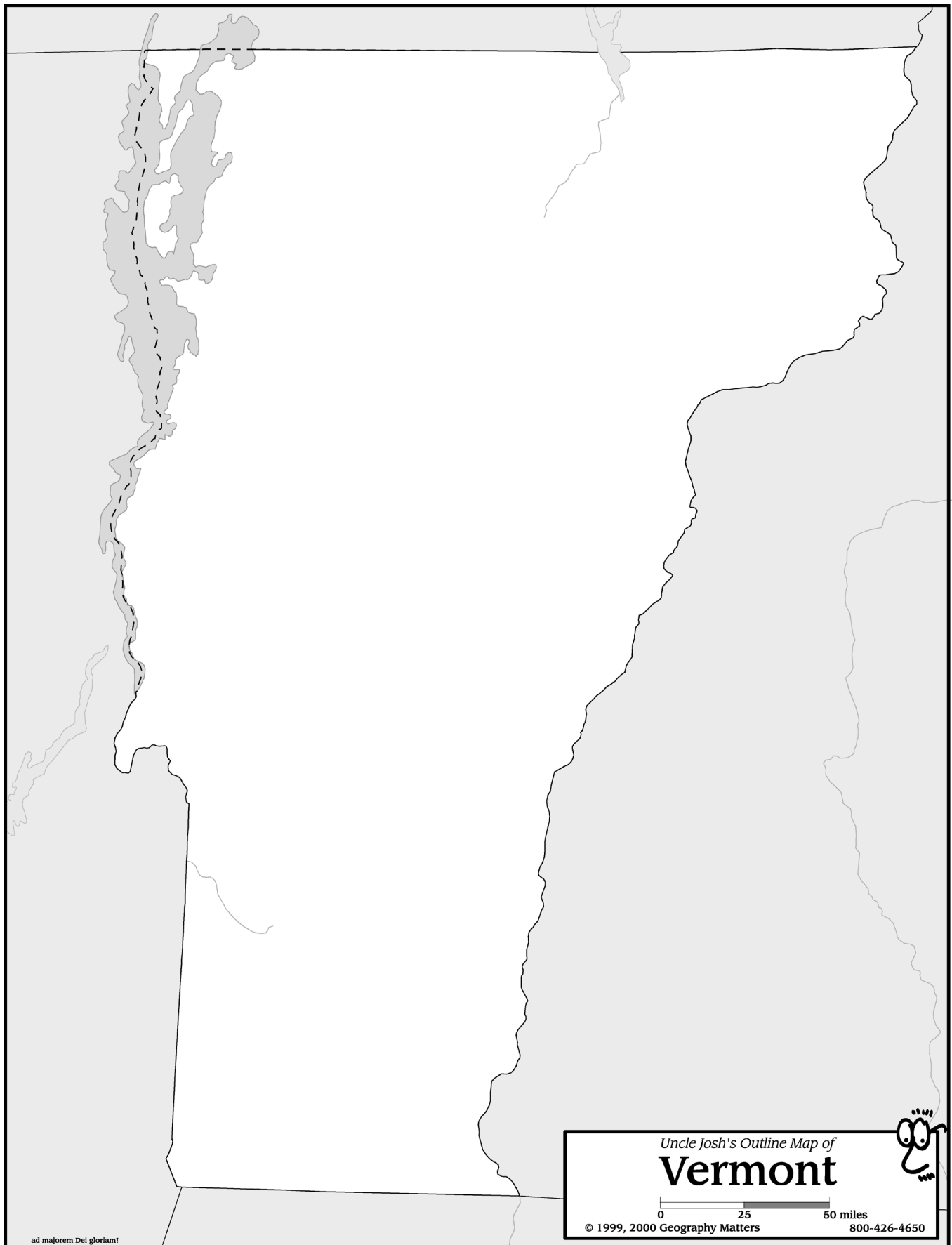
---

---

---

---





# TOWN MEETINGS

---

---

---

---

---

---

---

---

---

---

---


---

---

---

---

---



• Ethan Allen and the Green Mountain Boys •

---

---

---

---

---

---

---

---

---

---

---

---

---

---

---

---

---

---

---

---

---

---

---

---