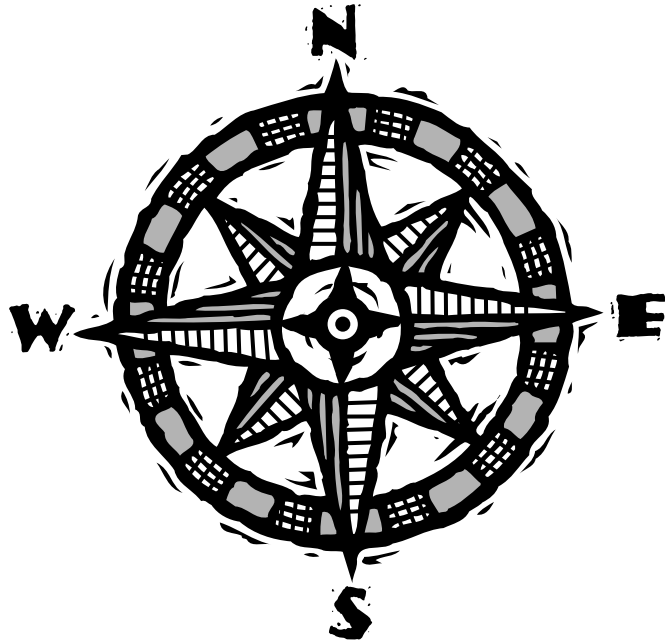


Trail Guide to U.S. Geography



GEOGRAPHY NOTEBOOK

by _____



U.S. Geography Notebook

© 20_____ by _____

All rights reserved. This book may not be duplicated in any way without the expressed written consent of the author.



TABLE OF CONTENTS

New England States.....

Maine.....

Massachusetts.....

New Hampshire.....

Vermont.....

Connecticut.....

Rhode Island.....

Mid-Atlantic States.....

New York.....

New Jersey.....

Pennsylvania.....

West Virginia.....

Maryland.....

Delaware.....

Southern States.....

North Carolina.....

Virginia.....

Kentucky.....

Tennessee.....

South Carolina.....

Georgia.....

Alabama.....

Mississippi.....

Florida.....

Arkansas.....

Louisiana.....

Midwest States.....

Ohio.....

Michigan.....

Indiana.....

Illinois.....

Wisconsin.....

Minnesota.....

Iowa.....

Missouri.....

North Dakota.....

South Dakota.....

Nebraska.....

Kansas.....

Southwest States.....

Oklahoma.....

Texas.....

New Mexico.....

Arizona.....

Rocky Mountain States.....

Montana.....

Idaho.....

Wyoming.....

Colorado.....

Utah.....

Nevada.....

Pacific Coast States.....

Washington.....

Oregon.....

California.....

Alaska.....

Hawaii.....

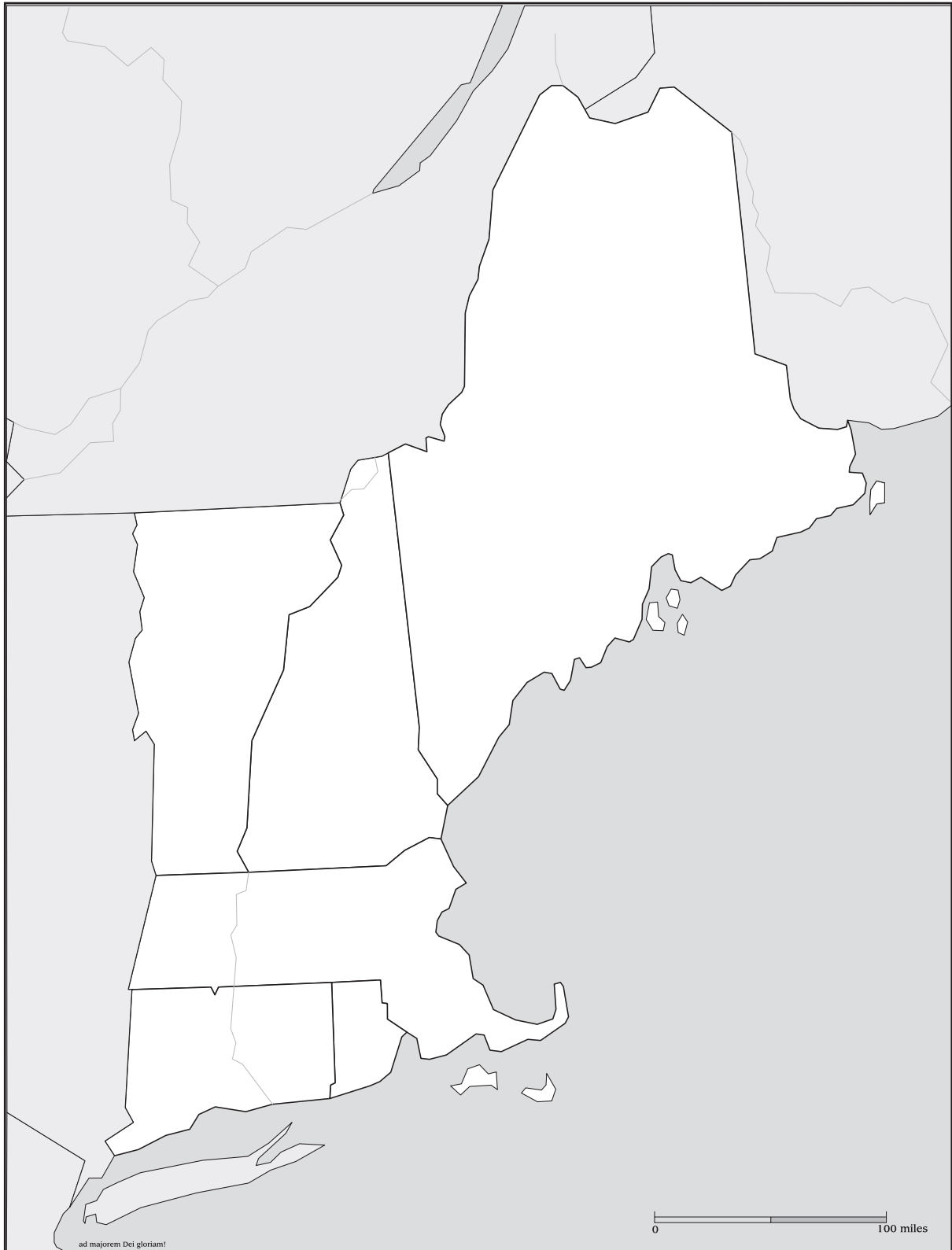
Lewis and Clark.....

Geography Dictionary.....

Vocabulary.....



NEW ENGLAND STATES



DRILLS & MAPPING

Week 1 - New England States

Day 1

What is the easternmost city in Maine and, therefore, in the United States? _____

Where does the Kennebec River originate? _____

Day 2

What rivers form boundaries between Maine and Canada? _____

What interstate highway connects Bangor, Maine, to the state's capital? _____

Day 3

The Connecticut River Basin flows through which part of Massachusetts: east, south, north, or west?

What body of water lies between Cape Cod, Nantucket Island, and Martha's Vineyard? _____

Day 4

What interstate highway runs east and west through Massachusetts? _____

About how many miles would you travel going from Worcester, Massachusetts, to the state capital?

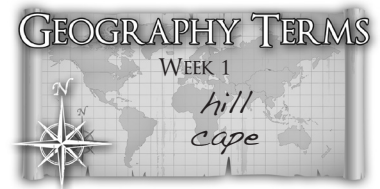
MAPPING

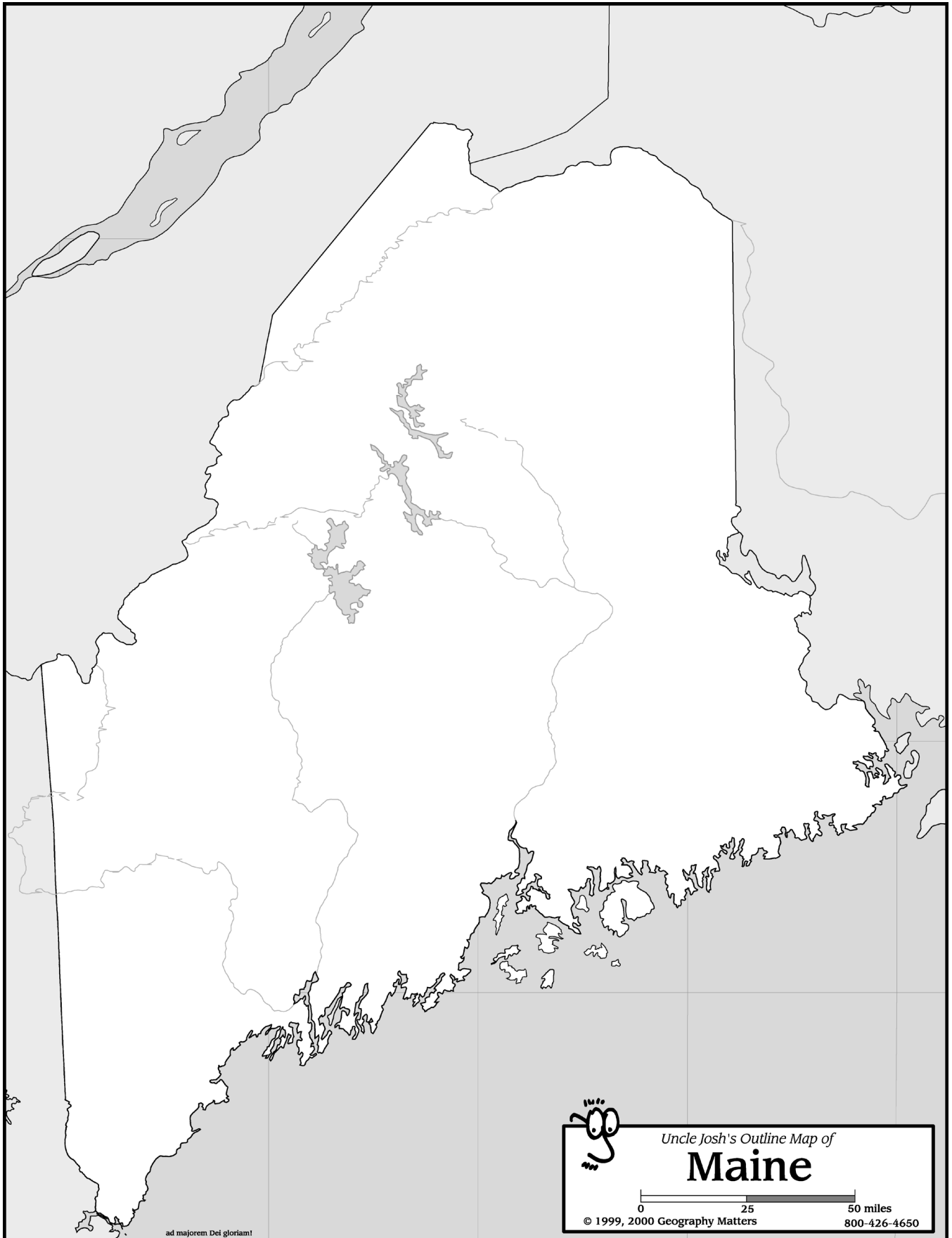
Maine

- Place a brown triangle at Mount Katahdin and label its name and elevation.
- Draw and label the St. John, St. Croix, Kennebec, and Penobscot Rivers.
- Shade and label Moosehead, Sebago, Chamberlain and Chiputneticook lakes.
- Shade and label the Appalachian, Katahdin, and Blue Mountains.
- Label Canada, New Hampshire, and the Atlantic Ocean.
- Label Augusta, Portland, Eastport, Fort Kent, Bangor, Kennebunk and Bar Harbor.

Massachusetts

- Shade and label the Berkshire Hills and Quabbin Reservoir
- Place a brown triangle at Mount Greylock and label its name and elevation.
- Draw and label the Merrimack, Connecticut, Concord, and Charles Rivers.
- Label Cape Cod, Nantucket Sound, Martha's Vineyard, and Nantucket Island.
- Label Buzzards Bay, Cape Cod Bay, Boston Bay, and Massachusetts Bay.
- Label New York, Vermont, New Hampshire, Rhode Island, Connecticut, and the Atlantic Ocean.
- Label Boston, Concord, Plymouth, Springfield, and Lexington.





ad majorem Dei gloriam!



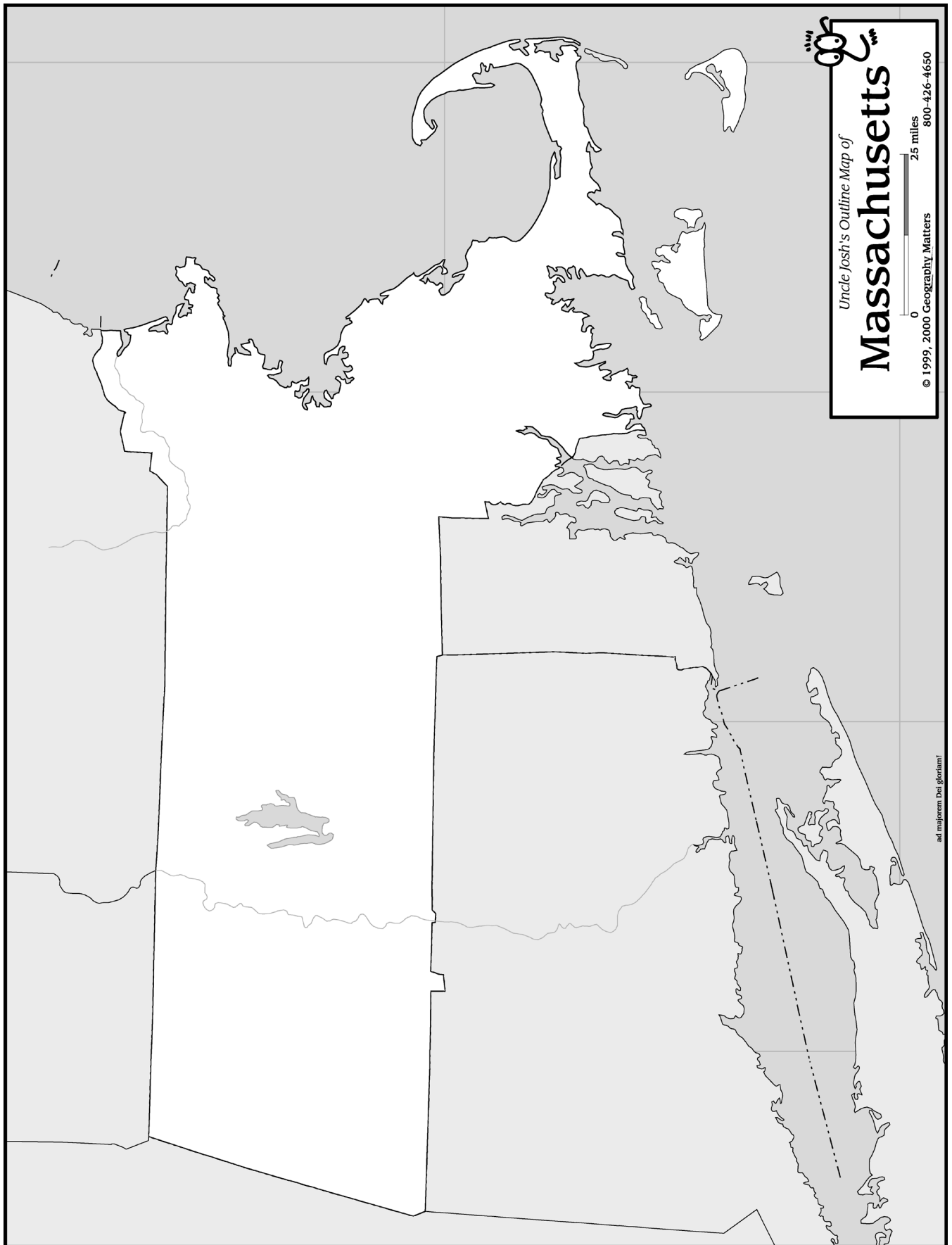
Uncle Josh's Outline Map of

Maine

0 25 50 miles

© 1999, 2000 Geography Matters

800-426-4650



Uncle Josh's Outline Map of

Massachusetts

© 1999, 2000 Geography Matters 800-426-4650


0 25 miles

ad majorem Dei gloriam

INDUSTRIAL REVOLUTION



- Textile Mills & Factories •



DRILLS & MAPPING

Week 2 - New England States

Day 1

What body of water forms the western boundary of New Hampshire? _____

Franklin Falls Reservoir protects communities from the flooding of what river? _____

Day 2

How does the weather contribute to New Hampshire's winter economy? _____

What is the largest lake in New Hampshire and how many miles would you travel to cross it directly from east to west? _____

Day 3

What lake lies about 46 miles northeast of the highest point in Vermont? _____

What interstate winds along the Connecticut River through nearly three-fourths of Vermont's eastern boundary? _____

Day 4

What physical feature nearly splits Vermont into eastern and western halves? _____

What river helps forms a pass through the Green Mountains between Burlington, Vermont, and the state's capital city? _____

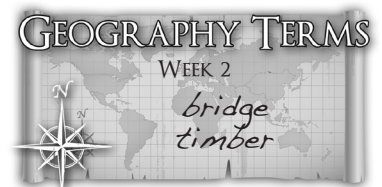
MAPPING

New Hampshire

- Place a brown triangle at Mount Washington and label its name and elevation.
- Shade and label Lake Winnepesaukee, Umbagog Lake and Franklin Falls Reservoir.
- Shade and label the White Mountains.
- Draw and label the Connecticut, Merrimack, and Pemigewasset Rivers.
- Label Canada, Maine, the Atlantic Ocean, Massachusetts, and Vermont.
- Label Concord, Dover, Portsmouth, Manchester, and Nashua.

Vermont

- Place a brown triangle at Mount Mansfield and label its name and elevation.
- Shade and label Lake Champlain and Lake Memphremagog.
- Shade and label the Green Mountains.
- Draw and label the Connecticut, Lamoille, and Winooski Rivers.
- Label Canada, New York, Massachusetts, and New Hampshire.
- Label Montpelier, Burlington, Middlebury, and Springfield.





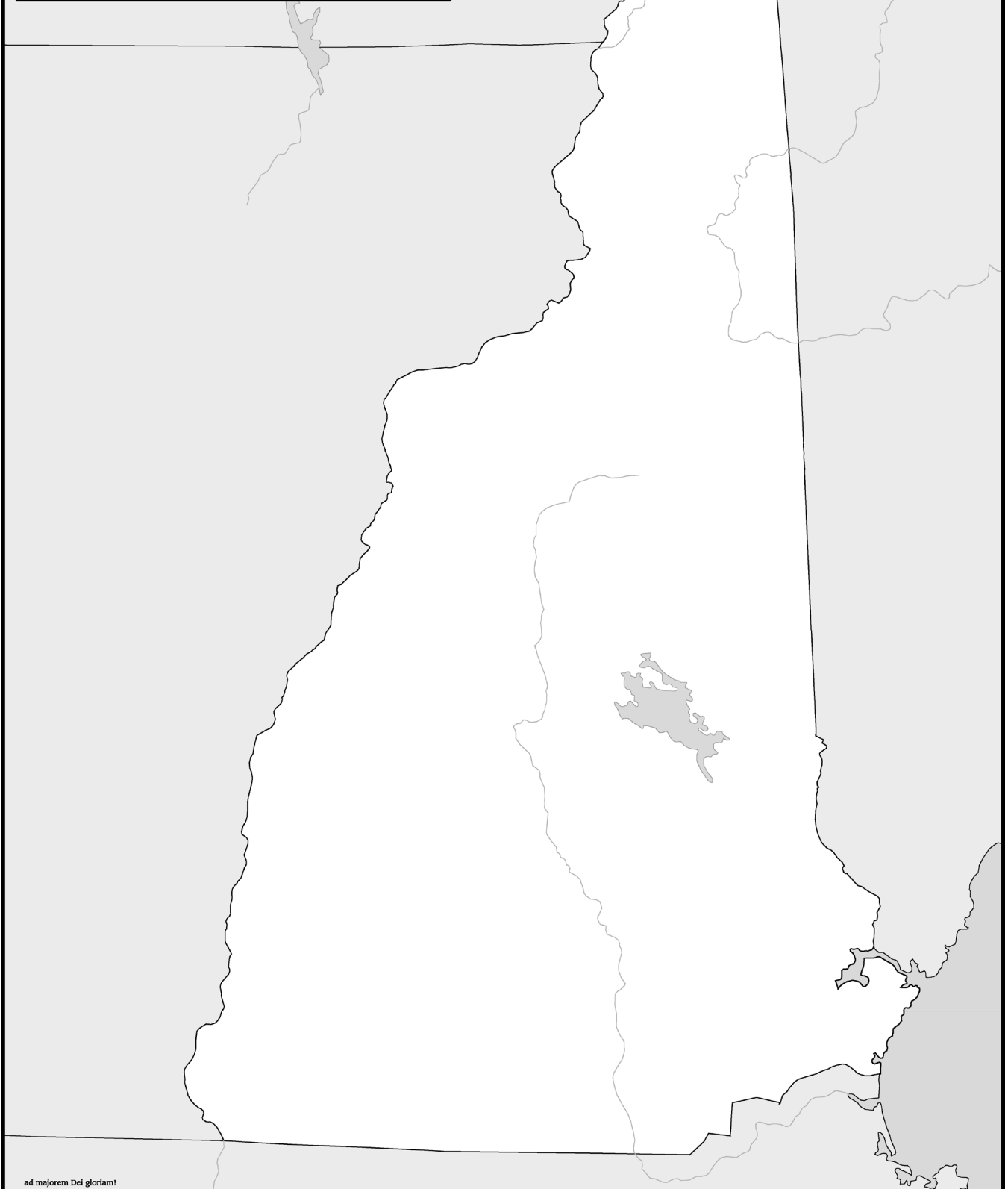
Uncle Josh's Outline Map of

New Hampshire

0 25 50 miles

© 2004 Geography Matters


800-426-4650



ad majorem Dei gloriam!

GOVERNMENT & POLITICS

• Constitution •




• Presidential Primary •






QUARRIES

• Granite Quarries •



• Marble Quarries •



• Effect on the Economy •
