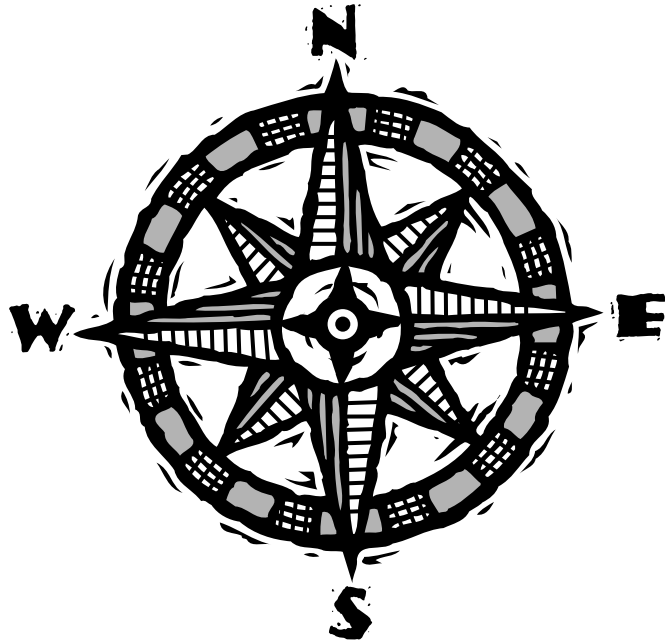


Trail Guide to U.S. Geography



GEOGRAPHY NOTEBOOK

by _____



U.S. Geography Notebook

© 20_____ by _____

All rights reserved. This book may not be duplicated in any way without the expressed written consent of the author.



TABLE OF CONTENTS

New England States.....

Maine.....

Massachusetts.....

New Hampshire.....

Vermont.....

Connecticut.....

Rhode Island.....

Mid-Atlantic States.....

New York.....

New Jersey.....

Pennsylvania.....

West Virginia.....

Maryland.....

Delaware.....

Southern States.....

North Carolina.....

Virginia.....

Kentucky.....

Tennessee.....

South Carolina.....

Georgia.....

Alabama.....

Mississippi.....

Florida.....

Arkansas.....

Louisiana.....

Midwest States.....

Ohio.....

Michigan.....

Indiana.....

Illinois.....

Wisconsin.....

Minnesota.....

Iowa.....

Missouri.....

North Dakota.....

South Dakota.....

Nebraska.....

Kansas.....

Southwest States.....

Oklahoma.....

Texas.....

New Mexico.....

Arizona.....

Rocky Mountain States.....

Montana.....

Idaho.....

Wyoming.....

Colorado.....

Utah.....

Nevada.....

Pacific Coast States.....

Washington.....

Oregon.....

California.....

Alaska.....

Hawaii.....

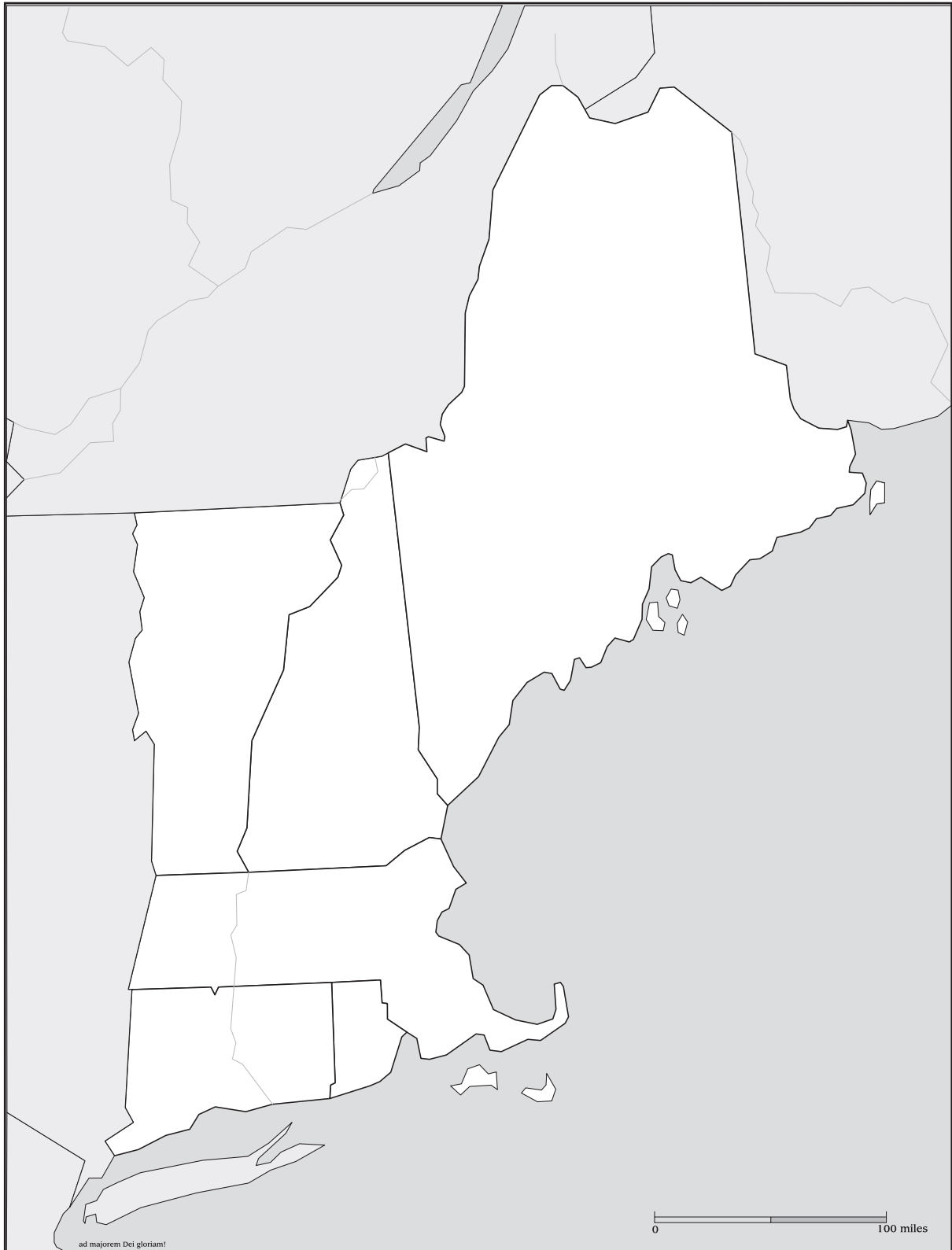
Lewis and Clark.....

Geography Dictionary.....

Vocabulary.....



NEW ENGLAND STATES



DRILLS & MAPPING

Week 1 - New England States

❖ Day 1

What is the capital of Maine? _____

What country is north of Maine? _____

❖ Day 2

What mountains make up the central part of Maine? _____

Maine's jagged coastline is longer than California's; what ocean forms the boundary of this coastline? _____

❖ Day 3

What is the capital of Massachusetts? _____

What two states lie on Massachusetts' northern border? _____

❖ Day 4

What bay forms a border for Boston, Massachusetts? _____

What Massachusetts cape juts into the Atlantic Ocean? _____

MAPPING

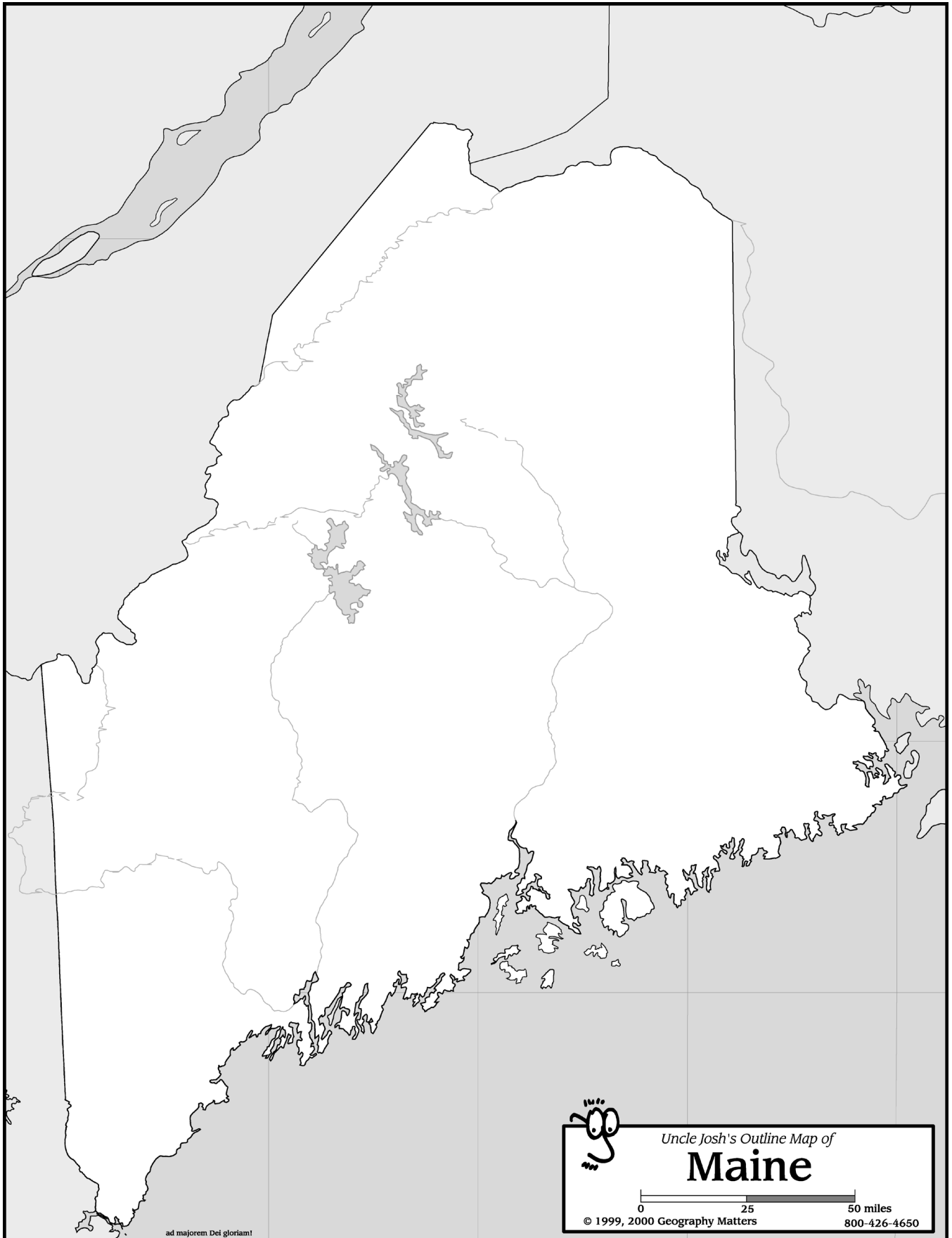
Maine

- Draw and label the Kennebec River.
- Label Canada, New Hampshire, and the Atlantic Ocean.
- Label Augusta with a star.




Massachusetts

- Draw and label the Connecticut and Charles Rivers.
- Label New York, Vermont, New Hampshire, Rhode Island, Connecticut, and the Atlantic Ocean.
- Label Boston with a star.

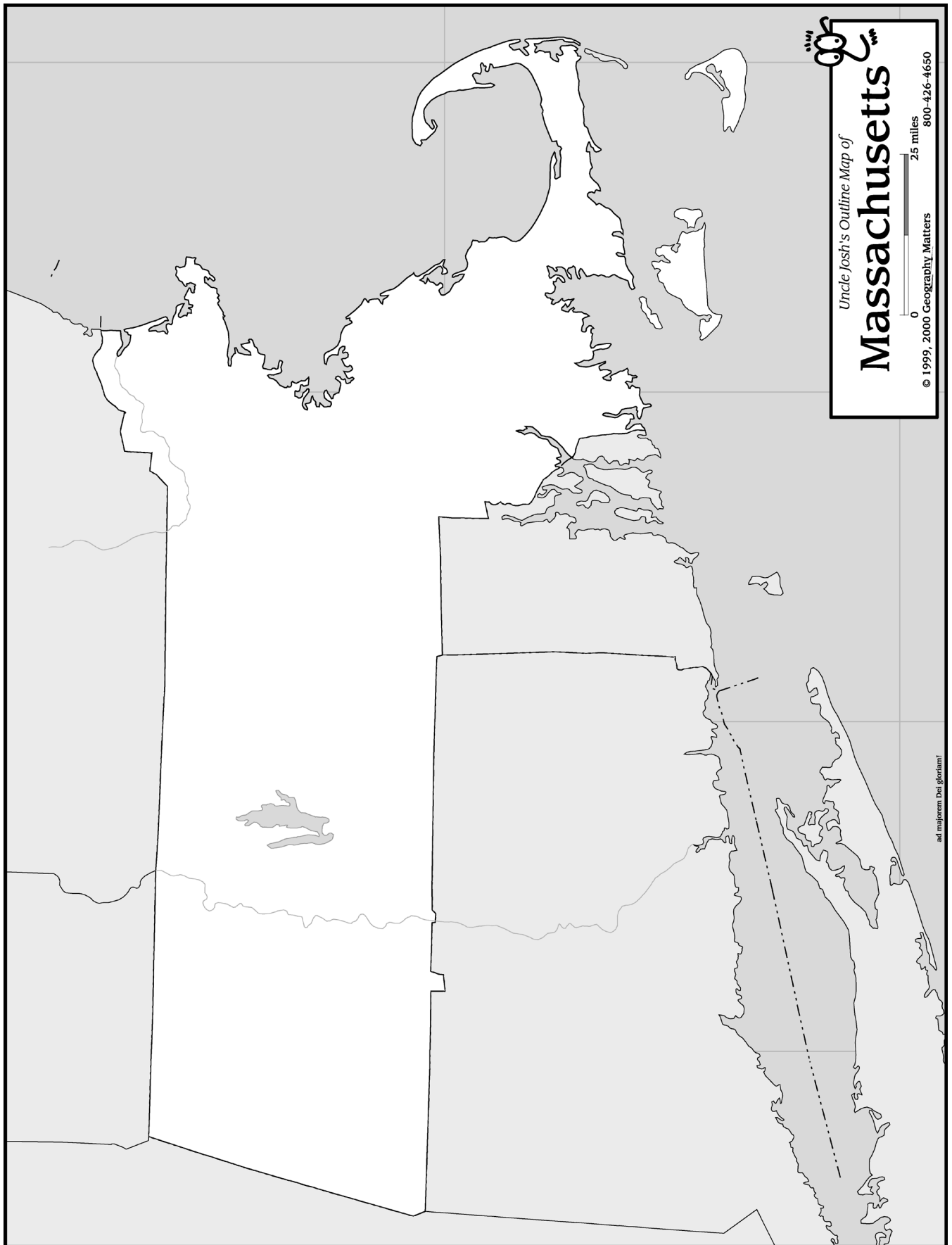


LIGHTHOUSES

- Portland Head Light •



- Lighthouse Keeper Journal •



Uncle Josh's Outline Map of

Massachusetts

0 25 miles
© 1999, 2000 Geography Matters 800-426-4650

ad majorem Dei gloriam

NATIVE AMERICANS IN MASSACHUSETTS

Colonists _____

Native Americans _____

DRILLS & MAPPING

Week 2 - New England States

❖ Day 1

What ocean forms part of the boundary of New Hampshire? _____

What is New Hampshire's state bird? _____

❖ Day 2

What river flows through Concord, New Hampshire's capital city?

What country is north of New Hampshire? _____

❖ Day 3

What mountain range runs north and south through Vermont? _____

What state forms the southern boundary of Vermont? _____

❖ Day 4

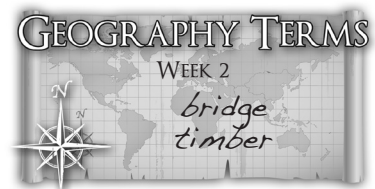
What lake forms part of Vermont's western boundary with New York?

What is the capital of Vermont? _____

MAPPING

New Hampshire

- Draw and label the Connecticut and Merrimack Rivers.
- Label Canada, Maine, the Atlantic Ocean, Massachusetts, and Vermont.
- Label Concord with a star.



Vermont

- Draw and label the Connecticut River.
- Label Canada, New York, Massachusetts, and New Hampshire.
- Label Montpelier with a star.



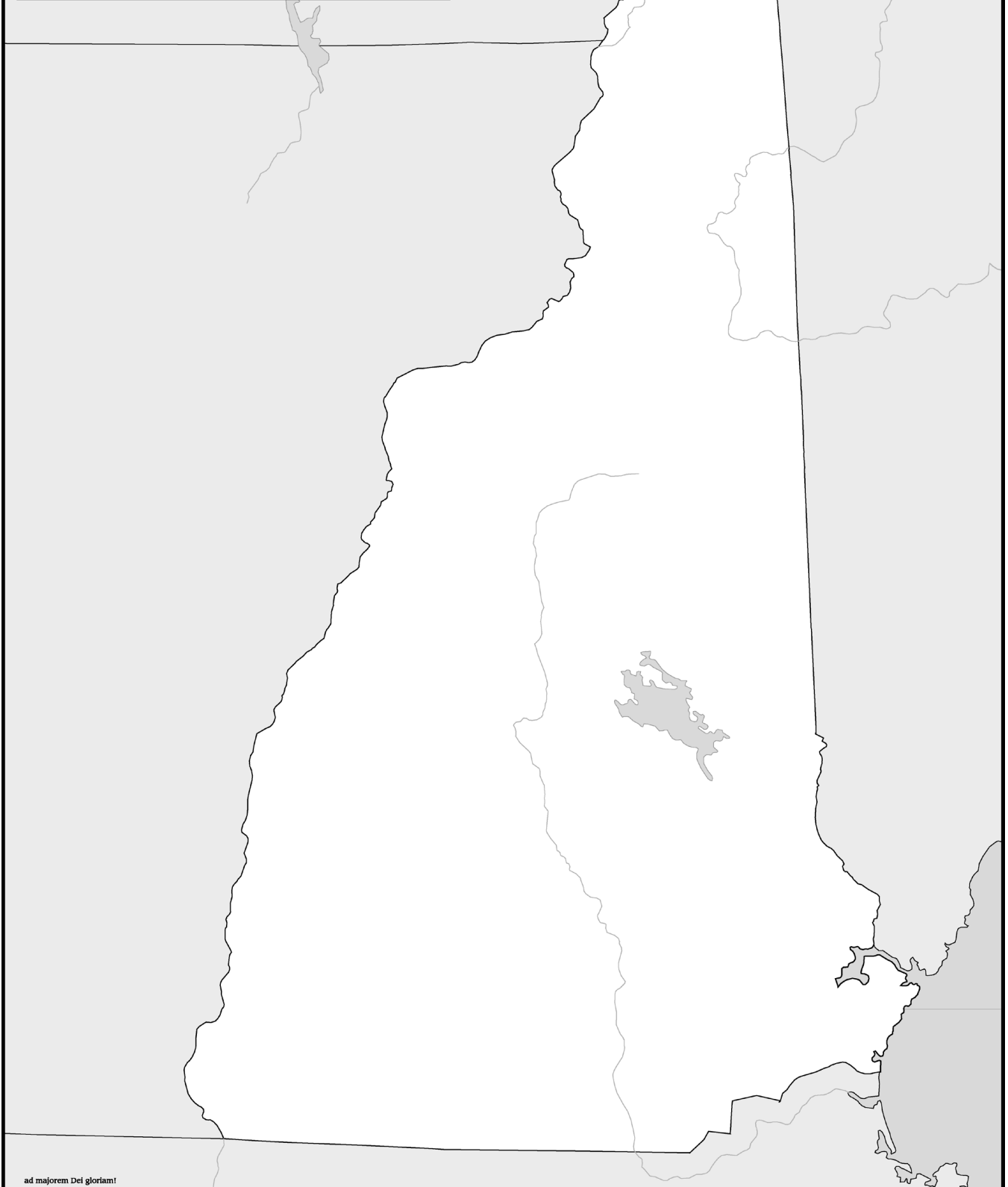
Uncle Josh's Outline Map of

New Hampshire

0 25 50 miles

© 2004 Geography Matters

800-426-4650



ad majorem Dei gloriam!

OLD MAN OF THE MOUNTAIN

Size: _____

Type of Rock: _____

