


# Trail Guide to World Geography



## GEOGRAPHY NOTEBOOK

by \_\_\_\_\_



# Geography Notebook

© 20\_\_\_\_\_ by \_\_\_\_\_

All rights reserved. This book may not be duplicated in any way without the expressed written consent of the author.



# TABLE OF CONTENTS

World

---

---

North America

---

---

---

---

South America

---

---

Europe

---

---

---

---

Africa

---

---

---

---

---

Asia

---

---

Oceania

---

---


Antarctica

---

---



# WORLD



# GEOGRAPHY TRAILS

## Week 1 - World

### Day 1

- YY What is a globe? \_\_\_\_\_  
What shape is it? \_\_\_\_\_

### Day 2

- YY What are the earth's largest bodies of land called? \_\_\_\_\_  
What are the earth's largest bodies of water called? \_\_\_\_\_

### Day 3

- YY Name each continent. \_\_\_\_\_  
\_\_\_\_\_  
\_\_\_\_\_  
On what continent do you live? \_\_\_\_\_

### Day 4

- YY What imaginary parallel lines run east and west around the globe? \_\_\_\_\_  
What is the name given to the  $0^\circ$  line of latitude that divides the earth into northern and southern hemispheres? \_\_\_\_\_

## MAPPING

### World

- Outline the borders of each of the seven continents. Label with BLACK and print with all CAPS.
- Mark the equator with a dotted line. Label with  $0^\circ$  in the left and right margins (borders) of the map. Write "Equator" on the dotted line.





*Uncle Josh's Outline Map of*  
**World**  
with countries  
© 1999 Geography Matters, Inc. 800-426-4650



# GRID GAME

	1	2	3	4	5	6	7	8
A	Q	S	D	X	G	C	N	E
B	P	D	A	M	Z	V	E	M
C	C	S	W	P	F	L	B	R
D	O	T	O	E	O	G	K	N
E	D	X	A	F	R	I	H	J
F	R	L	W	J	U	T	I	J
G	T	B	M	B	V	H	Y	U

$\overline{B2}$   $\overline{F1}$   $\overline{B7}$   $\overline{E3}$   $\overline{B4}$        $\overline{G4}$   $\overline{E6}$   $\overline{A5}$

---

	1	2	3	4	5	6	7	8
A								
B								
C								
D								
E								
F								
G								

---



# CHART OF WORLD FACTS

The circumference of the earth	
The diameter of the earth	
The distance between the earth and the sun	
The distance between the earth and the moon:	
The highest point on earth	
The lowest point on earth	
The highest temperature ever recorded and where	
The lowest temperature ever recorded and where	





# GEOGRAPHY TRAILS

## Week 2 - World

### Day 1

YY Name the oceans of the world. \_\_\_\_\_  
\_\_\_\_\_  
\_\_\_\_\_

Which ocean touches the eastern boundary of the United States? \_\_\_\_\_

### Day 2

YY What imaginary lines run north and south on maps and globes? \_\_\_\_\_  
What is the name of the 0° line of longitude that divides the earth into eastern and western hemispheres? \_\_\_\_\_

### Day 3

YY What symbol on a map represents a river? \_\_\_\_\_  
What color is often used on a map to represent water? \_\_\_\_\_

### Day 4

YY What oceans touch the border of the continent of Australia? \_\_\_\_\_  
\_\_\_\_\_  
What continent is closest to Antarctica? \_\_\_\_\_

See "Notes on oceans" on p33 of teacher's manual.

## MAPPING

### Add to World Map

- Label the oceans. Use BLUE and print with all CAPS.

## GEOGRAPHY TERMS

- hemisphere



# VOLCANOES

---

---

---

---

---

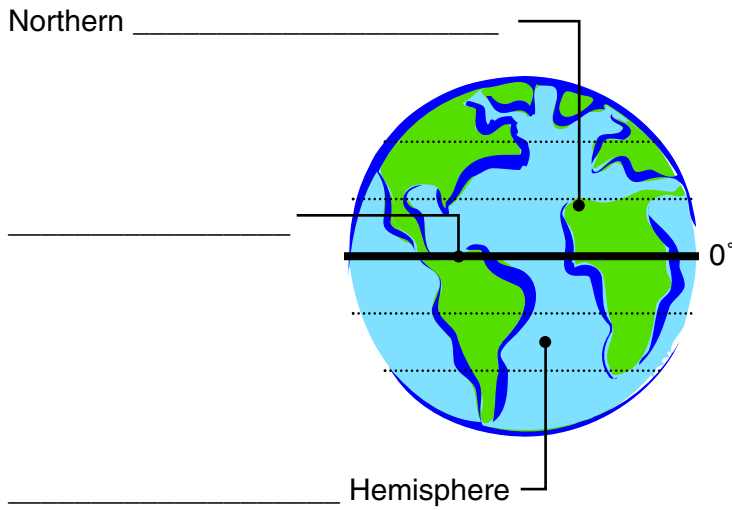
---

---

---



# THE EARTH



LATITUDE

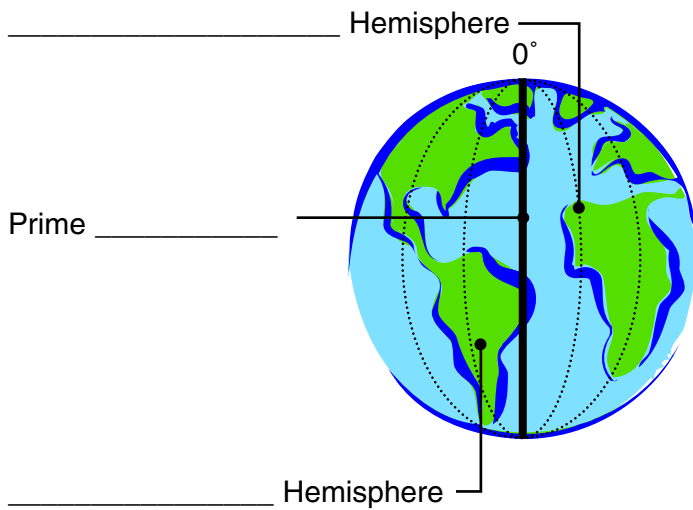
---

---

---

---

---



LONGITUDE

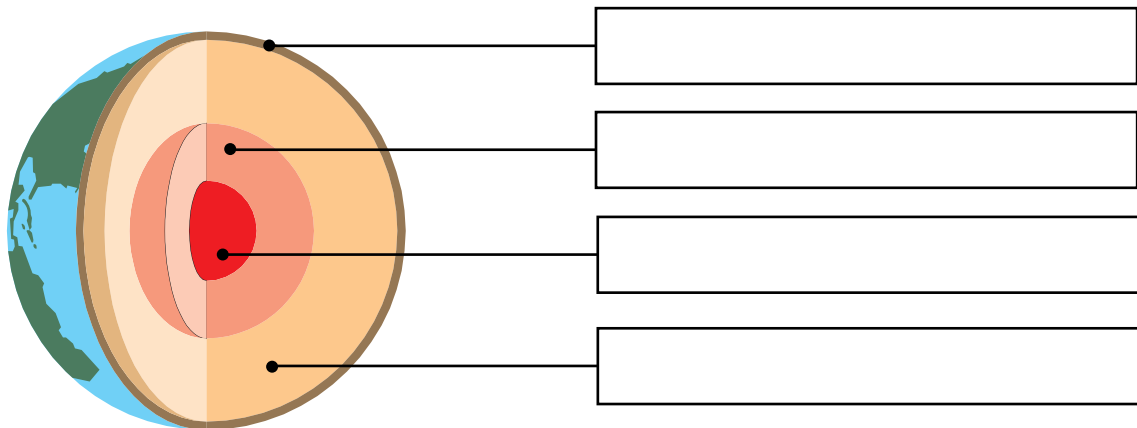
---

---

---

---

---




Note: See page 32, Trail Guide to World Geography



# MAP SYMBOLS

International  
Boundaries  
River  
Highest Point  
Country Name  
Country Capital  
City  
Ocean



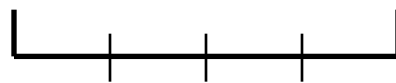
Compass Rose

---

---

---

---



Bar Scale

---

---

---

---

