


EXERCISE 17

1. Draw and complete the number sentences.

(a)

5 balloons



Draw 2 more balloons.



$$5 + 2 =$$

(b)

4 birds



Draw 3 more birds.

$$4 + 3 =$$

(c)

3 umbrellas



Draw 1 more umbrella.

$$3 + 1 =$$

(d)

5 lollipops



Draw 2 more lollipops.

$$5 + 2 =$$

EXERCISE 28

1. Subtract. Then color in this way:

0 — yellow

1 — red

2 — green

Others — blue

5 - 1 =

3 - 0 =

8 - 8 =

5 - 2 =

8 - 7 =

7 - 2 =

6 - 6 =

10 - 10 =

8 - 1 =

9 - 0 =

6 - 5 =

3 - 3 =

7 - 7 =

5 - 4 =

9 - 8 =

4 - 2 =

2 - 0 =

9 - 2 =

3 - 2 =

9 - 7 =

10 - 1 =

10 - 8 =

10 - 9 =

5 - 3 =


8 - 2 =

7 - 5 =

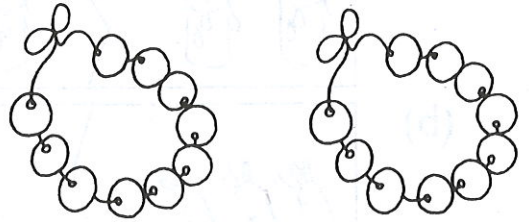
REVIEW 7

1. Count and write the numbers in words.


(a)




(b)



2. (a) Color 3 watermelons.



(b) Color the 3rd pineapple from the left.



3. Arrange the numbers in order. Begin with the smallest.

6

14

3

11

7

_____ , _____ , _____ , _____ , _____ ,

smallest

greatest