


(b) His sister also collected some marbles.



$2000 + 400 + 30 + 5 = \blacksquare$
How many marbles did she collect?

2000 → 2435
400
30
5

Two thousand, four hundred thirty-five

(c) Read the numbers 5998 and 6012.

(d) Count from 5998 to 6012.

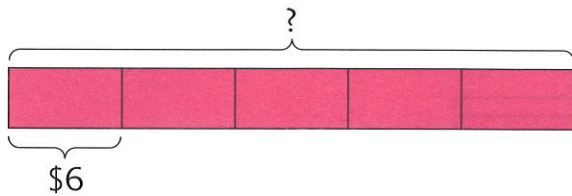


5998, 5999, 6000, ...6012.



(e) Count from 9987 to 10,000.

3. 5 children shared the cost of a present equally.
Each of them paid \$6.
What was the cost of the present?



1 unit = \$6
5 units = \$6 × 5

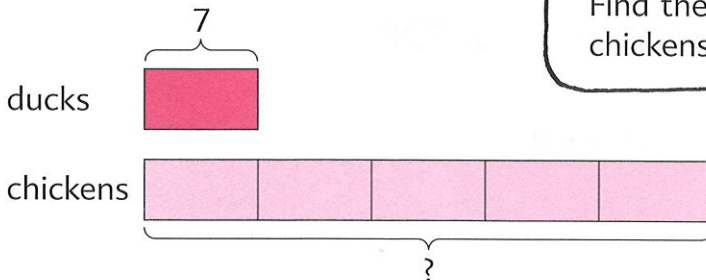
$$6 \times 5 = \blacksquare$$

The cost of the present was \$ \blacksquare .



Workbook Exercise 19

4. A farmer has 7 ducks.
He has 5 times as many chickens as ducks.
How many more chickens than ducks does he have?



Find the number of chickens first.




$$7 \times 5 = 35$$

He has 35 chickens.

$$35 - 7 = \blacksquare$$

He has \blacksquare chickens more than ducks.

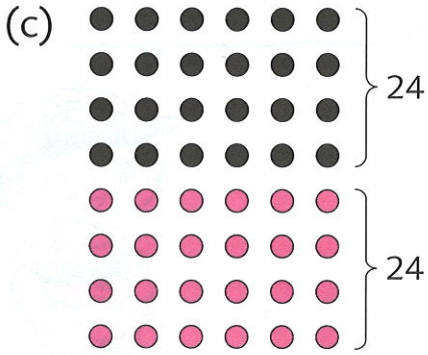
Workbook Exercise 20



$6 \times 7 = 30 + 12$



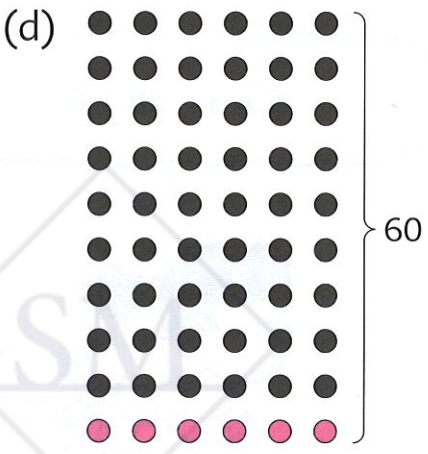
$6 \times 5 = 30$
 $6 \times 2 = 12$
 $6 \times 7 = \blacksquare$



$6 \times 8 = 24 \times 2$



$6 \times 4 = 24$
 $6 \times 8 = \blacksquare$



$6 \times 9 = 60 - 6$



$6 \times 10 = 60$
 $6 \times 9 = \blacksquare$

PRACTICE 4B

Find the value of each of the following:

(a)	(b)	(c)	(d)
1. 4×7	7×6	7×3	9×7
2. $28 \div 7$	$42 \div 7$	$21 \div 7$	$63 \div 7$
3. 7×40	608×7	7×800	930×7
4. $95 \div 7$	$540 \div 7$	$714 \div 7$	$805 \div 7$

5. A baker needs 7 eggs to bake a cake.
He has 150 eggs.
How many cakes can he bake?
How many eggs will be left over?
6. There are 7 days in a week.
How many days are there in 52 weeks?
7. Mr. Wong is 7 times as old as his grandson.
He is 63 years old.
How old is his grandson?
8. 1 kg of prawns cost \$26.
Chelsea bought 7 kg of prawns.
How much did he pay?
9. Lindsey spent \$84 on 7 towels.
What was the cost of 1 towel?
10. Taylor packed 112 lemons into bags of 7 each.
She sold all the lemons at \$3 a bag.
How much money did she receive?
11. A jacket cost 7 times as much as a T-shirt.
If the T-shirt cost \$26, what was the total cost of the T-shirt and the jacket?

