

# TABLE OF CONTENTS

## INTRODUCTORY INFORMATION

Teaching Suggestions ..... iii  
How to Use a Chart ..... iv

## ACTIVITIES







Logic ..... 1-10, 31-34, 43  
Math ..... 11-20, 35-38  
Reading ..... 21-30, 39-42

**SOLUTIONS** ..... 44

Free resource from [www.criticalthinking.com](http://www.criticalthinking.com). Commercial redistribution prohibited

## ACTIVITY 5

Directions: Fill in the chart using Y for yes or N for no as you solve the puzzle.

A boy, a girl, and their dad each has a pet dog.  
Use the clues and the chart to find each one's pet.

1. The girl's dog wears a collar and is smaller than her dad's dog.
2. The dad's dog is not the biggest or the smallest.