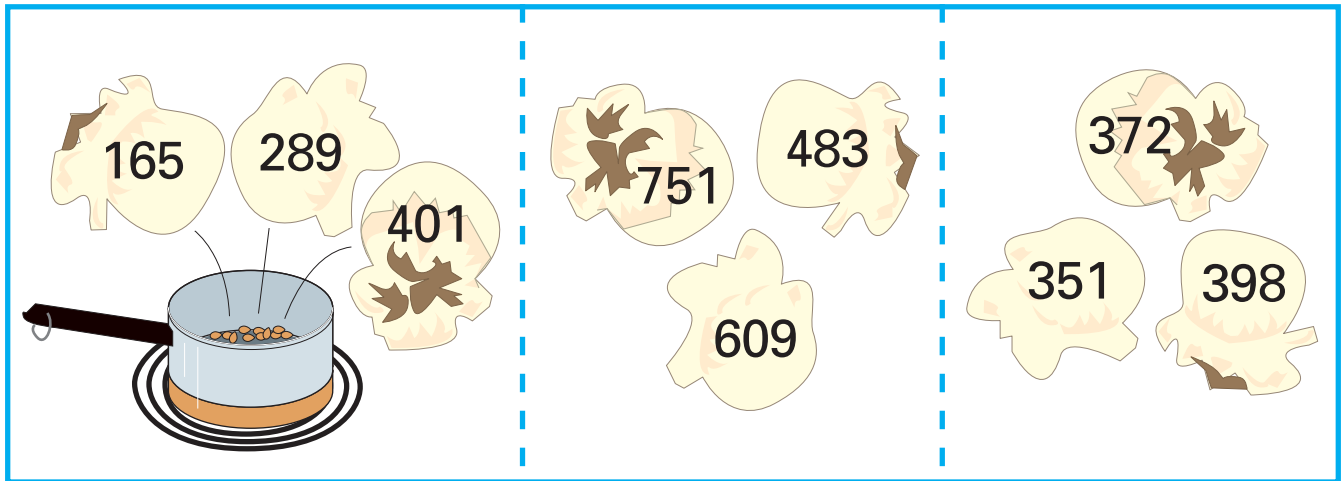


Horizons

Math



① Circle the least number.



② Write as a number sentence.

Sixty-five and twenty-eight equals ninety-three. _____

Ten added to seventy-four equals eighty-four. _____

Forty-three plus seventeen equals sixty. _____

The sum of thirty-one and fifty-eight is eighty-nine. _____

Twenty-five increased by thirteen is thirty-eight. _____

③ Find the sum and check.

374	102	360	326	139	342	111
182	584	286	471	329	282	539
+211	+192	+312	+192	+220	+121	+133

450	431	332	122	212	471	172
173	215	130	228	236	253	443
+122	+191	+291	+349	+438	+151	+150

4 Put an X on the numbers out of sequence.

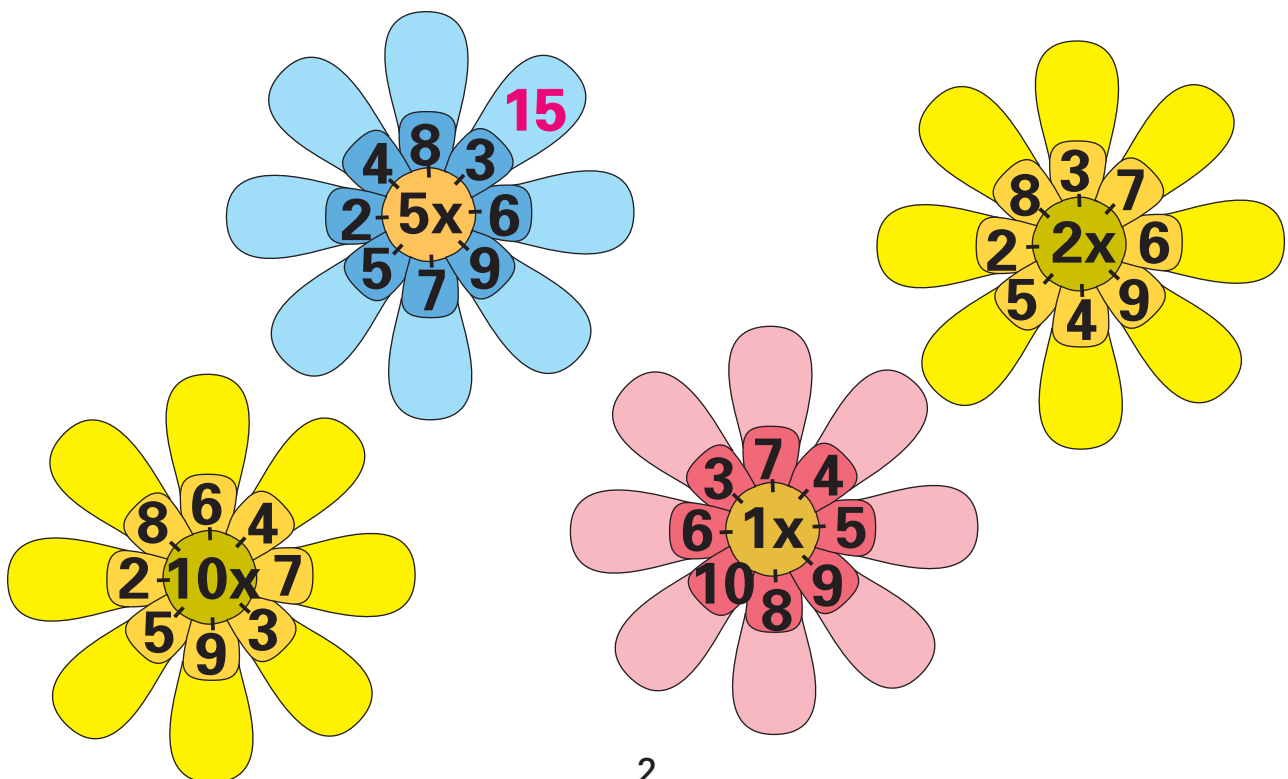
236	238	240	241	244	246	248
249	252	253	256	258	260	261
264	266	268	271	272	275	276

5 Subtract to find the difference. Check your answers.


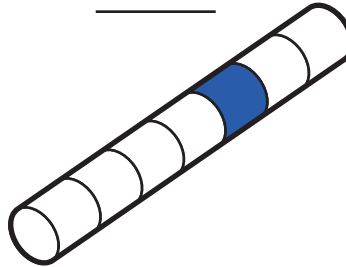
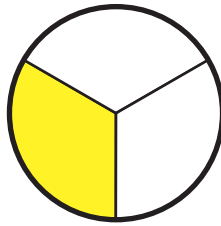
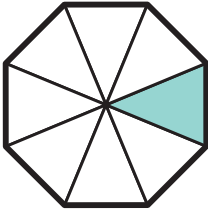
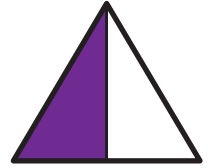
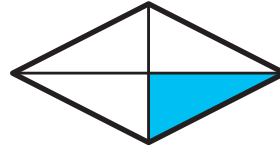
$\begin{array}{r} 9,780 \\ - 9,175 \\ \hline \end{array}$	$\begin{array}{r} 4,574 \\ - 3,326 \\ \hline \end{array}$	$\begin{array}{r} 6,392 \\ - 2,183 \\ \hline \end{array}$	$\begin{array}{r} 7,826 \\ - 3,018 \\ \hline \end{array}$	$\begin{array}{r} 6,982 \\ - 1,765 \\ \hline \end{array}$	$\begin{array}{r} 9,873 \\ - 6,545 \\ \hline \end{array}$
---	---	---	---	---	---

$\begin{array}{r} 8,931 \\ - 4,225 \\ \hline \end{array}$	$\begin{array}{r} 6,941 \\ - 3,512 \\ \hline \end{array}$	$\begin{array}{r} 8,931 \\ - 2,407 \\ \hline \end{array}$	$\begin{array}{r} 7,690 \\ - 5,439 \\ \hline \end{array}$	$\begin{array}{r} 8,497 \\ - 3,019 \\ \hline \end{array}$	$\begin{array}{r} 4,651 \\ - 2,529 \\ \hline \end{array}$
---	---	---	---	---	---

6 Write the numbers.



- 1 Write the fraction that shows what part is shaded.



- 2 Multiply to find the product.


X	2	4	7	3	0	6	8	9	5	10	1
5											

X	7	1	4	6	3	9	0	10	8	2	5
2											


- 3 Find the sum and check.

171 259 +136	184 355 +316	417 296 +182	228 277 +270	216 395 +143	241 386 +109	185 296 +404
--------------------	--------------------	--------------------	--------------------	--------------------	--------------------	--------------------

258 163 +112	337 315 +161	178 453 +101	174 433 +134
--------------------	--------------------	--------------------	--------------------



4 Write the value.



_____ ¢



_____ ¢

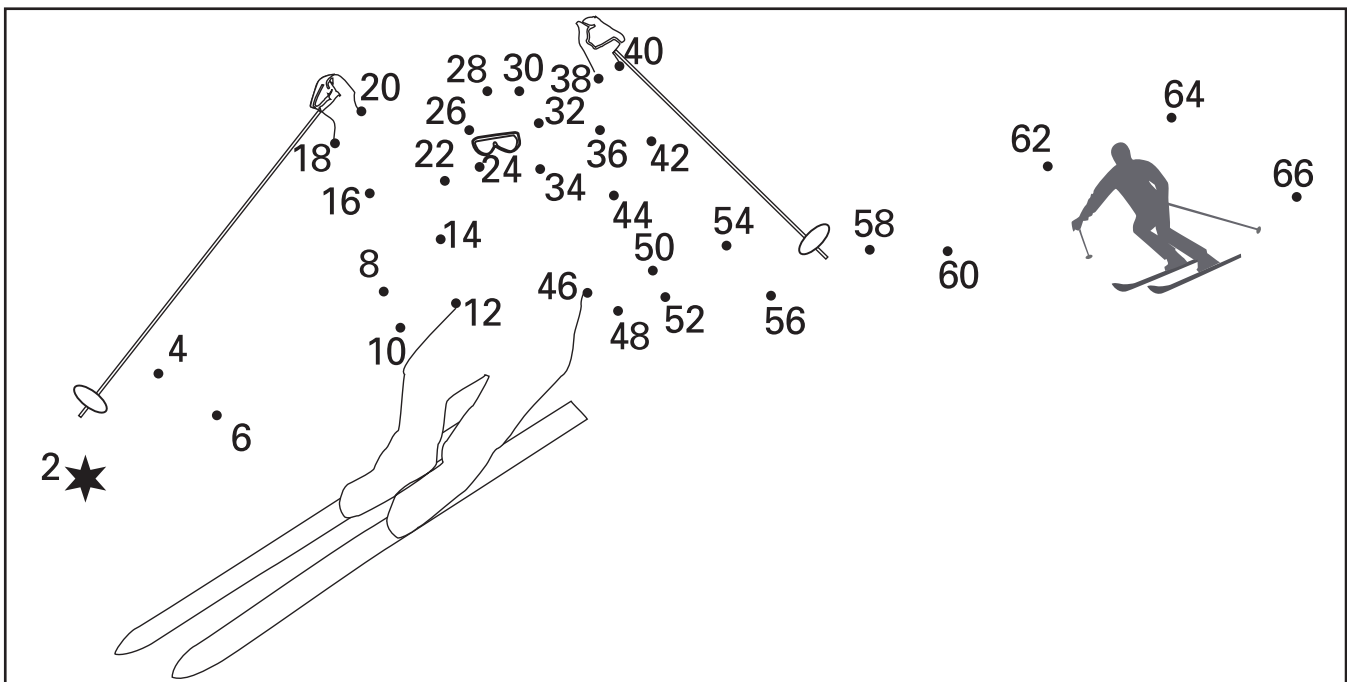


_____ ¢

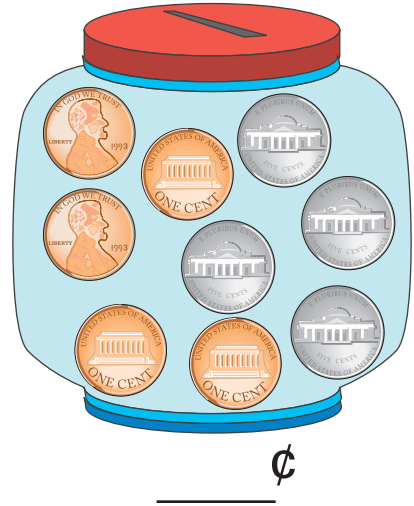


5 Put an X on the numbers out of sequence.

603	606	609	614	615	618	620
624	627	631	633	635	639	642
645	646	651	654	657	662	663

6 Connect the dots counting by 2's.



1 Write the value.



2 Write < or >.







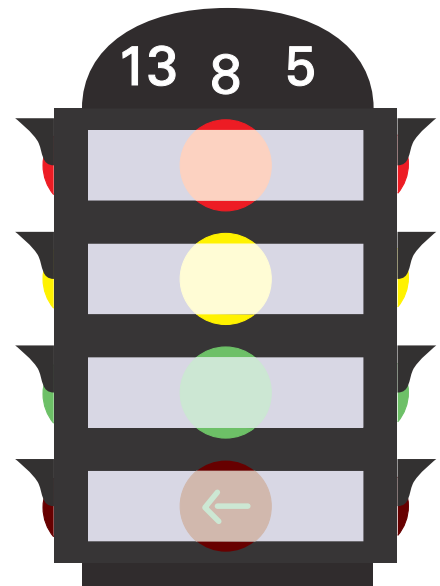
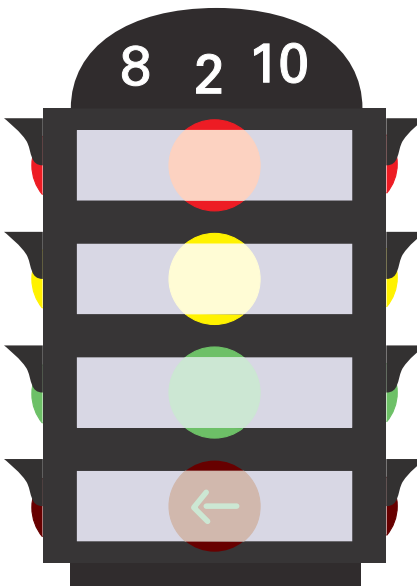
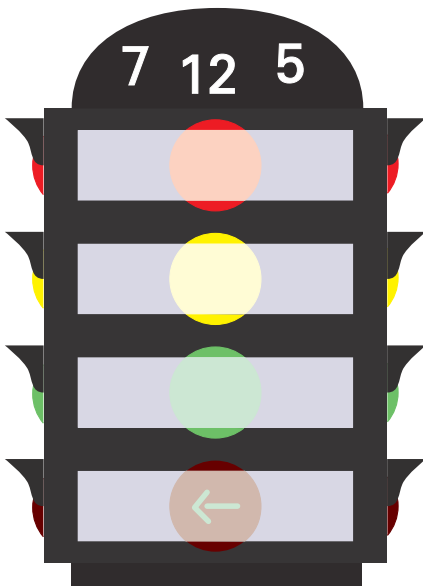




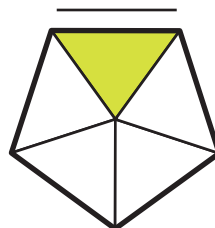
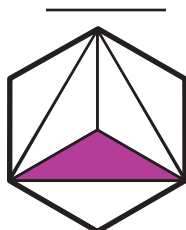
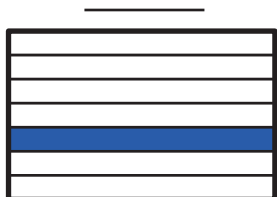
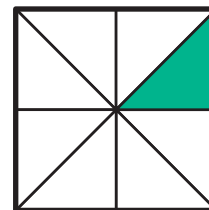
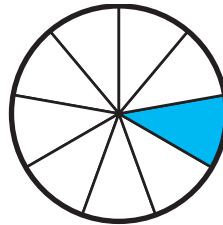
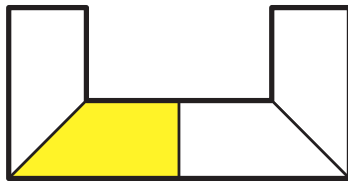





3 Write 2 addition and 2 subtraction facts.



- 4 Write the fraction that shows what part is shaded.



- 5 Multiply to find the product.

X	0	1	2
3			
5			
9			

X	2	5	10
1			
6			
8			

X	5	2	10
2			
4			
7			

- 6 Mrs. Brown has 126 cartons of milk to sell. The second grade class took away 18 cartons for their lunch. How many cartons of milk did Mrs. Brown have left?



- 7 Find the sum and check.

$$\begin{array}{r} 242 \\ 137 \\ +194 \\ \hline \end{array}$$

$$\begin{array}{r} 354 \\ 227 \\ +243 \\ \hline \end{array}$$

$$\begin{array}{r} 128 \\ 251 \\ +383 \\ \hline \end{array}$$

$$\begin{array}{r} 262 \\ 165 \\ +453 \\ \hline \end{array}$$

$$\begin{array}{r} 261 \\ 117 \\ +359 \\ \hline \end{array}$$

$$\begin{array}{r} 385 \\ 163 \\ +424 \\ \hline \end{array}$$

$$\begin{array}{r} 420 \\ 139 \\ +179 \\ \hline \end{array}$$