

Sets included:

Addition 1-5

Answer the problem:

$$1 + 1 = \boxed{?}$$

1 2 3

Addition 1-10


Answer the problem:

$$5 + 4 = \boxed{?}$$

10 11 9

Visual Addition 1-5


Answer the problem:


$$+ = \boxed{?}$$

1 2 3

Visual Addition 1-10

Answer the problem:


$$+ = \boxed{?}$$

6 11 10

Subtraction 1-5

Answer the problem:

$$5 - 1 = \boxed{?}$$

2 4 3

Subtraction 1-10


Answer the problem:

$$10 - 1 = \boxed{?}$$

9 8 7

Visual Subtraction 1-5


Answer the problem:


$$- = \boxed{?}$$

1 5 2

Visual Subtraction 1-10

Answer the problem:


$$- = \boxed{?}$$

3 2 5