

Exercise 1.1.1

1. **i** **b** 4 **c** $t_n = 4n - 2$
ii **b** -3 **c** $t_n = -3n + 23$
iii **b** -5 **c** $t_n = -5n + 6$
iv **b** 0.5 **c** $t_n = 0.5n$
v **b** 2 **c** $t_n = y + 2n - 1$
vi **b** -2 **c** $t_n = x - 2n + 4$
- 2 -28
3 9,17
4 -43
5 7
6 7
7 -5
8 0
9 **a** 41 **b** 31st
10 $2, \sqrt{3}$
11 **ai** 2 **ii** -3 **bi** 4 **ii** 11
12 $x - 8y$
13 $t_n = 5 + \frac{10}{3}(n - 1)$
14 **a** -1 **b** 0

Exercise 1.1.2

- 1 **a** 145 **b** 300 **c** -170
2 **a** -18 **b** 690 **c** 70.4
3 **a** -105 **b** 507 **c** 224
4 **a** 126 **b** 3900 **c** 14th week
5 855
6 **a** 420 **b** -210
7 $a = 9, b = 7$

Exercise 1.1.3

- 1 123
2 -3, -0.5, 2, 4.5, 7, 9.5, 12
3 3.25
4 $a = 3$ $d = -0.05$
5 10 000
6 330
7 -20
8 328
9 \$725, 37 weeks
10 **a** \$55 **b** 2750
11 **ai** 8 m **ii** 40 m **b** 84 m
c $\text{Dist} = 2n^2 - 2n = 2n(n - 1)$
d 8 **e** 26 players, 1300 m
12 **a** 5050 **b** 10200 **c** 4233
13 **a** 145 **b** 390 **c** -1845
14 **b** $3n - 2$

Exercise 1.1.4

- 1 a $r = 2, u_5 = 48, u_n = 3 \times 2^{n-1}$
- b $r = \frac{1}{3}, u_5 = \frac{1}{27}, u_n = 3 \times \left(\frac{1}{3}\right)^{n-1}$
- c $r = \frac{1}{5}, u_5 = \frac{2}{625}, u_n = 2 \times \left(\frac{1}{5}\right)^{n-1}$
- d $r = -4, u_5 = -256, u_n = -1 \times (-4)^{n-1}$
- e $r = \frac{1}{b}, u_5 = \frac{a}{b^3}, u_n = ab \times \left(\frac{1}{b}\right)^{n-1}$
- f $r = \frac{b}{a}, u_5 = \frac{b^4}{a^2}, u_n = a^2 \times \left(\frac{b}{a}\right)^{n-1}$
- 2 a ± 12 b $\frac{\pm\sqrt{5}}{2}$
- 3 a ± 96 b 15th
- 4 a $u_n = 10 \times \left(\frac{5}{6}\right)^{n-1}$ b $\frac{15625}{3888} \approx 4.02$ c $n = 5$ 4 times
- 5 $-2, \frac{4}{3}$
- 6 a i \$4096 ii \$2097.15 b 6.2 yrs
- 7 $\left(u_n = \frac{1000}{169} \times \left(\frac{12}{5}\right)^{n-1}\right), \frac{1990656}{4225} \approx 471.16$
- 8 2.5, 5, 10 or 10, 5, 2.5
- 9 53 757
- 10 108 952
- 11 a \$56 156 b \$299 284

Exercise 1.1.5

- 1 a 3 b $\frac{1}{3}$ c -1 d $-\frac{1}{3}$ e 1.25
f $-\frac{2}{3}$
- 2 a 216513 b 1.6384×10^{-10} c $\frac{256}{729}$
d $\frac{729}{2401}$ e $\frac{81}{1024}$
- 3 a 11; 354 292 b 7; 473 c 8; 90.90909
d 8; 172.778 e 5; 2.256 f 13; 111.1111111111
- 4 a $\frac{127}{128}$ b $\frac{63}{8}$ c $\frac{130}{81}$
d 60 e $\frac{63}{64}$
- 5 4; 118 096
- 6 \$2109.50
- 7 9.28 cm
- 8 a $V_n = V_0 \times 0.7^n$ b 7
- 9 54
- 10 53.5 gms; 50 weeks.
- 11 7
- 12 9
- 13 -0.5, -0.7797

- 14 $r = 5, 1.8 \times 10^{10}$
 15 \$8407.35
 16 1.8×10^{19} or about 200 billion tonnes.

Exercise 1.1.6

- 1 Term 9 AP = 180, GP = 256. Sum to 11 terms AP = 1650, GP = 2047.
 2 18
 3 12
 4 7, 12
 5 8 weeks Ken \$220 & Bo-Youn \$255)
 6 a week 8 b week 12
 7 a 1.618
 b 121 379 [~121400, depends on rounding errors]

Exercise 1.1.7

- 1 a $\frac{81}{2}$ b $\frac{10}{13}$ c 5000 d $\frac{30}{11}$
 2 $23\frac{23}{99}$
 3 6667 fish. [NB: $t_{43} < 1$. If we use $n = 43$ then ans is 6660 fish]; 20 000 fish.
 Overfishing means that fewer fish are caught in the long run.
 4 27
 5 48,12,3 or 16,12,9
 6 a $\frac{11}{30}$ b $\frac{37}{99}$ c $\frac{191}{90}$
 7 128 cm
 8 $\frac{121}{9}$
 9 $2 + \frac{4}{3}\sqrt{3}$
 10 $\frac{1 - (-t)^n}{1 + t} \frac{1}{1 + t}$
 11 $\frac{1 - (-t^2)^n}{1 + t^2} \frac{1}{1 + t^2}$

Exercise 1.1.8

- 1 3, -0.2
 2 $\frac{2560}{93}$
 3 $\frac{10}{3}$
 4 a $\frac{43}{18}$ b $\frac{458}{99}$ c $\frac{413}{990}$
 5 9900
 6 3275
 7 3
 8 $t_n = 6n - 14$
 9 6
 10 $-\frac{1}{6}$
 11 a 12 b 26
 12 9, 12

13 ± 2

14 $(5, 5, 5), (5, -10, 20)$

15 a 2, 7 b 2, 5, 8 c $3n - 1$

16 a 5 b $2m$

Exercise 1.1.9

1 \$2773.08

2 \$4377.63

3 \$1781.94

4 \$12 216

5 \$35 816.95

6 \$40 349.37

7 \$64 006.80

8 \$276 971.93, \$281 325.41

9 \$63 762.25

10 \$98.62, \$9467.14, interest \$4467.14. Flat interest = \$6000

11 \$134.41, \$3790.44, 0.602% /month (or 7.22% p.a.)

12 $-\frac{1}{2}, 3$ The sequence $\frac{1}{2}, \frac{1}{2}, \frac{1}{2}, \dots$ is arithmetic.

13 15

14 Proof

15 $m = 19, n = 34$

Exercise 1.2.1

- 1 a $\frac{27y^{15}}{8x^3}$ b $\frac{91}{216a^6}$ c $2^n + 2$ d $\frac{8x^{11}}{27y^2}$
- e $\frac{3x^2y^2}{8}$ f $3^{n+1} + 3$ g $4^{n+1} - 4$
- h $2(4^{n+1} - 4)$ i $\frac{1-b^6}{16b^4}$
- 2 a 64 b $\left(\frac{2}{3}\right)^x$ c 2^{2y+1} d $\frac{1}{b^{2x}}$
- e $\left(\frac{y}{2}\right)^6$ f $\left(\frac{9}{2}\right)^{n+2}$
- 3 a $\frac{z^2}{xy}$ b 3^{7n-2} c 5^{n+1} d 9
- e 2^{6n+1} f 2^{1-3n} g $x^2 + 4n - n^2$
- h x^{3n^2+n+1} i 27
- 4 $\frac{y^{2m-2}}{x^m}$
- 5 a -81 b $\frac{9x^8}{8y^4}$ c $y-x$
- d $\frac{2x+1}{x+1}$ e -1 f -b
- 6 a $\frac{1}{x^2y^2}$ b $\frac{1}{x^4}$ c $\frac{1}{x(x+h)}$
- d $\frac{1}{x-1}$ e $\frac{1}{(x+1)(x-1)^5}$ f $\frac{1}{x^2}$
- 7 a $118 \times 5^{n-2}$ b 1 c $\frac{b^7}{a^4}$ d a^{mn}
- e $\frac{p+q}{pq}$ f $\frac{2\sqrt{a}}{a-1}$ g $\frac{7}{8}$ h $a^{7/8}$
- 8 a $x^{11/12}$ b $2a^{3n-2}b^{2n-2}$ c 2^n
- d $\frac{7^{m-n}}{8}$ e $\frac{6 \times 5^n}{5^n + 5}$

Exercise 1.2.2

- 1 a 2 b -2 c $\frac{2}{3}$ d 5 e 6
- f -2.5 g 2 h 1.25 i $\frac{1}{3}$
- 2 a -6 b $-\frac{2}{3}$ c -3 d 1.5 e 0.25
- f 0.25 g $-\frac{1}{8}$ h $-\frac{11}{4}$ i -1.25

Exercise 1.2.3

- 1 a 2 b 2 c 5 d 3 e -3
- f -2 g 0 h 0 i -1 j -2
- k 0.5 l -2

- 2 **a** $\log_{10}10000 = 4$ **b** $\log_{10}0.001 = -3$
 c $\log_{10}(x+1) = y$ **d** $\log_{10}p = 7$
 e $\log_2(x-1) = y$ **f** $\log_2(y-2) = 4x$
- 3 **a** $2^9 = x$ **b** $b^x = y$ **c** $b^{ax} = t$
 d $10^{x^2} = z$ **e** $10^{1-x} = y$ **f** $2^y = ax - b$
- 4 **a** 16 **b** 2 **c** 2 **d** $\sqrt[4]{9}$ **e** $\sqrt[4]{2}$
 f 125 **g** 4 **h** 9 **i** $\sqrt[3]{\frac{1}{3}}$ **j** 21 **k** 3
 l 13
- 5 **a** 54.5982 **b** 1.3863 **c** 1.6487
 d 7.3891 **e** 1.6487 **f** 0.3679
 g 52.5982 **h** 4.7183 **i** 0.6065

Exercise 1.2.4

- 1 **a** 5 **b** 2 **c** 2 **d** 1 **e** 2 **f** 1
- 2 **a** $\log a = \log b + \log c$ **b** $\log a = 2\log b + \log c$
 c $\log a = -2\log c$ **d** $\log a = \log b + 0.5\log c$
 e $\log a = 3\log b + 4\log c$ **f** $\log a = 2\log b - 0.5\log c$
- 3 **a** 0.18 **b** 0.045 **c** -0.09
- 4 **a** $x = yz$ **b** $y = x^2$ **c** $y = \frac{x+1}{x}$
 d $x = 2^{y+1}$ **e** $y = \sqrt{x}$ **f** $y^2 = (x+1)^3$
- 5 **a** $\frac{1}{2}$ **b** $\frac{1}{2}$ **c** $\frac{17}{15}$ **d** $\frac{3}{2}$ **e** $\frac{1}{3}$
 f no real soln **g** 3,7 **h** $\frac{\sqrt{33}-1}{2}$ **i** 4
 j $\sqrt{10}+3$ **k** $\frac{64}{63}$ **l** $\frac{2}{15}$
- 6 **a** $\log_3 2wx$ **b** $\log_4 \frac{x}{y}$ **c** $\log_a [x^2(x+1)^3]$
 d $\log_a \left[\frac{(x^5)(x+1)^3}{\sqrt{2x-3}} \right]$ **e** $\log_{10} \left(\frac{y^2}{x} \right)$ **f** $\log_2 \left(\frac{y}{x} \right)$
- 7 **a** 1 **b** -2 **c** 3 **d** 9 **e** 2 **f** 9
- 8 **a** 1,4 **b** $1,3^{\pm\sqrt{3}}$ **c** $1,4^{\sqrt[3]{4}}$ **d** $1,5^{\pm\sqrt[4]{5}}$
- 9 **a** $\frac{\log 14}{\log 2} = 3.81$ **b** $\frac{\log 8}{\log 10} = 0.90$ **c** $\frac{\log 125}{\log 3} = 4.39$
 d $\frac{1}{\log 2} \times \log \left(\frac{11}{3} \right) - 2 = -0.13$ **e** $\frac{\log 10 - \log 3}{4\log 3} = 0.27$
 f 5.11 **g** $\frac{-\log 2}{2\log 10} = -0.15$

- h** 7.37 **i** 0.93 **j** no real solution
k $\frac{\log 3}{\log 2} - 2 = -0.42$ **l** $\frac{\log 1.5}{\log 3} = 0.37$
- 10** **a** 0.5,4 **b** 3 **c** -1,4 **d** 10,10¹⁰ **e** 5
f 3
- 11** **a** (4, log₄11) **b** 100,10 **c** 2,1
- 12** **a** $y = xz$ **b** $y = x^3$ **c** $x = e^{y-1}$
- 13** **a** $\frac{1}{e^4-1}$ **b** $\frac{1}{3}$ **c** $\frac{\sqrt{5}-1}{2}$ **d** \emptyset
- 14** **a** $\ln 21 = 3.0445$ **b** $\ln 10 = 2.3026$ **c** $-\ln 7 = -1.9459$
d $\ln 2 = 0.6931$ **e** $\ln 3 = 1.0986$
f $2\ln\left(\frac{14}{9}\right) = 0.8837$ **g** $e^3 = 20.0855$
h $\frac{1}{3}e^2 = 2.4630$ **i** $\pm\sqrt{e^9} = \pm 90.0171$ **j** \emptyset
k $e^2 - 4 = 3.3891$ **l** $\sqrt[3]{e^9} = 20.0855$
- 15** **a** 0, ln 2 **b** ln 5 **c** ln 2, ln 3 **d** 0
e 0, ln 5 **f** ln 10
- 16** **a** 4.5222 **b** 0.2643 **c** 0,0.2619
d -1,0.3219 **e** -1.2925,0.6610 **f** 0,1.8928
g 0.25,2 **h** 1 **i** 121.5 **j** 2

Exercise 1.3.1

- 1 a $b^2 + 2bc + c^2$ b $a^3 + 3a^2g + 3ag^2 + g^3$
- c $1 + 3y + 3y^2 + y^3$ d $16 + 32x + 24x^2 + 8x^3 + x^4$
- e $8 + 24x + 24x^2 + 8x^3$ f $8x^3 - 48x^2 + 96x - 64$
- g $16 + \frac{32}{7}x + \frac{24}{49}x^2 + \frac{8}{343}x^3 + \frac{1}{2401}x^4$ h $8x^3 - 60x^2 + 150x - 125$
- i $27x^3 - 108x^2 + 144x - 64$ j $27x^3 - 243x^2 + 729x - 729$
- k $8x^3 + 72x^2 + 216x + 216$ l $b^3 + 9b^2d + 27bd^2 + 27d^3$
- m $81x^4 + 216x^3y + 216x^2y^2 + 96xy^3 + 16y^4$
- n $x^5 + 15x^4y + 90x^3y^2 + 270x^2y^3 + 405xy^4 + 243y^5$
- o $\frac{125}{p^3} + \frac{150}{p} + 60p + 8p^3$ p $\frac{16}{x^4} - \frac{32}{x} + 24x^2 - 8x^5 + x^8$
- q $q^5 + \frac{10q^4}{p^3} + \frac{40q^3}{p^6} + \frac{80q^2}{p^9} + \frac{80q}{p^{12}} + \frac{32}{p^{15}}$
- r $x^3 + 3x + \frac{3}{x} + \frac{1}{x^3}$

Exercise 1.3.2

- 1 a $160x^3$ b $21x^5y^2$ c $-448x^3$
- d $-810x^4$ e $216p^4$
- f $-20412p^2q^5$ g $-22680p$
- 2 a -1400000 b 6000 c 540
- d -240 e 81648 f 40
- 3 1.0406 0.0004%
- 4 a $64x^6 + 960x^5 + 6000x^4 + 20000x^3 + 37500x^2 + 37500x + 15625$
- b 19750 c 20.6 d 0.1%
- 5 19
- 6 $-\frac{63}{8}$
- 7 $\frac{231}{16}$
- 8 $-\frac{130}{27}$
- 9 -20
- 10 $a = \pm 3$
- 11 $n = 5$
- 12 $n = 9$
- 13 a 0 b -59

14 $a = 3, n = 8$

15 $a = \pm 2, b = \pm 1$

16. a $a = -3$ $n = 6$

b $a = \frac{1}{3}$ $n = 5$

c $a = \sqrt{2}$ $n = 4$

d $a = -\frac{\sqrt{2}}{6}$ $n = 4$

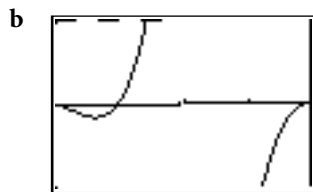
Exercise 2.1.1

- 1 a $\text{dom} = \{2, 3, -2\}, \text{ran} = \{4, -9, 9\}$
 b $\text{dom} = \{1, 2, 3, 5, 7, 9\}, \text{ran} = \{2, 3, 4, 6, 8, 10\}$
 c $\text{dom} = \{0, 1\}, \text{ran} = \{1, 2\}$
- 2 a $]1, \infty[$ b $[0, \infty[$ c $]9, \infty[$
 d $] -\infty, 1]$ e $[-3, 3]$ f $] -\infty, \infty[$
 g $] -1, 0]$ h $[0, 4]$ i $[0, \infty[$
 j $[1, 5]$ k $]0, 4[$ l $] -\infty, -1] \cup [1, \infty[$
- 3 a $r = [-1, \infty[, d = [0, 2[$ b $r = \{y: y \geq 0\} \setminus \{4\}, d = \mathbb{R}$
 c $r = [0, \infty[\setminus \{3\}, d = [-4, \infty[\setminus \{0\}$ d $r = [-2, 0[, d = [-1, 2[$
 e $r =] -\infty, \infty[d =] -\infty, -3] \cup [3, \infty[$ f $r = [-4, 4], d = [0, 8]$
- 4 a $\mathbb{R} \setminus \{-2\}$ b $] -\infty, 9[$ c $[-4, 4]$
 d $] -\infty, -2] \cup [2, \infty[$ e $\mathbb{R} \setminus \{0\}$ f \mathbb{R}
 g $\mathbb{R} \setminus \{-1\}$ h $[-a, \infty[$ i $[0, \infty[\setminus \{a^2\}$
 j $] -\infty, -a] \cup [a, \infty[$ k $\mathbb{R} \setminus \{-a^{-1}\}$
- 5 a $] -\infty, -a[$ b $]0, ab]$ c $] -\infty, \frac{1}{4}a^3]$ d $[\frac{1}{4}a^3, \infty[$
 e $\mathbb{R} \setminus \{a\}$ f $] -\infty, a[$ g $[-a, \infty[$ h $] -\infty, 0[$

Exercise 2.1.2

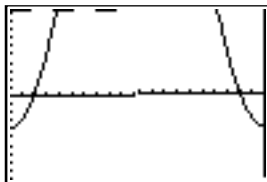
- 1 a 3, 5 b i $2(x+a) + 3$ ii $2a$ c 3
- 2 a $0, \frac{10}{11}$ b $-\frac{5}{4}$ c $[0, \frac{10}{11}]$
- 3 a $-\frac{1}{2}x^2 - x + \frac{3}{2}, -\frac{1}{2}x^2 + x + \frac{3}{2}$ b $\pm\sqrt{2}$ c no solution

4 ax = 0 1

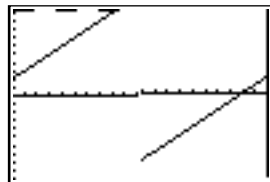


Window $[-2, 2], [-1, 1]$
 Range: $[-12, 4]$

5 ai



ii



- b i $\{2\sqrt{2}, -2\sqrt{2}\}$ ii $\{3, -2\}$

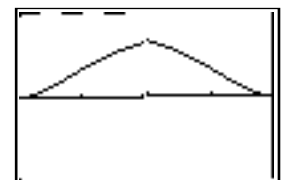
6 b, c, d, e

8 a, d, e, f

9 a Window $[-2, 2], [-1, 1]$ b $[0, 1[$

10 a $\{y: y > 1\} \cup \{y: y \leq -1.25\}$

b 10



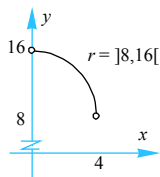
11 b 1

12 a only – it is the only one with identical rules and domains

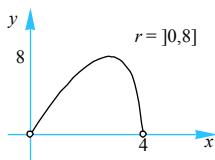
13 a $[-3, \infty[$ b $[-3, 0]$ c $[3, \infty[$
 d $[1.5, 3[\cup]3, \infty[$

14 a i $p(x) = 8 + 2\sqrt{16 - x^2}, 0 < x < 4$ ii $A(x) = x\sqrt{16 - x^2}, 0 < x < 4$

b i



ii



Exercise 2.1.3

- 1 a even b even c neither d neither
 e even f odd g odd h even
 i odd
- 3 Not if 0 is excluded from the domain.
- 6 $f(x) = 0, x \in \mathfrak{R}$

Exercise 2.1.4

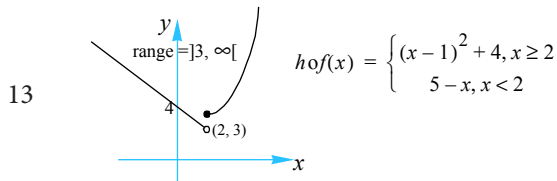
- 1 a i $f + g: [0, \infty[\mapsto \mathfrak{R}$ where $(f + g)(x) = x^2 + \sqrt{x}$ $[0, \infty[$
 ii $f + g:]0, \infty[\mapsto \mathfrak{R}$ where $(f + g)(x) = \frac{1}{x} + \ln(x)$ $[1, \infty[$
 iii $f + g: [-3, -2] \cup [2, 3] \mapsto \mathfrak{R}$ where $(f + g)(x) = \sqrt{9 - x^2} + \sqrt{x^2 - 4}$, $[\sqrt{5}, \sqrt{10}]$
- b i $fg: [0, \infty[\mapsto \mathfrak{R}$ where $(fg)(x) = x^2\sqrt{x} = x^{5/2}$
 ii $fg:]0, \infty[\mapsto \mathfrak{R}$ where $(fg)(x) = \frac{\ln(x)}{x}$
 iii $fg: [-3, -2] \cup [2, 3] \mapsto \mathfrak{R}$ where $(fg)(x) = \sqrt{(9 - x^2)(x^2 - 4)}$
- 2 a i $f - g:]-\infty, \infty[\mapsto \mathfrak{R}$ where $(f - g)(x) = 2e^x - 1$ $] -1, \infty[$
 ii $f - g:]-1, \infty[\mapsto \mathfrak{R}$ where $(f - g)(x) = (x + 1) - \sqrt{x + 1}$ $] -0.25, \infty[$
 iii $f - g:]-\infty, \infty[\mapsto \mathfrak{R}$ where $(f - g)(x) = |x - 2| - |x + 2|$ $[-4, 4]$
- b i $f/g: \mathfrak{R} \setminus \{0\}, \mapsto \mathfrak{R}$ where $(f/g)(x) = \frac{e^x}{1 - e^x}$
 ii $f/g:]-1, \infty[\mapsto \mathfrak{R}$ where $(f/g)(x) = \sqrt{x + 1}$
 iii $f/g: \mathfrak{R} \setminus \{-2\} \mapsto \mathfrak{R}$ where $(f/g)(x) = \left| \frac{x - 2}{x + 2} \right|$

- 3 a $f \circ g(x) = x^3 + 1, g \circ f(x) = (x+1)^3$ b $]-\infty, \infty[,]-\infty, \infty[$
- ii a $f \circ g(x) = x+1, x \geq 0, g \circ f(x) = \sqrt{x^2+1}$ b $[1, \infty[, [1, \infty[$
- iii a $f \circ g(x) = x^2, g \circ f(x) = (x+2)^2 - 2$ b $[0, \infty[, [-2, \infty[$
- iv a $f \circ g(x) = x, x \neq 0, g \circ f(x) = x, x \neq 0$ b $\mathbb{R} \setminus \{0\}, \mathbb{R} \setminus \{0\}$
- v a $f \circ g(x) = x, x \geq 0, g \circ f(x) = |x|$ b $[0, \infty[, [0, \infty[$
- vi a $f \circ g(x) = \frac{1}{2} - 1, x \neq 0, g \circ f(x)$ does not exist. b $]-1, \infty[$
- vii a $f \circ g(x) = x^2, x \neq 0, g \circ f(x) = x^2, x \neq 0$ b $]0, \infty[,]0, \infty[$
- viii a $f \circ g(x) = |x| - 4, g \circ f(x) = |x - 4|$ b $[-4, \infty[, [0, \infty[$
- ix a $f \circ g(x) = |x+2|^3 - 2, g \circ f(x) = |x^3|$ b $[-2, \infty[, [0, \infty[$
- x a $f \circ g(x)$ does not exist, $g \circ f(x) = (4-x), x \leq 4$ b $[0, \infty[$
- xi a $f \circ g(x) = \frac{x^2}{x^2+1}, g \circ f(x) = \left(\frac{x}{x+1}\right)^2, x \neq -1$ b $[0, 1[, [0, \infty[$
- xii a $f \circ g(x) = x^2 + |x| + 1, g \circ f(x) = |x^2 + x + 1|$ b $[1, \infty[, [0.75, \infty[$
- xiii a $f \circ g(x) = 2^{x^2}, g \circ f(x) = 2^{2x}$ b $[1, \infty[,]0, \infty[$
- xiv a $f \circ g(x)$ does not exist, $g \circ f(x) = \frac{1}{x+1} - 1, x \neq -1$ b $\mathbb{R} \setminus \{-1\}$
- xv a $f \circ g(x)$ does not exist, $g \circ f(x) = \frac{4}{x-1} + 1$ b $]1, \infty[$
- xvi a $f \circ g(x) = 4^{\sqrt{x}}, x \geq 0, g \circ f(x) = 4^{0.5x}$ b $[1, \infty[,]0, \infty[$
- 4 a $f \circ g(x) = 2x + 3, x \in \mathbb{R}$
 b $g \circ f(x) = 2x + 2, x \in \mathbb{R}$
 c $f \circ f(x) = 4x + 3, x \in \mathbb{R}$
- 5 $g(x) = x^2 + 1, x \in \mathbb{R}$
- 6 a $f \circ g(x) = \frac{1}{x} + x + 1, x \in \mathbb{R} \setminus \{0\},]-\infty, -1] \cup [3, \infty[$
 b $g \circ f(x)$ does not exist.
 c $g \circ g(x) = x + \frac{1}{x} + \frac{x}{x^2+1}, x \neq 0,]-\infty, -2.5] \cup [2.5, \infty[$
- 7 a 9 b 3
- 9 $g(x) = x^2 + 3$

10 $g(x) = \frac{1}{2}\sqrt{x^2 - 1} + 2$

11 a $x = \pm 1$ b $x = 1, -3$

12 a $\frac{1}{x}$ b $\frac{-x}{2x+1}$



14 a $r_f \subseteq d_g$ and $r_{g \circ f} \subseteq d_h$ b $g(x) = 4(x+1)^2, x \in \mathbb{R}$

15 a $f \circ g(x) = x, x \in]0, \infty[$ range = $]0, \infty[$

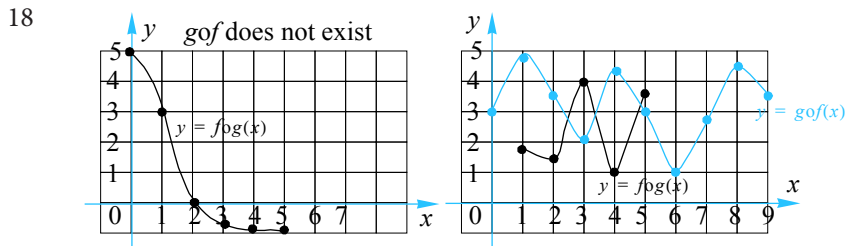
b $g \circ f(x) = \frac{1}{2}(\ln(e^{2x-1}) + 1), x \in \mathbb{R}$ ($= x$) range = $]-\infty, \infty[$

c $f \circ f(x) = e^{2(e^{2x-1})} - 1, x \in \mathbb{R}$ range = $]e^{-1}, \forall[$

16 a $h \circ k$ does not exist. b $k \circ h(x) = 4 \log(4x - 1) - 1, x > \frac{1}{4}, \mathbb{R}$

17 a $S = \mathbb{R} \setminus]-3, 3[; T = \mathbb{R}$

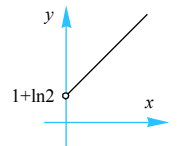
b $T = \{x : |x| \geq 6, x = 0\}; S =]-\infty, -3] \cup [3, \infty[$



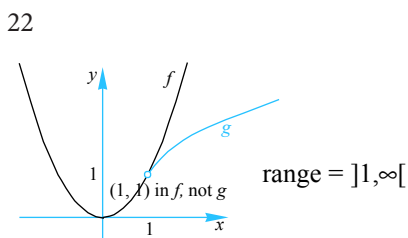
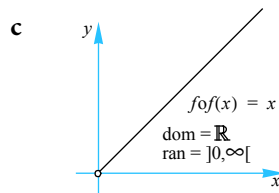
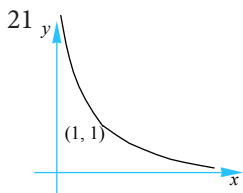
19 a $\text{Dom } f =]0, \infty[, \text{ran } f =]e, \infty[, \text{Dom } g =]0, \infty[, \text{ran } g = \mathbb{R}$

b $f \circ g$ does not exist: $r_g = \mathbb{R} \not\subseteq d_f =]0, \infty[$
 $g \circ f$ exists as $r_f =]e, \infty[\subseteq d_g =]0, \infty[$

c $g \circ f:]0, \infty[\mapsto \mathbb{R}$, where $g \circ f(x) = (x+1) + \ln 2$

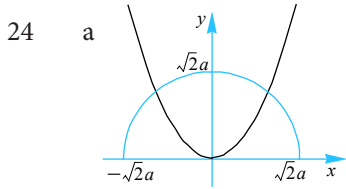


20 $(f \circ g)(x) = |x|, x \in \mathbb{R}; \text{range} = [0, \infty[$



b $g \circ f:]1, \infty[\mapsto \mathbb{R}$, where $g \circ f(x) = x$
 d $f \circ g^*:]1, \infty[\mapsto \mathbb{R}$, where $g \circ f(x) = x$

$$d_f = \mathbb{R} \setminus \left\{ \frac{a}{c} \right\}, r_f = \mathbb{R} \setminus \left\{ \frac{a}{c} \right\}, r_f \subseteq d_p, f \circ f(x) = x$$

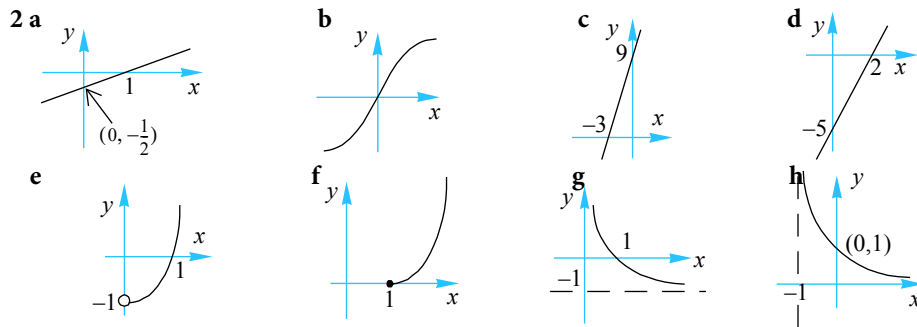


b $d_{f \circ g} = [-\sqrt{2a}, \sqrt{2a}], f \circ g = 2a - \frac{x^2}{a}$

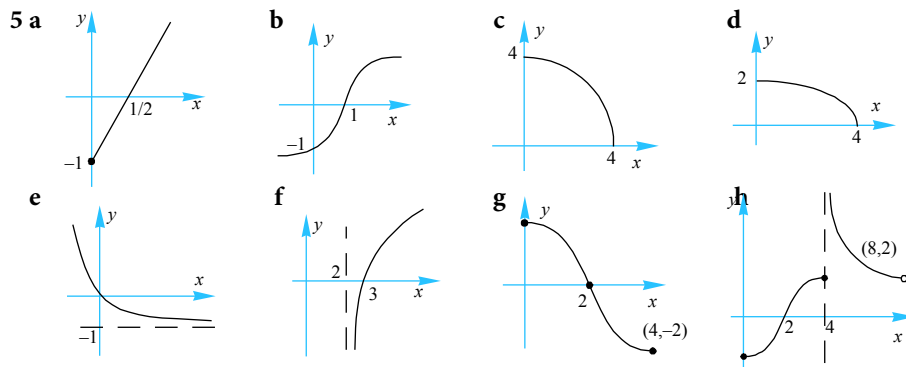
c $d_{g \circ f} = [-2^{1/4}a, 2^{1/4}a], f \circ g = \frac{1}{a}\sqrt{2a^4 - x^4}$,
 $range = [0, \sqrt{2a}]$

Exercise 2.1.5

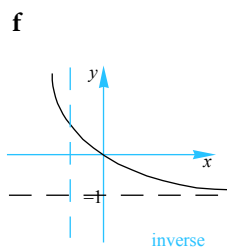
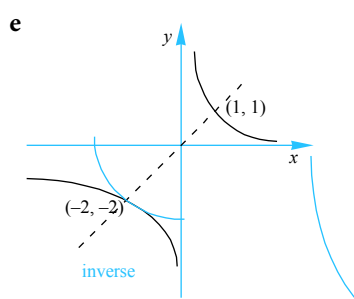
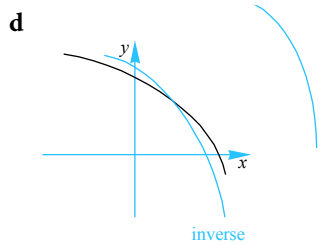
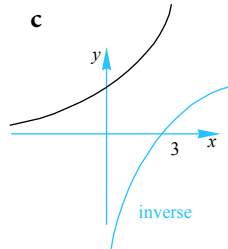
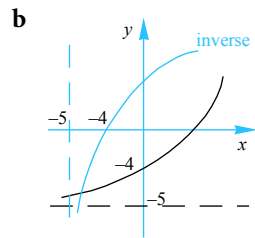
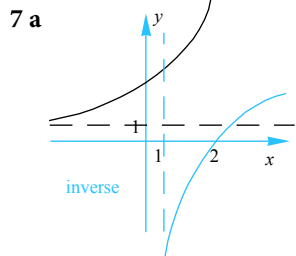
- 1 a $\frac{1}{2}(x-1), x \in \mathbb{R}$ b $\sqrt[3]{x}, x \in \mathbb{R}$
 c $3(x+3), x \in \mathbb{R}$ d $\frac{5}{2}(x-2), x \in \mathbb{R}$
 e $x^2-1, x > 0$ f $(x-1)^2, x \geq 1$
 g $\frac{1}{x}-1, x > 0$ h $\frac{1}{(x+1)^2}, x > -1$



4 $\frac{\pm|x|}{\sqrt{1-x^2}}, -1 < x < 1$

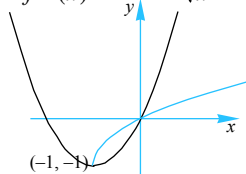


- 6 a $f^{-1}(x) = \log_3(x-1), x > 1$
 b $f^{-1}(x) = \log_2(x+5), x > -5$
 c $f^{-1}(x) = \frac{1}{2}(\log_3 x - 1), x > 0$
 d $g^{-1}(x) = 1 + \log_{10}(3-x), x < 3$
 e $h^{-1}(x) = \log_3\left(1 + \frac{2}{x}\right), x \in \mathbb{R} \setminus [-2, 0]$
 f $g^{-1}(x) = \log_2\left(\frac{1}{x+1}\right), x > -1$



- 8**
- a $f^{-1}(x) = 2^x - 1, x \in \mathbb{R}$
 - b $f^{-1}(x) = \frac{1}{2} \cdot 10^x, x \in \mathbb{R}$
 - c $f^{-1}(x) = 2^{1-x}, x \in \mathbb{R}$
 - d $f^{-1}(x) = 3^{x+1} + 1, x \in \mathbb{R}$
 - e $f^{-1}(x) = 5^{x/2} + 5, x \in \mathbb{R}$
 - f $f^{-1}(x) = 1 - 10^{3(2-x)}, x \in \mathbb{R}$

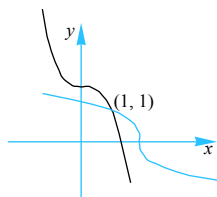
9 $f^{-1}(x) = \frac{1}{2} + \sqrt{x+1}, x > -1$



dom = $[-1, \infty[$, ran = $[-1, \infty[$

10 a $f^{-1}(x) = a - x$ **b** $f^{-1}(x) = \frac{2}{x-a} + a$ **c** $f^{-1}(x) = \sqrt{a^2 - x^2}$

11 $f^{-1}(x) = \sqrt[3]{2-x}$



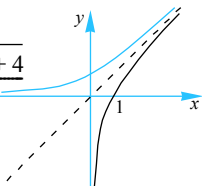
12 $[2, \infty[$

13 $\mathbb{R}^+ \setminus \{1.5\}$

14 a Inverse exists as f is one:one

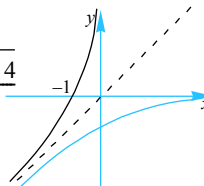
b Case 1: $S =]0, \infty[$

$g^{-1}(x) = \frac{x + \sqrt{x^2 + 4}}{2}$



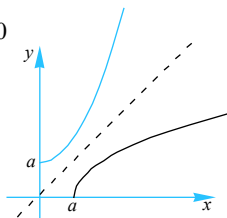
Case 2: $S =]-\infty, 0[$

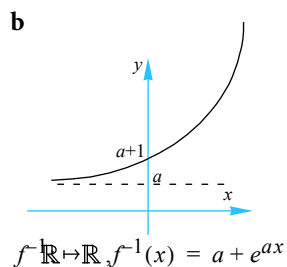
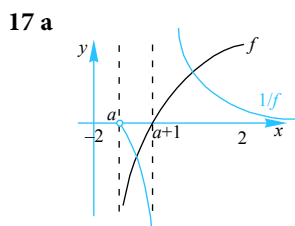
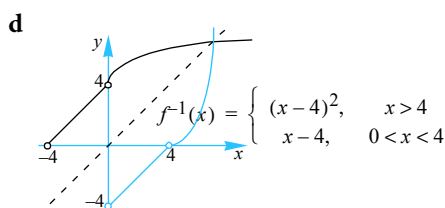
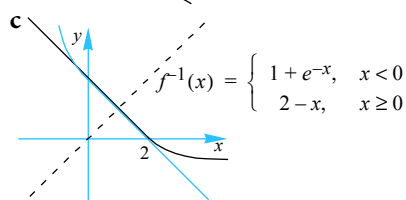
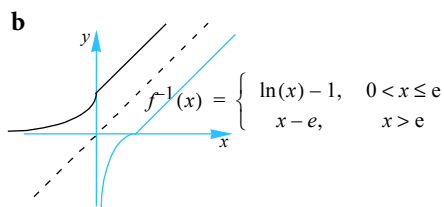
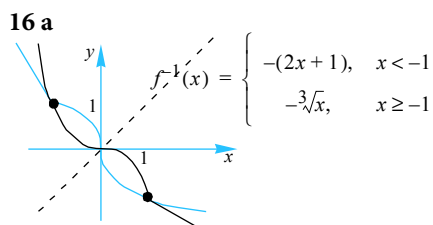
$g^{-1}(x) = \frac{x - \sqrt{x^2 + 4}}{2}$



15 $f^{-1}(x) = a(x^2 + 1), x \geq 0$

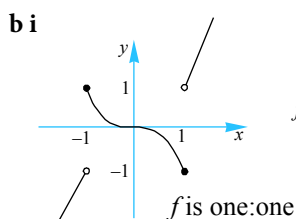
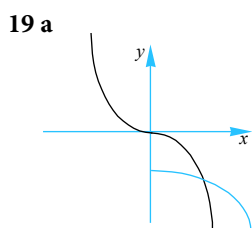
$\{x: f(x) = f^{-1}(x)\} = \emptyset$





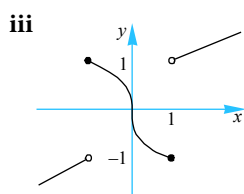
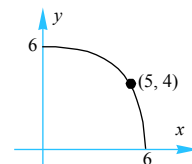
18 $g \circ f$ exists as $r_f \subseteq d_g$.

It is one:one so the inverse exists:



ii

$$f(x) = \begin{cases} \frac{1}{2}(x-1) & x < -1 \\ -\sqrt[3]{x} & -1 \leq x \leq 1 \\ \frac{1}{2}(x+1) & x > 1 \end{cases}$$



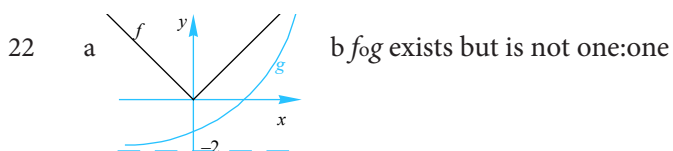
iv $\{-1, 0, 1\}$

- 20**
- a i $tom(x) = e^{\sqrt{x}}, x \geq 0$
 - ii $mot(x) = \sqrt{e^x}, x \in \mathbb{R}$
 - b i $(tom)^{-1}(x) = (\ln(x))^2, x > 1$
 - ii $(mot)^{-1}(x) = \ln x^2, x > 0$
 - c i & ii neither exist

d Adjusting domains so that the functions in part c exist, we have:

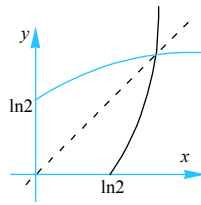
$$t^{-1} \circ m^{-1}(x) = (mot)^{-1}(x) \text{ and } m^{-1} \circ t^{-1}(x) = (tom)^{-1}(x)$$

e Yes as rules of composition OK.



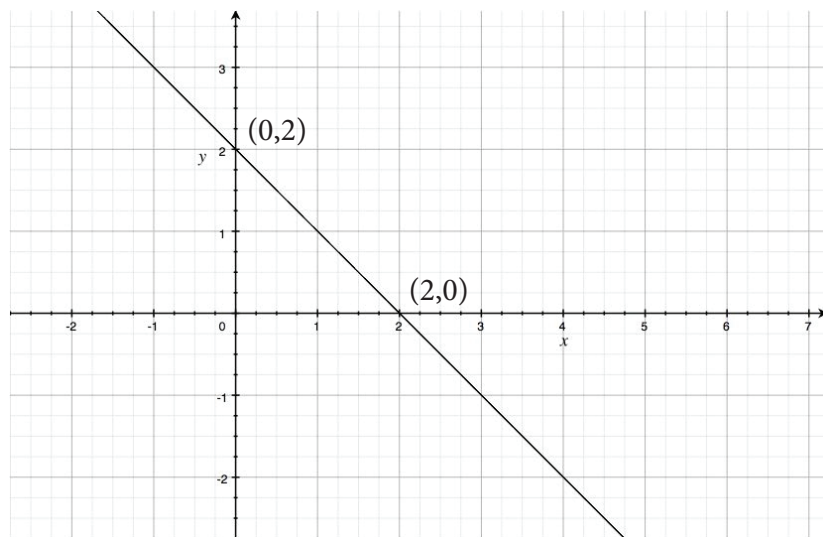
c i $B = [\ln 2, \infty[$

ii $(f \circ g)^{-1}: [0, \infty[\mapsto \mathbb{R}$ where, $(f \circ g)^{-1}(x) = \ln(x + 2)$ iii

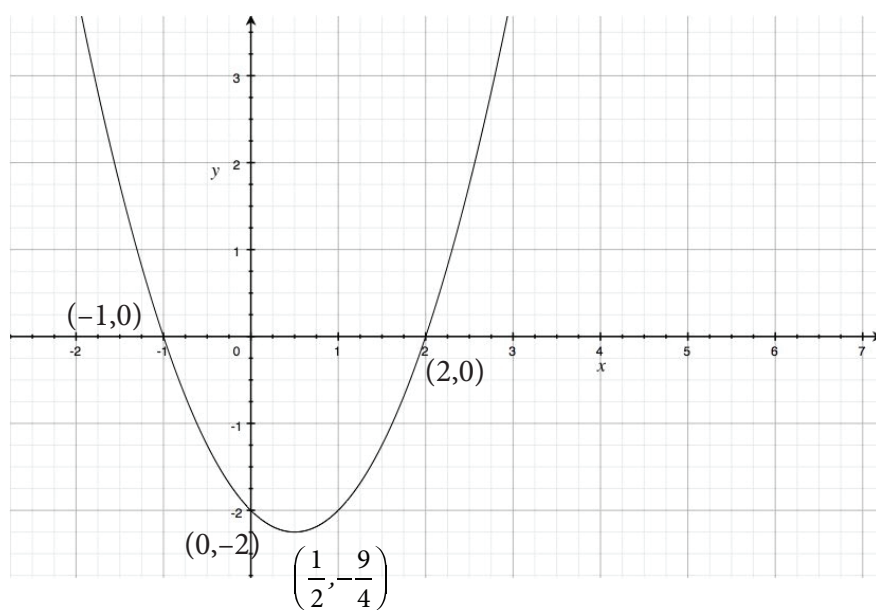


Exercise 2.2.1

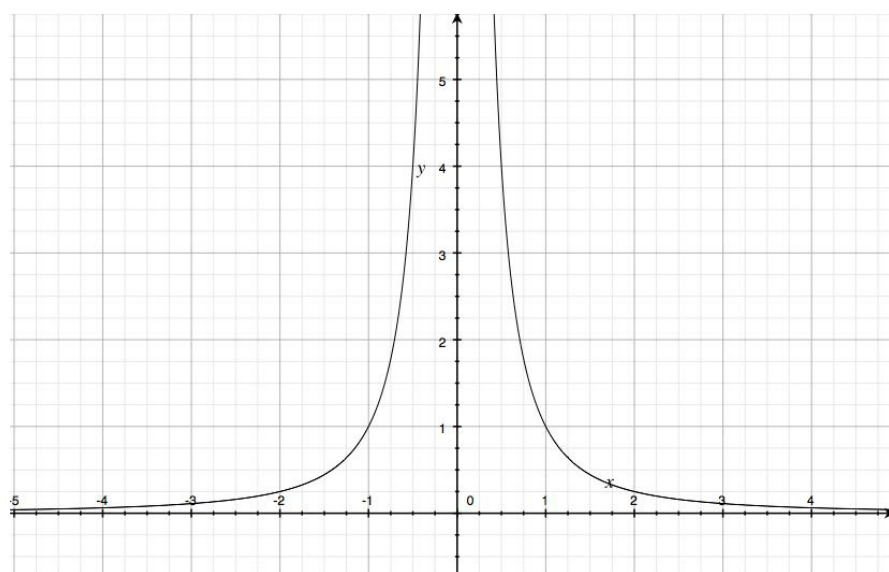
1.



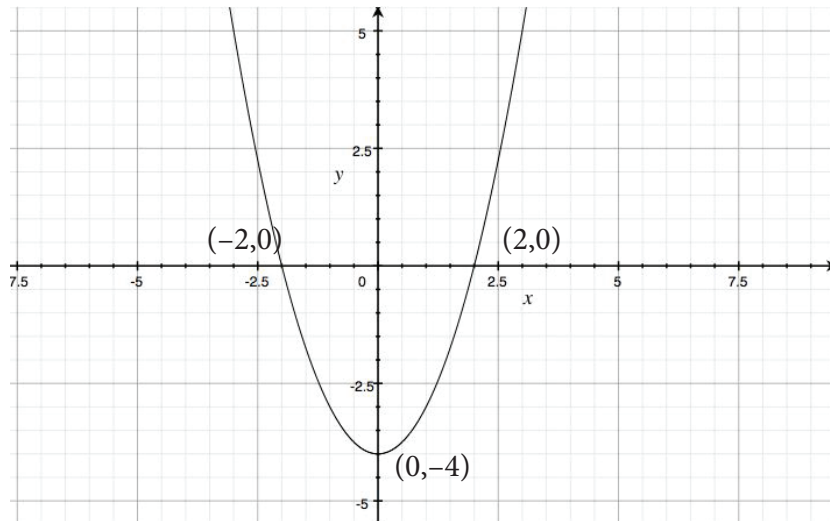
2.



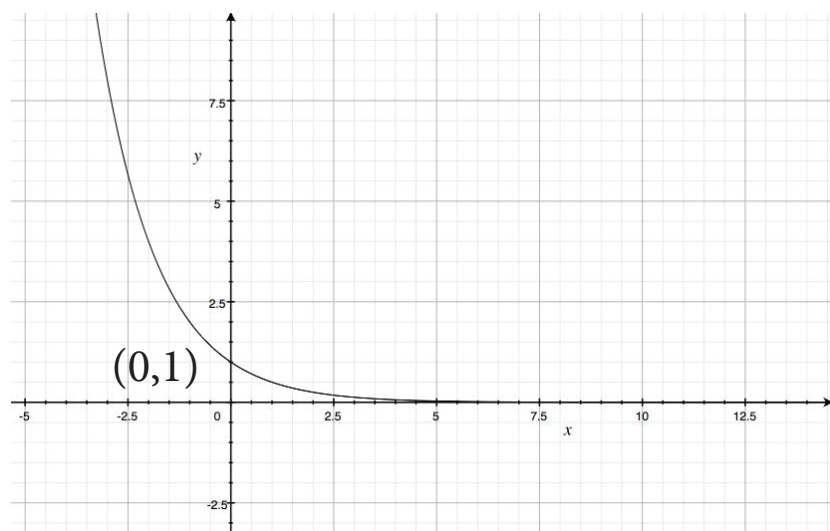
3.



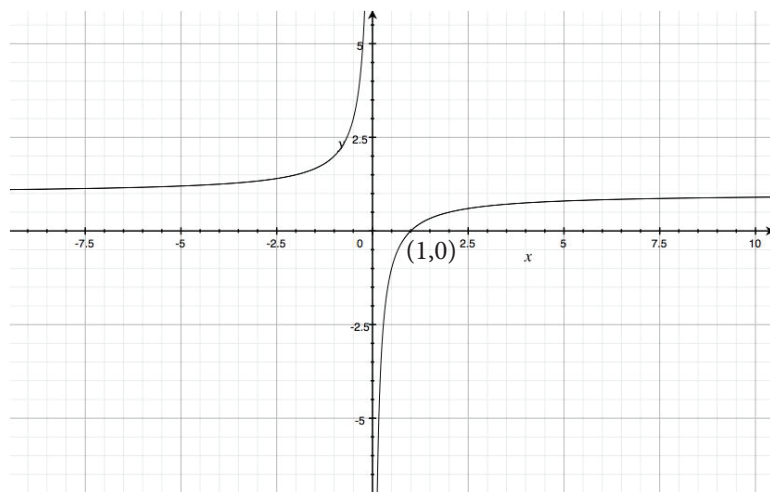
4.



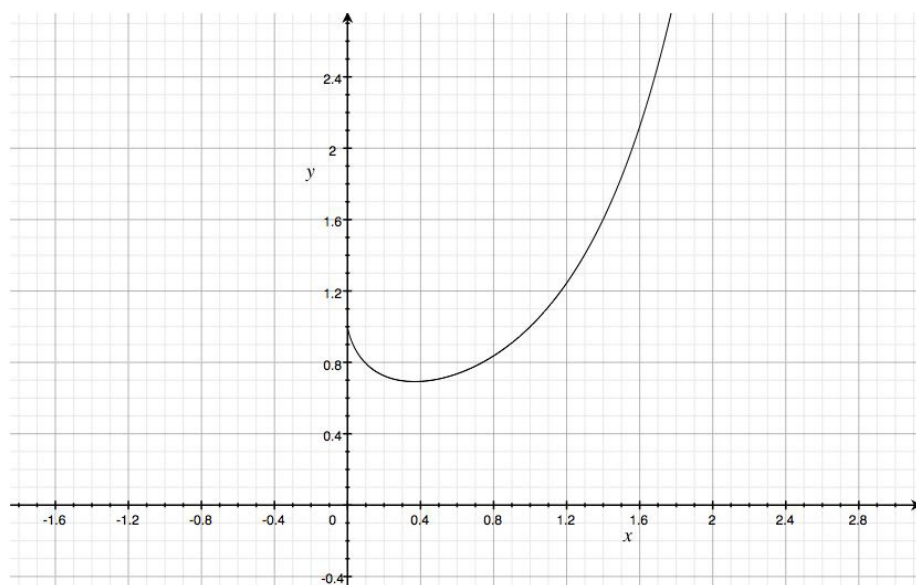
5.



6.

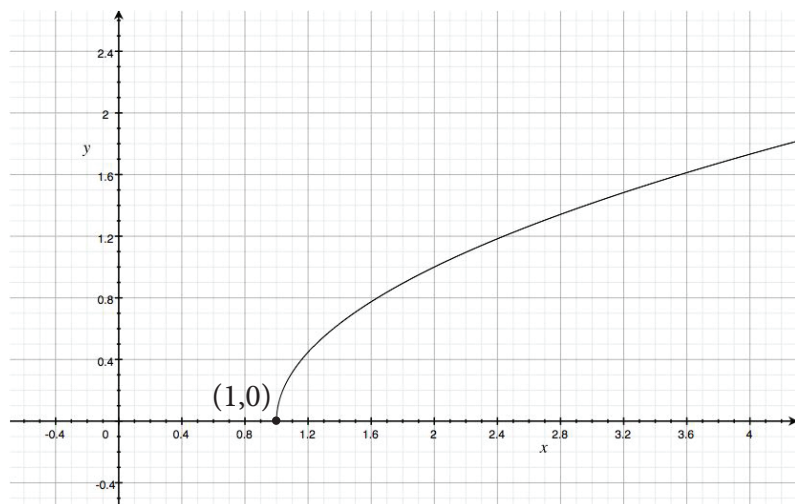


7.

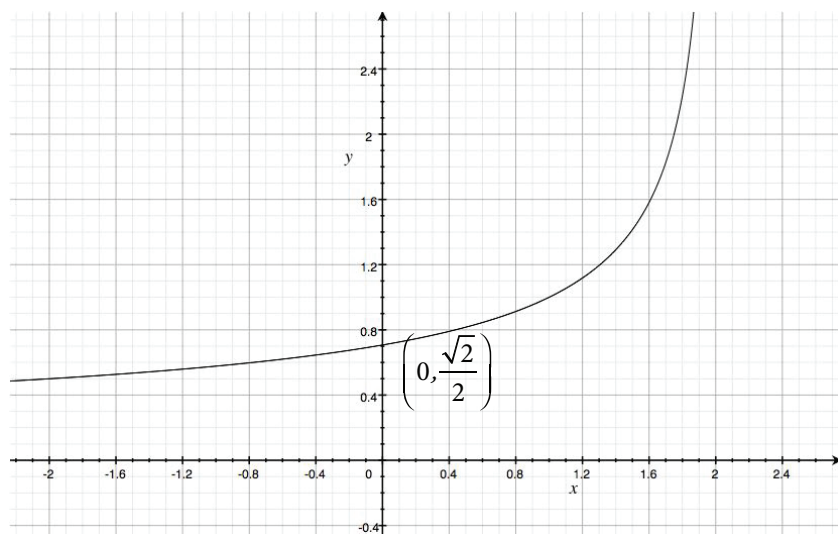


The y-axis intercept of this graph is at 0^0 . The 'value' of this expression remains a topic of animated discussion amongst mathematicians. The minimum point is at approximately $(0.36, 0.69)$.

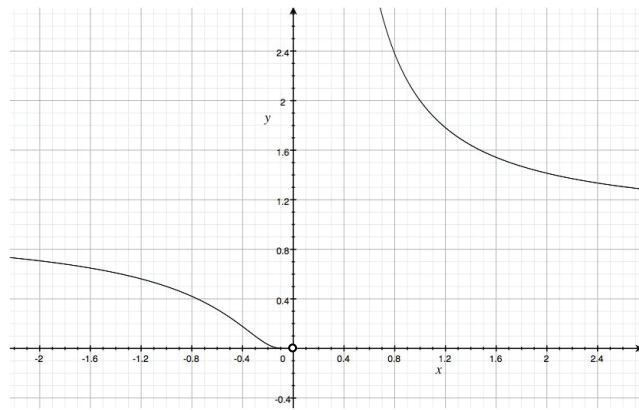
8.



9.



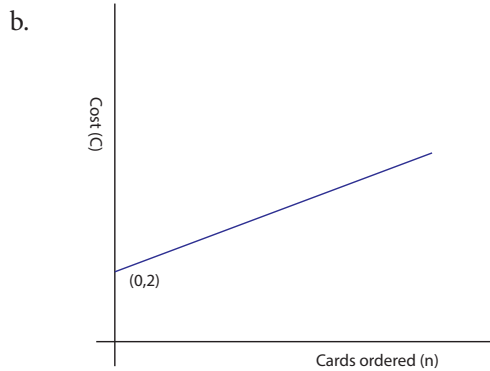
10.



Exercise 2.2.2

1.

a. $C = 2 + 0.01n$



c. 1 800

2. If the origin is chosen at the top left of the curve and using x, y as variables: $y = \frac{(x-10)^2}{10} - 10 = \frac{x^2}{10} - 2x$

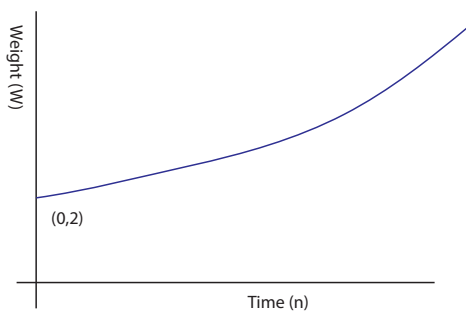
A 12m wide ship will need a gap of 4 metres at water level. The point on the graph is $(4, -6.4)$ so the maximum draught is 6.4 metres - but this leaves no safety margin.

3. Asymptotes: $x = 1, y = 2$. Lines of symmetry $y = x + 1, y = 3 - x$. Rotational symmetry about $(1, 2)$ of order 2.

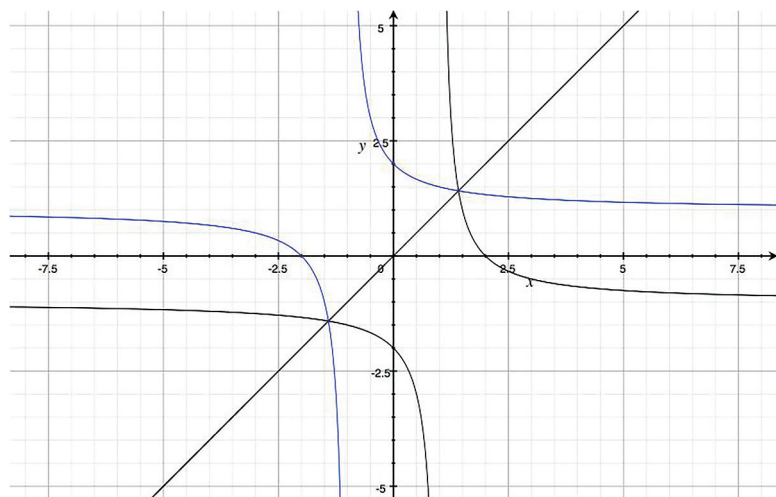
4. a 1000 bi 1516 b ii 2000 c 10 days

5. a 0.0013 b 2.061 kg c 231.56 years

d



6.

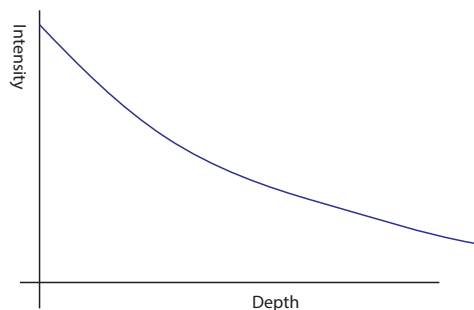


Inverse is blue.

7. $x = 5$.

8. a 0.01398 b 52.53% c 51.53 m d 21.53 m

e



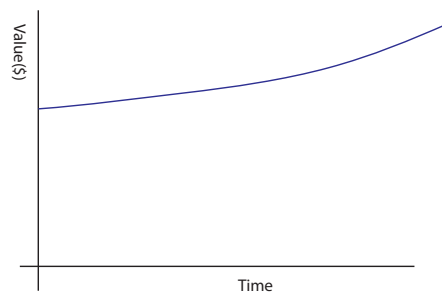
9.

| | | | | | | | | | | | |
|-------|----------|----------|----------|----------|----------|----------|----------|----------|----------|----------|----------|
| Month | 0 | 1 | 2 | 3 | 4 | 5 | 6 | 7 | 8 | 9 | 10 |
| value | \$250.00 | \$250.83 | \$251.67 | \$252.51 | \$253.35 | \$254.19 | \$255.04 | \$255.89 | \$256.74 | \$257.60 | \$258.46 |

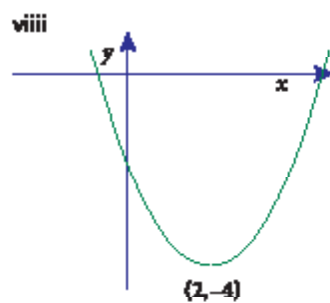
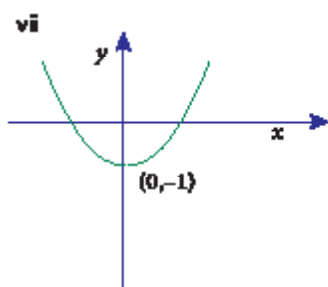
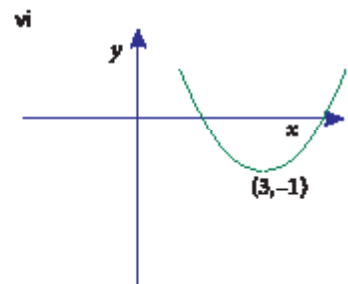
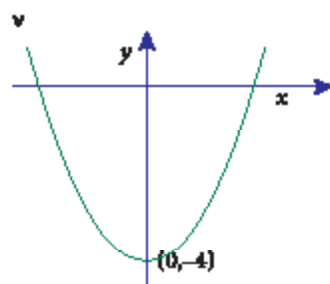
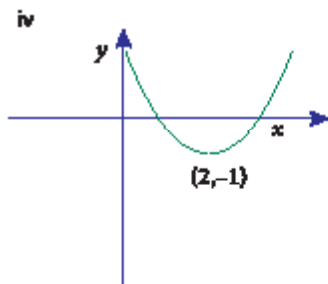
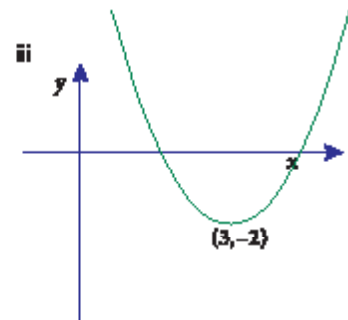
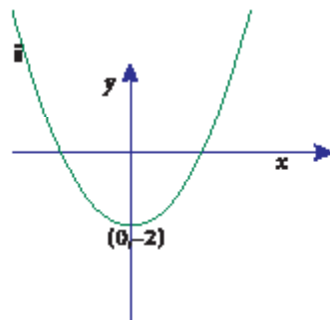
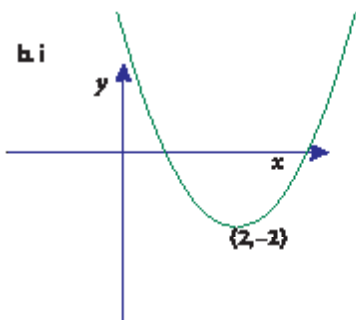
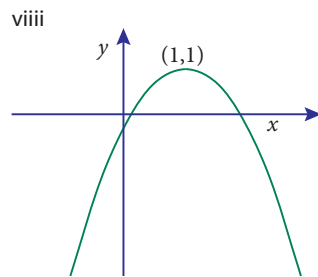
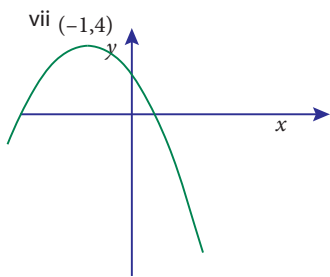
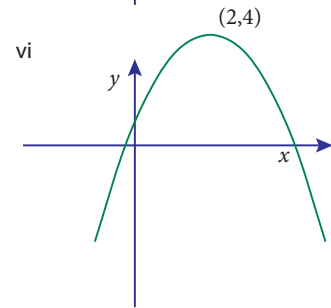
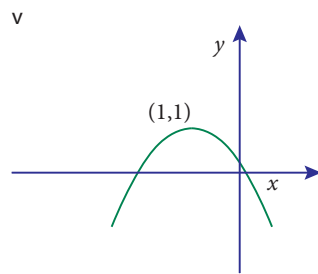
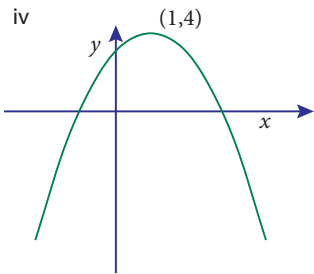
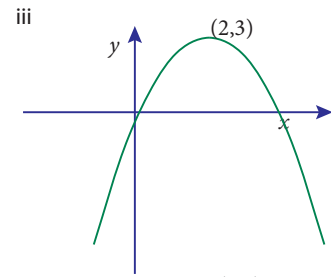
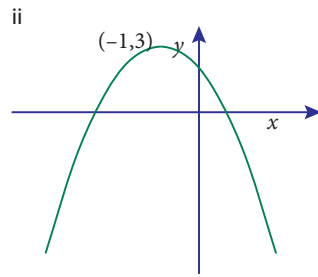
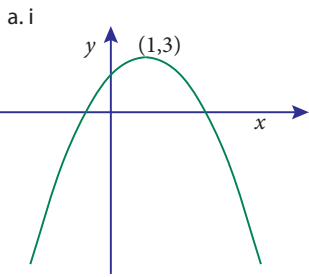
| | | | | | | | | | | |
|-------|----------|----------|----------|----------|----------|----------|----------|----------|----------|----------|
| Month | 11 | 12 | 13 | 14 | 15 | 16 | 17 | 18 | 19 | 20 |
| value | \$259.32 | \$260.19 | \$261.05 | \$261.92 | \$262.80 | \$263.67 | \$264.55 | \$265.43 | \$266.32 | \$267.21 |

| | | | | |
|-------|----------|----------|----------|----------|
| Month | 21 | 22 | 23 | 24 |
| value | \$268.10 | \$268.99 | \$269.89 | \$270.79 |

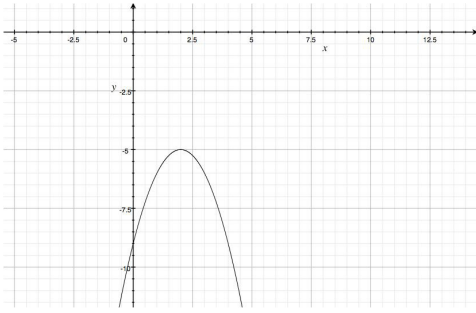
The simple interest option yields \$275 and is better.



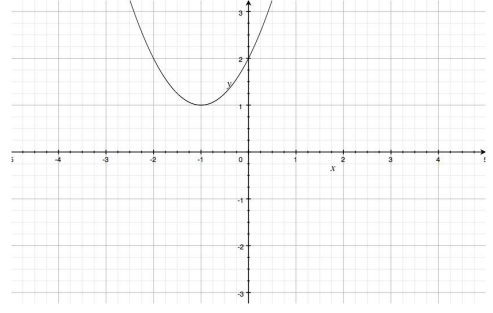
Exercise 2.3.1



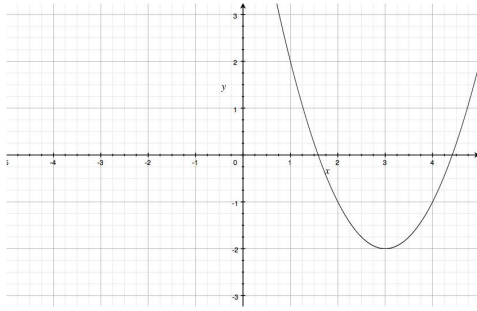
2. a



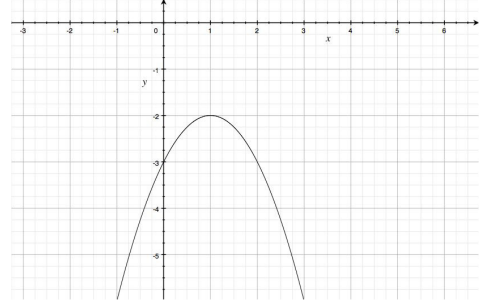
b



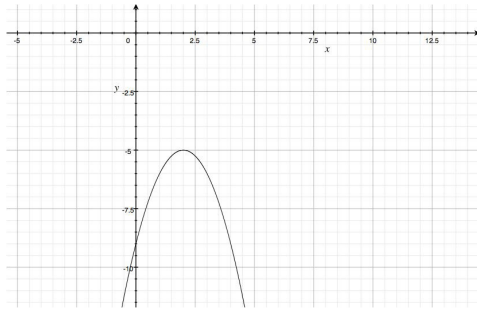
c



d



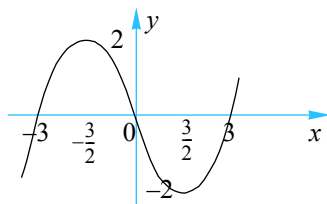
e



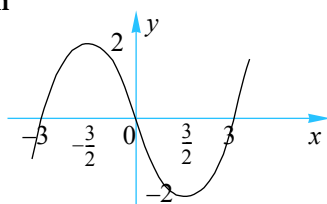
3. a $x = -2$ b $x = 4$ c $x = -1$ d $x = 12$

Exercise 2.3.2

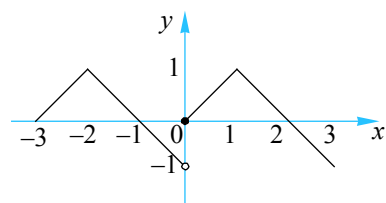
1 a i



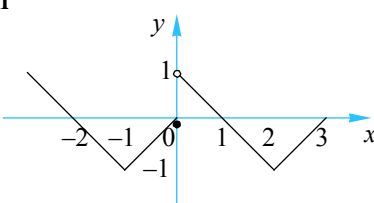
ii



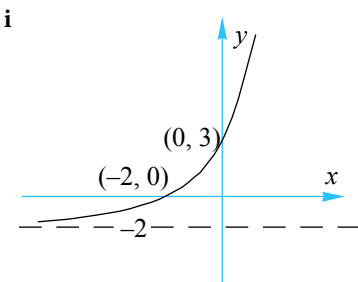
b i



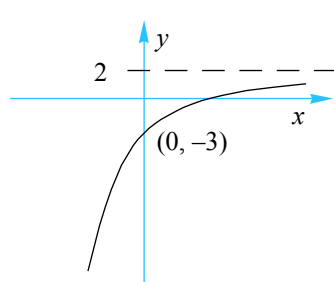
ii



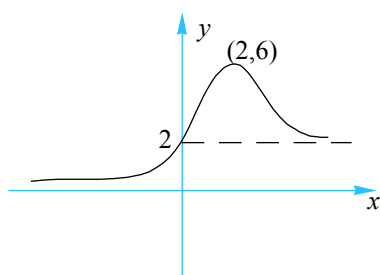
c i



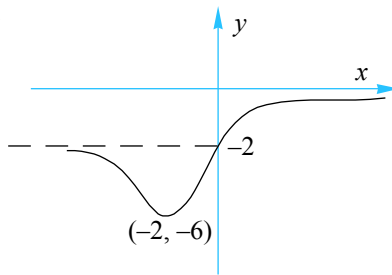
ii



d i



ii

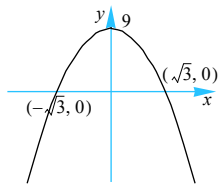


2 a $y = -f(x)$ b $y = f(-x)$ c $y = f(x+1)$

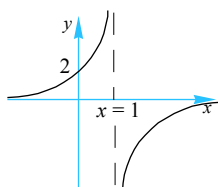
d $y = f(2x)$ e $y = 2f(x)$

Exercise 2.3.3

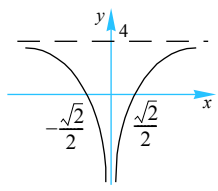
1 a



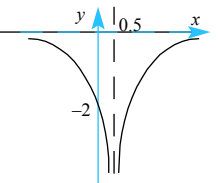
e



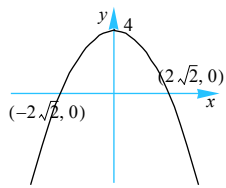
i



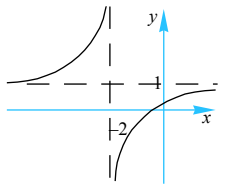
m



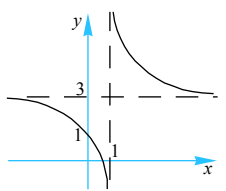
b



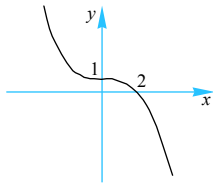
f



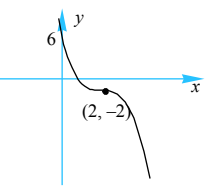
j



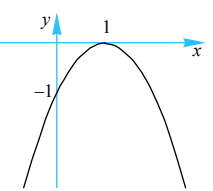
c



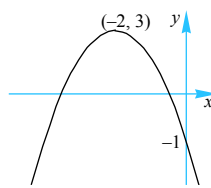
g



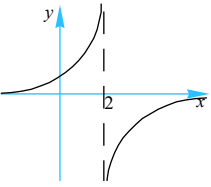
k



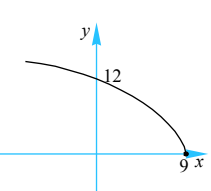
d



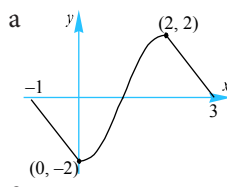
h



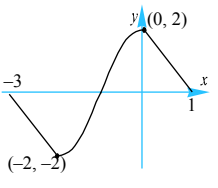
l



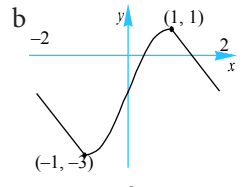
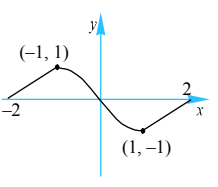
2



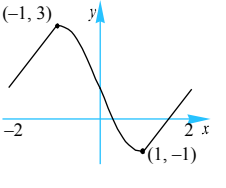
c



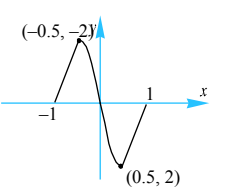
g



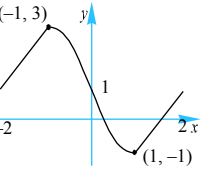
d



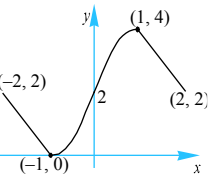
h



e

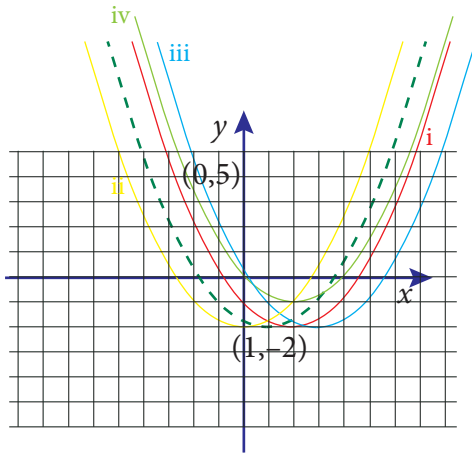


f



Exercise 2.4.1

1. a

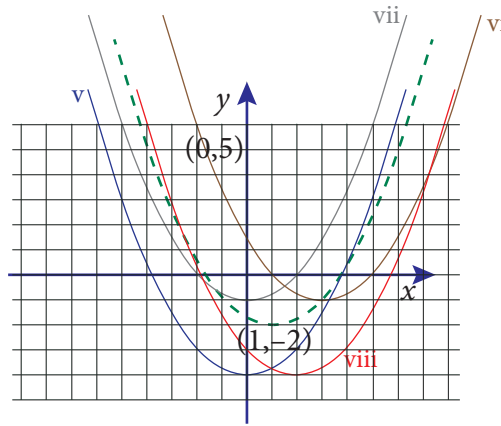


$$y = f(x-1)$$

$$y = f(x+1)$$

$$y = f(x-2)$$

$$y = f(x-1)+1$$



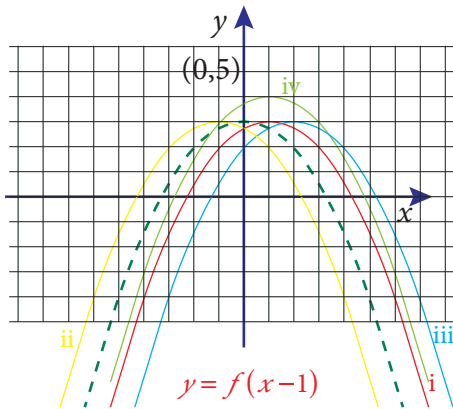
$$y = f(x+1)-2$$

$$y = f(x-2)+1$$

$$y = f(x+1)+1$$

$$y = f(x-1)-2$$

b

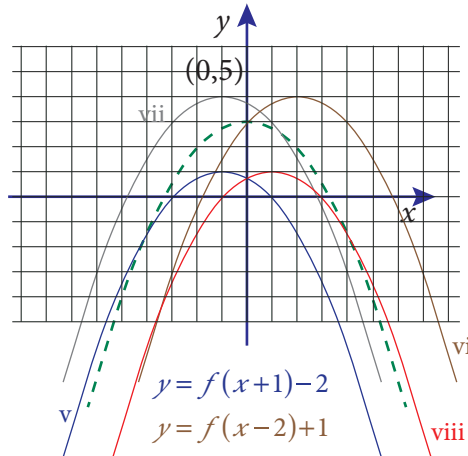


$$y = f(x-1)$$

$$y = f(x+1)$$

$$y = f(x-2)$$

$$y = f(x-1)+1$$



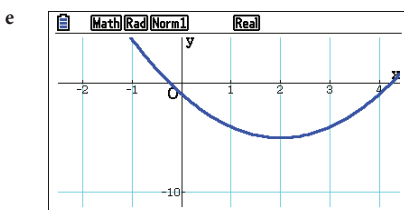
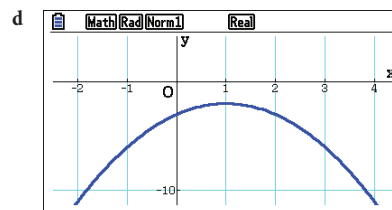
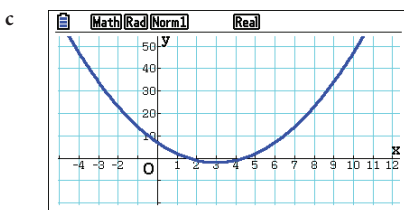
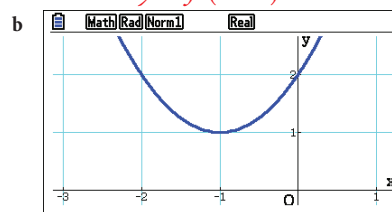
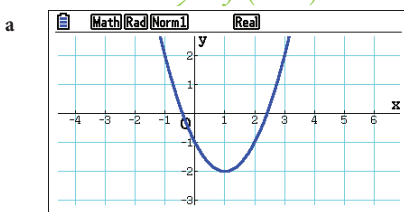
$$y = f(x+1)-2$$

$$y = f(x-2)+1$$

$$y = f(x+1)+1$$

$$y = f(x-1)-2$$

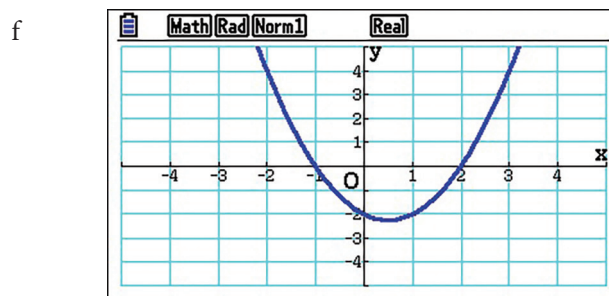
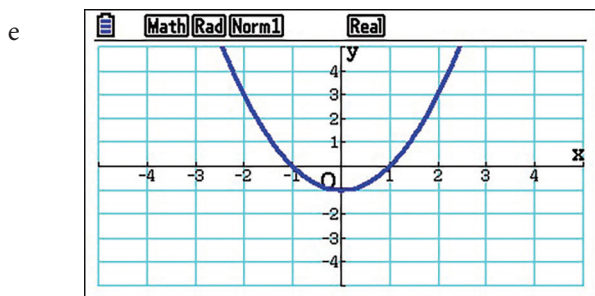
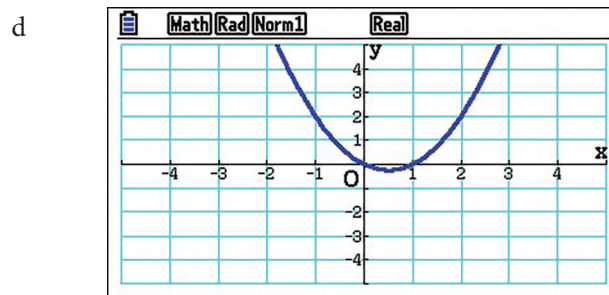
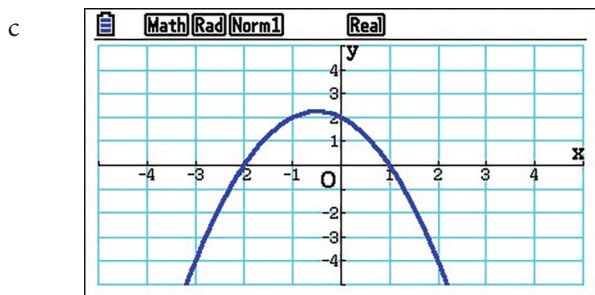
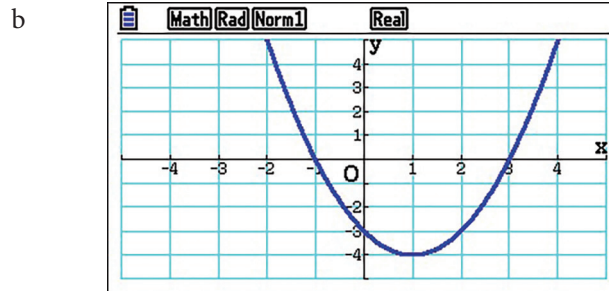
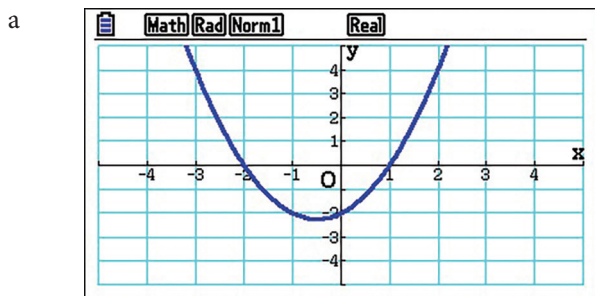
2.



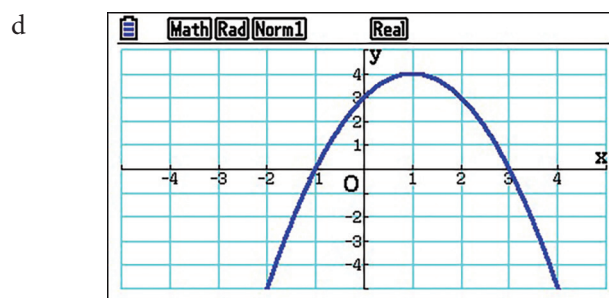
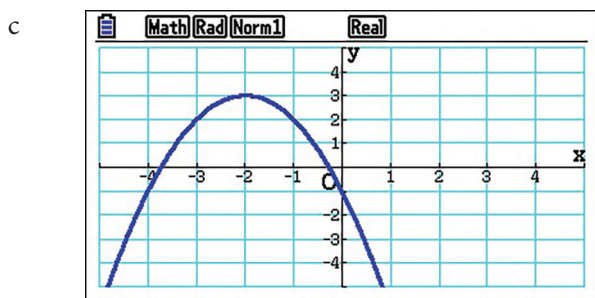
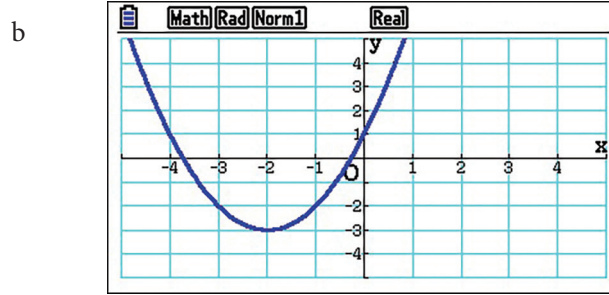
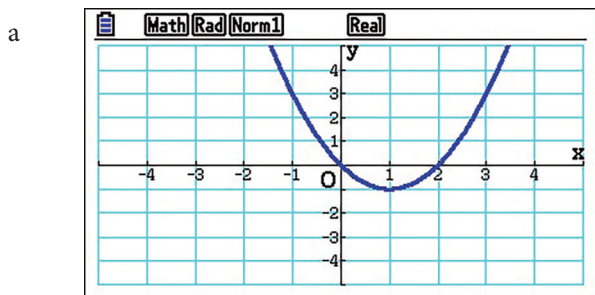
3. a $x = -2$ b $x = 4$ c $x = -1$ d $x = 12$

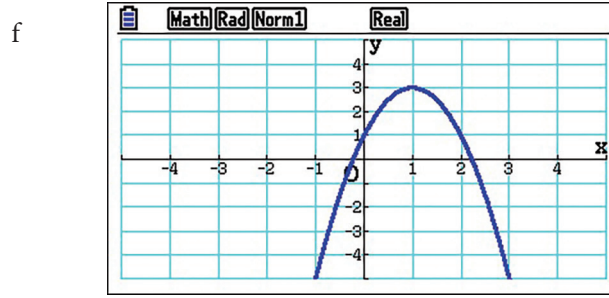
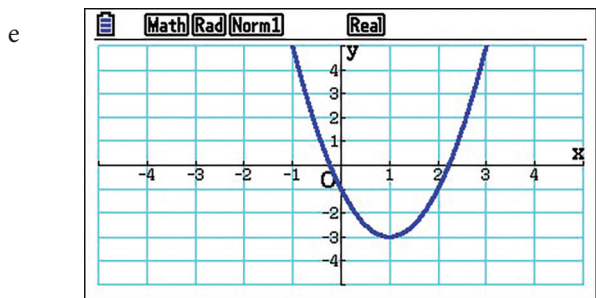
Exercise 2.4.2

1.

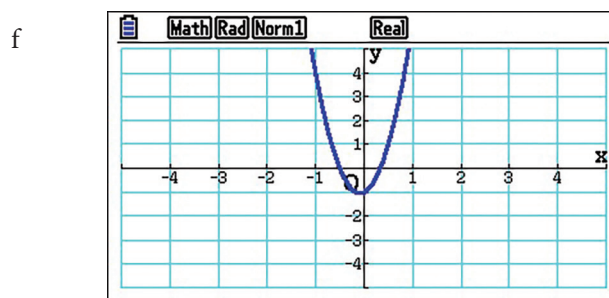
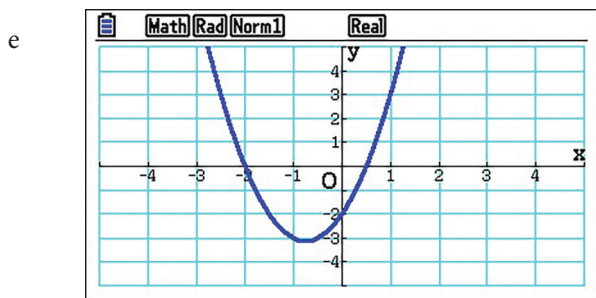
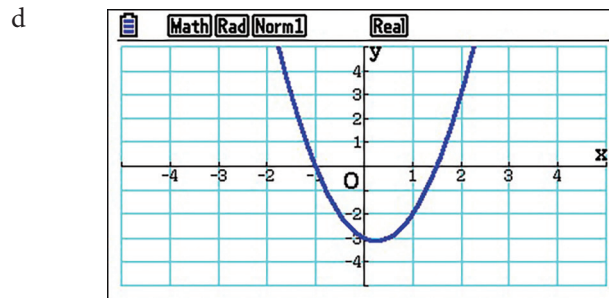
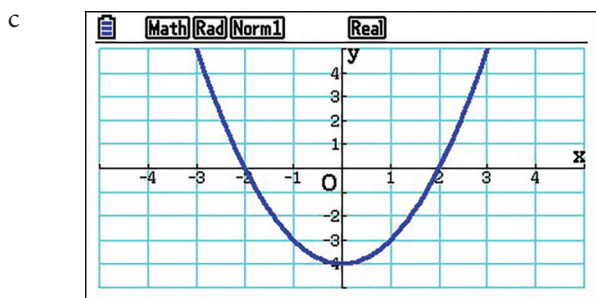
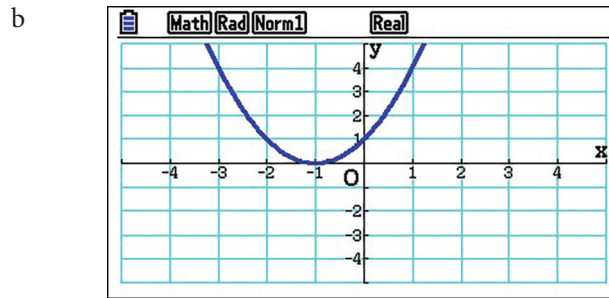
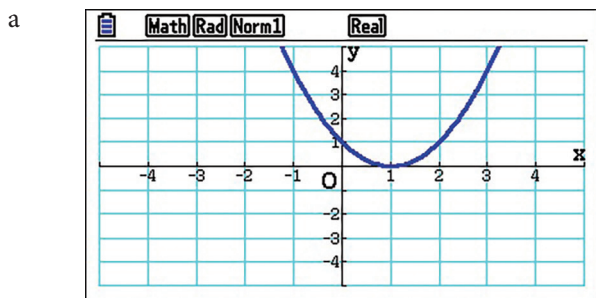


2.



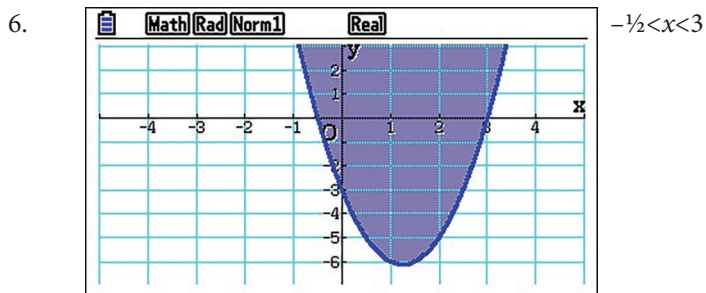


3.

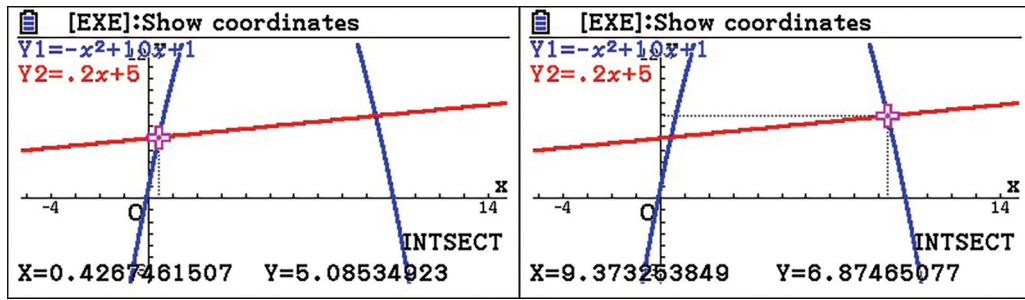


4. $y = 2(x-1)^2 = 4x^2 - 8x + 4$

5. $y = -x^2 + 4x - 3$



7.

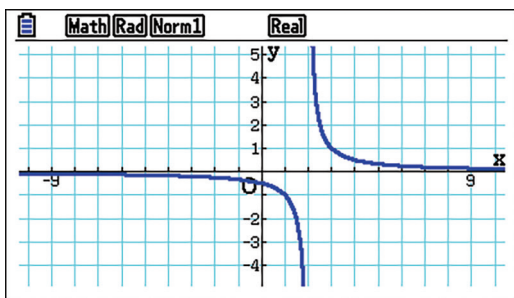


Profitable from 0.43 to 9.37 years.

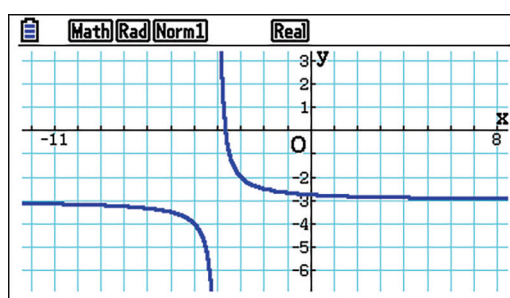
8. Yes - $h(4.5) = 0.225$ (22.5 metres) so the projectile passes over the deck.

Exercise 2.5.1

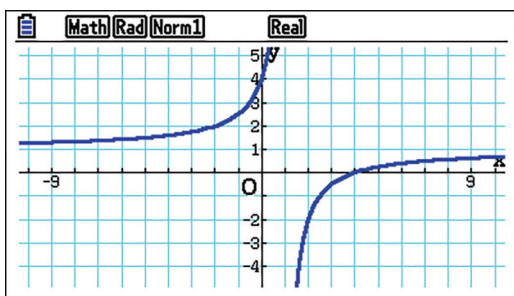
1. i



ii



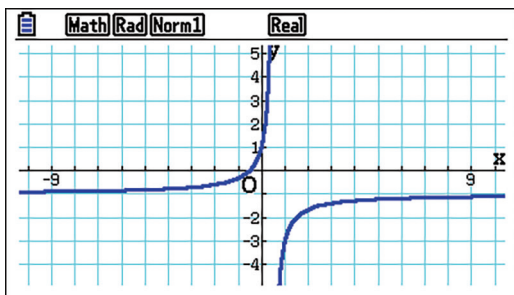
iii



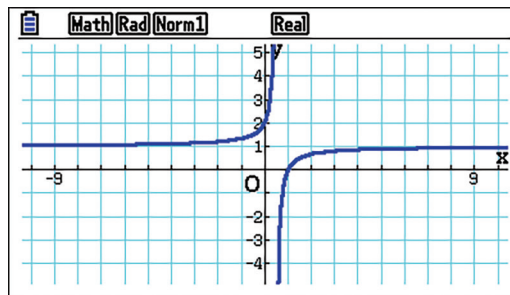
iv



v



vi



2. $y = \frac{1}{x-2} - 1, x \neq 2$

3. $y = \frac{2}{x-1} + 1, x \neq 1$

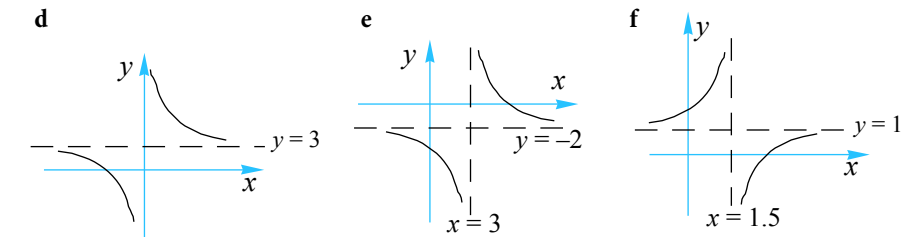
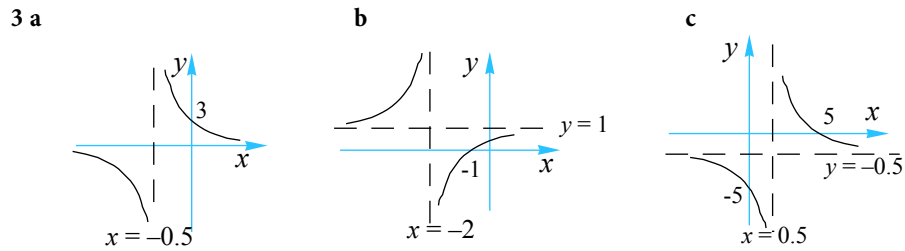
4. $y = 1 - x, y = x - 5$

5. $y = \pm x$

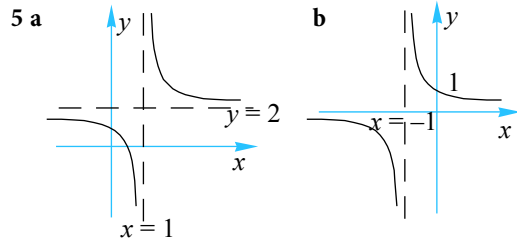
6. $P = \frac{470}{V}$

Exercise 2.5.2

- 1 a $y = 2, x = -1$ b $y = 1, x = -\frac{1}{3}$ c $y = \frac{1}{2}, x = -\frac{1}{4}$
 d $y = -1, x = -3$ e $y = 3, x = 0$ f $y = 5, x = 2$

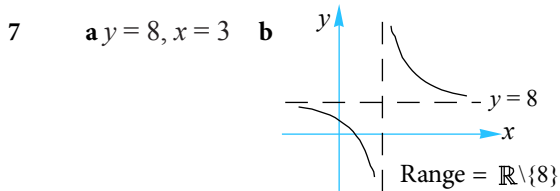
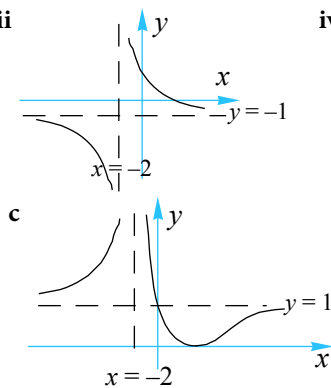


4 $a = 2, c = 4$

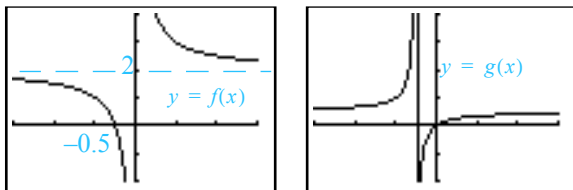


- 6 a i $(0, 1), (2, 0)$ ii $y = -1, x = -2$ iii $\text{iv } d = \mathbb{R} \setminus \{-2\}$

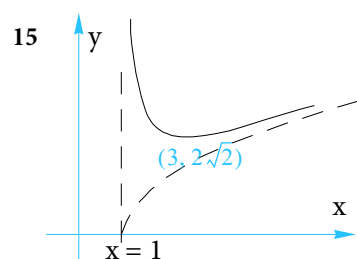
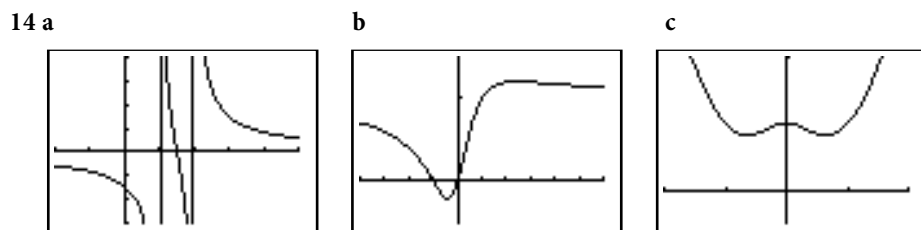
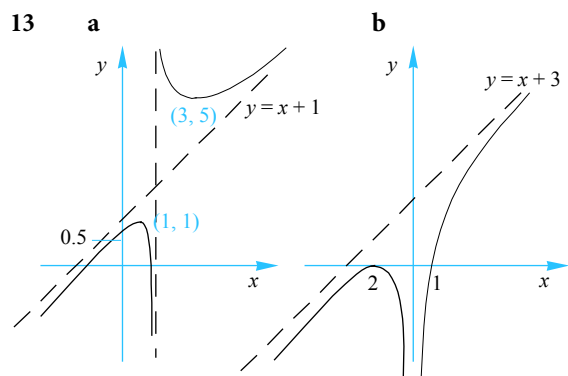
b $f^{-1}: \mathbb{R} \setminus \{-1\} \rightarrow \mathbb{R}$, where $f^{-1}(x) = \frac{2(1-x)}{1+x}$



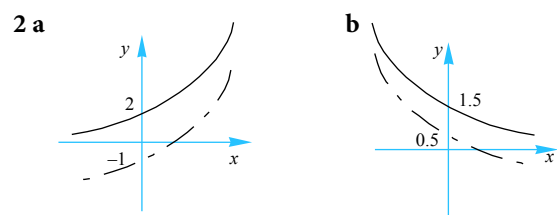
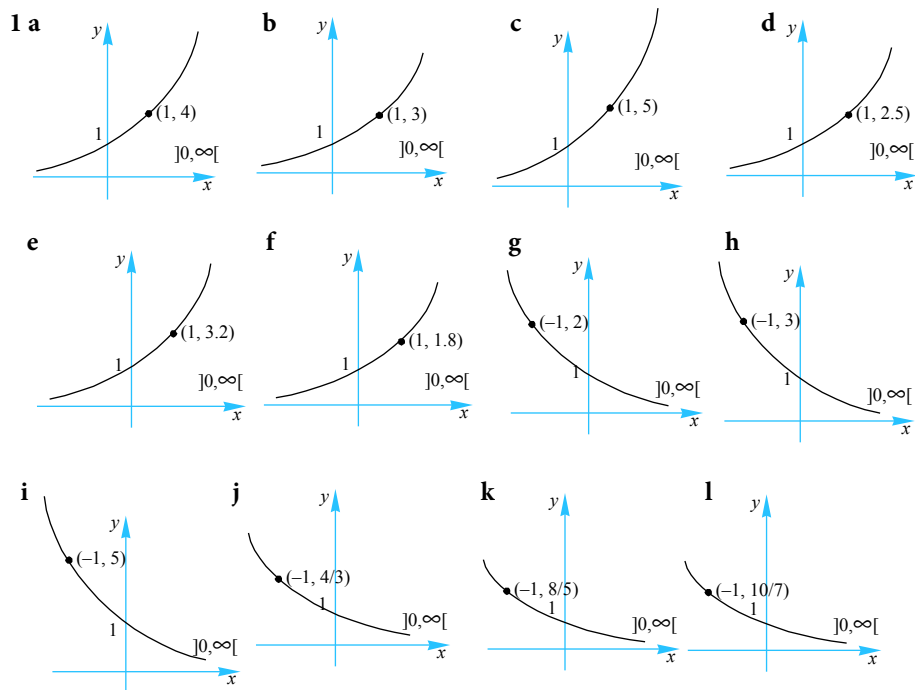
- 8 dom = $\mathbb{R} \setminus \{0\}$, ran = $\mathbb{R} \setminus \{2\}$ dom = $\mathbb{R} \setminus \{-0.5, 0\}$, ran = $\mathbb{R} \setminus \{0.5\}$



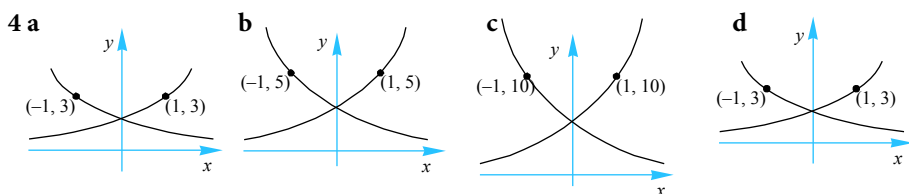
- 9 Asymptotes: a $y = 2x, x = 0$ b $y = \frac{1}{2}x, x = 0$ c $y = -x, x = 0$ d $y = x, x = 0$
- 10 Asymptotes: a $y = x^2, x = 0$ b $y = x^2, x = 0$ c $y = x, x = 0$ d $y = x^3, x = 0$
- 11 Asymptotes: a $y = x+3, x = 0$ b $y = -x+2, x = 0$ c $y = 2x-2, x = 0$
- d $y = x+2, x = 0$
- 12 a i $(0, 4), (2, 0)$ ii $y = 3 - x, x = 1$



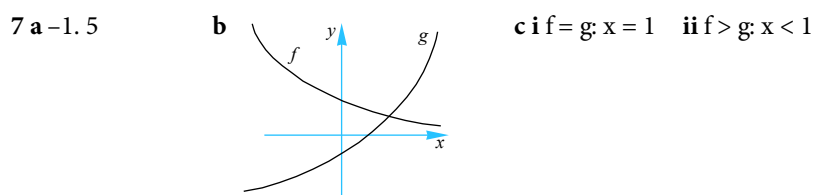
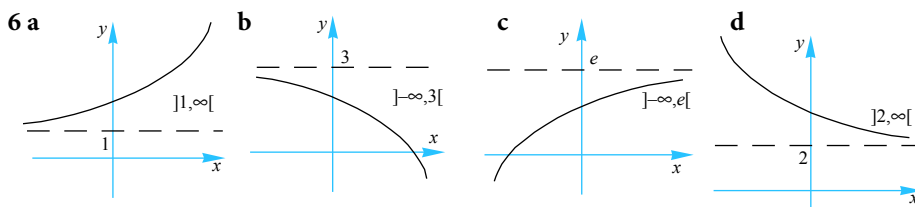
Exercise 2.6.1



3 'b' has a dilation effect on $f(x) = a^x$ (along the y axis).

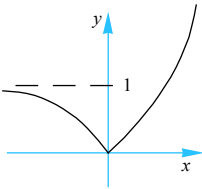


5 a $[1, 16]$ b $[3, 27]$ c $[0.25, 16]$ d $[0.5, 4]$ e $[0.125, 0.25]$ f $[0.1, 10]$

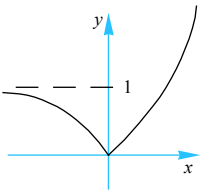


8 a $]2, 2 + e^{-1}[$ b $[-1, 1[$ c $[1 - e, 1 + e^{-1}]$

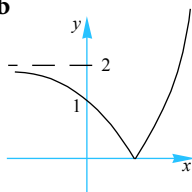
9 a b 2



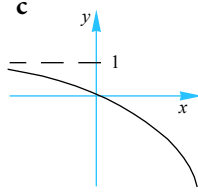
10 a



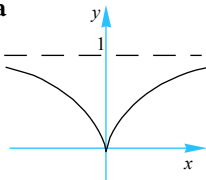
b



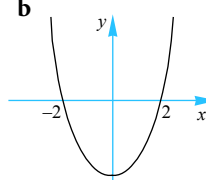
c



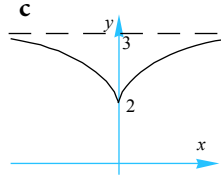
11 a



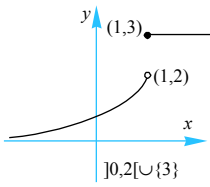
b



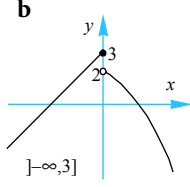
c



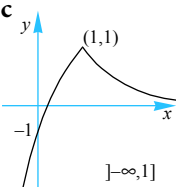
12 a



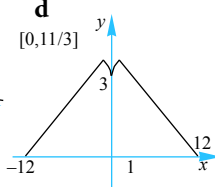
b



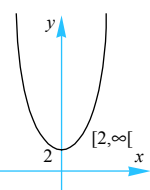
c



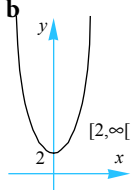
d



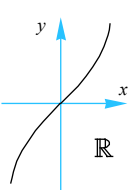
13 a



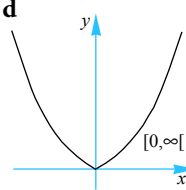
b



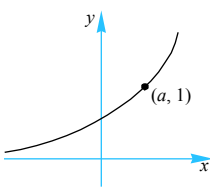
c



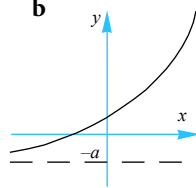
d



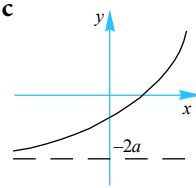
14 a



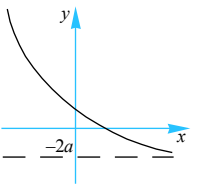
b



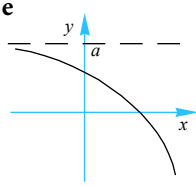
c



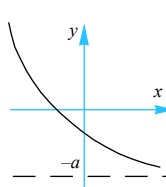
d



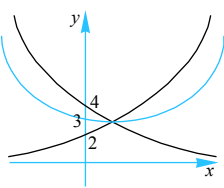
e



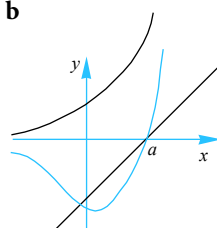
f

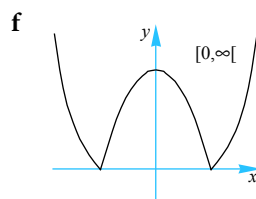
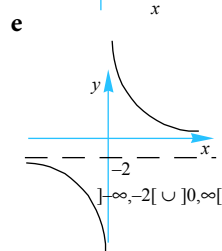
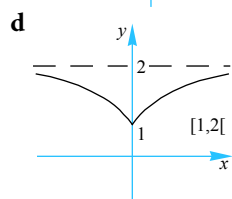
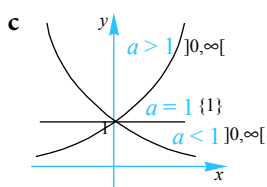
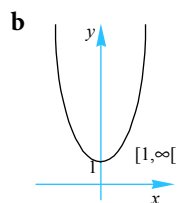
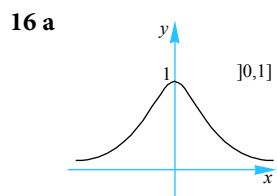


15 a

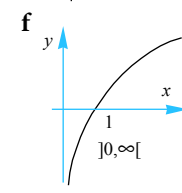
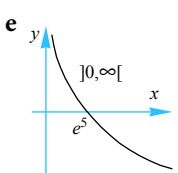
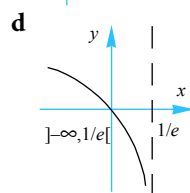
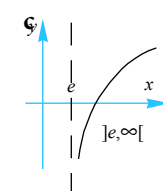
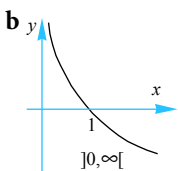
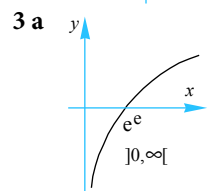
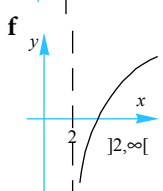
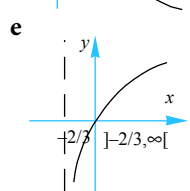
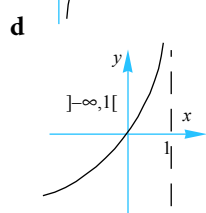
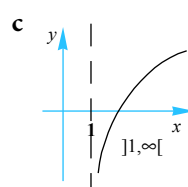
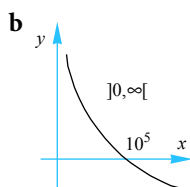
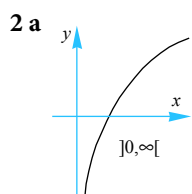
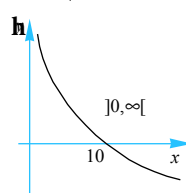
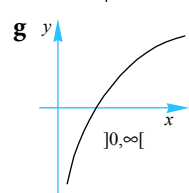
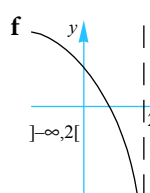
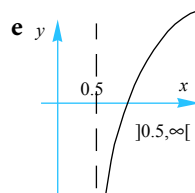
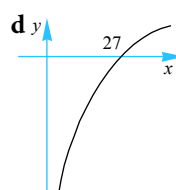
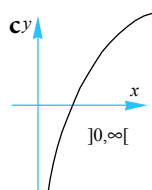
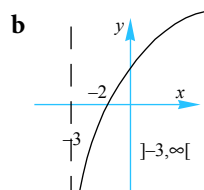
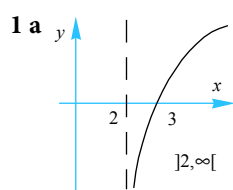


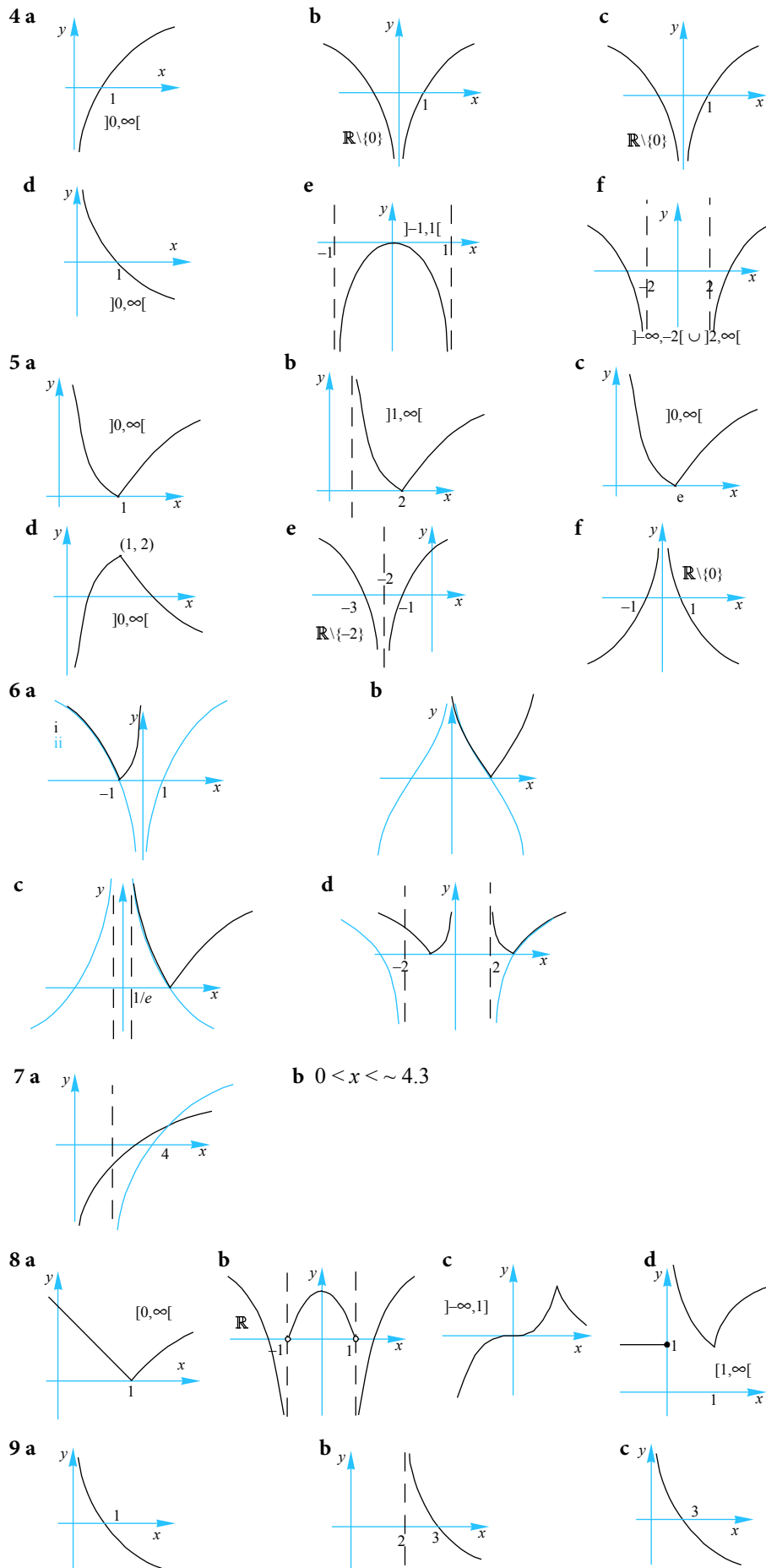
b



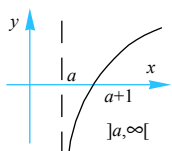


Exercise 2.6.2

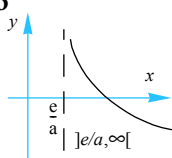




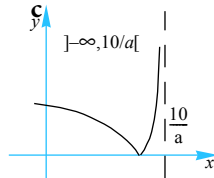
10 a



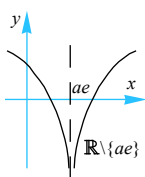
b



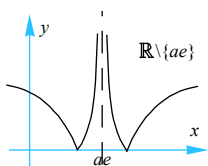
c



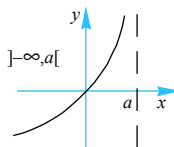
d



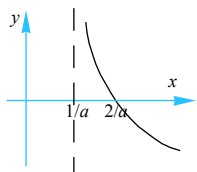
e



f

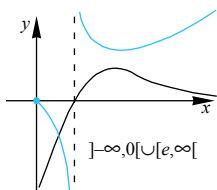


11 a



$$\left\{x : \frac{1}{a} < x < 1 + \frac{1}{a}\right\}$$

12



Exercise 2.7.1

- | | | | | | | |
|----|-----|---|------|---|-----|---|
| 1. | i | 2 | ii | 2 | iii | 1 |
| | iv | 0 | v | 2 | vi | 1 |
| | vii | 2 | viii | 2 | ix | 0 |
| | x | 0 | | | | |
-
- | | | | | | | |
|----|-----|------------------------------|------|-----------------------------|-----|-----------------------------|
| 2. | i | $\frac{-1 \pm \sqrt{57}}{4}$ | ii | $\frac{-1 \pm \sqrt{3}}{2}$ | iii | no real roots |
| | iv | $-1 \pm \sqrt{2}$ | v | 3 | vi | ± 2 |
| | vii | no real roots | viii | 2 | ix | $\frac{3 \pm \sqrt{17}}{4}$ |
| | x | -1, 2 | | | | |
-
- | | | | | | | |
|----|-----|-----|------|-------|-----|----------------------------------|
| 3. | i | 0 | ii | -3 | iii | \mathbb{R} (every real number) |
| | iv | 2 | v | 0 | vi | 1 |
| | vii | 2 | viii | -1, 2 | ix | no real roots |
| | x | 3.5 | | | | |
-
- | | | | | | | |
|----|-----|---------------|------|-------|-----|-------|
| 4. | i | 2.66 | ii | 3.04 | iii | 0.739 |
| | iv | 0.601 | v | 1.69 | vi | 1.30 |
| | vii | no real roots | viii | 0.942 | ix | 1.50 |
| | x | 1.34 | | | | |
-
5. 1
6. $a < -2$ or $a > 2$.
7. Proof
8. 4
9. Proof
10. $\frac{-1 \pm \sqrt{1-4a}}{2}$
11. $\pm \sqrt{k}$
12. $2 \pm 2\sqrt{2}$
13. $-339,343\frac{2}{3}$
14. 3
15. 3 (there is a fairly large negative solution)

Exercise 2.8.1

1. a $h(x) = -1.6 \times 10^{-3}x^2 + 0.8x, 0 \leq x \leq 500$ b 32.76m
2. a 2.51×10^{-13} moles per litre b in terms of H-ion conc. $\frac{10^{-6.5}}{10^{-12.6}} \approx 1260000$
3. About 32 times.
4. 10^8 32 times.
5. $\sqrt{215}$ or approx 14.6 kph.
6. $\frac{5 + \sqrt{73}}{2}$ hrs
7. i $\sim 17.2\text{m}$ ii 12m
8. Many correct answers.
9. 149.3°
10. $\frac{3 - \sqrt{5}}{2}; 1$
11. 7

Exercise 1.2.1

1 Simplify the following.

e $\left(\frac{2x^3}{4y^2}\right)^2 \times \frac{12y^6}{8x^4}$ f $\frac{3^{n+2} + 9}{3}$ g $\frac{4^{n+2} - 16}{4}$ h $\frac{4^{n+2} - 16}{2}$

i $\left(\frac{1}{2b}\right)^4 - \frac{b^2}{16}$

2 Simplify the following.

e $\frac{(xy)^6}{64x^6}$ f $\frac{27^{n+2}}{6^{n+2}}$

3 Simplify the following.

e $\frac{2^n \times 4^{2n+1}}{2^{1-n}}$ f $\frac{2^{2n+1} \times 4^{-n}}{(2^n)^3}$ g $\frac{x^{4n+1}}{(x^{n+1})(n-1)}$ h $\frac{x^{4n^2+n}}{(x^{n+1})(n-1)}$

i $\frac{(3^x)(3^{x+1})(3^2)}{(3^x)^2}$

5 Simplify the following, leaving your answer in positive power form.

e $\frac{(-2)^3 \times 2^{-3}}{(x^{-1})^2 \times x^2}$ f $\frac{(-a)^3 \times a^{-3}}{(b^{-1})^{-2} b^{-3}}$

6 Simplify the following.

e $\frac{(x-1)^{-3}}{(x+1)^{-1}(x^2-1)^2}$ f $\frac{y(x^{-1})^2 + x^{-1}}{x+y}$

7 Simplify the following.

a $5^{n+1} - 5^{n-1} - 2 \times 5^{n-2}$ b $a^{x-y} \times a^{y-z} \times a^{z-x}$ c $\left(\frac{a^{\frac{1}{2}} b^3}{ab^{-1}}\right)^2 \times \frac{1}{ab}$

d $\left(\frac{a^{m+n}}{a^n}\right)^m \times \left(\frac{a^{n-m}}{a^n}\right)^{m-n}$ e $\frac{p^{-2} - q^{-2}}{p^{-1} - q^{-1}}$ f $\frac{1}{1+a^{\frac{1}{2}}} - \frac{1}{1-a^{\frac{1}{2}}}$

g $\frac{2^{n+4} - 2(2^n)}{2(2^{n+3})}$ h $\sqrt{a} \sqrt{a} \sqrt{a}$

8 Simplify the following.

a $\frac{\sqrt{x} \times \sqrt[3]{x^2}}{\sqrt[4]{x}}$ b $\frac{b^{n+1} \times 8a^{2n-1}}{(2b)^2(ab)^{-n+1}}$ c $\frac{2^n - 6^n}{1 - 3^n}$

d $\frac{7^{m+1} - 7^m}{7^n - 7^{n+2}}$ e $\frac{5^{2n+1} + 25^n}{5^{2n} + 5^{1+n}}$

Exercise 1.2.2

1. Solve the following equations.

g $\{x \mid 3^{2x-4} = 1\}$

h $\{x \mid 4^{2x+1} = 128\}$

i $\{x \mid 27^x = 3\}$

Exercise 1.2.3

1 Use the definition of a logarithm to determine the following.

g $\log_4 1$ h $\log_{10} 1$ i $\log_{\frac{1}{2}} 2$ j $\log_{\frac{1}{3}} 9$

k $\log_3 \sqrt{3}$ l $\log_{10} 0.01$

3 Change the following logarithmic expression into its equivalent exponential form.

f $\log_2(ax - b) = y$

4 Solve for x in each of the following.

g $\log_x 16 = 2$ h $\log_x 81 = 2$

i $\log_x \left(\frac{1}{3}\right) = 3$ j $\log_2(x - 5) = 4$

k $\log_3 81 = x + 1$ l $\log_3(x - 4) = 2$

5 Solve for x in each of the following, giving your answer to 4 d.p.

g $\log_e(x + 2) = 4$ h $\log_e(x - 2) = 1$ i $\log_x e = -2$

Exercise 1.2.4

1 Without using a calculator, evaluate the following.

e $\log_2 20 - \log_2 5$ f $\log_2 10 - \log_2 5$

2 Write down an expression for $\log a$ in terms of $\log b$ and $\log c$ for the following.

e $a = b^3 c^4$ f $a = \frac{b^2}{\sqrt{c}}$

4 Express each of the following as an equation that does not involve a logarithm.

d $\log_2 x = y + 1$ e $\log_2 y = \frac{1}{2} \log_2 x$ f $3 \log_2(x + 1) = 2 \log_2 y$

5 Solve the following equations.

d $\log_{10}(x + 3) - \log_{10} x = \log_{10} x + \log_{10} 2$

e $\log_{10}(x^2 + 1) - 2 \log_{10} x = 1$

f $\log_2(3x^2 + 28) - \log_2(3x - 2) = 1$

g $\log_{10}(x^2 + 1) = 1 + \log_{10}(x - 2)$

h $\log_2(x + 3) = 1 - \log_2(x - 2)$

i $\log_6(x + 5) + \log_6 x = 2$

j $\log_3(x - 2) + \log_3(x - 4) = 2$

k $\log_2 x - \log_2(x - 1) = 3 \log_2 4$

l $\log_{10}(x + 2) - \log_{10} x = 2 \log_{10} 4$

6 Simplify the following

c $2 \log_a x + 3 \log_a(x + 1)$

d $5 \log_a x - \frac{1}{2} \log_a(2x - 3) + 3 \log_a(x + 1)$

e $\log_{10} x^3 + \frac{1}{3} \log x^3 y^6 - 5 \log_{10} x$

f $2 \log_2 x - 4 \log_2 \left(\frac{1}{y}\right) - 3 \log_2 xy$

7 Solve the following

d $\log_3 x + \log_3(x - 8) = 2$

e $\log_2 x + \log_2 x^3 = 4$

f $\log_3 \sqrt{x} + 3 \log_3 x = 7$

8 Solve for x .

c $\log_4 x^4 = (\log_4 x)^4$ d $\log_5 x^5 = (\log_5 x)^5$

e Investigate the solution to $\log_n x^n = (\log_n x)^n$.

9 Solve the following, giving an exact answer and an answer to 2 d.p.

e $3^{4x+1} = 10$ f $0.8^{x-1} = 0.4$ g $10^{-2x} = 2$

h $2.7^{0.3x} = 9$ i $0.2^{-2x} = 20$ j $\frac{2}{1+0.4^x} = 5$

k $\frac{2^x}{1-2^x} = 3$ l $\frac{3^x}{3^x+3} = \frac{1}{3}$

10 Solve for x .

c $\log_{10}(x^2 - 3x + 6) = 1$ d $(\log_{10} x)^2 - 11\log_{10} x + 10 = 0$

e $\log_x(3x^2 + 10x) = 3$ f $\log_{x+2}(3x^2 + 4x - 14) = 2$

11 Solve the following simultaneous equations.

c
$$\begin{aligned} xy &= 2 \\ 2\log_2 x - \log_2 y &= 2 \end{aligned}$$

12 Express each of the following as an equation that does not involve a logarithm.

c $\ln x = y - 1$

13 Solve the following for x .

c $\log_e(x+1) + \log_e x = 0$ d $\log_e(x+1) - \log_e x = 0$

14 Solve the following for x .

c $-5 + e^{-x} = 2$ d $200e^{-2x} = 50$ e $\frac{2}{1-e^{-x}} = 3$

f $70e^{-\frac{1}{2}x} + 15 = 60$ g $\ln x = 3$ h $2\ln(3x) = 4$

i $\ln(x^2) = 9$ j $\ln x - \ln(x+2) = 3$ k $\ln\sqrt{x+4} = 1$ l $\ln(x^3) = 9$

15 Solve the following for x .

c $e^{2x} - 5e^x + 6 = 0$

d $e^{2x} - 2e^x + 1 = 0$

e $e^{2x} - 6e^x + 5 = 0$

f $e^{2x} - 9e^x - 10 = 0$

16 Solve each of the following.

a $4^{x-1} = 132$

b $5^{5x-1} = 3^{1-2x}$

c $3^{2x+1} - 7 \times 3^x + 4 = 0$

d $2^{2x+3} - 7 \times 2^{x+1} + 5 = 0$

e $3 \times 4^{2x+1} - 2 \times 4^{x+2} + 5 = 0$

f $3^{2x} - 3^{x+2} + 8 = 0$

g $2\log x + \log 4 = \log(9x - 2)$

h $2\log 2x - \log 4 = \log(2x - 1)$

i $\log_3 2x + \log_3 81 = 9$

j $\log_2 x + \log_x 2 = 2$

Exercise 2.1.1

2 Find the range for each of the following.

i $y = \sqrt{x}, x \geq 0$ j $y = \sqrt{x}, 1 \leq x \leq 25$

k $y = \frac{4}{x+1}, x > 0$ l $\{(x,y): y^2 = x, x \geq 1\}$

4 Determine the implied domain for each of the following relations.

h $y = \sqrt{x+a}, a > 0$ i $y = \frac{a}{\sqrt{x-a}}, a > 0$

j $x^2 - y^2 = a^2$ k $y^2 - x^2 = a^2$

5 Find the range of the following relations.

f $y = a - \frac{a}{x^2}, a > 0$

g $y = 2\sqrt{x-a} - a, a > 0$ h $y = \frac{2a}{\sqrt{a^2-x}}, a < 0$

Exercise 2.1.2

5. The function f is defined as $f:]-\infty, \infty[\mapsto \mathbb{R}$, where $f(x) = x^2 - 4$.

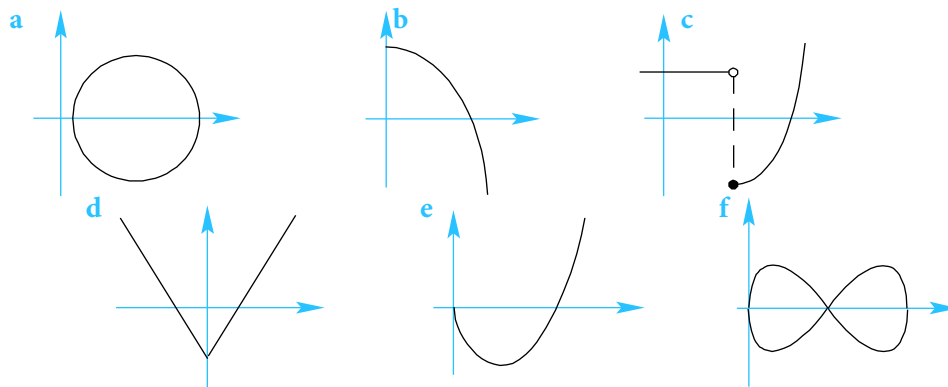
a Sketch the graph of:

i f ii $y = x + 2, x \in]-\infty, \infty[$

b Find:

i $\{x: f(x) = 4\}$ ii $\{x: f(x) = x + 2\}$

6 Which of the following relations are also functions?



7 Use both visual and algebraic tests to show that the following relations are also functions:

a $x \mapsto x^3 + 2, x \in]0, 5[$ b $x \mapsto \sqrt{x} + 1, x \in [0, 9[$

c $\{(x, y): y^3 = x + 1, x \in \mathbb{R}\}$ d $\{(x, y): y = x^2 + 1, x \in \mathbb{R}\}$

8 Use an algebraic method to decide which of the following relations are also functions:

a $f: x \mapsto \frac{1}{x}, x \in \mathbb{R} \setminus \{0\}$ b $\{(x, y): y^2 - x = 9, x \geq -9\}$

c $\{(x, y): y^2 - x^2 = 9, x \geq -9\}$ d $f(x) = \frac{1}{x^2} + 1, x \neq 0$

e $f(x) = 4 - 2x^2, x \in \mathbb{R}$ f $f: x \mapsto \frac{4}{x+1}, x \in \mathbb{R} \setminus \{-1\}$

9 Sketch the graph of $f: x \mapsto \frac{x^2}{x^2 + 2}, x \in \mathbb{R}$ and use it to:

a show that f is a function b determine its range.

10 A function is defined by $f: x \mapsto \frac{x+10}{x-8}, x \neq 8$ and $x \geq 0$.

a Determine the range of f .

b Find the value of a such that $f(a) = a$.

11 Consider the functions $h(x) = \frac{1}{2}(2^x + 2^{-x})$ and $k(x) = \frac{1}{2}(2^x - 2^{-x})$.

a Show that $2[h(x)]^2 = h(2x) + 1$.

b If $[h(x)]^2 - [k(x)]^2 = a$, find the constant a .

12 Which of the following functions are identical? Explain.

a $f(x) = \frac{x}{x^2}$ and $h(x) = \frac{1}{x}$ b $f(x) = \frac{x^2}{x}$ and $h(x) = x$.

c $f(x) = x$ and $h(x) = \sqrt{x^2}$ d $f(x) = x$ and $h(x) = (\sqrt{x})^2$.

13 Find the largest possible subset X of \mathbb{R} , so that the following relations are one-to-one increasing functions:

a $f: X \rightarrow \mathbb{R}$, where $f(x) = x^2 + 6x + 10$

b $f: X \rightarrow \mathbb{R}$, where $f(x) = \sqrt{9 - x^2}$

c $f: X \rightarrow \mathbb{R}$, where $f(x) = \sqrt{x^2 - 9}$

d $f: X \rightarrow \mathbb{R}$, where $f(x) = \frac{1}{3x - x^2}$, $x \neq 0, 3$

14 An isosceles triangle ABC has two side lengths measuring 4 cm and a variable altitude. Let the altitude be denoted by x cm.

a Find, in terms of x , a relation for:

i its perimeter, $p(x)$ cm and specify its implied domain.

ii its area, $A(x)$ cm² and specify its implied domain.

b Sketch the graph of:

i $p(x)$ and determine its range.

ii $A(x)$ and determine its range.

Exercise 2.1.4

3 All of the following functions are mappings of $\mathbb{R} \rightarrow \mathbb{R}$ unless otherwise stated.

a Determine the composite functions $(f \circ g)(x)$ and $(g \circ f)(x)$, if they exist.

b For the composite functions in part a that do exist, find their range.

viii $f(x) = x - 4, g(x) = |x|$

ix $f(x) = x^3 - 2, g(x) = |x + 2|$

xi $f(x) = \frac{x}{x+1}, x \neq -1, g(x) = x^2$

xiii $f(x) = 2^x, g(x) = x^2$

xv $f(x) = \frac{2}{\sqrt{x-1}}, x > 1, g(x) = x^2 + 1$

x $f(x) = \sqrt{4-x}, x \leq 4, g(x) = x^2$

xii $f(x) = x^2 + x + 1, g(x) = |x|$

xiv $f(x) = \frac{1}{x+1}, x \neq -1, g(x) = x - 1$

xvi $f(x) = 4^x, g(x) = \sqrt{x}$

13 Find $(h \circ f)(x)$, given that $h(x) = \begin{cases} x^2 + 4, & x \geq 1 \\ 4 - x, & x < 1 \end{cases}$ and $f: x \mapsto x - 1, x \in \mathbb{R}$.

Sketch the graph of $(h \circ f)(x)$ and use it to find its range.

14 a Given three functions, f, g and h , when would $h \circ g \circ f$ exist?

b If $f: x \mapsto x + 1, x \in \mathbb{R}, g: x \mapsto x^2, x \in \mathbb{R}$ and $h: x \mapsto 4x, x \in \mathbb{R}$, find $(h \circ g \circ f)(x)$.

15 Given the functions $f(x) = e^{2x-1}$ and $g(x) = \frac{1}{2}(\ln x + 1)$ find, where they exist:

a $(f \circ g)$ b $(g \circ f)$ c $(f \circ f)$

In each case find the range of the composite function.

16 Given that $h(x) = \log_{10}(4x - 1), x > \frac{1}{4}$ and $k(x) = 4x - 1, x \in]-\infty, \infty[$, find, where they exist:

a $(h \circ k)$ b $(k \circ h)$.

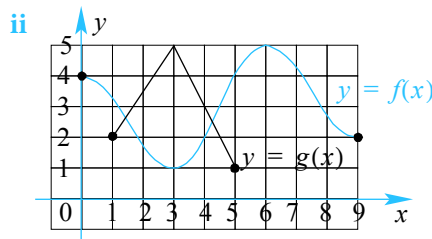
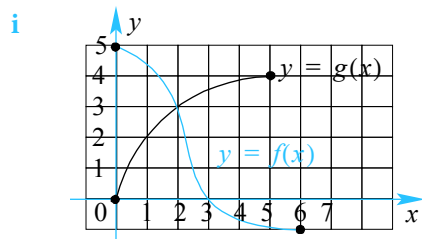
17 Given the functions $f(x) = \sqrt{x^2 - 9}, x \in \mathbf{S}$ and $g(x) = |x| - 3, x \in \mathbf{T}$, find the largest positive subsets of \mathbb{R} so that:

a $g \circ f$ exists b $f \circ g$ exists.

18 For each of the following functions:

a determine if $f \circ g$ exists and sketch the graph of $f \circ g$ when it exists.

b determine if $g \circ f$ exists and sketch the graph of $g \circ f$ when it exists.



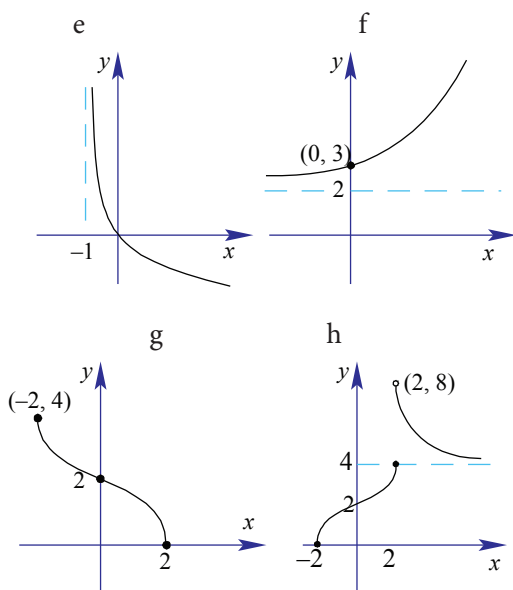
19 Given the functions $f: \mathbf{S} \rightarrow \mathbb{R}$ where $f(x) = e^{x+1}$ and $g: \mathbf{S} \rightarrow \mathbb{R}$ where $g(x) = \ln 2x$ where $\mathbf{S} =]0, \infty[$.

a State the domain and range of both f and g .

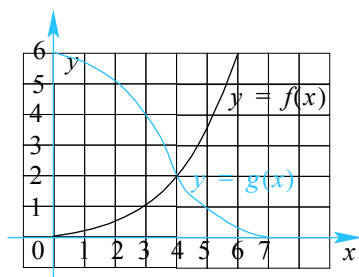
- b Giving reasons, show that $g \circ f$ exists but $f \circ g$ does not exist.
- c Fully define $g \circ f$, sketch its graph and state its range.
- 20 The functions f and g are given by $f(x) = \begin{cases} \sqrt{x-1} & \text{if } x \geq 1 \\ x-1 & \text{if } 0 < x < 1 \end{cases}$ and $g(x) = x^2 + 1$.
- a Show that $f \circ g$ is defined. b Find $(f \circ g)(x)$ and determine its range.
- 21 Let $f: \mathbb{R}^+ \rightarrow \mathbb{R}^+$ where $f(x) = \begin{cases} \frac{1}{x^2}, & 0 < x \leq 1 \\ \frac{1}{\sqrt{x}}, & x > 1 \end{cases}$.
- a Sketch the graph of f .
- b Define the composition $f \circ f$, justifying its existence.
- c Sketch the graph of $f \circ f$, giving its range.
- 22 Consider the functions $f:]1, \infty[\rightarrow \mathbb{R}$ where $f(x) = \sqrt{x}$ and $g: \mathbb{R} \setminus \{0\} \rightarrow \mathbb{R}$ where $g(x) = x^2$.
- a Sketch the graphs of f and g on the same set of axes.
- b Prove that $g \circ f$ exists and find its rule.
- c Prove that $f \circ g$ cannot exist.
- d If a new function $g^*: S \rightarrow \mathbb{R}$ where $g^*(x) = g(x)$ is now defined, find the largest positive subset of \mathbb{R} so that $f \circ g^*$ does exist. Find $f \circ g^*$, sketch its graph and determine its range.
- 23 Given that $f(x) = \frac{ax-b}{cx-a}$, show that $f \circ f$ exists and find its rule.
- 24 a Sketch the graphs of $f(x) = \frac{1}{a}x^2$ and $g(x) = \sqrt{2a^2 - x^2}$, where $a > 0$.
- b Show that $f \circ g$ exists, find its rule and state its domain.
- c Let S be the largest subset of \mathbb{R} so that $g \circ f$ exists.
- i Find S .
- ii Fully define $g \circ f$, sketch its graph and find its range.

Exercise 2.1.5

5 Sketch the inverse of the following functions.



18 Consider the functions f and g :



- a Does $g \circ f$ exist? Justify your answer.
 - b Does $(g \circ f)^{-1}$ exist? Justify your answer.
- If it does exist, sketch the graph of $(g \circ f)^{-1}$.

19 a On the same set of axes, sketch the graph of $f(x) = -x^3$ and its inverse, $f^{-1}(x)$.

b The function g is given by $g(x) = \begin{cases} 2x + 1, & x < -1 \\ -x^3, & -1 \leq x \leq 1 \\ 2x - 1, & x > 1 \end{cases}$.

- i Sketch the graph of g .
- ii Fully define its inverse, g^{-1} , stating why it exists.
- iii Sketch the graph of g^{-1} .
- iv Find $\{x : g(x) = g^{-1}(x)\}$.

20 Consider the functions $t(x) = e^x$ and $m(x) = \sqrt{x}$.

- a Find, where they exist, the composite functions:
 - i $(tom)(x)$
 - ii $(mot)(x)$
- b With justification, find and sketch the graphs of:
 - i $(tom)^{-1}(x)$
 - ii $(mot)^{-1}(x)$
- c Find:
 - i $t^{-1} \circ m^{-1}(x)$
 - ii $m^{-1} \circ t^{-1}(x)$
- d What conclusion(s) can you make from your results of parts **b** and **c**?
- e Will your results of part **d** work for any two functions f and g ? Explain.

- 21** **a** Find $\{x : x^3 + x - 2 = 0\}$.
- b** If $f(x) = \frac{1}{\sqrt{x}} - 2$, sketch the graph of $y = f(x)$ and find $\{x : f(x) = f^{-1}(x)\}$.
- 22** Consider the functions $f(x) = |x|, x \in \mathbf{A}$ and $g(x) = e^x - 2, x \in \mathbf{B}$.
- a** Sketch the graphs of: **i** f if $\mathbf{A} = \mathbb{R}$ **ii** g if $\mathbf{B} = \mathbb{R}$.
- b** With \mathbf{A} and \mathbf{B} as given in part **a**, give reasons why $(f \circ g)^{-1}$ will not exist.
- c** **i** Find the largest set \mathbf{B} which includes positive values, so that $(f \circ g)^{-1}$ exists.
- ii** Fully define $(f \circ g)^{-1}$.
- iii** On the same set of axes, sketch the graphs of $(f \circ g)(x)$ and $(f \circ g)^{-1}(x)$.

Exercise 2.3.2

5. Describe the transformation(s) under the following mappings.

a $|x| \mapsto |2x| + 1$ b $x^2 \mapsto \frac{1}{2}(x-2)^2 - 3$ c $\frac{1}{x} \mapsto \frac{1}{2x-1}$

d $x^3 \mapsto (3x-2)^3$ e $x^4 \mapsto \frac{1}{2}(4x-2)^4 - 2$ f $\sqrt{x} \mapsto \frac{1}{2}\sqrt{8x} + 2$

6. Consider the function $g(x) = \begin{cases} x^2 & \text{if } x \geq 2 \\ 6-x & \text{if } x < 2 \end{cases}$.

Find an expression for:

i $f(x) = g(x+2)$ ii $h(x) = g(x) - 3$ iii $h(x) = 2g(x)$
 iv $k(x) = g(2x)$ v $k(x) = g(2x-1)$ vi $f(x) = \frac{1}{2}g(4x+2)$

On separate sets of axes, sketch the graphs of each of the functions in part a.

7. Given the relation $f(x) = \begin{cases} -\sqrt{4-(x-2)^2} & \text{if } 1 < x \leq 4 \\ \sqrt{3x} & \text{if } x \leq 1 \\ -\sqrt{3x} & \text{if } x \leq 1 \\ \sqrt{4-(x-2)^2} & \text{if } 1 < x \leq 4 \end{cases}$, sketch the graphs of:

a $y = \frac{1}{2}f(x)$ b $y = f\left(\frac{1}{2}x\right)$

8. Given the function $f(x) = \sqrt{x}$, sketch the graphs of:

a $y = af(x), a > 0$ b $y = f(ax), a > 0$
 c $y = bf(x+b), b > 0$ d $y = \frac{1}{a}f(a^2x), a \neq 0$

9. Given the function $f(x) = \frac{1}{x^2}$, sketch the graphs of:

a $y = bf(\sqrt{ax}) - a, a, b > 0$ b $y = bf(\sqrt{ax}) - \frac{a}{b}, a, b > 0$

Exercise 2.5.2

6. Consider the function $f(x) = \frac{2-x}{2+x}$.
- Find the coordinates of the intercepts with the axes.
 - Determine the equations of the asymptotes of f .
 - Hence, sketch the graph of f .
 - Determine the domain and range of f .
- b Find f^{-1} , the inverse function of f .
- b Deduce the graph of $(f(x))^2$.
7. Express $\frac{8x-5}{x-3}$ in the form $A + \frac{B}{x-3}$, where A and B are integers.
- Hence, state the equations of the vertical and horizontal asymptotes of the function $f(x) = \frac{8x-5}{x-3}$.
 - Sketch the graph of $f(x) = \frac{8x-5}{x-3}$ and use it to determine its range.
8. On different sets of axes, sketch the graphs of $f(x) = 2 + \frac{1}{x}$ and $g(x) = \frac{1}{f(x)}$, stating their domains and ranges.
9. Sketch the graphs of the following functions, clearly labelling all asymptotes.
- | | | | |
|---|-------------------------------------|---|---|
| a | $f(x) = 2x + \frac{1}{x}, x \neq 0$ | b | $g(x) = \frac{1}{2}x + \frac{1}{x^2}, x \neq 0$ |
| c | $g(x) = -x + \frac{1}{x}, x \neq 0$ | d | $f(x) = x - \frac{1}{x}, x \neq 0$ |
10. Sketch the graphs of the following functions, clearly labelling all asymptotes.
- | | | | |
|---|--------------------------------------|---|--|
| a | $h(x) = x^2 + \frac{2}{x}, x \neq 0$ | b | $f(x) = x^2 + \frac{1}{x^2}, x \neq 0$ |
| c | $g(x) = x - \frac{1}{x^2}, x \neq 0$ | d | $f(x) = x^3 + \frac{3}{x}, x \neq 0$ |
11. Sketch the graphs of the following functions, clearly labelling all asymptotes.
- | | | | |
|---|---|---|---|
| a | $f(x) = x + 3 + \frac{2}{x}, x \neq 0$ | b | $f(x) = -x + \frac{1}{x} + 2, x \neq 0$ |
| c | $g(x) = 2x + \frac{1}{x^2} - 2, x \neq 0$ | d | $f(x) = \frac{x^2 + 2x - 2}{x}, x \neq 0$ |
12. a For the function $f(x) = 3 + \frac{1}{1-x} - x$:
- determine all axial intercepts and the coordinates of its stationary points.
 - write down the equation of all the asymptotes.
- b Sketch the graph of $y = f(x)$ clearly labelling all the information from part a.

Maths SL Supplementary Questions

13. Sketch the graphs of: a $f(x) = \frac{x^2 - x - 1}{x - 2}, x \neq 2$. b $g(x) = \frac{(x+2)^2(x-1)}{x^2}, x \neq 0$.

14. Sketch the graphs of the following functions.

a $f(x) = \frac{2x - 3}{x^2 - 3x + 2}$ b $y = \frac{x^2 + 2x}{x^2 + 4}$ c $y = \frac{x^4 + 1}{x^2 + 1}$.

15. Sketch the graph of $f(x) = \frac{x+1}{\sqrt{x-1}}$, clearly identifying all asymptotes and turning points.

Exercise 2.6.1

7. On the same set of axes, sketch the graphs of $f(x) = 5 \times 5^{-x}$ and $g(x) = 5^x - 4$.

Find: i $\{(x, y) : f(x) = g(x)\}$ ii $\{x : f(x) > g(x)\}$.

8. Find the range of the following functions.

a $f:]0, \infty[\mapsto \mathbb{R}$, where $f(x) = e^{-(x+1)} + 2$.

b $g(x) = -2 \times e^x + 1, x \in]-\infty, 0]$.

c $x \mapsto xe^{-x} + 1, x \in [-1, 1]$

9. a Sketch the graph of $f(x) = |2^x - 1|$, clearly labelling all intercepts with the axes and the equation of the asymptote.

b Solve for x , where $|2^x - 1| = 3$.

10. Sketch the graphs of the following functions:

a $f(x) = |1 - 2^x|$ b $g(x) = |4^x - 2|$ c $h(x) = 1 - |2^x|$

11. Sketch the graphs of the following functions.

a $f(x) = 1 - 2^{-|x|}$ b $g(x) = -4 + 2^{|x|}$ c $h(x) = |3^{-|x|} - 3|$

12. Sketch the graphs of the following functions and find their range.

a $f(x) = \begin{cases} 2^x, & x < 1 \\ 3, & x \geq 1 \end{cases}$ b $f(x) = \begin{cases} 3 - e^x, & x > 0 \\ x + 3, & x \leq 0 \end{cases}$

c $f(x) = \begin{cases} \frac{2}{x+1}, & x \geq 1 \\ 3 - 2^{2-x}, & x < 1 \end{cases}$ d $g(x) = \begin{cases} 4 - 3^{-|x|}, & -1 < x < 1 \\ 4 - \frac{1}{3}|x|, & 1 \leq |x| \leq 12 \end{cases}$

13. Sketch the graphs of the following, and hence state the range in each case.

a $f: \mathbb{R} \mapsto \mathbb{R}, y = 2^x + \left(\frac{1}{2}\right)^x$ b $f: \mathbb{R} \mapsto \mathbb{R}, y = 3^x + \left(\frac{1}{3}\right)^x$

c $f: \mathbb{R} \mapsto \mathbb{R}, y = 2^x - \left(\frac{1}{2}\right)^x$ d $f: \mathbb{R} \mapsto \mathbb{R}, y = \left|2^x - \left(\frac{1}{2}\right)^x\right|$

14. Sketch the graph of the functions.

a $g(x) = 2^{(x-a)}, a > 0$ b $h(x) = 2^x - a, 0 < a < 1$

c $f(x) = 2 \times a^x - 2a, a > 1$ d $f(x) = 2 \times a^x - 2a, 0 < a < 1$

e $g(x) = a - a^x, a > 1$ f $h(x) = -a + a^{-x}, a > 1$

15. a On the same set of axes, sketch $f(x) = 2 \times a^x$ and $g(x) = 4 \times a^{-x}$ where $a > 1$.

Hence, sketch the graph of the function $h(x) = a^x + 2a^{-x}$, where $a > 1$.

b On the same set of axes, sketch $f(x) = x - a$ and $g(x) = a^{x+1}$, where $a > 1$.

Hence, deduce the graph of $h(x) = (x - a) \times a^{x+1}$, where $a > 1$.

16. Sketch the graph of the following functions and determine their range.

a $f(x) = a^{-x^2}, a > 1$

b $f(x) = a^{-x^2}, 0 < a < 1$

c $g(x) = (a-1)^{-x}, a > 1$

d $h(x) = 2 - a^{-|x|}, a > 1$

e $f(x) = \frac{2}{a^x - 1}, a > 1$

f $g(x) = |a^{x^2} - a|, a > 1$

Exercise 2.6.2

6. Given the function $y = f(x)$, sketch the graphs of:

a $y = |f(x)|$ b $y = f(|x|)$

c $f(x) = \log_{10}(-x)$ d $f(x) = \ln\left(\frac{1}{x} - e\right)$

e $f(x) = 2 - \ln(ex - 1)$ f $f(x) = \log_2(x^2 - 2x)$

7. a On the same set of axes, sketch the graphs of $f(x) = \ln x - 1$ and $g(x) = \ln(x - e)$.

b Find $\{x : \ln x > \ln(x - e) + 1\}$.

8. Sketch the graphs of the following functions and find their ranges.

a $f(x) = \begin{cases} \log_{10}x, & x \geq 1 \\ 1 - x, & x < 1 \end{cases}$ b $f(x) = \begin{cases} \log_2(x^2 - 1), & |x| \geq 1 \\ 1 - x^2, & |x| < 1 \end{cases}$

c $f(x) = \begin{cases} 2 - \ln x, & x \geq e \\ \frac{x^3}{e^3}, & x < e \end{cases}$ d $g(x) = \begin{cases} 1 + \sqrt{x - 1}, & x > 1 \\ |\log_2 x| + 1, & 0 < x \leq 1 \\ 1, & x \leq 0 \end{cases}$

9. Sketch the graphs of the following functions.

a $f(x) = \log_{\frac{1}{2}}x$ b $f(x) = \log_{\frac{1}{2}}(x - 2)$ c $f(x) = \log_{\frac{1}{3}}x + 1$

10. Sketch the graph of the following functions, clearly stating domains and labelling asymptotes.

a $f(x) = 2\log_a(x - a), a > 1$ b $f(x) = -\ln(ax - e), a > e$

c $g(x) = |\log_{10}(10 - ax)|, 1 < a < 10$ d $g(x) = \ln|x - ae|, a > 1$

e $g(x) = |\ln|x - ae||, a > 1$ f $h(x) = \log_a\left(1 - \frac{x}{a}\right), 0 < a < 1$

11. Sketch the graph of $f(x) = \frac{1}{a}\log_a(ax - 1), 0 < a < 1$ clearly labelling its asymptote, and intercept(s) with the axes.

Hence, find $\left\{x : f(x) > \frac{1}{a}\right\}$.

12. Sketch the graph of: a $f(x) = \frac{\ln x}{x}, x > 0$ b $g(x) = \frac{x}{\ln x}, x > 0$

Given that $f(x) \leq e^{-1}$ for all real $x > 0$, state the range of $g(x)$.

Exercise 1.1.4

- 1 a $r = 2, u_5 = 48, u_n = 3 \times 2^{n-1}$
- b $r = \frac{1}{3}, u_5 = \frac{1}{27}, u_n = 3 \times \left(\frac{1}{3}\right)^{n-1}$
- c $r = \frac{1}{5}, u_5 = \frac{2}{625}, u_n = 2 \times \left(\frac{1}{5}\right)^{n-1}$
- d $r = -4, u_5 = -256, u_n = -1 \times (-4)^{n-1}$
- e $r = \frac{1}{b}, u_5 = \frac{a}{b^3}, u_n = ab \times \left(\frac{1}{b}\right)^{n-1}$
- f $r = \frac{b}{a}, u_5 = \frac{b^4}{a^2}, u_n = a^2 \times \left(\frac{b}{a}\right)^{n-1}$
- 2 a ± 12 b $\frac{\pm\sqrt{5}}{2}$
- 3 a ± 96 b 15th
- 4 a $u_n = 10 \times \left(\frac{5}{6}\right)^{n-1}$ b $\frac{15625}{3888} \approx 4.02$ c $n = 5$ 4 times
- 5 $-2, \frac{4}{3}$
- 6 a i \$4096 ii \$2097.15 b 6.2 yrs
- 7 $\left(u_n = \frac{1000}{169} \times \left(\frac{12}{5}\right)^{n-1}\right), \frac{1990656}{4225} \approx 471.16$
- 8 2.5, 5, 10 or 10, 5, 2.5
- 9 53 757
- 10 108 952
- 11 a \$56 156 b \$299 284

Exercise 1.1.5

- 1 a 3 b $\frac{1}{3}$ c -1 d $-\frac{1}{3}$ e 1.25
f $-\frac{2}{3}$
- 2 a 216513 b 1.6384×10^{-10} c $\frac{256}{729}$
d $\frac{729}{2401}$ e $\frac{81}{1024}$
- 3 a 11; 354 292 b 7; 473 c 8; 90.90909
d 8; 172.778 e 5; 2.256 f 13; 111.1111111111
- 4 a $\frac{127}{128}$ b $\frac{63}{8}$ c $\frac{130}{81}$
d 60 e $\frac{63}{64}$
- 5 4; 118 096
- 6 \$2109.50
- 7 9.28 cm
- 8 a $V_n = V_0 \times 0.7^n$ b 7
- 9 54
- 10 53.5 gms; 50 weeks.
- 11 7
- 12 9
- 13 -0.5, -0.7797

- 14 $r = 5, 1.8 \times 10^{10}$
 15 \$8407.35
 16 1.8×10^{19} or about 200 billion tonnes.

Exercise 1.1.6

- 1 Term 9 AP = 180, GP = 256. Sum to 11 terms AP = 1650, GP = 2047.
 2 18
 3 12
 4 7, 12
 5 8 weeks Ken \$220 & Bo-Youn \$255)
 6 a week 8 b week 12
 7 a 1.618
 b 121 379 [~121400, depends on rounding errors]

Exercise 1.1.7

- 1 a $\frac{81}{2}$ b $\frac{10}{13}$ c 5000 d $\frac{30}{11}$
 2 $23\frac{23}{99}$
 3 6667 fish. [NB: $t_{43} < 1$. If we use $n = 43$ then ans is 6660 fish]; 20 000 fish.
 Overfishing means that fewer fish are caught in the long run.
 4 27
 5 48,12,3 or 16,12,9
 6 a $\frac{11}{30}$ b $\frac{37}{99}$ c $\frac{191}{90}$
 7 128 cm
 8 $\frac{121}{9}$
 9 $2 + \frac{4}{3}\sqrt{3}$
 10 $\frac{1 - (-t)^n}{1 + t} \frac{1}{1 + t}$
 11 $\frac{1 - (-t^2)^n}{1 + t^2} \frac{1}{1 + t^2}$

Exercise 1.1.8

- 1 3, -0.2
 2 $\frac{2560}{93}$
 3 $\frac{10}{3}$
 4 a $\frac{43}{18}$ b $\frac{458}{99}$ c $\frac{413}{990}$
 5 9900
 6 3275
 7 3
 8 $t_n = 6n - 14$
 9 6
 10 $-\frac{1}{6}$
 11 a 12 b 26
 12 9, 12

13 ± 2

14 $(5, 5, 5), (5, -10, 20)$

15 a 2, 7 b 2, 5, 8 c $3n - 1$

16 a 5 b $2m$

Exercise 1.1.9

1 \$2773.08

2 \$4377.63

3 \$1781.94

4 \$12 216

5 \$35 816.95

6 \$40 349.37

7 \$64 006.80

8 \$276 971.93, \$281 325.41

9 \$63 762.25

10 \$98.62, \$9467.14, interest \$4467.14. Flat interest = \$6000

11 \$134.41, \$3790.44, 0.602% /month (or 7.22% p.a.)

12 $-\frac{1}{2}, 3$ The sequence $\frac{1}{2}, \frac{1}{2}, \frac{1}{2}, \dots$ is arithmetic.

13 15

14 Proof

15 $m = 19, n = 34$

Exercise 3.1.1

- 1
- a $\frac{169\pi}{150} \text{ cm}^2, 5.2 + \frac{13\pi}{15} \text{ cm}$ b $\frac{529\pi}{32} \text{ cm}^2, 23 + \frac{23\pi}{8} \text{ cm}$
- c $242\pi \text{ cm}^2, 88 + 11\pi \text{ cm}$ d $\frac{1156\pi}{75} \text{ m}^2, 13.6 + \frac{68\pi}{15} \text{ m}$
- e $\frac{96\pi}{625} \text{ cm}^2, 1.28 + \frac{12\pi}{25} \text{ cm}$ f $\frac{361\pi}{15} \text{ cm}^2, 15.2 + \frac{19\pi}{3} \text{ cm}$
- g $5248.8\pi \text{ m}^2, 648 + 32.4\pi \text{ cm}$ h $\frac{12943\pi}{300} \text{ cm}^2, 17.2 + \frac{301\pi}{30} \text{ cm}$
- i $\frac{1922\pi}{75} \text{ cm}^2, 12.4 + \frac{124\pi}{15} \text{ cm}$ j $\frac{15884\pi}{3} \text{ cm}^2, 152 + \frac{418\pi}{3} \text{ cm}$
- k $12\pi \text{ cm}^2, 24 + 2\pi \text{ cm}$ l $\frac{98\pi}{3} \text{ cm}^2, 28 + \frac{14\pi}{3} \text{ cm}$
- m $\frac{196\pi}{75} \text{ cm}^2, 5.6 + \frac{28\pi}{15} \text{ cm}$ n $\frac{11532\pi}{25} \text{ cm}^2, 49.6 + \frac{186\pi}{5} \text{ cm}$
- o $\frac{3\pi}{50} \text{ cm}^2, 2.4 + \frac{\pi}{10} \text{ cm}$

2 $0.63^\circ, 36^\circ$

3 0.0942 m^3

4 1.64°

5 79 cm

6 5.25 cm^2

7 $\frac{\sqrt{50}\pi}{5}^\circ$

8 **a** 31.83 m **b** 406.28 m **c** 11°

9 1.11°

10 0.75°

11 **a** 1.85° **b i** 37.09 cm **ii** 88.57 cm **c** 370.92 cm^2

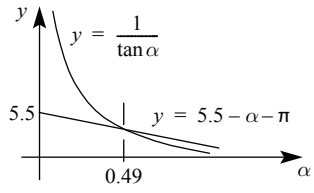
12 26.57 cm^2

13 193.5 cm

14 **a** 105.22 cm **b** 118.83 cm

15 **a** 9 cm **b** 12 cm **c** $36^\circ 52'$

16 b



c 0.49

17 1439.16 cm²

Exercise 3.2.1

| | | | | | | | | |
|----------|----------|----------------------|----------|-----------------------|----------|-----------------------|----------|-----------------------|
| 1 | a | 120° | b | 108° | c | 216° | d | 50° |
| 2 | a | π^c | b | $\frac{3\pi^c}{2}$ | c | $\frac{7\pi^c}{9}$ | d | $\frac{16\pi^c}{9}$ |
| 3 | a | $\frac{\sqrt{3}}{2}$ | b | $\frac{1}{2}$ | c | $-\sqrt{3}$ | d | -2 |
| | e | $\frac{1}{2}$ | f | $-\frac{\sqrt{3}}{2}$ | g | $\frac{1}{\sqrt{3}}$ | h | $\sqrt{3}$ |
| | i | $\frac{1}{\sqrt{2}}$ | j | $-\frac{1}{\sqrt{2}}$ | k | 1 | l | $-\sqrt{2}$ |
| | m | $\frac{1}{\sqrt{2}}$ | n | $\frac{1}{\sqrt{2}}$ | o | -1 | p | $\sqrt{2}$ |
| | q | 0 | r | 1 | s | 0 | t | undefined |
| 4 | a | 0 | b | -1 | c | 0 | d | -1 |
| | e | $\frac{1}{\sqrt{2}}$ | f | $-\frac{1}{\sqrt{2}}$ | g | -1 | h | $\sqrt{2}$ |
| | i | $\frac{1}{2}$ | j | $-\frac{\sqrt{3}}{2}$ | k | $\frac{1}{\sqrt{3}}$ | l | $\sqrt{3}$ |
| | m | $\frac{\sqrt{3}}{2}$ | n | $\frac{1}{2}$ | | | | |
| 5 | a | $\frac{1}{2}$ | b | $\frac{\sqrt{3}}{2}$ | c | 11 | d | $\frac{1}{2}$ |
| | e | $\frac{1}{\sqrt{3}}$ | f | $\frac{1}{2}$ | g | $-\sqrt{2}$ | | |
| 6 | a | $\frac{1}{2}$ | b | $-\frac{1}{\sqrt{2}}$ | c | $\sqrt{3}$ | d | -2 |
| | e | 1 | f | $\frac{1}{2}$ | g | $-\frac{1}{\sqrt{3}}$ | h | $-\frac{\sqrt{3}}{2}$ |
| | i | $\frac{2}{\sqrt{3}}$ | j | $\frac{1}{\sqrt{3}}$ | k | $\frac{2}{\sqrt{3}}$ | | |

7 a $\left(\frac{1}{2}, \frac{\sqrt{3}}{2}\right)$ b $\left(-\frac{1}{2}, \frac{\sqrt{3}}{2}\right)$ c $\left(-\frac{1}{\sqrt{2}}, -\frac{1}{\sqrt{2}}\right)$ d $\left(\frac{\sqrt{3}}{2}, -\frac{1}{2}\right)$

8 a 0 b $\frac{\sqrt{3}}{2}$ c $\frac{1}{\sqrt{3}}$ d $\frac{1+\sqrt{3}}{2\sqrt{2}}$

10 a $-\frac{2}{3}$ b $-\frac{2}{3}$ c $-\frac{2}{3}$

11 a $-\frac{2}{5}$ b $\frac{5}{2}$ c $\frac{2}{5}$

12 a k b $\frac{1}{k}$ c $-k$

13 a $\frac{\sqrt{5}}{3}$ b $\frac{3}{\sqrt{5}}$ c $-\frac{\sqrt{5}}{3}$

14 a $-\frac{3}{5}$ b $\frac{3}{4}$ c $\frac{4}{5}$

15 a $\frac{4}{5}$ b $\frac{3}{4}$ c $-\frac{5}{3}$

16 a $-k$ b $-\sqrt{1-k^2}$ c $-\frac{k}{\sqrt{1-k^2}}$

17 a $-\sqrt{1-k^2}$ b $\frac{k}{\sqrt{1-k^2}}$ c $-\frac{1}{\sqrt{1-k^2}}$

18 a $\sin\theta$ b $\cot\theta$ c 1 d 1
e $\cot\theta$ f $\tan\theta$

19 a $\frac{\pi}{3}, \frac{2\pi}{3}$ b $\frac{\pi}{3}, \frac{5\pi}{3}$ c $\frac{\pi}{3}, \frac{4\pi}{3}$ d $\frac{5\pi}{6}, \frac{7\pi}{6}$

e $\frac{5\pi}{6}, \frac{11\pi}{6}$ f $\frac{7\pi}{6}, \frac{11\pi}{6}$

Exercise 3.3.1

3 a $x^2 + y^2 = k^2, -k \leq x \leq k$

b $\frac{x^2}{b^2} + \frac{y^2}{a^2} = 1, -b \leq x \leq b$

c $(x-1)^2 + (2-y)^2 = 1, 0 \leq x \leq 2$

d $\frac{(1-x)^2}{b^2} + \frac{(y-2)^2}{a^2} = 1$

e $5x^2 + 5y^2 + 6xy = 16$

4 a i $\frac{4}{5}$ ii $\frac{5}{3}$

b i $\frac{4}{\sqrt{7}}$ ii $\frac{-\sqrt{7}}{3}$

5 a $\frac{\pi}{3}, \frac{2\pi}{3}, \frac{4\pi}{3}, \frac{5\pi}{3}$

b $\frac{\pi}{2}, \frac{7\pi}{6}, \frac{11\pi}{6}$

c $0, \frac{\pi}{6}, \frac{5\pi}{6}, \pi, 2\pi$

d $\frac{\pi}{2}, \frac{3\pi}{2}$

9 a $\frac{2a}{a^2+1}$

b $\frac{a^2-1}{a^2+1}$

10 a i 1 ii 1

b 1

11 a $\frac{1-\sqrt{x^2-1}}{x}$

b $\frac{1+\sqrt{x^2-1}}{x}$

c $\frac{2}{x^2} - 1$

12 a i 6 ii $\frac{5}{2}$

iii $\frac{9}{8}$

b i 5 ii 1 iii -2

13 a ± 2

b $\frac{\pi}{6} + 2k\pi, k \in \mathbb{Z}$ or $\frac{7\pi}{6} + 2k\pi, k \in \mathbb{Z}$

14 a i 25 ii $\frac{1}{5^4}$

b i 27 ii $\frac{1}{3}$

15 a $1+2k$ b $(1-k)\sqrt{1+2k}$

16 a $\frac{1-a}{2\sqrt{a}}$ b i $2 + \sqrt{2a-a^2}$ ii $\frac{-\sqrt{2a-a^2}}{1-a}$

17 a $\frac{2}{3}$ b $0, \pm \frac{2\sqrt{2}}{3}$

18 $0, \frac{\pi}{3}, \frac{2\pi}{3}, \pi$

Exercise 3.3.2

1

a $\sin\alpha\cos\phi + \cos\alpha\sin\phi$

b $\cos 3\alpha\cos 2\beta - \sin 3\alpha\sin 2\beta$

c $\sin 2x\cos y - \cos 2x\sin y$

d $\cos\phi\cos 2\alpha + \sin\phi\sin 2\alpha$

e $\frac{\tan 2\theta - \tan\alpha}{1 + \tan 2\theta\tan\alpha}$

f $\frac{\tan\phi - \tan 3\omega}{1 + \tan\phi\tan 3\omega}$

2

a $\sin(2\alpha - 3\beta)$

b $\cos(2\alpha + 5\beta)$

c $\sin(x + 2y)$

d $\cos(x - 3y)$

e $\tan(2\alpha - \beta)$

f $\tan x$

g $\tan\left(\frac{\pi}{4} - \phi\right)$

h $\sin\left(\frac{\pi}{4} + \alpha + \beta\right)$

i $\sin 2x$

3 **a** $\frac{56}{65}$

b $\frac{33}{65}$

c $\frac{16}{63}$

4 **a** $\frac{16}{65}$

b $\frac{63}{65}$

c $\frac{56}{33}$

5 **a** $-\frac{5\sqrt{11}}{18}$

b $-\frac{7}{18}$

c $\frac{5\sqrt{11}}{7}$

d $\frac{35\sqrt{11}}{162}$

6 **a** $-\frac{3}{5}$

b $\frac{4}{5}$

c $\frac{3}{4}$

d $\frac{24}{7}$

7 **a** $\frac{1 + \sqrt{3}}{2\sqrt{2}}$

b $\frac{1 + \sqrt{3}}{2\sqrt{2}}$

c $\frac{1 + \sqrt{3}}{2\sqrt{2}}$

d $\sqrt{3} - 2$

8 **a** $\frac{2ab}{a^2 + b^2}$

b $\frac{a^2 + b^2}{2ab}$

c $\frac{a^4 - 6a^2b^2 + b^4}{(a^2 + b^2)^2}$

d $\frac{2ab}{b^2 - a^2}$

12 $\sqrt{2} - 1$

14 **a** $0, \frac{\pi}{3}, \pi, \frac{5\pi}{3}, 2\pi$

b $\frac{\pi}{6}, \frac{5\pi}{6}, \frac{3\pi}{2}$

c $0, \pi, 2\pi, \alpha, \pi \pm \alpha, 2\pi - \alpha, \alpha = \tan^{-1}\left(\frac{1}{\sqrt{2}}\right)$

15 **a** $R = \sqrt{a^2 + b^2}, \tan\alpha = \frac{b}{a}$

b 10

16 **a** $R = \sqrt{a^2 + b^2}, \tan\alpha = \frac{b}{a}$

b -11

18 $2 - \sqrt{3}$

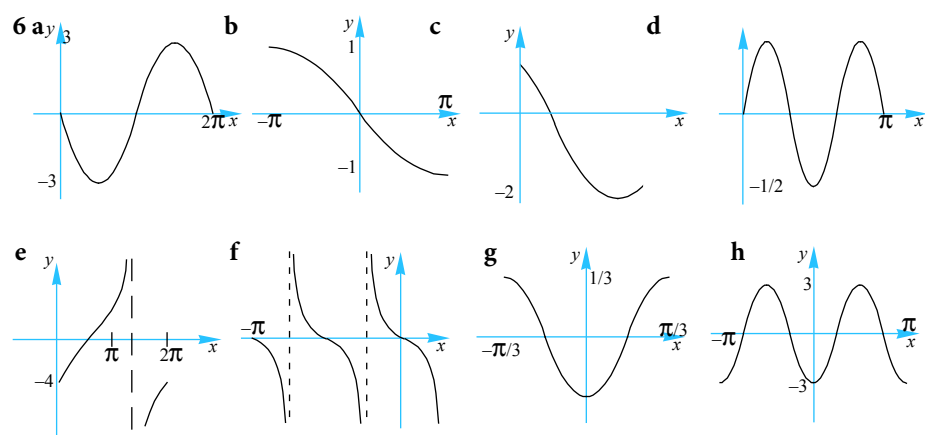
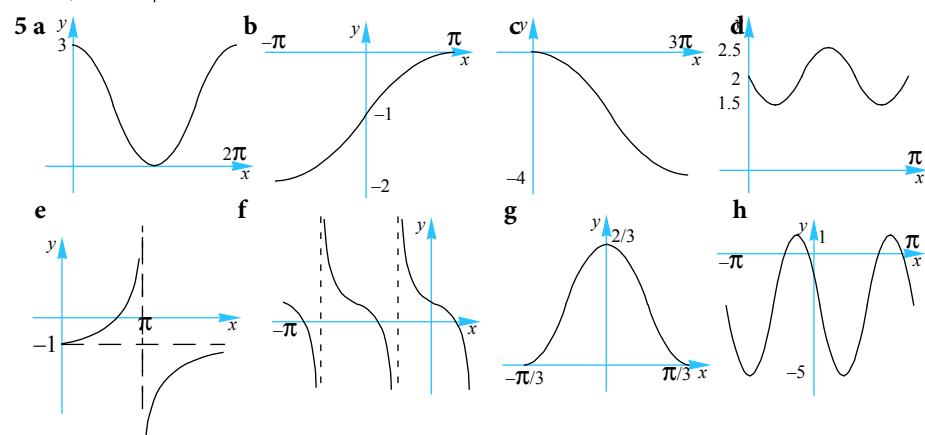
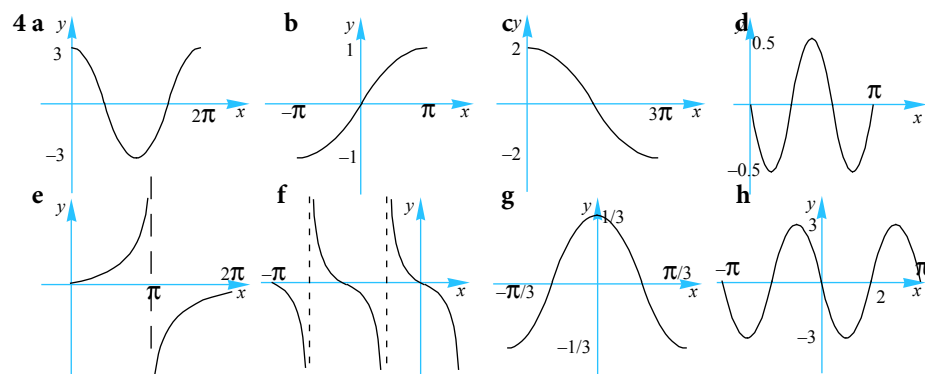
Exercise 3.4.1

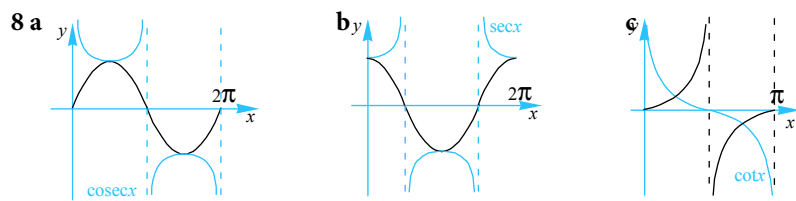
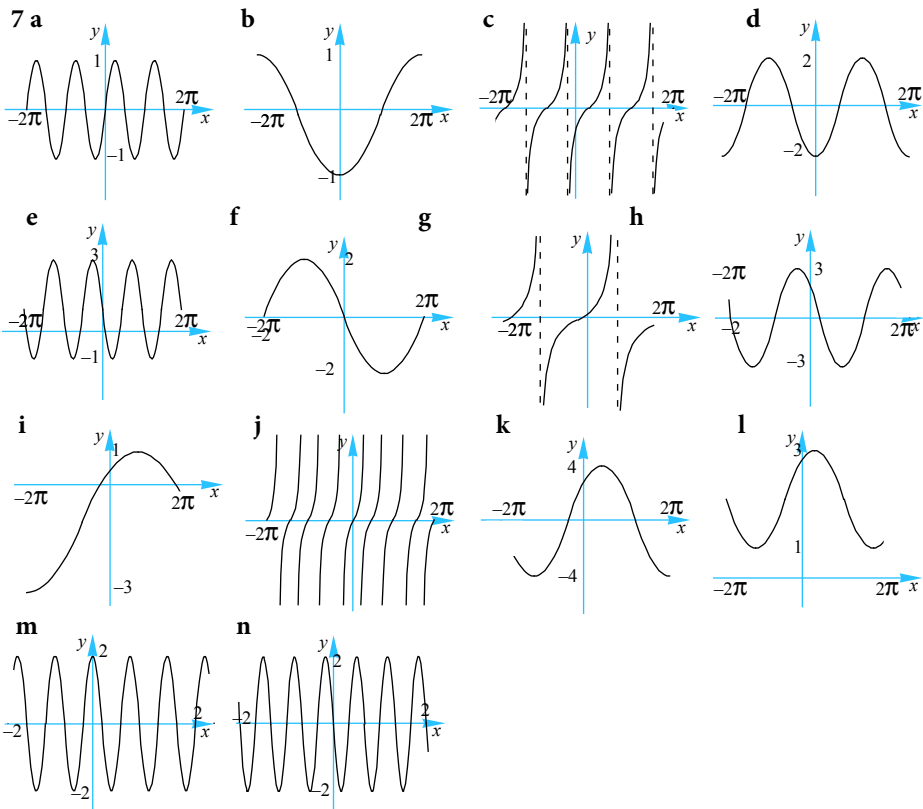
1 a 4π b $\frac{2\pi}{3}$ c 3π d 4π e 2 f $\frac{\pi}{2}$

2 a 5 b 3 c 5 d 0.5

3 a $2\pi, 2$ b $6\pi, 3$ c π d π e $\pi, 4$

f $\pi, 3$ g 6π h $\frac{2\pi}{3}, \frac{1}{4}$ i 3π j $\frac{8\pi}{3}, \frac{2}{3}$





Exercise 3.5.1

1 a $\frac{\pi}{4}, \frac{3\pi}{4}$ b $\frac{7\pi}{6}, \frac{11\pi}{6}$ c $\frac{\pi}{3}, \frac{2\pi}{3}$ d $\frac{\pi}{18}, \frac{5\pi}{18}, \frac{13\pi}{18}, \frac{17\pi}{18}, \frac{25\pi}{18}, \frac{29\pi}{18}$

e $\frac{\pi}{3}, \frac{5\pi}{3}$ f $\frac{5}{4}, \frac{7}{4}, \frac{13}{4}, \frac{15}{4}, \frac{21}{4}, \frac{23}{4}$

2 a $\frac{\pi}{4}, \frac{7\pi}{4}$ b $\frac{2\pi}{3}, \frac{4\pi}{3}$ c $\frac{\pi}{6}, \frac{11\pi}{6}$ d π

e $\frac{\pi}{6}, \frac{5\pi}{6}, \frac{7\pi}{6}, \frac{11\pi}{6}$ f $\frac{3}{2}, \frac{5}{2}, \frac{11}{2}$

3 a $\frac{\pi}{6}, \frac{7\pi}{6}$ b $\frac{3\pi}{4}, \frac{7\pi}{4}$ c $\frac{\pi}{3}, \frac{4\pi}{3}$ d $4 \tan^{-1} 2$

e $\frac{\pi}{3}, \frac{5\pi}{6}, \frac{4\pi}{3}, \frac{11\pi}{6}$ f 3

4 a $90^\circ, 330^\circ$ b $180^\circ, 240^\circ$ c $90^\circ, 270^\circ$ d $65^\circ, 335^\circ$

e $\frac{\pi}{12}, \frac{5\pi}{12}, \frac{13\pi}{12}, \frac{17\pi}{12}$ f $0, \pi, 2\pi$ g $\frac{\pi}{3}, \frac{2\pi}{3}, \frac{4\pi}{3}, \frac{5\pi}{3}$ h $\frac{3\pi}{8}, \frac{7\pi}{8}, \frac{11\pi}{8}, \frac{15\pi}{8}$

5 a $60^\circ, 300^\circ$ b $\frac{4\pi}{3}, \frac{5\pi}{3}$ c $\frac{\pi}{6}, \frac{7\pi}{6}$ d $23^\circ 35', 156^\circ 25'$

e $\frac{\pi}{3}, \frac{2\pi}{3}, \frac{4\pi}{3}, \frac{5\pi}{3}$ f $\frac{2\pi}{3}, \frac{5\pi}{3}$ g $\frac{5\pi}{6}, \frac{9\pi}{6}$ h $3.3559^\circ, 5.2105^\circ$

i $\frac{\pi}{3}, \frac{4\pi}{3}$ j $\frac{\pi}{3}, \frac{2\pi}{3}, \frac{4\pi}{3}, \frac{5\pi}{3}$ k $\frac{\pi}{6}, \frac{2\pi}{3}, \frac{7\pi}{6}, \frac{5\pi}{3}$ l $68^\circ 12', 248^\circ 12'$

m $\frac{\pi}{3}, \frac{5\pi}{3}$ n $\frac{\pi}{4}, \frac{3\pi}{4}, \frac{5\pi}{4}, \frac{7\pi}{4}$ o \emptyset

6 a $-\frac{3\pi}{4}, \frac{\pi}{4}$ b $\pm \frac{\pi}{3}$ c $-\frac{7\pi}{8}, -\frac{3\pi}{8}, \frac{\pi}{8}, \frac{5\pi}{8}$ d $-\frac{\pi}{2}$

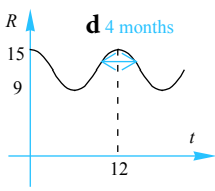
e $\pm \frac{\pi}{2}$ f $\frac{\pi}{8}, \frac{7\pi}{8}, \frac{9\pi}{8}, \frac{15\pi}{8}$ g $\frac{\pi}{2}, \frac{3\pi}{2}$ h $\frac{\pi}{2}, \frac{3\pi}{2}$

- 7 a $\frac{\pi}{6}, \frac{5\pi}{6}, \frac{3\pi}{2}, \frac{13\pi}{6}, \frac{17\pi}{6}, \frac{7\pi}{2}$ b $-2\pi, 0, 2\pi$
- c $-\frac{\pi}{2}, \frac{3\pi}{2}, \frac{7\pi}{2}$ d $\frac{\pi}{6}, \frac{5\pi}{6}, \frac{3\pi}{2}, \frac{13\pi}{6}, \frac{17\pi}{6}, \frac{25\pi}{6}, \frac{29\pi}{6}$
- e $2n\pi \pm \sin^{-1}\left(\frac{1}{3}\right) \pm \frac{\pi}{2}, \frac{2(3n \pm 1)\pi}{3}, n = -1, 3$
- 8 a $\frac{3\pi}{4}, \frac{7\pi}{4}, \tan^{-1}\left(\frac{2}{3}\right), \pi + \tan^{-1}\left(\frac{2}{3}\right)$ b $\frac{\pi}{3}, \frac{2\pi}{3}, \frac{3\pi}{4}, \frac{4\pi}{3}, \frac{5\pi}{3}, \frac{7\pi}{4}$
- 9 a $\frac{\pi}{12}, \frac{5\pi}{12}, \frac{7\pi}{12}, \frac{11\pi}{12}, \frac{13\pi}{12}, \frac{17\pi}{12}, \frac{19\pi}{12}, \frac{23\pi}{12}$ b $\frac{2\pi}{3}, \frac{4\pi}{3}$ c $0, 1, 2, 3, 4, 5, 6$
- 10 a $\frac{\pi}{3}, \frac{5\pi}{3}, \pi \pm \cos^{-1}\left(\frac{1}{4}\right)$ b $\frac{3\pi}{4}, \frac{7\pi}{4}, \tan^{-1}(3), \pi + \tan^{-1}(3)$ c $\frac{\pi}{6}, \frac{7\pi}{6}, \frac{\pi}{2}, \frac{3\pi}{2}$
- d $\tan^{-1}\left(\frac{3}{2}\right), \pi - \tan^{-1}(2), \pi + \tan^{-1}\left(\frac{3}{2}\right), 2\pi - \tan^{-1}(2)$
- 11 a $2\sin\left(x + \frac{\pi}{6}\right)$ b $0, \frac{2\pi}{3}, 2\pi$
- 12 a $2\sin\left(x - \frac{\pi}{3}\right)$ b $\frac{\pi}{6}, \frac{3\pi}{2}$
- 13 $\frac{\pi}{3}, \frac{2\pi}{3}$
- 14 a $\left(\frac{\pi}{6}, \frac{5\pi}{6}\right) \cup \left(\frac{13\pi}{6}, \frac{17\pi}{6}\right)$ b $\left(\pi + \sin^{-1}\left(\frac{1}{\sqrt{3}}\right), 2\pi - \sin^{-1}\left(\frac{1}{\sqrt{3}}\right)\right) \cup \left(3\pi + \sin^{-1}\left(\frac{1}{\sqrt{3}}\right), 4\pi - \sin^{-1}\left(\frac{1}{\sqrt{3}}\right)\right)$
- 15 a ii $\left[0, \frac{\pi}{4}\right) \cup \left(\frac{5\pi}{4}, 2\pi\right]$ b ii $\left[0, \frac{\pi}{6}\right) \cup \left(\frac{\pi}{2}, \frac{5\pi}{6}\right) \cup \left(\frac{3\pi}{2}, 2\pi\right]$
- 17 a i $\{x | x = k\pi + \alpha(-1)^k, k \in \mathbb{Z}\}$ ii $\{x | 2k\pi + \alpha \leq x \leq (2k+1)\pi - \alpha, k \in \mathbb{Z}\}$
- b $\left\{x | x = (2k+1)\frac{\pi}{5}\right\} \cup \{x | x = 2k\pi\}, k \in \mathbb{Z}$ c $\left\{x | x = \frac{2k\pi}{5} + \frac{\pi}{10}\right\} \cup \left\{x | x = 2k\pi - \frac{\pi}{2}\right\}, k \in \mathbb{Z}$
- 19 a $0, \frac{\pi}{3}, \frac{5\pi}{3}, 2\pi$ b $\sqrt{2}, \frac{\sqrt{2}}{2}$ c $2\cos\frac{\pi}{9}, 2\cos\frac{5\pi}{9}, 2\cos\frac{7\pi}{9}$
- 20 $\left\{\pm\frac{\pi}{4}, \pm\frac{2\pi}{3}, \pm\frac{3\pi}{4}\right\}$

22 a $90^\circ, 199^\circ 28', 340^\circ 32'$ b $(199^\circ 28', 340^\circ 32')$

25 $\left\{ (x, y) \mid x = 2k\pi + \frac{\pi}{2}, y = 2k\pi \right\} \cup \left\{ (x, y) \mid x = 2k\pi - \frac{\pi}{2}, y = 2k\pi + \pi \right\}, k \in \mathbb{Z}$

Exercise 3.5.2

- 1 a 5, 24, 11, 19 b $T = 5 \sin\left(\frac{\pi t}{12} - 3\right) + 19$ c 23.6°
- 2 a 3, 4.2, 2, 7 b $L = 3 \sin\left(\frac{\pi t}{2.1} - 3\right) + 7$
- 3 a 5, 11, 0, 7 b $V = 5 \sin\left(\frac{2\pi t}{11}\right) + 7$
- 4 a 1, 11, 1, 12 b $P = \sin\frac{2\pi}{11}(t-1) + 12$
- 5 a 2.6, 7, 2, 6 b $S = 2.6 \sin\frac{2\pi}{7}(t-2) + 6$
- 6 a 0.6, 3.5, 0, 11 b $P = 0.6 \sin\left(\frac{4\pi t}{7}\right) + 11$
- 7 a 0.8, 4.6, 2.7, 11 b $D = 0.8 \sin\frac{\pi}{2.3}(t-2.7) + 11$
- 8 a 3000 b 1000, 5000 c $\frac{4}{9}$
- 9 a 6.5 m, 7.5 m b 1.58 sec, 3.42 sec
- 10 a 750, 1850 b 3.44 c mid-April to end of August
- 11 a 15000 b 12 months
- c  d 4 months
- 12 a 2s b 26cm c 40s
- d $[18, 34]$ d 8cm e 2s
- f $D(t) = 8 \sin\left(\pi\left(x + \frac{1}{2}\right)\right) + 26$ (for example) g 34cm

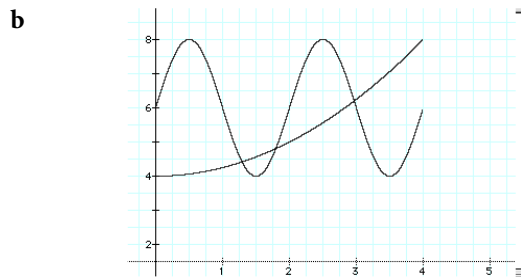
13 a $D(t) = 20\sin\left(\frac{5\pi}{6}(x+0.2)\right) + 52$ (for example) b 72cm

c 62cm d 0.86s

14 a $\pi, -2, 2$ b $\frac{1}{3}$ m c $\frac{4}{3}$ m

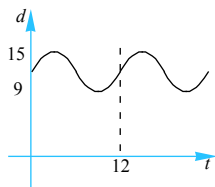
15 a

| | | | | | | | | | |
|------|---|--------|------|--------|---|--------|------|--------|---|
| t | 0 | 0.5 | 1 | 1.5 | 2 | 2.5 | 3 | 3.5 | 4 |
| F(t) | 6 | 8 | 6 | 4 | 6 | 8 | 6 | 4 | 6 |
| G(t) | 4 | 4.0625 | 4.25 | 4.5625 | 5 | 5.5625 | 6.25 | 7.0625 | 8 |



c 3 d 38.4%

16 a d b i 7, 11, 19, 23 ii $[0, 7] \cup [11, 19] \cup [23, 24]$ c 14.9 m



Exercise 3.6.1

| | a cm | b cm | c cm | A | B | C |
|----|------|------|------|-----|-----|------|
| 1 | 13.3 | 37.1 | 48.2 | 10° | 29° | 141° |
| 2 | 2.7 | 1.2 | 2.8 | 74° | 25° | 81° |
| 3 | 11.0 | 0.7 | 11.3 | 60° | 3° | 117° |
| 4 | 31.9 | 39.1 | 51.7 | 38° | 49° | 93° |
| 5 | 18.5 | 11.4 | 19.5 | 68° | 35° | 77° |
| 6 | 14.6 | 15.0 | 5.3 | 75° | 84° | 21° |
| 7 | 26.0 | 7.3 | 26.4 | 79° | 16° | 85° |
| 8 | 21.6 | 10.1 | 28.5 | 39° | 17° | 124° |
| 9 | 0.8 | 0.2 | 0.8 | 82° | 16° | 82° |
| 10 | 27.7 | 7.4 | 33.3 | 36° | 9° | 135° |
| 11 | 16.4 | 20.7 | 14.5 | 52° | 84° | 44° |
| 12 | 21.4 | 45.6 | 64.3 | 11° | 24° | 145° |
| 13 | 30.9 | 27.7 | 22.6 | 75° | 60° | 45° |
| 14 | 29.3 | 45.6 | 59.1 | 29° | 49° | 102° |
| 15 | 9.7 | 9.8 | 7.9 | 65° | 67° | 48° |
| 16 | 21.5 | 36.6 | 54.2 | 16° | 28° | 136° |
| 17 | 14.8 | 29.3 | 27.2 | 30° | 83° | 67° |
| 18 | 10.5 | 0.7 | 10.9 | 52° | 3° | 125° |
| 19 | 11.2 | 6.9 | 17.0 | 25° | 15° | 140° |
| 20 | 25.8 | 18.5 | 40.1 | 30° | 21° | 129 |

Exercise 3.6.2

| | a | b | c | A° | B° | C° | c* | B*° | C*° |
|----|-------|-------|-------|-------|-------|--------|-------|--------|-------|
| 1 | 7.40 | 18.10 | 21.06 | 20.00 | 56.78 | 103.22 | 12.95 | 123.22 | 36.78 |
| 2 | 13.30 | 19.50 | 31.36 | 14.00 | 20.77 | 145.23 | 6.49 | 159.23 | 6.77 |
| 3 | 13.50 | 17.00 | 25.90 | 28.00 | 36.24 | 115.76 | 4.12 | 143.76 | 8.24 |
| 4 | 10.20 | 17.00 | 25.62 | 15.00 | 25.55 | 139.45 | 7.22 | 154.45 | 10.55 |
| 5 | 7.40 | 15.20 | 19.55 | 20.00 | 44.63 | 115.37 | 9.02 | 135.37 | 24.63 |
| 6 | 10.70 | 14.10 | 21.41 | 26.00 | 35.29 | 118.71 | 3.94 | 144.71 | 9.29 |
| 7 | 11.50 | 12.60 | 22.94 | 17.00 | 18.68 | 144.32 | 1.16 | 161.32 | 1.68 |
| 8 | 8.30 | 13.70 | 18.67 | 24.00 | 42.17 | 113.83 | 6.36 | 137.83 | 18.17 |
| 9 | 13.70 | 17.80 | 30.28 | 14.00 | 18.32 | 147.68 | 4.27 | 161.68 | 4.32 |
| 10 | 13.40 | 17.80 | 26.19 | 28.00 | 38.58 | 113.42 | 5.24 | 141.42 | 10.58 |
| 11 | 12.10 | 16.80 | 25.63 | 23.00 | 32.85 | 124.15 | 5.30 | 147.15 | 9.85 |
| 12 | 12.00 | 14.50 | 24.35 | 21.00 | 25.66 | 133.34 | 2.72 | 154.34 | 4.66 |
| 13 | 12.10 | 19.20 | 29.34 | 16.00 | 25.94 | 138.06 | 7.57 | 154.06 | 9.94 |
| 14 | 7.20 | 13.10 | 19.01 | 15.00 | 28.09 | 136.91 | 6.30 | 151.91 | 13.09 |
| 15 | 12.20 | 17.70 | 23.73 | 30.00 | 46.50 | 103.50 | 6.93 | 133.50 | 16.50 |
| 16 | 9.20 | 20.90 | 27.97 | 14.00 | 33.34 | 132.66 | 12.59 | 146.66 | 19.34 |
| 17 | 10.50 | 13.30 | 21.96 | 20.00 | 25.67 | 134.33 | 3.03 | 154.33 | 5.67 |
| 18 | 9.20 | 19.20 | 26.29 | 15.00 | 32.69 | 132.31 | 10.80 | 147.31 | 17.69 |
| 19 | 7.20 | 13.30 | 18.33 | 19.00 | 36.97 | 124.03 | 6.82 | 143.03 | 17.97 |
| 20 | 13.50 | 20.40 | 25.96 | 31.00 | 51.10 | 97.90 | 9.01 | 128.90 | 20.10 |

21 a–d no triangles exist.

Exercise 3.6.3

- 1 30.64 km
- 2 4.57 m
- 3 476.4 m
- 4 $201^{\circ}47'T$
- 5 222.9 m **a** 3.40 m **b** 3.11 m
- 6 **b** 1.000 m **c** 1.715 m
- 7 **a** 51.19 min **b** 1 hr 15.96 min **c** 14.08 km
- 8 \$4886
- 9 906 m

Exercise 3.6.4

| a cm | b cm | c cm | A | B | C | |
|------|------|------|------|--------------|--------------|---------------|
| 1 | 13.5 | 9.8 | 16.7 | 54° | 36° | 90° |
| 2 | 8.9 | 10.8 | 15.2 | 35° | 44° | 101° |
| 3 | 22.8 | 25.6 | 12.8 | 63° | 87° | 30° |
| 4 | 21.1 | 4.4 | 21.0 | 85° | 12° | 83° |
| 5 | 15.9 | 10.6 | 15.1 | 74° | 40° | 66° |
| 6 | 8.8 | 13.6 | 20.3 | 20° | 32° | 128° |
| 7 | 9.2 | 9.5 | 13.2 | 44° | 46° | 90° |
| 8 | 23.4 | 62.5 | 58.4 | 22° | 89° | 69° |
| 9 | 10.5 | 9.6 | 15.7 | 41° | 37° | 102° |
| 10 | 21.7 | 36.0 | 36.2 | 35° | 72° | 73° |
| 11 | 7.6 | 3.4 | 9.4 | 49° | 20° | 111° |
| 12 | 7.2 | 15.2 | 14.3 | 28° | 83° | 69° |
| 13 | 9.1 | 12.5 | 15.8 | 35° | 52° | 93° |
| 14 | 14.9 | 11.2 | 16.2 | 63° | 42° | 75° |
| 15 | 2.0 | 0.7 | 2.5 | 38° | 13° | 129° |
| 16 | 7.6 | 3.7 | 9.0 | 56° | 24° | 100° |
| 17 | 18.5 | 9.8 | 24.1 | 45° | 22° | 113° |
| 18 | 20.7 | 16.3 | 13.6 | 87° | 52° | 41° |
| 19 | 14.6 | 22.4 | 29.9 | 28° | 46° | 106° |
| 20 | 7.0 | 6.6 | 9.9 | 45° | 42° | 93° |
| 21 | 21.8 | 20.8 | 23.8 | 58° | 54° | 68° |
| 22 | 1.1 | 1.7 | 1.3 | 41° | 89° | 50° |
| 23 | 1.2 | 1.2 | 0.4 | 85° | 76° | 19° |
| 24 | 23.7 | 27.2 | 29.7 | 49° | 60° | 71° |
| 25 | 3.4 | 4.6 | 5.2 | 40° | 60° | 80° |

Exercise 3.6.5

- 1 **a** 10.14 km **b** $121^{\circ}T$
- 2 $7^{\circ} 33'$

- 3 4.12 cm
 4 57.32 m
 5 315.5 m
 6 a 124.3 km b W28° 47' S

Exercise 3.6.6

- 1
 a 1999.2 cm² b 756.8 cm² c 3854.8 cm² d 2704.9 cm²
 e 538.0 cm² f 417.5 cm² g 549.4 cm² h 14.2 cm²
 i 516.2 cm² j 281.5 cm² k 918.8 cm² l 387.2 cm²
 m 139.0 cm² n 853.7 cm² o 314.6 cm²
- 2 69 345 m²
 3 $100\pi - 6\sqrt{91}$ cm²
 4 17.34 cm
 5 a 36.77sq units b 14.70 sq units c 62.53 sq units
 6 52.16 cm²
 7 $7^\circ 2'$
 8 $\frac{(b + a \times \tan\theta)^2}{2 \tan\theta}$
 9 Area of $\triangle ACD = 101.78$ cm², Area of $\triangle ABC = 61.38$ cm²

Exercise 3.6.7


- 1 39.60 m 52.84 m 2 30.2 m 3 54°, 42°, 84°
 4 37° 5 028°T. 6 108.1 cm
 7 a 135° b 136 cm 8 41°, 56°, 83° 9 a 158° left b 43.22 km
 10 264 m 11 53.33 cm 12 186 m
 13 50.12 cm 14 5.17 cm 15 a 5950 m b 13341 m c 160° d 243°
 17 a 20.70° b 2.578 m c 1.994 m³
 18 a 4243 m² b 86 m c 101 m

Exercise 3.1.1

1. Find the areas and perimeters of the following sectors.

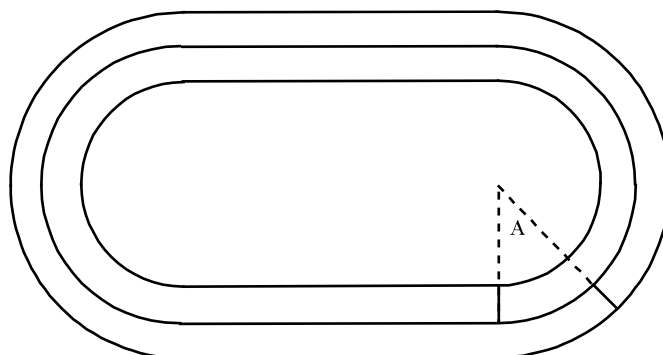
| | Radius | Angle |
|----------|---------|-------------------|
| h | 8.6 cm | $\frac{7\pi}{6}$ |
| i | 6.2 cm | $\frac{4\pi}{3}$ |
| j | 76 m | $\frac{11\pi}{6}$ |
| k | 12 cm | 30° |
| l | 14 m | 60° |
| m | 2.8 cm | 120° |
| n | 24.8 cm | 270° |
| o | 1.2 cm | 15° |

8.. The diagram shows a running track. The perimeter of the inside line is 400 metres and the length of each straight section is 100 metres.



- a Find the radius of each of the semicircular parts of the inner track.
- b If the width of the lane shown is 1 metre, find the perimeter of the outer boundary of the lane.

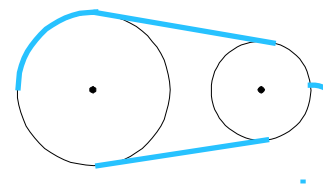
A second lane is added on the outside of the track. The starting positions of runners who have to run (anticlockwise) in the two lanes are shown.



- c Find the value of angle A° (to the nearest degree) if both runners are to run 400 metres.

- 9. Find the angle subtended by at the centre of radius length 12 cm which forms a sector of area 80 sq. cm.
- 10. Find the angle subtended by an arc of a circle of radius length 10 cm which forms a sector of area 75 sq. cm.

11. A chord of length 32 cm is drawn in a circle of radius 20 cm.
- Find the angle it subtends at the centre.
 - Find: **i** the minor arc length **ii** the major arc length.
 - Find the area of the minor sector.
12. Two circles of radii 6 cm and 8 cm have their centres 10 cm apart. Find the area common to both circles.
- 13.. Two pulleys of radii 16 cm and 20 cm have their centres 40 cm apart. Find the length of the piece of string that will be required to pass tightly round the circles if the string does not cross over.



14. Two pulleys of radii 7 cm and 11 cm have their centres 24 cm apart. Find the length of the piece of string that will be required to pass tightly round the circles if:
- the string cannot cross over.
 - the string crosses over itself.
15. A sector of a circle has a radius of 15 cm and an angle of 216° . The sector is folded in such a way that it forms a cone, so that the two straight edges of the sector do not overlap.
- Find the base radius of the cone.
 - Find the vertical height of the cone.
 - Find the semi-vertical angle of the cone.

16. A taut belt passes over two discs of radii 4 cm and 12 cm as shown in the diagram.

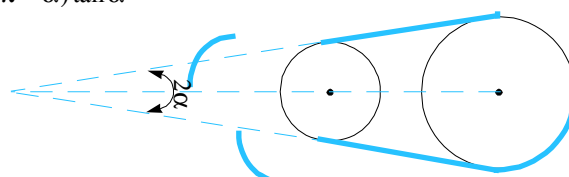
a If the total length of the belt is 88 cm, show that $1 = (5.5 - \pi - \alpha) \tan \alpha$

b On the same set of axes, sketch the graphs of:

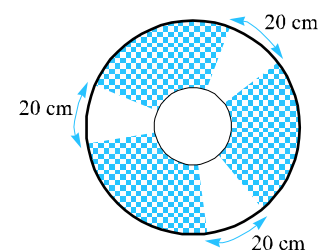
i $y = \frac{1}{\tan \alpha}$

ii $y = 5.5 - \pi - \alpha$

c Hence find $\{\alpha : 1 = (5.5 - \pi - \alpha) \tan \alpha\}$, giving your answer to two d.p.

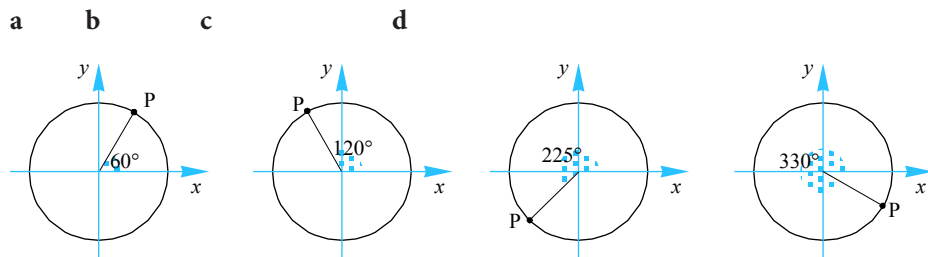


17. The diagram shows a disc of radius 40 cm with parts of it painted. The smaller circle (having the same centre as the disc) has a radius of 10 cm. What area of the disc has not been painted in blue?



Exercise 3.2.1

7. Find the coordinates of the point P on the following unit circles.



8. Find the exact value of:

a $\sin \frac{11\pi}{6} \cos \frac{5\pi}{6} - \sin \frac{5\pi}{6} \cos \frac{11\pi}{6}$ **b** $2 \sin \frac{\pi}{6} \cos \frac{\pi}{6}$

c $\frac{\tan \frac{\pi}{3} - \tan \frac{\pi}{6}}{1 + \tan \frac{\pi}{3} \tan \frac{\pi}{6}}$ **d** $\cos \frac{\pi}{4} \cos \frac{\pi}{3} + \sin \frac{\pi}{4} \sin \frac{\pi}{3}$

9. Show that the following relationships are true.

a $\sin 2\theta = 2 \sin \theta \cos \theta$, where $\theta = \frac{\pi}{3}$ **b** $\cos 2\theta = 2 \cos^2 \theta - 1$, where $\theta = \frac{\pi}{6}$

c $\tan 2\theta = \frac{2 \tan \theta}{1 - \tan^2 \theta}$, where $\theta = \frac{2\pi}{3}$ **d** $\sin(\theta - \phi) = \sin \theta \cos \phi - \sin \phi \cos \theta$, where $\theta = \frac{2\pi}{3}$ and $\phi = -\frac{\pi}{3}$

10. Given that $\sin \theta = \frac{2}{3}$ and $0 < \theta < \frac{\pi}{2}$, find:

a $\sin(\pi + \theta)$ **b** $\sin(2\pi - \theta)$ **c** $\cos\left(\frac{\pi}{2} + \theta\right)$

11. Given that $\cos \theta = \frac{2}{5}$ and $0 < \theta < \frac{\pi}{2}$, find:

a $\cos(\pi - \theta)$ **b** $\sec \theta$ **c** $\sin\left(\frac{\pi}{2} - \theta\right)$

12. Given that $\tan \theta = k$ and $0 < \theta < \frac{\pi}{2}$, find:

a $\tan(\pi + \theta)$ **b** $\tan\left(\frac{\pi}{2} + \theta\right)$ **c** $\tan(-\theta)$

13. Given that $\sin \theta = \frac{2}{3}$ and $0 < \theta < \frac{\pi}{2}$, find:

Maths SL Supplementary Questions

a $\cos\theta$ **b** $\sec\theta$ **c** $\cos(\pi + \theta)$

14. Given that $\cos\theta = -\frac{4}{5}$ and $\pi < \theta < \frac{3\pi}{2}$, find:

a $\sin\theta$ **b** $\tan\theta$ **c** $\cos(\pi + \theta)$

15. Given that $\tan\theta = -\frac{4}{3}$ and $\frac{\pi}{2} < \theta < \pi$, find:

a $\sin\theta$ **b** $\tan\left(\frac{\pi}{2} + \theta\right)$ **c** $\sec\theta$

16. Given that $\cos\theta = k$ and $\frac{3\pi}{2} < \theta < 2\pi$, find:

a $\cos(\pi - \theta)$ **b** $\sin\theta$ **c** $\cot\theta$

17. Given that $\sin\theta = -k$ and $\pi < \theta < \frac{3\pi}{2}$,

find:

a $\cos\theta$ **b** $\tan\theta$ **c** $\operatorname{cosec}\left(\frac{\pi}{2} + \theta\right)$

18. Simplify the following.

a $\frac{\sin(\pi - \theta)\cos\left(\frac{\pi}{2} + \theta\right)}{\sin(\pi + \theta)}$ **b** $\frac{\sin\left(\frac{\pi}{2} + \theta\right)\cos\left(\frac{\pi}{2} - \theta\right)}{\sin^2\theta}$ **c** $\frac{\sin\left(\frac{\pi}{2} - \theta\right)}{\cos\theta}$

d $\tan(\pi + \theta)\cot\theta$ **e** $\cos(2\pi - \theta)\operatorname{cosec}\theta$ **f** $\frac{\sec\theta}{\operatorname{cosec}\theta}$

19. If $0 \leq \theta \leq 2\pi$, find all values of x such that:

a $\sin x = \frac{\sqrt{3}}{2}$ **b** $\cos x = \frac{1}{2}$ **c** $\tan x = \sqrt{3}$

d $\cos x = -\frac{\sqrt{3}}{2}$ **e** $\tan x = -\frac{1}{\sqrt{3}}$ **f** $\sin x = -\frac{1}{2}$

Exercise 3.3.1

6. Prove $\sin^2x(1 + n\cot^2x) + \cos^2x(1 + n\tan^2x) = \sin^2x(n + \cot^2x) + \cos^2x(n + \tan^2x)$.

7. If $k\sec\phi = m\tan\phi$, prove that $\sec\phi\tan\phi = \frac{mk}{m^2 - k^2}$.

8. If $x = k\sec^2\phi + m\tan^2\phi$ and $y = l\sec^2\phi + n\tan^2\phi$, prove that $\frac{x-k}{k+m} = \frac{y-l}{l+n}$.

9. Given that $\tan\theta = \frac{2a}{a^2 - 1}$, $0 < \theta < \frac{\pi}{2}$, find: **a** $\sin\theta$ **b** $\cos\theta$

10. **a** If $\sin x + \cos x = 1$, find the values of: **i** $\sin^3x + \cos^3x$ **ii** $\sin^4x + \cos^4x$

b Hence, deduce the value of $\sin^kx + \cos^kx$, where k is a positive integer.

11. If $\tan\phi = -\frac{1}{\sqrt{x^2 - 1}}$, $\frac{\pi}{2} < \phi < \pi$, find, in terms of x ,

a $\sin\phi + \cos\phi$ **b** $\sin\phi - \cos\phi$ **c** $\sin^4\phi - \cos^4\phi$

12. Find: **a** the maximum value of **b** the minimum value of

i $\cos^2\theta + 5$ **ii** $\frac{5}{3\sin^2\theta + 2}$ **iii** $2\cos^2\theta + \sin\theta - 1$

13. **a** Given that $b\sin\phi = 1$ and $b\cos\phi = \sqrt{3}$, find b .

b Hence, find all values of ϕ that satisfy the relationship described in part **a**.

14. Find: **a** the maximum value of **b** the minimum value of

i $5^3\sin\theta - 1$ **ii** $3^{1-2\cos\theta}$

15. Given that $\sin\theta\cos\theta = k$, find: **a** $(\sin\theta + \cos\theta)^2$, $\sin\theta + \cos\theta > 0$.

b $\sin^3\theta + \cos^3\theta$, $\sin\theta + \cos\theta > 0$ **b**

16. a Given that $\sin\phi = \frac{1-a}{1+a}$, $0 < \phi < \frac{\pi}{2}$, find $\tan\phi$.

b Given that $\sin\phi = 1-a$, $\frac{\pi}{2} < \phi < \pi$, find : i $2 - \cos\phi$ ii $\cot\phi$

17. Find:

a the value(s) of $\cos x$, where $\cot x = 4(\operatorname{cosec} x - \tan x)$, $0 < x < \pi$.

b the values of $\sin x$, where $3\cos x = 2 + \frac{1}{\cos x}$, $0 \leq x \leq 2\pi$.

18. Given that $\sin 2x = 2 \sin x \cos x$, find all values of x , such that $2 \sin 2x = \tan x$, $0 \leq x \leq \pi$.

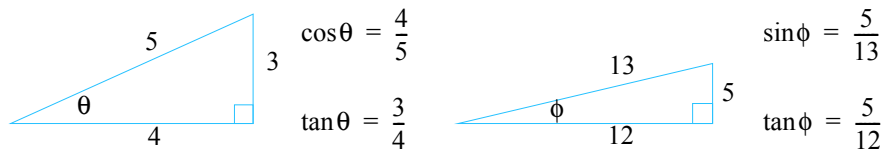
Extra Examples

Example 3.3.8

If $\sin\theta = \frac{3}{5}$ and $\cos\phi = -\frac{12}{13}$, where $0 \leq \theta \leq \frac{\pi}{2}$ and $\pi \leq \phi \leq \frac{3\pi}{2}$, find:

- a $\sin(\theta + \phi)$ b $\cos(\theta + \phi)$ c $\tan(\theta - \phi)$

We start by drawing two right-angled triangles satisfying the given conditions:



$$\sin(\theta + \phi) = \sin\theta\cos\phi + \sin\phi\cos\theta$$

However, we cannot simply substitute the above ratios into this expression as we now need to consider the sign of the ratios.

As $0 \leq \theta \leq \frac{\pi}{2}$ then $\cos\theta = \frac{4}{5}$ and as $\pi \leq \phi \leq \frac{3\pi}{2}$ then $\sin\phi = -\frac{5}{13}$.

$$\text{Therefore, } \sin(\theta + \phi) = \frac{3}{5} \times -\frac{12}{13} + -\frac{5}{13} \times \frac{4}{5} = -\frac{56}{65}$$

$$\cos(\theta + \phi) = \cos\theta\cos\phi - \sin\theta\sin\phi$$

As $0 \leq \theta \leq \frac{\pi}{2}$ then $\cos\theta = \frac{4}{5}$ and as $\pi \leq \phi \leq \frac{3\pi}{2}$ then $\sin\phi = -\frac{5}{13}$.

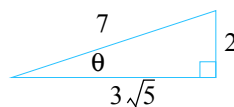
$$\text{Therefore, } \cos(\theta + \phi) = \frac{4}{5} \times -\frac{12}{13} - \frac{3}{5} \times -\frac{5}{13} = -\frac{33}{65}$$

Example 3.3.9

If $\sin\theta = \frac{2}{7}$, where $\frac{\pi}{2} \leq \theta \leq \pi$, find:

- a $\sin 2\theta$ b $\cos 2\theta$ c $\tan 2\theta$

We start by drawing the relevant right-angled triangle:



$$\text{a } \sin 2\theta = 2 \sin\theta \cos\theta = 2 \times \frac{2}{7} \times -\frac{3\sqrt{5}}{7}$$

$$= -\frac{12\sqrt{5}}{49}$$

$$\text{b } \cos 2\theta = 1 - 2\sin^2\theta = 1 - 2 \times \left(\frac{2}{7}\right)^2 = \frac{41}{49}$$

$$c \quad \tan 2\theta = \frac{\sin 2\theta}{\cos 2\theta} = \frac{-\frac{12\sqrt{5}}{49}}{\frac{41}{49}} = -\frac{12\sqrt{5}}{41}$$

Example 3.3.10

Prove that: a $\sin 2\alpha \tan \alpha + \cos 2\alpha = 1$ b $2 \cot 2\beta = \cot \beta - \tan \beta$

$$\begin{aligned} a \quad \text{L.H.S} &= \sin 2\alpha \tan \alpha + \cos 2\alpha = 2 \sin \alpha \cos \alpha \times \frac{\sin \alpha}{\cos \alpha} + (1 - 2\sin^2 \alpha) \\ &= 2\sin^2 \alpha + 1 - 2\sin^2 \alpha = \text{R.H.S} \\ &= 1 \end{aligned}$$

$$\begin{aligned} b \quad \text{R.H.S} &= \cot \beta - \tan \beta = \frac{\cos \beta}{\sin \beta} - \frac{\sin \beta}{\cos \beta} \\ &= \frac{\cos^2 \beta - \sin^2 \beta}{\sin \beta \cos \beta} \\ &= \frac{\cos 2\beta}{\frac{1}{2} \sin 2\beta} \\ &= 2 \frac{\cos 2\beta}{\sin 2\beta} \\ &= 2 \cot 2\beta \\ &= \text{L.H.S} \end{aligned}$$

Notice that, when proving identities, when all else fails, then express everything in terms of sine and cosine. This will always lead to the desired result – even though sometimes the working seems like it will only grow and grow – eventually, it does simplify. Be persistent.

To prove a given identity, any one of the following approaches can be used:

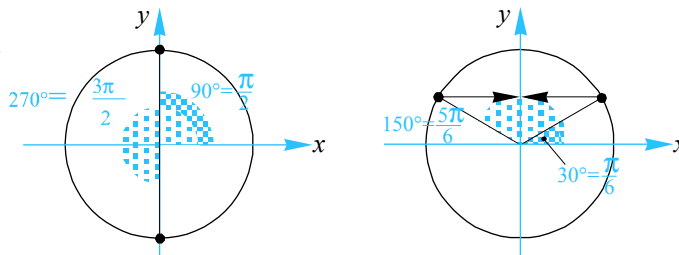
1. Start with the L.H.S and then show that L.H.S = R.H.S
2. Start with the R.H.S and then show that R.H.S = L.H.S
3. Show that L.H.S = p, show that R.H.S = p \Rightarrow L.H.S = R.H.S
4. Start with L.H.S = R.H.S \Rightarrow L.H.S – R.H.S = 0.

When using approaches 1 and 2, choose whichever side has more to work with.

Example 3.3.11

Find all values of x , such that $\sin 2x = \cos x$, where $0 \leq x \leq 2\pi$.

$$\sin 2x = \cos x \Leftrightarrow 2 \sin x \cos x = \cos x$$



$$\Leftrightarrow 2 \sin x \cos x - \cos x = 0$$

$$\Leftrightarrow \cos x(2 \sin x - 1) = 0$$

$$\Leftrightarrow \cos x = 0 \text{ or } \sin x = \frac{1}{2}$$

$$\text{Now, } \cos x = 0, 0 \leq x \leq 2\pi \Leftrightarrow x = \frac{\pi}{2}, \frac{3\pi}{2}$$

and

$$\sin x = \frac{1}{2}, 0 \leq x \leq 2\pi \Leftrightarrow x = \frac{\pi}{6}, \frac{5\pi}{6}$$

Example 3.3.12

Simplify $\sqrt{2} \sin\left(\theta + \frac{\pi}{4}\right)$.

Express $\cos \theta - \sin \theta$ in the form $R \cos(\theta + \alpha)$, where R and α are real numbers.

Hence find the maximum value of $\cos \theta - \sin \theta$.

$$\begin{aligned} \sqrt{2} \sin\left(\theta + \frac{\pi}{4}\right) &= \sqrt{2} \left[\sin \theta \cos \frac{\pi}{4} + \cos \theta \sin \frac{\pi}{4} \right] = \sqrt{2} \left[\sin \theta \times \frac{1}{\sqrt{2}} + \cos \theta \times \frac{1}{\sqrt{2}} \right] \\ &= \sin \theta + \cos \theta \end{aligned}$$

In this instance, as the statement needs to be true for all values of θ , we will determine the values of R and α by setting $R \cos(\theta + \alpha) \equiv \cos \theta - \sin \theta$.

$$\text{Now, } R \cos(\theta + \alpha) = R[\cos \theta \cos \alpha - \sin \theta \sin \alpha] = R \cos \theta \cos \alpha - R \sin \theta \sin \alpha$$

Therefore, we have that $R \cos \theta \cos \alpha - R \sin \theta \sin \alpha \equiv \cos \theta - \sin \theta$

$$\Rightarrow R \cos \theta \cos \alpha = \cos \theta \Leftrightarrow R \cos \alpha = 1 \quad (1)$$

$$\Rightarrow R \sin \theta \sin \alpha = \sin \theta \Leftrightarrow R \sin \alpha = 1 \quad (2)$$

Dividing (2) by (1) we have $\frac{R \sin \alpha}{R \cos \alpha} = \frac{1}{1} \Leftrightarrow \tan \alpha = 1 \therefore \alpha = \frac{\pi}{4}$

Substituting into (1) we have $R \cos \frac{\pi}{4} = 1 \Leftrightarrow R \times \frac{1}{\sqrt{2}} = 1 \therefore R = \sqrt{2}$.

Therefore, $\cos \theta - \sin \theta \equiv \sqrt{2} \cos\left(\theta + \frac{\pi}{4}\right)$

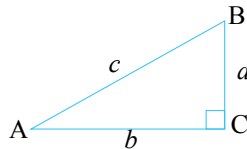
Then, as the maximum value of the cosine is 1, the maximum of $\sqrt{2} \cos\left(\theta + \frac{\pi}{4}\right)$ is $\sqrt{2}$.

Exercise 3.3.2

10. Prove that: **a** $\frac{1 + \sin x + \cos x}{1 + \sin x - \cos x} = \cot \frac{1}{2}x$ **b** $\cos 4x = 8 \cos^4 x - 8 \cos^2 x + 1$

c $\sin^4 \phi = \frac{3}{8} + \frac{1}{8} \cos 4\phi - \frac{1}{2} \cos 2\phi$ **d** $\sin x = \frac{2 \tan \frac{1}{2}x}{1 + \tan^2 \frac{1}{2}x}$

11. For the right-angled triangle shown, prove that:



a $\sin 2\alpha = \frac{2ab}{c^2}$ **b** $\cos 2\alpha = \frac{b^2 - a^2}{c^2}$

c $\sin \frac{1}{2}\alpha = \sqrt{\frac{c-b}{2c}}$ **d** $\cos \frac{1}{2}\alpha = \sqrt{\frac{c+b}{2c}}$

12. Find the exact value $\tan \frac{\pi}{8}$.

13. Given that $\alpha + \beta + \gamma = \pi$, prove that $\sin 2\alpha + \sin 2\beta + \sin 2\gamma = 4 \sin \alpha \sin \beta \sin \gamma$.

14. Solve the following for $0 \leq x \leq 2\pi$.

a $\sin x = \sin 2x$ **b** $\sin x = \cos 2x$ **c** $\tan 2x = 4 \tan x$

15. **a** Given that $a \sin \theta + b \cos \theta \equiv R \sin(\theta + \alpha)$, express R and α in terms of a and b .
- b** Find the maximum value of $5 + 4 \sin \theta + 3 \cos \theta$.
16. **a** Given that $a \cos \theta + b \sin \theta \equiv R \cos(\theta - \alpha)$, express R and α in terms of a and b .
- b** Find the minimum value of $2 + 12 \cos \theta + 5 \sin \theta$.
17. Prove that $\tan\left(\frac{\pi}{4} + \frac{1}{2}x\right) = \sec x + \tan x$.
18. Show that if $t = \tan \frac{\pi}{12}$ then $t^2 + 2\sqrt{3}t = 1$. Hence find the exact value of $\tan \frac{\pi}{12}$.

Exercise 3.4.1

7. Sketch graphs of the following functions for x -values in the interval $[-2\pi, 2\pi]$.

a $y = \sin(2x)$

b $y = -\cos\left(\frac{x}{2}\right)$

c $y = 3 \tan\left(x - \frac{\pi}{4}\right)$

d $y = 2 \sin\left(x - \frac{\pi}{2}\right)$

e $y = 1 - 2 \sin(2x)$

f $y = -2 \cos\left(\frac{x - \pi}{2}\right)$

g $y = 3 \tan\left[\frac{1}{2}\left(x + \frac{\pi}{4}\right)\right] - 3$

h $y = 3 \cos\left(x + \frac{\pi}{4}\right)$

i $y = 2 \sin\left[\frac{1}{3}\left(x + \frac{2\pi}{3}\right)\right] - 1$

j $y = 3 \tan(2x + \pi)$

k $y = 4 \sin\left(\frac{x + \frac{\pi}{2}}{2}\right)$

l $y = 2 - \sin\left(\frac{2(x - \pi)}{3}\right)$

m $y = 2 \cos(\pi x)$

n $y = 2 \sin[\pi(x + 1)]$

8.

a i Sketch one cycle of the graph of the function $f(x) = \sin x$.

ii For what values of x is the function $y = \frac{1}{f(x)}$ not defined?

iii Hence, sketch one cycle of the graph of the function $g(x) = \operatorname{cosec} x$.

bi Sketch one cycle of the graph of the function $f(x) = \cos x$.

ii For what values of x is the function $y = \frac{1}{f(x)}$ not defined?

iii Hence, sketch one cycle of the graph of the function $g(x) = \operatorname{sec} x$.

ci Sketch one cycle of the graph of the function $f(x) = \tan x$.

ii For what values of x is the function $y = \frac{1}{f(x)}$ not defined?

iii Hence, sketch one cycle of graph of the function $g(x) = \cot x$.

Exercise 3.5.1

6. Solve the following equations for the intervals indicated, giving exact answers:

e $\cos^2 x = 2 \cos x, -\pi \leq x \leq \pi$

f $\sec 2x = \sqrt{2}, 0 \leq x \leq 2\pi$

g $2 \sin^2 x - 3 \cos x = 2, 0 \leq x \leq 2\pi$

h $\sin 2x = 3 \cos x, 0 \leq x \leq 2\pi$

7. Find:

a $3 \tan^2 x + \tan x = 2, 0 \leq x \leq 2\pi$.

b $\tan^3 x + \tan^2 x = 3 \tan x + 3, 0 \leq x \leq 2\pi$.

8. If $0 \leq x \leq 2\pi$, find:

a $\sin^2 2x - \frac{1}{4} = 0$

b $\tan^2\left(\frac{x}{2}\right) - 3 = 0$

c $\cos^2(\pi x) = 1$

9. If $0 \leq x \leq 2\pi$, find:

a $\sec^2 x + 2 \sec x = 8$

b $\sec^2 x = 2 \tan x + 4$

c $\cot^2 x - \sqrt{3} \cot x = 0$

d $6 \operatorname{cosec}^2 x = 8 + \cot x$

10. a Express $\sqrt{3} \sin x + \cos x$ in the form $R \sin(x + \alpha)$.

b Solve $\sqrt{3} \sin x + \cos x = 1, 0 \leq x \leq 2\pi$.

11. a Express $\sin x - \sqrt{3} \cos x$ in the form $R \sin(x + \alpha)$.

b Solve $\sin x - \sqrt{3} \cos x = -1, 0 \leq x \leq 2\pi$.

12. Find x if $2 \sin\left(x + \frac{\pi}{3}\right) + 2 \sin\left(x - \frac{\pi}{3}\right) = \sqrt{3}, 0 \leq x \leq 2\pi$.

13. a Sketch the graph of $f(x) = \sin x, 0 \leq x \leq 4\pi$.

b Hence, find: i $\left\{x \mid \sin x > \frac{1}{2}\right\} \cap \{x \mid 0 < x < 4\pi\}$.

ii $\{x \mid \sqrt{3} \sin x < -1\} \cap \{x \mid 0 < x < 4\pi\}$.

Exercise 3.5.2

14. A hill has its cross-section modelled by the function,

$$h : [0, 2] \rightarrow \mathbb{R}, h(x) = a + b \cos(kx),$$

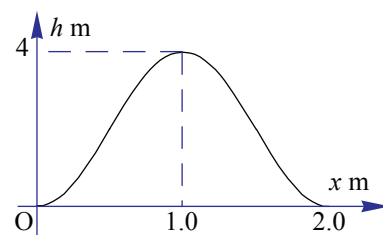
where $h(x)$ measures the height of the hill relative to the horizontal distance x m from O.

a Determine the values of

i k

ii b

iii a



b How far, horizontally from O, would an ant climbing this hill from O be, when it first reaches a height of 1 metre?

c How much further, horizontally, will the ant have travelled when it reaches the same height of 1 metre once over the hill and on its way down?

15. A nursery has been infested by two insect pests: the Fruitfly and the Greatfly. These insects appear at about the same time that a particular plant starts to flower. The number of Fruitfly (in thousands), t weeks after flowering has started is modelled by the function

$$F(t) = 6 + 2 \sin(\pi t), 0 \leq t \leq 4$$

Whereas the number of Greatfly (in thousands), t weeks after flowering has started is modelled by the function

$$G(t) = 0.25t^2 + 4, 0 \leq t \leq 4$$

a Copy and complete the following table of values, giving your answers correct to the nearest hundred.

| | | | | | | | | | |
|--------|---|-----|---|-----|---|-----|---|-----|---|
| t | 0 | 0.5 | 1 | 1.5 | 2 | 2.5 | 3 | 3.5 | 4 |
| $F(t)$ | | | | | | | | | |
| $G(t)$ | | | | | | | | | |

b On the same set of axes **draw** the graphs of:

i $F(t) = 6 + 2 \sin(\pi t), 0 \leq t \leq 4.$

ii $G(t) = 0.25t^2 + 4, 0 \leq t \leq 4.$

c On how many occasions will there be equal numbers of each insect?

d For what percentage of the time will there be more Greatflies than Fruitflies?

16. The depth, $d(t)$ metres, of water at the entrance to a harbour at t hours after midnight on a particular day is given by

$$d(t) = 12 + 3 \sin\left(\frac{\pi}{6}t\right), 0 \leq t \leq 24$$

a Sketch the graph of $d(t)$ for $0 \leq t \leq 24.$

b For what values of t will: i $d(t) = 10.5, 0 \leq t \leq 24$ ii $d(t) \geq 10.5, 0 \leq t \leq 24.$

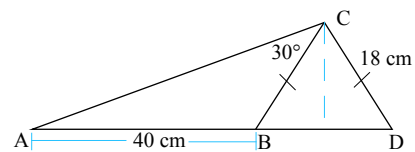
Boats requiring a minimum depth of b metres are only permitted to enter the harbour when the depth of water at the entrance of the harbour is at least b metres for a continuous period of one hour.

c Find the largest value of b , correct to two decimal place, which satisfies this condition.

Exercise 3.6.3

8. The framework for an experimental design for a kite is shown. Material for the kite costs \$12 per square cm.

How much will it cost for the material if it is to cover the framework of the kite.



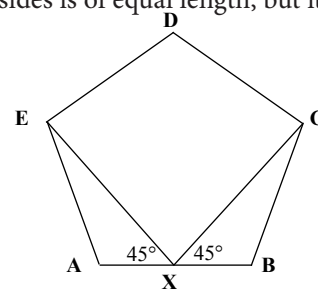
9. A boy walking along a straight road notices the top of a tower at a bearing of 284°T . After walking a further 1.5 km he notices that the top of the tower is at a bearing of 293°T . How far from the road is the tower?

Exercise 3.6.7

117. A sandpit in the shape of a pentagon ABCDE is to be built in such a way that each of its sides is of equal length, but its angles are not all equal.

The pentagon is symmetrical about DX, where X is the midpoint of AB.

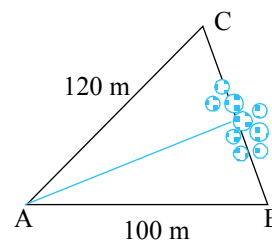
The angle AXE and BXC are both 45° and each side is 2 m long.



- Find $\angle XEA$.
 - Find the length of EX.
 - How much sand is required if the sandpit is 30 cm deep? Give your answer to three decimal places.
18. A triangular region has been set aside for a housing development which is to be divided into two sections. Two adjacent street frontages, AB and AC measure 100 m and 120 m respectively, with the 100 m frontage running in an easterly direction, while the 120 m frontage runs in a north-east direction. A plan for this development is shown alongside. Give all answers to the nearest metre.

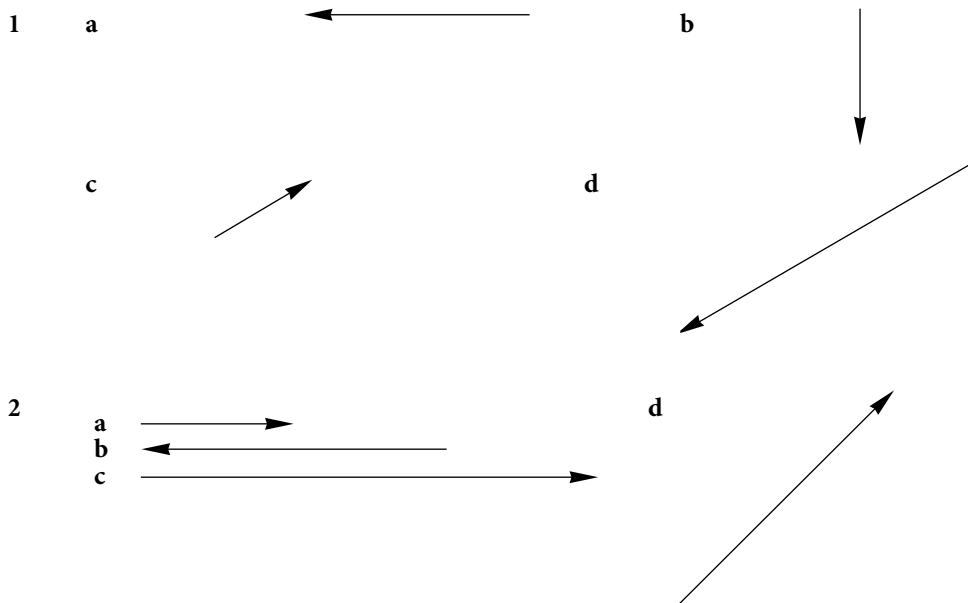
Find the area covered by the housing development.

During the development stages, an environmental group specified that existing trees were not to be removed from the third frontage. This made it difficult for the surveyors to measure the length of the third frontage.

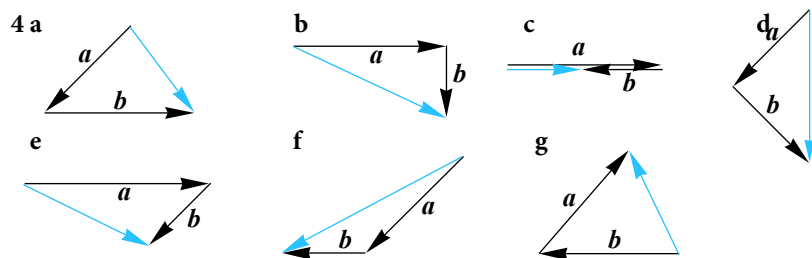


- Calculate the length of the third frontage, BC.
- The estate is to be divided into 2 regions, by bisecting the angle at A with a stepping wall running from A to the frontage BC.
- How long is this stepping wall?

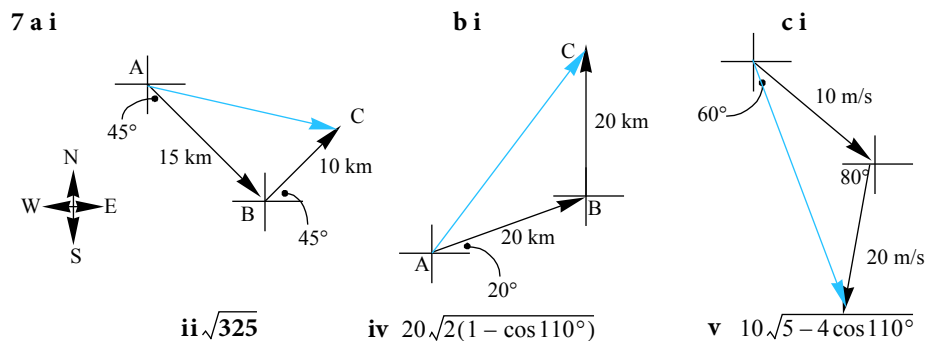
Exercise 4.1.1



- 3 a {a,b,e,g,u}; {d,f} b {d,f}; {a,c}; {b,e} c {a,g}; {c,g}
- d {d,f}; {b,e} e {d,f}; {b,e}; {a,c,g}



- 5 a AC b AB c AD d BA e 0
- 6 a Y b N c Y d Y e N



- 8 72.11 N, E $33^\circ 41'$ N
- 9 2719 N along river
- 10 b i 200 kph ii 213.6 kph, N $7^\circ 37'$ W
- 11 b i 200 ii 369.32

Exercise 4.1.2

1 **a** $4i + 28j - 4k$ **b** $12i + 21j + 15k$ **c** $-2i + 7j - 7k$ **d** $-6i - 12k$

2 **a** $3i - 4j + 2k$ **b** $-8i + 24j + 13k$ **c** $18i - 32j + k$ **d** $-15i + 36j + 12k$

3 **a** $\begin{pmatrix} 11 \\ 0 \\ 8 \end{pmatrix}$ **b** $\begin{pmatrix} -27 \\ 1 \\ -22 \end{pmatrix}$ **c** $\begin{pmatrix} -3 \\ -6 \\ 12 \end{pmatrix}$ **d** $\begin{pmatrix} 16 \\ -1 \\ 14 \end{pmatrix}$

4 $\begin{pmatrix} -5 \\ 3 \end{pmatrix}$

5 $\begin{pmatrix} -2 \\ 3 \end{pmatrix}, (-2, 3)$

6 **a** $8i - 4j - 28k$ **b** $-19i - 7j - 16k$ **c** $-17i + j + 22k$ **d** $40i + 4j - 20k$

7 **a** $\begin{pmatrix} 20 \\ 1 \\ 25 \end{pmatrix}$ **b** $\begin{pmatrix} 12 \\ 2 \\ 16 \end{pmatrix}$ **c** $\begin{pmatrix} -4 \\ -38 \\ -32 \end{pmatrix}$ **d** $\begin{pmatrix} -20 \\ -22 \\ -40 \end{pmatrix}$

8 $A = -4, B = -7$

9 **a** $(2, -5)$ **b** $(-4, 3)$ **c** $(-6, -5)$

10 Depends on basis used. Here we used: East as i , North j and vertically up k

b $D = 600i - 800j + 60k, A = -1200i - 300j + 60k$ **c** $1800i - 500j$

Exercise 4.2.1

- 1 a 4 b -11.49 c 25
- 2 a 12 b 27 c -8 d -49
 f 4 g -21 h 6 i -4
- 3 a 79° b 108° c 55° d 50°
 e 74° f 172° g 80° h 58°
- 4 a -8 b 0.5
- 5 a -6 b 2 c Not possible d 5
 e Not possible f 0
- 6 a $4 - 2\sqrt{3}$ b $2\sqrt{3} - 4$ c $14 - 2\sqrt{3}$ d Not possible
- 7 1
- 8 105.2°

9 $x = -\frac{16}{7}, y = -\frac{44}{7}$

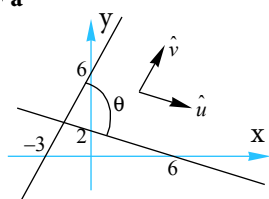
10 $\pm \frac{1}{\sqrt{11}}(-i + j + 3k)$

12 a $\lambda(-16i - 10j + k)$ b e.g. $i + j + \frac{3}{7}k$

14 $a \perp b - c$ if $b \neq c$ or $b = c$

16 a $\frac{1}{3}$ b $\frac{1}{\sqrt{3}}$

17 a $\hat{u} = \frac{1}{\sqrt{10}}(3i - j)$ $\hat{v} = \frac{1}{\sqrt{5}}(i + 2j)$
 c 81.87°



18 $\frac{1}{2}(-i + j + \sqrt{2}k)$

23 a Use i as a 1 km eastward vector and j as a 1 km northward vector.

b $\vec{WD} = 4i + 8j$, $\vec{WS} = 13i + j$ and $\vec{DS} = 9i - 7j$ c $\frac{1}{\sqrt{80}}(4i + 8j)$

d $\frac{d}{\sqrt{80}}(4i + 8j)$ e $3i + 6j$

Exercise 4.3.1

1 a i $r = i + 2j$ ii $r = -5i + 11j$ iii $r = 5i - 4j$ b line joins (1, 2) and (5, -4)

2 a $r = 2i + 5j + \lambda(3i - 4j)$ b $r = -3i + 4j + \lambda(-i + 5j)$ c $r = j + \lambda(7i + 8j)$

d $r = i - 6j + \lambda(2i + 3j)$ e $r = \begin{pmatrix} -1 \\ -1 \end{pmatrix} + \lambda \begin{pmatrix} -2 \\ 10 \end{pmatrix}$ or $r = -i - j + \lambda(-2i + 10j)$

f $r = \begin{pmatrix} 1 \\ 2 \end{pmatrix} + \lambda \begin{pmatrix} 5 \\ 1 \end{pmatrix}$ or $r = i + 2j + \lambda(5i + j)$

3 a $r = 2i + 3j + \lambda(2i + 5j)$ b $r = i + 5j + \lambda(-3i - 4j)$ c $r = 4i - 3j + \lambda(-5i + j)$

4 a $r = 9i + 5j + \lambda(i - 3j)$ b $r = 6i - 6j + t(-4i - 2j)$

c $r = -i + 3j + \lambda(-4i + 8j)$ d $r = i + 2j + \mu \left(\frac{1}{2}i - \frac{1}{3}j \right)$

5 a $x = -8 + 2\mu$
 $y = 10 + \mu$ b $x = 7 - 3\mu$
 $y = 4 - 2\mu$

c $x = 5 + 2.5\mu$
 $y = 3 + 0.5\mu$ d $x = 0.5 - 0.1t$
 $y = 0.4 + 0.2t$

6 a $\frac{x-1}{3} = y-3$ b $\frac{x-2}{-7} = \frac{y-4}{-5}$

c $x+2 = \frac{y+4}{8}$ d $x-0.5 = \frac{y-0.2}{-11}$

e $x = 7$

7 a $r = 2j + t(3i + j)$ b $r = 5i + t(i + j)$ c $r = -6i + t(2i + j)$

8 a $6i + 13j$ b $-\frac{16}{3}i - \frac{28}{3}j$

9 $r = 2i + 7j + t(4i + 3j)$

11 a (4, -2), (-1, 1), (9, -5) b -2 d $r = 4i - 2j + \lambda(-5i + 3j)$ e i M || L ii M = L

12 $4x + 3y = 11$

13 a $\frac{-3}{\sqrt{13}}, \frac{2}{\sqrt{13}}$ b $\frac{4}{5}, \frac{3}{5}$

14 b ii and iii

15 $(-83, -215)$

16 $r = \frac{k}{7}(19i + 20j)$

17 a $\left(\frac{92}{11}, \frac{31}{11}\right)$ b \emptyset c Lines are coincident, all points are common.

Exercise 4.3.2

1 a $r = 2i + j + 3k + t(i - 2j + 3k)$ b $r = 2i - 3j - k + t(-2i + k)$

2 a $r = 2i + 5k + t(i + 4j + 3k)$ b $r = 3i - 4j + 7k + t(4i + 9j - 5k)$

c $r = 4i + 4j + 4k + t(7i + 7k)$

3 a $\frac{x}{3} = \frac{y-2}{4} = \frac{z-3}{5}$ b $\frac{x+2}{5} = \frac{z+1}{-2}, y = 3$ c $x = y = z$

4
$$\begin{aligned} x &= 5 - 7t \\ y &= 2 + 2t \\ z &= 6 - 4t \end{aligned} \quad r = \begin{pmatrix} 5 \\ 2 \\ 6 \end{pmatrix} + t \begin{pmatrix} -7 \\ 2 \\ -4 \end{pmatrix} \quad \frac{x-5}{-7} = \frac{y-2}{2} = \frac{z-6}{-4}$$

5 $\left(\frac{13}{5}, \frac{23}{5}, 0\right)$

6 a $\begin{aligned} x &= 2 + 3t \\ y &= 5 + t \\ z &= 4 + 0.5t \end{aligned}$ b $\begin{aligned} x &= 1 + 1.5t \\ y &= t \\ z &= 4 - 2t \end{aligned}$

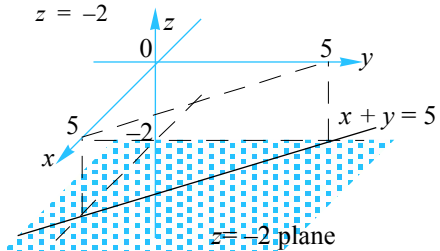
c $\begin{aligned} x &= 3 - t \\ y &= 2 - 3t \\ z &= 4 + 2t \end{aligned}$ d $\begin{aligned} x &= 1 + 2t \\ y &= 3 + 2t \\ z &= 2 + 0.5t \end{aligned}$

7 a $\frac{x-4}{3} = \frac{y-1}{-4} = \frac{z+2}{-2}$ b $x = 2, y = \frac{z-1}{-3}$

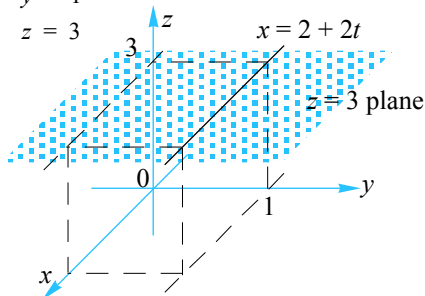
9 a $\frac{x+1}{2} = y - 3 = \frac{z-5}{-1}$ b $\frac{x-2}{2} = \frac{z-1}{-2}, y = 1$

10 a $(1, -1, 0)$ b $a = 15, b = -11$

11 a $x = 1 + t$
 $y = 4 - t$
 $z = -2$



b $x = 2 + 2t$
 $y = 1$
 $z = 3$



12 $r = \begin{pmatrix} 1 \\ 0.5 \\ 2 \end{pmatrix} + t \begin{pmatrix} 2 \\ -1.5 \\ 1 \end{pmatrix}$. Line passes through $(1, 0.5, 2)$ and is parallel to the vector $2i - \frac{3}{2}j + k$

13 a 54.74° b 82.25° c 57.69°

14 a $(4, 10.5, 15)$ b Does not intersect.

15 a L: $x = \frac{y-2}{2} = \frac{z}{5}$, M: $\frac{x+1}{2} = \frac{y+1}{3} = \frac{z-1}{-2}$ b \emptyset c 84.92°

d i $(0, 2, 0)$ ii $(0, \frac{1}{2}, 0)$

18 $\frac{x}{4} = \frac{y}{9} = \frac{z}{3}$

19 $k = -\frac{7}{2}$

20 64°

21 3 or -2

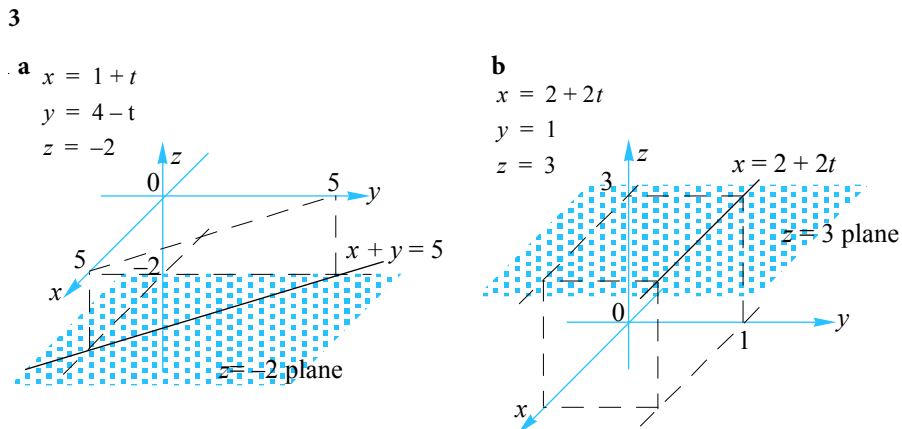
22 $12i + 6j - 7k$ (or any multiple thereof)

23 Not parallel. Do not intersect. Lines are skew.

Exercise 4.4.1

1 a $\frac{x+1}{2} = y-3 = \frac{z-5}{-1}$ b $\frac{x-2}{2} = \frac{z-1}{-2}, y=1$

2 a $(1, -1, 0)$ b $a = 15, b = -11$



4 $r = \begin{pmatrix} 1 \\ 0.5 \\ 2 \end{pmatrix} + t \begin{pmatrix} 2 \\ -1.5 \\ 1 \end{pmatrix}$. Line passes through $(1, 0.5, 2)$ and is parallel to the vector $2i - \frac{3}{2}j + k$

5 a 54.74° b 82.25° c 57.69°

6 a $(4, 10.5, 15)$ b Does not intersect.

7 a L: $x = \frac{y-2}{2} = \frac{z}{5}$, M: $\frac{x+1}{2} = \frac{y+1}{3} = \frac{z-1}{-2}$ b \emptyset c 84.92°

d i $(0, 2, 0)$ ii $(0, \frac{1}{2}, 0)$

10 $\frac{x}{4} = \frac{y}{9} = \frac{z}{3}$

11 $k = -\frac{7}{2}$

12 64°

13 3 or -2

14 $12i + 6j - 7k$ (or any multiple thereof)

15 Not parallel. Do not intersect. Lines are skew.

16 $t=2$

17 $(1, 1, 1)$, no

18 ~21

Exercise 4.1.1

11. Patrick walks for 200 m to point P due east of his cabin at point O, then 300 m due north where he reaches a vertical cliff, point Q. Patrick then climbs the 80 m cliff to point R.
- a Draw a vector diagram showing the vectors **OP**, **PQ** and **QR**.
- b Find: i $|\mathbf{OQ}|$ ii $|\mathbf{OR}|$

Example

Find the angle between the lines:

$$r_1 = \begin{pmatrix} 2 \\ 3 \end{pmatrix} + \lambda \begin{pmatrix} -1 \\ 3 \end{pmatrix}, r_2 = \begin{pmatrix} 6 \\ 0 \end{pmatrix} + \lambda \begin{pmatrix} 1 \\ 2 \end{pmatrix}$$

It is necessary to find the angle between the two vectors that represent the directions of the lines:

These are: $\begin{pmatrix} -1 \\ 3 \end{pmatrix}, \begin{pmatrix} 1 \\ 2 \end{pmatrix}$.

Using the 'dot product method':

$$\left| \begin{pmatrix} -1 \\ 3 \end{pmatrix} \right| = \sqrt{(-1)^2 + 3^2} = \sqrt{10}$$

$$\left| \begin{pmatrix} 1 \\ 2 \end{pmatrix} \right| = \sqrt{1^2 + 2^2} = \sqrt{5}$$

$$\begin{pmatrix} -1 \\ 3 \end{pmatrix} \cdot \begin{pmatrix} 1 \\ 2 \end{pmatrix} = -1 \times 1 + 3 \times 2 = 5$$

$$\cos \theta = \frac{5}{\sqrt{10} \times \sqrt{5}}$$

$$\theta = 45^\circ$$

Exercise 4.3.1

11. The line L is defined by the parametric equations $x = 4 - 5k$ and $y = -2 + 3k$.
- Find the coordinates of three points on L.
 - Find the value of k that corresponds to the point $(14, -8)$.
 - Show that the point $(-1, 4)$ does not lie on the line L.
 - Find the vector form of the line L.
 - A second line, M, is defined parametrically by $x = a + 10\lambda$ and $y = b - 6\lambda$. Describe the relationship between M and L for the case that:
 - $a = 8$ and $b = 4$
 - $a = 4$ and $b = -2$
12. Find the Cartesian equation of the line that passes through the point $A(2, 1)$ and such that it is perpendicular to the vector $4i + 3j$.
13. Find the direction cosines for each of the following lines:
- $r = \begin{pmatrix} 3 \\ 4 \end{pmatrix} + \mu \begin{pmatrix} -3 \\ 2 \end{pmatrix}$
 - $r = \begin{pmatrix} 5 \\ 9 \end{pmatrix} + \lambda \begin{pmatrix} 4 \\ 3 \end{pmatrix}$.

14. a Show that the line $ax + by + c = 0$ has a directional vector $\begin{pmatrix} b \\ -a \end{pmatrix}$ and a normal vector $\begin{pmatrix} a \\ b \end{pmatrix}$.

b By making use of directional vectors, which of the following lines are parallel to $L : 2x + 3y = 10$?

i $5x - 2y = 10$

ii $6x + 9y = 20$

iii $4x + 6y = -10$

15. Find the point of intersection of the lines $\mathbf{r} = \begin{pmatrix} -2 \\ 1 \end{pmatrix} + \lambda \begin{pmatrix} 3 \\ 8 \end{pmatrix}$ and $\frac{x-3}{2} = \frac{y}{5}$.

16. Find a vector equation of the line passing through the origin that also passes through the point of intersection of the lines:

$$\mathbf{u} = \begin{pmatrix} 3 \\ 2 \end{pmatrix} + \lambda \begin{pmatrix} -1 \\ 3 \end{pmatrix} \quad \text{and} \quad \mathbf{v} = \begin{pmatrix} -1 \\ 1 \end{pmatrix} + \mu \begin{pmatrix} 2 \\ 1 \end{pmatrix} .$$

17. Consider the line with vector equation $\mathbf{r} = (4\mathbf{i} - 3\mathbf{j}) + \lambda(3\mathbf{i} + 4\mathbf{j})$. Find the points of intersection of this line with the line:

a $\mathbf{u} = (4\mathbf{i} + 5\mathbf{j}) + \mu(2\mathbf{i} - \mathbf{j})$

b $\mathbf{v} = (-2\mathbf{i} + 3\mathbf{j}) + t(-6\mathbf{i} - 8\mathbf{j})$

c $\mathbf{w} = (13\mathbf{i} + 9\mathbf{j}) + s(3\mathbf{i} + 4\mathbf{j})$

Exercise 4.3.2

8. Show that the lines $\frac{x-1}{2} = 2-y = 5-z$ and $\frac{4-x}{4} = \frac{3+y}{2} = \frac{5+z}{2}$ are parallel.

9. Find the Cartesian equation of the lines joining the points

- a $(-1, 3, 5)$ to $(1, 4, 4)$ b $(2, 1, 1)$ to $(4, 1, -1)$

10. a Find the coordinates of the point where the line $\mathbf{r} = \begin{pmatrix} -2 \\ 5 \\ 3 \end{pmatrix} + t \begin{pmatrix} -1 \\ 2 \\ 1 \end{pmatrix}$ intersects the x - y plane.

b The line $\frac{x-3}{4} = y+2 = \frac{4-z}{5}$ passes through the point $(a, 1, b)$. Find the values of a and b .

11. Find the Cartesian equation of the line having the vector form:

- a $\mathbf{r} = \begin{pmatrix} 1 \\ 4 \\ -2 \end{pmatrix} + t \begin{pmatrix} 1 \\ -1 \\ 0 \end{pmatrix}$ b $\mathbf{r} = \begin{pmatrix} 2 \\ 1 \\ 3 \end{pmatrix} + t \begin{pmatrix} 2 \\ 0 \\ 0 \end{pmatrix}$.

In each case, provide a diagram showing the lines.

12. Find the vector equation of the line represented by the Cartesian form $\frac{x-1}{2} = \frac{1-2y}{3} = z-2$.

Clearly describe this line.

13. Find the acute angle between the following lines.

a $\mathbf{r} = \begin{pmatrix} 0 \\ 2 \\ 3 \end{pmatrix} + s \begin{pmatrix} 3 \\ 4 \\ 5 \end{pmatrix}$ and $\mathbf{r} = \begin{pmatrix} -2 \\ 5 \\ 3 \end{pmatrix} + t \begin{pmatrix} -1 \\ 2 \\ 1 \end{pmatrix}$.

b $\mathbf{r} = \begin{pmatrix} 2 \\ 1 \\ 4 \end{pmatrix} + s \begin{pmatrix} -2 \\ 0 \\ 1 \end{pmatrix}$ and $\mathbf{r} = \begin{pmatrix} 1 \\ 1 \\ 1 \end{pmatrix} + s \begin{pmatrix} 1 \\ 1 \\ 3 \end{pmatrix}$

c $\frac{x-3}{-1} = \frac{2-y}{3} = \frac{z-4}{2}$ and $\frac{x-1}{2} = \frac{y-2}{-2} = z-2$

14. Find the point of intersection of the lines:

a $\frac{x-5}{-2} = y-10 = \frac{z-9}{12}$ and $x = 4, \frac{y-9}{-2} = \frac{z+9}{6}$

b $\frac{2x-1}{3} = \frac{y+5}{3} = \frac{z-1}{-2}$ and $\frac{2-x}{4} = \frac{y+3}{2} = \frac{4-2z}{1}$

15. Find the Cartesian form of the lines with parametric equation given by:

L : $x = \lambda, y = 2\lambda + 2, z = 5\lambda$ and M : $x = 2\mu - 1, y = -1 + 3\mu, z = 1 - 2\mu$

a Find the point of intersection of these two lines.

b Find the acute angle between these two lines.

c Find the coordinates of the point where: **i** L cuts the x - y plane. **ii** M cuts the y - z plane.

16. Show that the lines $\frac{x-2}{3} = \frac{y-3}{-2} = \frac{z+1}{5}$ and $\frac{x-5}{-3} = \frac{y-1}{2} = \frac{z-4}{-5}$ are coincident.

17. Show that the lines $\frac{x-1}{-3} = y-2 = \frac{7-z}{11}$ and $\frac{x-2}{3} = \frac{y+1}{8} = \frac{z-4}{-7}$ are skew.

18. Find the equation of the line passing through the origin and the point of intersection of the lines with equations

$$x-2 = \frac{y-1}{4}, z = 3 \quad \text{and} \quad \frac{x-6}{2} = y-10 = z-4 .$$

19. The lines $\frac{x}{3} = \frac{y-2}{4} = 3+z$ and $x = y = \frac{z-1}{2k}$, $k \in \mathbb{R} \setminus \{0\}$ meet at right angles. Find k .

20. Consider the lines L : $x = 0, \frac{y-3}{2} = z+1$ and M : $\frac{x}{4} = \frac{y}{3} = \frac{z-10}{-1}$.

Find, correct to the nearest degree, the angle between the lines L and M.

21. Find the value(s) of k , such that the lines $\frac{x-2}{k} = \frac{y}{2} = \frac{3-z}{3}$ and $\frac{x}{k-1} = \frac{y+2}{3} = \frac{z}{4}$ are perpendicular.

22. Find a direction vector of the line that is perpendicular to both $\frac{x+1}{3} = \frac{y+1}{8} = \frac{z+1}{12}$ and $\frac{1-2x}{-4} = \frac{3y+1}{9} = \frac{z}{6}$.

23. Are the lines $\frac{x-1}{5} = \frac{y+2}{4} = \frac{4-z}{3}$ and $\frac{x+2}{3} = \frac{y+7}{2} = \frac{2-z}{3}$ parallel? Find the point of intersection of these lines.

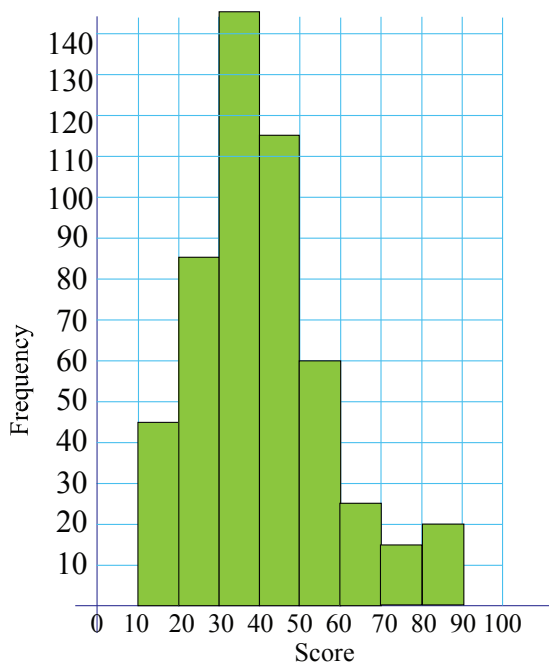
What do you conclude?

Exercise 5.1.1

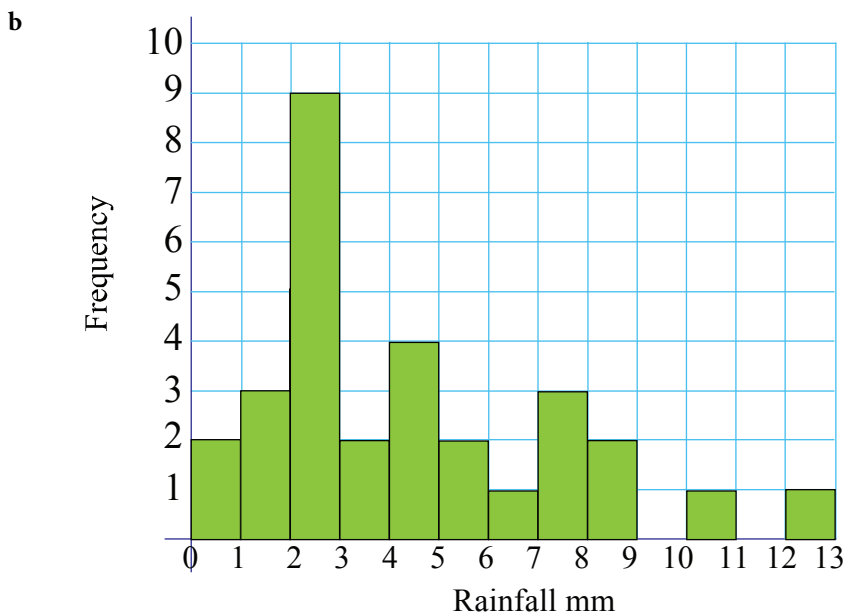
- 1 a i 14 500 ii 2 000 b 305 (304.5)
- 2 Sample size is large but may be biased by factors such as the location of the catch. Population estimate is 5000.
- 3 a i 1500 ii 120 b 100 c 1000
- 4 a, c numerical; b, d, e categorical
- 5 a, d discrete; b, c, e continuous

Exercise 5.1.2

- 1 a 53 b 34% c 9.4%
- 2 b 74% c 80

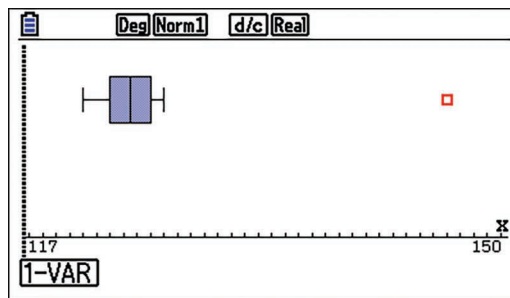
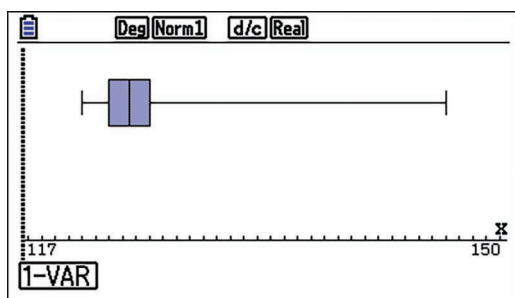


- 3 a Continuous



Exercise 5.1.3

1.



2. The value 27.36 has probably been mis-recorded and should have been 2.736. It should be discarded. Bearing in mind the errors evident in the data, the result should be reported as 2.73 gm/cc as the mean is 2.734.
3. There is no correct answer. Most donations are \$5 to \$25 with the median \$15.

Exercise 5.2.1

- 1 Mode = 236–238 g; Mean = 234 g; Median = 235 g
- 2 Mode = 1.8–1.9 g; Mean = 1.69 g; Median = 1.80 g
- 3 Set A Mode = 29.1; Mean = 27.2; Median = 27.85
Set B Mode = 9; Mean = 26.6; Median = 9.
- 4 **a** \$27 522 **b** \$21 025 **c** Median
- 5 **a** \$233 300 **b** \$169 000 **c** Median
- 6 **a** 14.375 **b** 14.354
- 7 *b* A: 49.56 hr, B: 56.21 hr **c** Type B
- 8 12.22 cards
- 9 $a = 16, b = 3$
- 10 **b** 6010

Exercise 5.2.2

- 1 **a** Sample A Mean = 1.99 kg; Sample B Mean = 2.00 kg
b Sample A Sample std = 0.0552 kg; Sample B Sample std = 0.1877 kg
c Sample A Population std = 0.0547 kg; Sample B Population std = 0.1858 kg
- 2 **a** 16.4 **b** 6.83
- 3 Mean = 49.97; Std = 1.365
- 4 **a** \$84.67 **b** \$148
- 5 **a** 2.35 **b** 1.25
- 6 **a** \$232 **b** \$83
- 7 **c** 40
- 8 **a i** 20.17 **ii** 7.29 **b** 31 **c** 20.76
- 9 **a** 20 **b** $x + 1$
- 10 $\frac{y}{x + y}$

Exercise 5.3.1

- 1 a Med = 5, Q1 = 2, Q3 = 7, IQR = 5 b Med = 3.3, Q1 = 2.8, Q3 = 5.1, IQR = 2.3
 c Med = 163.5, Q1 = 143, Q3 = 182, IQR = 39
 d Med = 1.055, Q1 = 0.46, Q3 = 1.67, IQR = 1.21
 e Med = 5143.5, Q1 = 2046, Q3 = 6252, IQR = 4206
- 2 a Med = 3, Q1 = 2, Q3 = 4, IQR = 2 b Med = 13, Q1 = 12, Q3 = 13, IQR = 1
 c Med = 2, Q1 = 2, Q3 = 2.5, IQR = 0.5 d Med = 40, Q1 = 30, Q3 = 50, IQR = 20
 e Med = 20, Q1 = 15, Q3 = 22.5, IQR = 7.5
- 3 a \$84.67 b \$147.8 c \$11 d Q1 = \$4.50, Q3 = \$65 IQR = \$60.50
 e Median and IQR.
- 4 a 2.35 b 1.25 c 2 d Q1 = 1, Q3 = 3, IQR = 2
- 5 a \$232 b \$83 c-e Med = \$220, Q1 = \$160, Q3 = \$310, IQR = \$150
6. Med = 14, Q1 = 10, Q3 = 19, IQR = 9
7. a 61% b 86% c 2 d 4
 e 5 f 8

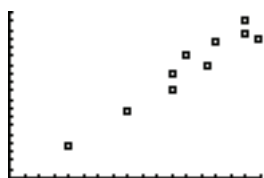
The cumulative distribution is:

| Number of Errors | Number of Patients | Cumulative |
|------------------|--------------------|------------|
| 0 | 1 | 1 |
| 1 | 3 | 4 |
| 2 | 11 | 15 |
| 3 | 28 | 43 |
| 4 | 34 | 77 |
| 5 | 14 | 91 |
| 6 | 15 | 106 |
| 7 | 23 | 129 |
| 8 | 11 | 140 |
| 9 | 7 | 147 |
| 10 | 2 | 149 |
| 11 | 1 | 150 |

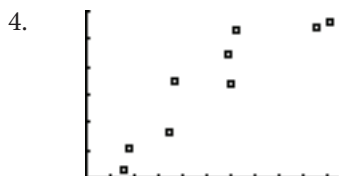

Exercise 5.4.1

- 1 a i Increasing, positive ii approx. linear iii mild (to weak)
 b i No association ii–iii 0
 c i Increasing, positive ii linear iii very strong
 d i Increasing, positive ii square root
 iii mild (strength not appropriate as it is a non-linear relationship!)
 e i Decreasing, negative ii exponential
 iii mild (strength not appropriate as it is a non-linear relationship!)
 f i Decreasing ii approx. linear iii mild

- 2 a b Positive association, linear, strength: very strong



3. a b Positive association, linear, strength: very strong



Data displays a strong positive association. Increase in lead content can be attributed to increase in traffic flow.

Exercise 5.4.2

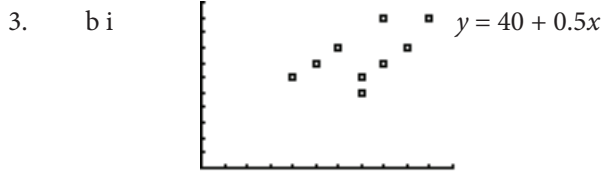
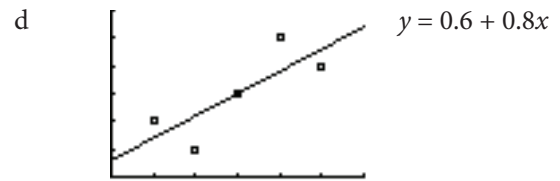
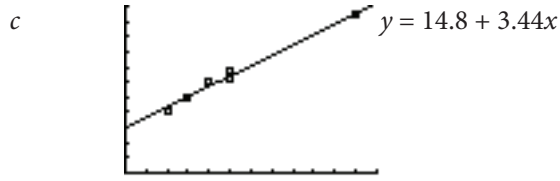
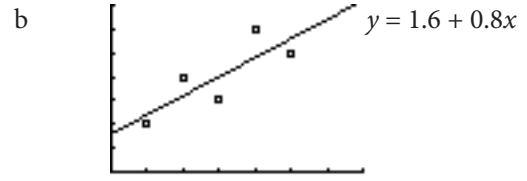
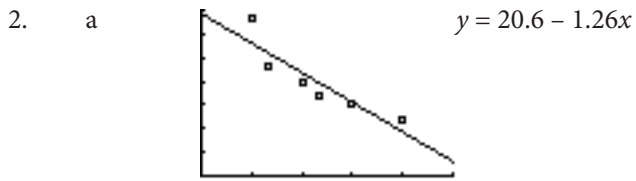
Lines of best fit will vary depending on how they are drawn/calculated.

1. a Line of best fit: $y = -1.33x + 21.11$

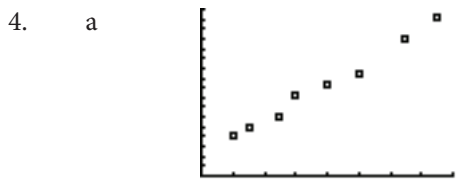


- b Line of best fit: $y = 0.64x + 6.94$





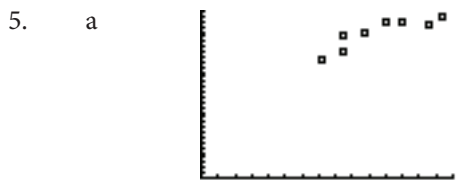
ii $x = 24.1 + 0.61y$



b Based on the scatter diagram, there is a definite linear relationship. Therefore, owner is justified.

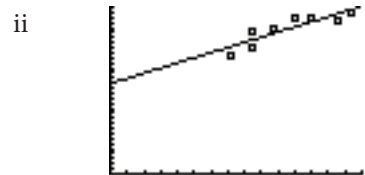
c $C = 4.19 + 1.82w$ d i 20.57, i.e. 21 ii 95.19, i.e. 95

iii From ii, serving 95 people per hour is unrealistic.

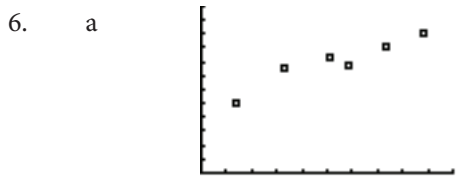


b Scatter diagram shows a linear relationship.

c i $y = 89.50 + 1.02x$

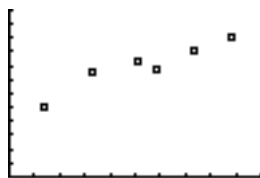


d i 135.6 ii 176.5 iii $x = 85$ is a fair way out from the set of values used to obtain the regression line.



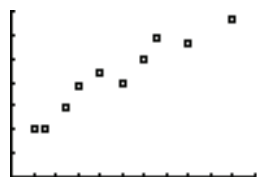
b Scatter diagram shows a linear relationship.

c i $y = 4.74 + 0.6x$ ii




d i 8.63 ii 10.73

7. a



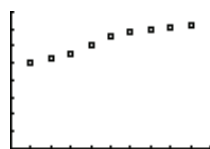
b Strong positive correlation.

c i $y = 2.68x + 16.86$ ii



d i 27.57 ii 57.03

8. a



b Strong +ve c $M = 0.2967T + 48.28$

Exercise 5.5.1

1 a $\frac{2}{5}$ b $\frac{3}{5}$ c $\frac{2}{5}$

2 a $\frac{2}{7}$ b $\frac{5}{7}$

3 a $\frac{5}{26}$ b $\frac{21}{26}$

4 {HH, HT, TH, TT} a $\frac{1}{4}$ b $\frac{3}{4}$

5 {HHH, HHT, HTH, THH, TTT, TTH, THT, HTT} a $\frac{3}{8}$ b $\frac{1}{2}$ c $\frac{1}{4}$

6 a $\frac{2}{9}$ b $\frac{2}{9}$ c $\frac{2}{3}$ d $\frac{1}{3}$

7 a $\frac{1}{2}$ b $\frac{3}{10}$ c $\frac{9}{20}$

8 a $\frac{11}{36}$ b $\frac{1}{18}$ c $\frac{1}{6}$ d $\frac{5}{36}$

9 {GGG, GGB, GBG, BGG, BBB, BBG, BGB, GBB} a $\frac{1}{8}$ b $\frac{3}{8}$ c $\frac{1}{2}$

10 a $\frac{1}{2}$ b $\frac{1}{4}$ c $\frac{1}{4}$

11 a $\frac{3}{8}$ b $\frac{1}{4}$ c $\frac{3}{8}$ d $\frac{3}{4}$

12 a {(1, H), (2, H), (3, H), (4, H), (5, H), (6, H), (1, T), (2, T), (3, T), (4, T), (5, T), (6, T)}
 b $\frac{1}{4}$

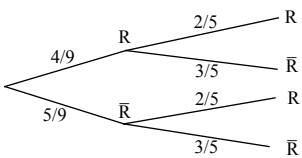
13 a $\frac{1}{216}$ b $\frac{1}{8}$ c $\frac{3}{8}$

Exercise 5.5.2

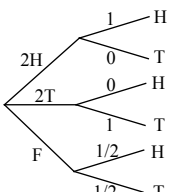
- 1 **a** $\frac{1}{4}$ **b** $\frac{5}{8}$ **c** $\frac{3}{4}$
- 2 **a** $\frac{1}{13}$ **b** $\frac{1}{2}$ **c** $\frac{1}{26}$ **d** $\frac{7}{13}$
- 3 $\frac{9}{26}$
- 4 **a** 1.0 **b** 0.3 **c** 0.5
- 5 **a** 0.65 **b** 0.70 **c** 0.65
- 6 **a** 0.95 **b** 0.05 **c** 0.80
- 7 **a** {TTT,TTH,THT,HTT,HHH,HHT,HTH,THH} **b i** $\frac{3}{8}$ **ii** $\frac{1}{2}$ **iii** $\frac{1}{4}$ **iv** $\frac{3}{8}$
- 8 **a** $\frac{6}{25}$ **b** $\frac{6}{25}$ **c** $\frac{13}{25}$
- 9 **b** $\frac{3}{4}$ **c** $\frac{1}{2}$ **d** $\frac{1}{6}$ **e** $\frac{7}{12}$
- 10 **a** $\frac{1}{4}$ **b** $\frac{1}{2}$ **c** $\frac{8}{13}$ **d** $\frac{7}{13}$
- 11 **a** 0.1399 **b i** 0.8797 **ii** 0.6
- 12 **b** $\frac{4}{15}$ **c** $\frac{4}{15}$ **d** $\frac{11}{15}$

Exercise 5.6.1

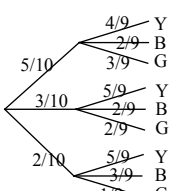
- 1 a 0.7 b 0.75 c 0.50 d 0.5
- 2 a 0.5 b 0.83 c 0.10 d 0.90

3 a  b $\frac{8}{45}$ c $\frac{22}{45}$ d $\frac{6}{11}$

- 4 a 0.5 b 0.30 c 0.25

5 a  b $\frac{1}{2}$ c $\frac{2}{3}$

6 $\frac{1}{3}$

7 a  b $\frac{31}{45}$ c $\frac{2}{9}$

8 $\frac{2}{3}$

- 9 a 0.88 b 0.42 c 0.6 d 0.28
- 10 a 0.33 b 0.49 c 0.82 d 0.551
- 11 a 0.22 b 0.985 c 0.8629
- 12 a 0.44 b 0.733
- 14 a 0.512 b 0.128 c 0.8571
- 15 a 0.2625 b 0.75 c 0.4875 d 0.7123
- 16 a 0.027 b 0.441 c 0.453

Exercise 5.6.2

- 1 a 0.042 b 0.7143
- 2 a 0.4667 b 0.3868
- 3 a $\frac{5}{7}$ b $\frac{9}{13}$

4 $\frac{5}{9}$

5 **bi** $\frac{1}{40}$ **ii** 0.2

6 **ai** $\frac{2N-m}{2N}$ **ii** $\frac{2(N-m)}{2N-m}$ **b** $\frac{m}{m+(N-m)2^n}$

7 $\frac{9}{19}$

8 **a** 0.07 **b** 0.3429 **c** 0.30 **d** 0.0282

9 **a** 0.8008 **b** 0.9767 **c** 0.0003

10 **a** 0.0464 **b** 0.5819 **c** 0.9969

11 $\frac{1}{31}$

12 $\frac{10}{31}$

13 **a** 0.8 **b** 0.005

14 $\frac{10}{21}$

15 M_1

16 **a** 0.57 **b** $\frac{18}{57}$

Exercise 5.6.3

1 **a** $\frac{5}{126}$ **b** $\frac{5}{18}$ **c** $\frac{1}{126}$

2 **a** $\frac{1}{5}$ **b** $\frac{1}{10}$ **c** $\frac{2}{5}$ **d** $\frac{3}{5}$

3 **a** $\frac{72}{5525}$ **b** $\frac{1}{5525}$ **c** $\frac{1}{1201}$

4 $\frac{2}{5}$

5 **a** $\frac{63}{143}$ **b** $\frac{133}{143}$

6 **a** $\frac{5}{12}$ **b** $\frac{5}{33}$ **c** $\frac{5}{6}$

7 $\frac{3}{11}$

8 a $\frac{4}{13}$ b $\frac{9}{13}$

9 a $\frac{67}{91}$ b $\frac{22}{91}$

10 a $\frac{1}{4}$ b $\frac{1}{28}$ c $\frac{5}{14}$

11 a $\frac{5}{28}$ b $\frac{1}{28}$

12 $\frac{6}{13}$

13 a $\frac{1}{6}$ b $\frac{1}{4}$

14 a $\frac{1}{210}$ b $\frac{7}{9}$

15 a $\frac{7}{1938}$ b 0.6

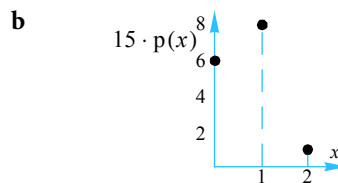
16 $\frac{11}{21}$

Exercise 5.7.1

1 0.3

2 a 0.1 bi 0.2 ii 0.7

3 a $p(0) = \frac{6}{15}, p(1) = \frac{8}{15}, p(2) = \frac{1}{15}$



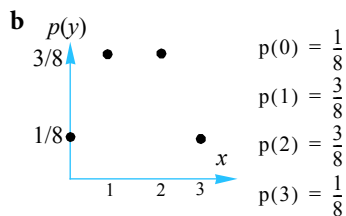
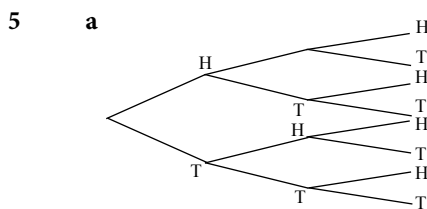
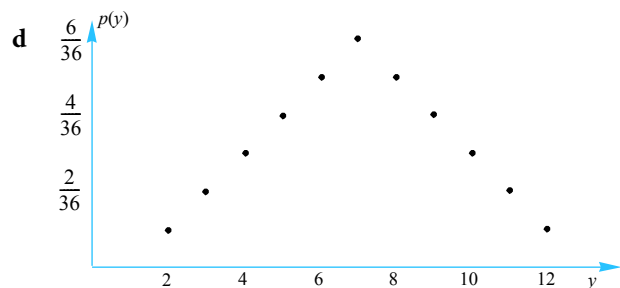
c $\frac{14}{15}$

4 a {2, 3, 4, 5, 6, 7, 8, 9, 10, 11, 12}

b

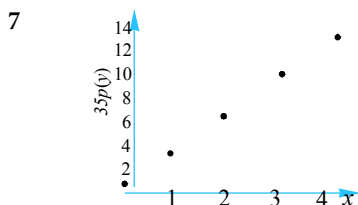
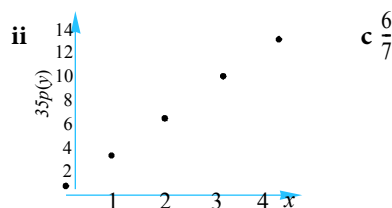
| x | 2 | 3 | 4 | 5 | 6 | 7 | 8 | 9 | 10 | 11 | 12 |
|------|----------------|----------------|----------------|----------------|----------------|----------------|----------------|----------------|----------------|----------------|----------------|
| p(x) | $\frac{1}{36}$ | $\frac{2}{36}$ | $\frac{3}{36}$ | $\frac{4}{36}$ | $\frac{5}{36}$ | $\frac{6}{36}$ | $\frac{5}{36}$ | $\frac{4}{36}$ | $\frac{3}{36}$ | $\frac{2}{36}$ | $\frac{1}{36}$ |

c $\frac{5}{36}$



c $\frac{4}{7}$

6 a $\frac{1}{35}$ bi $p(0) = \frac{1}{35}$ $p(1) = \frac{4}{35}$
 $p(2) = \frac{7}{35}$ $p(3) = \frac{10}{35}$
 $p(4) = \frac{13}{35}$



a i 0.9048 ii 0.09048 b 0.0002

8 0.3712

9 a $p(0) = \frac{11}{30}, p(-1) = \frac{1}{2}, p(3) = \frac{2}{15}$ b i $\frac{11}{30}$ ii $\frac{13}{15}$

10

| | | | |
|------------|----------------|----------------|----------------|
| n | 0 | 1 | 2 |
| $P(N = n)$ | $\frac{6}{15}$ | $\frac{8}{15}$ | $\frac{1}{15}$ |

11

a

| | | | | |
|------------|---------------|---------------|---------------|---------------|
| n | 1 | 2 | 3 | 4 |
| $P(N = n)$ | $\frac{1}{4}$ | $\frac{1}{4}$ | $\frac{1}{4}$ | $\frac{1}{4}$ |

b

| | | | | | | | |
|------------|----------------|----------------|----------------|----------------|----------------|----------------|----------------|
| s | 2 | 3 | 4 | 5 | 6 | 7 | 8 |
| $P(S = s)$ | $\frac{1}{16}$ | $\frac{2}{16}$ | $\frac{3}{16}$ | $\frac{4}{16}$ | $\frac{3}{16}$ | $\frac{2}{16}$ | $\frac{1}{16}$ |

12 a 0.81 b 0.2439

Exercise 5.7.2

1 a 2.8 b 1.86

2 a 3 b i 1 ii 1 c i 6 ii 0.4

3 a i 1.3 ii 2.5 iii -0.1

b i 0.9 ii 7.29 c i $\frac{31}{60}$ ii 0.3222

4 $\mu = \frac{2}{3}, \sigma^2 = 0.3556$

5 a 7 b 5.8333

6 $np = 3 \times \frac{1}{2} = 1.5$

7 a $\frac{1}{25}$ b 2.8 c 1.166

8 a 0.1 b i 0.3 ii 1

c i 0 ii 1 iii 2

9 5.56

10 $p(0) = \frac{35}{120}, p(1) = \frac{63}{120}, p(2) = \frac{21}{120}, p(3) = \frac{1}{120}$ b i 0.9 ii 0.49

c $W = 3N - 3, E(W) = -0.3$

11 a \$ -1.00 b both the same

12 a 50 b 18 c 2

13 a 11 b $\frac{\sqrt{3}}{3}$ c -4

14 a 0.75 b 0.6339

15 a $E(X) = 1 - 2p$, $\text{Var}(X) = 4p(1 - p)$ b i $n(1 - 2p)$ ii $4np(1 - p)$

16 a

| | | | |
|----------|-----------------|-----------------|----------------|
| n | 0 | 1 | 2 |
| P(N = n) | $\frac{28}{45}$ | $\frac{16}{45}$ | $\frac{1}{45}$ |

b $W = 21.43$

17 a $a = \frac{2}{3}$, $0 \leq b \leq 1$ b $E(X) = \frac{b+1}{3}$, $\text{Var}(X) = \frac{1}{9}(2 + 7b - b^2)$

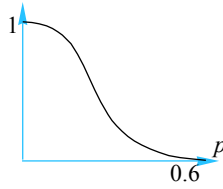
18 a $E(X) = 4$, $\text{Var}(X) = 20$

Exercise 5.8.1

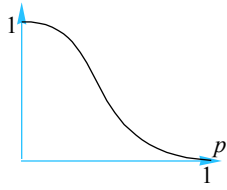
- 1 a 0.2322 b 0.1737 c 0.5941
- 2 a 0.3292 b 0.8683 c 0.2099 d 0.1317
- 3 a 0.1526 b 0.4812 c 0.5678
- 4 a 0.7738 b 3.125×10^{-7} c 0.9988 d 3×10^{-5}
- 5 a 0.2787 b 0.4059
- 6 a 0.2610 b 0.9923
- 7 a 0.2786 b 0.7064 c 0.1061
- 8 a 0.1318 b 0.8484 c 0.054 d 0.326
- 9 a 0.238 b 0.6531 c 0.0027 d 0.726
- e 12.86
- 10 a 0.003 b 0.2734 c 0.6367 d 0.648
- 11 a 0.3125 b 0.0156 c 0.3438 d 3
- 12 a 0.2785 b 0.3417 c 120
- 13 a 0.0331 b 0.565
- 14 a 0.4305 b 0.61 c \$720 d 0.2059
- 15 a i 1.4 ii 1 iii 1.058 iv 0.0795
v 0.0047
b i 3.04 ii 3 iii 1.373 iv 0.2670
v 0.1390
- 16 38.23
- 19 a i 0.1074 ii 7.9×10^{-4} iii 0.3758 b at least 6
- 20 a $\frac{4}{3}$ b $\frac{10}{9}$ c $\frac{1}{6}$ d $\frac{5}{288}$
- 21 a 20 b 3.4641
- 22 a 102.6 b 0.000254
- 23 a i 6 ii 2.4 b i 6 ii 3.6
- 24 0.1797
- 25 1.6, 1.472
- 26 a 0.1841 b \$11.93
- 27 a \$8 b \$160

28 a 0.0702

c



29 b



30 b 0.8035

c

39.3

31 a
$$\frac{np - np(1-p)^{n-1}}{1 - (1-p)^n - np(1-p)^{n-1}}, 0 < p < 1$$

Exercise 5.9.1

| | | | | | | | | |
|---|----------|--------|----------|--------|----------|--------|----------|--------|
| 1 | a | 0.6915 | b | 0.9671 | c | 0.9474 | d | 0.9965 |
| | e | 0.9756 | f | 0.0054 | | | | |
| 2 | a | 0.0360 | b | 0.3759 | c | 0.0623 | d | 0.0564 |
| | e | 0.0111 | | | | | | |

Exercise 5.9.2

| | | | | | | | | |
|----|----------|---------|----------|---------|----------|--------|----------|--------|
| 1 | a | 0.0228 | b | 0.9332 | c | 0.3085 | d | 0.8849 |
| | e | 0.0668 | f | 0.9772 | | | | |
| 2 | a | 0.9772 | b | 0.0668 | c | 0.6915 | d | 0.1151 |
| | e | 0.9332 | f | 0.0228 | | | | |
| 3 | a | 0.3413 | b | 0.1359 | c | 0.0489 | | |
| 4 | a | 0.6827 | b | 0.1359 | c | 0.3934 | | |
| 5 | a | 0.8413 | b | 0.4332 | c | 0.7734 | | |
| 6 | a | 0.1151 | b | 0.1039 | c | 0.1587 | | |
| 7 | a | 0.1587 | b | 0.6827 | c | 0.1359 | | |
| 8 | a | 0.1908 | b | 0.4754 | c | 16.88 | | |
| 9 | a | 0.1434 | b | 0.6595 | | | | |
| 10 | a | 0.2425 | b | 0.8413 | c | 0.5050 | | |
| 11 | a | -1.2816 | b | 0.2533 | | | | |
| 12 | a | 58.2243 | b | 41.7757 | c | 59.80 | | |
| 13 | | 39.11 | | | | | | |
| 14 | | 9.1660 | | | | | | |
| 15 | | 42% | | | | | | |
| 16 | | 0.7021 | | | | | | |
| 17 | a | 0.2903 | b | 0.4583 | c | 0.2514 | | |
| 18 | | 23% | | | | | | |
| 19 | | 0.5 | | | | | | |
| 20 | | 11% | | | | | | |
| 21 | | 5% | | | | | | |
| 22 | | 14% | | | | | | |
| 23 | | 1.8 | | | | | | |

24 252

25 0.1517

26 0.3821

27 0.22

28 322

29 0.1545

30 7

31 87

32 **a i** 0.0062 **ii** 0.0478 **iii** 0.9460 **b** 0.0585

33 **a** \$5.11 **b** \$7.39

34 **a** 0.0062 **b i** 0.7887 **ii** 0.0324 **c** \$1472

35 **a** $\mu = 66.86, \sigma = 10.25$ **b** \$0.38S

36 **a** $\mu = 37.2, \sigma = 28.2$ **b** 20 (19.9)

37 **a i** 0.3446 **ii** 0.2347 **b i** 0.3339 **ii** 0.3852

c 0.9995

Exercise 5.2.1

6. For the figures given below, calculate the mean from the original data.

| | | | | | | | |
|---|----|----|----|---|----|----|----|
| 5 | 16 | 15 | 17 | 9 | 16 | 19 | 15 |
| 6 | 17 | 10 | 16 | 8 | 13 | 13 | 19 |
| 7 | 16 | 18 | 18 | 8 | 18 | 19 | 18 |
| 6 | 17 | 19 | 16 | 7 | 13 | 17 | 19 |
| 9 | 14 | 17 | 19 | 9 | 16 | 17 | 19 |
| 8 | 18 | 16 | 15 | 8 | 18 | 16 | 15 |

- a Use the frequency table method with class intervals 4–6, 7–9 etc. to calculate the mean of the data.
- b Use the frequency table method with class intervals 1–5, 6–10 etc. to calculate the mean of the data.

7. The failure times for electronic components, labelled A and B, are considered by a manufacturer of computers. The supplier of these components carries out tests on a sample of each type, resulting in the following observations:

Failure times

| Time to failure (hours) | Type A | Type B |
|----------------------------|--------|--------|
| [0, 10[| 15 | 6 |
| [10, 20[| 15 | 7 |
| [20, 30[| 19 | 13 |
| [30, 40[| 19 | 19 |
| [40, 50[| 17 | 33 |
| [50, 60[| 18 | 28 |
| [60, 70[| 16 | 21 |
| [70, 80[| 18 | 23 |
| [80, 90[| 15 | 18 |
| [90, 100[| 13 | 15 |

- a Draw a histogram for each of the data sets.
- b Determine the mean times to failure for each type of component.
- c Which of Type A and Type B would you recommend the computer manufacturer purchase?

8. Weekly sale figures for phone cards at a local store are shown below.

Phone card sale figures

| Number of cards | Number |
|-----------------|--------|
| 0–4 | 10 |
| 5–9 | 13 |
| 10–14 | 9 |
| 15–19 | 14 |
| 20–24 | 8 |

Calculate the mean number of cards that are sold each week at this store.

9. The data set A has a mean of 16 while that of set B has a mean of 20. Calculate the values of a and b .

| | | | | | | | | | | |
|--------|------|----|----|----|----|----|----|----|-----|------|
| Set A: | 15 | 11 | 24 | 18 | 19 | 15 | 14 | 19 | a | $3b$ |
| Set B: | $2a$ | 15 | 25 | 20 | 17 | 18 | 22 | 24 | b | 24 |

10. Tax refunds to the 200 workers from a small town have been allocated according to the following table.

Tax refunds

| Refund | Frequency |
|------------------|-----------|
| [3000, 4000[| 20 |
| [4000, 5000[| 36 |
| [5000, 6000[| 62 |
| [6000, 7000[| 32 |
| [7000, 8000[| 24 |
| [8000, 9000[| 12 |
| [9000, 10,000[| 8 |
| [10,000, 11,000[| 6 |

For the table shown draw its: **i** histogram **ii** cumulative frequency graph.

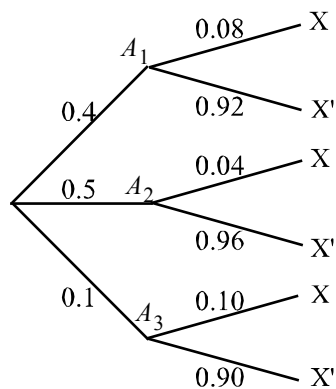
Calculate the mean tax refunds for this town.

Exercise 5.6.1

15. Dale and Kritt are trying to solve a physics problem. The chances of solving the problem are Dale—65% and Kritt—75%. Find the probability that:
- a only Kritt solves the problem.
 - b Kritt solves the problem.
 - c both solve the problem.
 - d Dale solves the problem given that the problem was solved.
16. A coin is weighted in such a way that there is a 70% chance of it landing heads. The coin is tossed three times in succession. Find the probability of observing:
- a three tails.
 - b two heads.
 - c two heads given that at least one head showed up.

Exercise 5.6.2

11. For the tree diagram shown below, determine the probability $P(A_2|X)$.



12. Three factory employees, A, B and C, produce 40%, 30% and 30% of the total number of footballs in their division. Of these footballs, employee A produces 5% that are defective, employee B produces 6% that are defective and employee C produces 8% defectives.

During an inspection round, a randomly selected football is found to be defective. What is the probability that employee A produced it?

13. Electrical components are checked for faults regularly at the CAMCO factory. A particular component is found to be non-defective 80% of the time, have a minor defect 12% of the time and a severe defect 8% of the time. Production levels for this component are such that 95% of the non-defective components are used for client X, 30% of the components that have a minor defect are used for client X and 5% of those that are severely defective will be used for client X.

- a Calculate the probability that a randomly selected component will be used for client X.
- b Calculate the probability that a component used for client X will have a severe defect.

14. WeCare Insurers have three types of motorcycle insurance policies, the low risk (L), moderate risk (M) and high risk (H) policies. The ratio of L to M to H policy holders is found to be 5:3:2. The respective probabilities of filing a claim by L, M and H policyholders is found to be 10%, 20% and 50% respectively.

Calculate the probability that a policyholder who files a claim this year was a high-risk policyholder.

15. Machines M_1 , M_2 and M_3 produce 35%, 45% and 20% of the total number of bolts produced at a steel factory. It is known that each machine produces defective items. The defective items are produced by M_1 in 2% of the time, by M_2 1% of the time and by M_3 3% of the time.

A randomly chosen item is found to be defective. Which machine is most likely to have produced it?

16. Commuters arrive at a central station on three types of trains. Sixty per cent arrive using the Express, 30% are on the Fast train and the rest arrive using the Standard train. Of those commuters arriving on the Express, half are for business-related matters. Of those arriving on the Fast train, 60% are on business-related matters and, of those coming on the Standard, 90% are on business-related matters.

Find the probability that a randomly selected commuter arriving at the station:

- a is travelling for business-related matters.
- b arrived using the Express train given that the person came for business-related matters.

Exercise 5.6.3

11. Eight people of different heights are to be seated in a row. The shortest and tallest in this group are not seated at either end. What is the probability that:
- the tallest and shortest persons are sitting next to each other?
 - there is one person sitting between the tallest and shortest?
12. A committee of four is to be selected from a group of five boys and three girls. Find the probability that the committee consists of exactly two girls given that it contains at least one girl.
13. A bag contains 6 red marbles and 4 white marbles. Three marbles are randomly selected.
- Find the probability that:
 - all three marbles are red.
 - all three marbles are red given that at least two of the marbles are red.
14. Four maths books, two chemistry books and three biology books are arranged in a row.
- What is the probability that the books are grouped together in their subjects?
 - What is the probability that the chemistry books are not grouped?
15. A contestant on the game show “A Diamond for your Wife!” gets to select 5 diamonds from a box. The box contains 20 diamonds of which 8 are fakes.
- Find the probability that the contestant will not bring a real diamond home for his wife.
- Regardless of how many real diamonds the contestant has after his selection, he can only take one home to his wife. A second contestant then gets to select from the remaining 15 diamonds in the box, but only gets to select one diamond.
- What is the probability that this second contestant selects a real diamond?
16. Light bulbs are sold in packs of 10. A quality inspector selects two bulbs at random without replacement. If both bulbs are defective the pack is rejected. If neither are defective the pack is accepted. If one of the bulbs is defective the inspector selects two more from the bulbs remaining in the pack and rejects the pack if one or both are defective. What are the chances that a pack containing 4 defective bulbs will in fact be accepted?

Exercise 5.7.1

11. A box contains four balls numbered 1 to 4. A ball is selected at random from the box and its number is noted.

a If the random variable X denotes the number on the ball, find the probability distribution of X .

After the ball is placed back into the box, a second ball is randomly selected.

b If the random variable S denotes the sum of the numbers shown on the balls after the second draw, find the probability distribution of S .

12. A probability distribution function for the random variable X is defined by:

$$P(X = x) = k \times (0.9)^x, x = 0, 1, 2, \dots$$

Find: **a** $P(X \geq 2)$.

b $P(1 \leq X < 4)$.

Exercise 5.7.2

- 16 A game is played by selecting coloured discs from a box. The box initially contains two red and eight blue discs. Tom pays \$10.00 to participate in the game. Each time Tom participates he selects two discs. The winnings are governed by the probability distribution shown below, where the random variable N is the number of red discs selected.

| | | | |
|------------|-----|--------|---------|
| n | 0 | 1 | 2 |
| Winnings | \$0 | \$ W | \$ $5W$ |
| $P(N = n)$ | | | |

- a Complete the table.
- b For what value of W will the game be fair?
17. A random variable X has the following probability distribution:

| | | | |
|------------|-----|----------------------|----------------|
| x | 0 | 1 | 2 |
| $P(X = x)$ | a | $\frac{1}{3}(1 - b)$ | $\frac{1}{3}b$ |

- a What values may a and b take?
- b Express, in terms of a and b : **i** $E(X)$ **ii** $Var(X)$.
18. a Find the mean and variance of the probability distribution defined by:
- $P(Z = z) = k(0.8)^z, z = 0, 1, 2, \dots$
- bi Show $P(X = x) = p \times (1 - p)^x, x = 0, 1, 2, \dots$ defines a probability distribution.
- ii Show $E(X) = \frac{1-p}{p}$.
- iii Show $Var(X) = \frac{1-p}{p^2}$.

Exercise 5.8.1

16. In a suburb, it is known that 40% of the population are blue-collar workers. A delegation of one hundred volunteers are each asked to sample 10 people in order to determine if they are blue-collar workers. The town has been divided into 100 regions so that there is no possibility of doubling up (i.e. each worker is allocated one region). How many of these volunteers would you expect to report that there were fewer than 4 blue-collar workers?
17. Show that if $X \sim B(n, p)$, then:

$$P(X = x + 1) = \left(\frac{n-x}{x+1}\right)\left(\frac{p}{1-p}\right)P(X = x), \quad x = 0, 1, 2, \dots, n-1$$
18. Show that if $X \sim B(n, p)$, then:
 a $E(X) = np$. b $Var(X) = np(1-p)$.
19. Mifumi has ten pots labelled one to ten. Each pot and its content can be considered to be identical in every way. Mifumi plants a seed in each pot, such that each seed has a germinating probability of 0.8.
 a Find the probability that:
 i all the seeds will germinate.
 ii exactly three seeds will germinate.
 iii more than eight seeds germinate.
 b How many pots must Mifumi use to be 99.99% sure to obtain at least one flower?
20. A fair die is rolled eight times. If the random variable X denotes the number of fives observed, find:
 a $E(X)$. b $Var(X)$. c $E\left(\frac{1}{8}X\right)$. d $Var\left(\frac{1}{8}X\right)$.
21. A bag contains 5 balls of which 2 are red. A ball is selected at random. Its colour is noted and then it is replaced in the bag. This process is carried out 50 times. Find:
 a the mean number of red balls selected.
 b the standard deviation of the number of red balls selected.
22. The random variable X is $B(n, p)$ distributed such that $\mu = 9$ and $\sigma^2 = 3.6$. Find:
 a $E(X^2 + 2X)$. b $P(X = 2)$.
23. a If $X \sim Bin(10, 0.6)$, find: i $E(X)$. ii $Var(X)$.
 b If $X \sim Bin(15, 0.4)$, find: i $E(X)$. ii $Var(X)$.
24. The random variable X has a binomial distribution such that $E(X) = 12$ and $Var(X) = 4.8$. Find $P(X = 12)$.

25. Metallic parts produced by an automated machine have some variation in their size. If the size exceeds a set threshold, the part is labelled as defective. The probability that a part is defective is 0.08. A random sample of 20 parts is taken from the day's production. If X denotes the number of defective parts in the sample, find its mean and variance.
26. Quality control for the manufacturing of bolts is carried out by taking a random sample of 15 bolts from a batch of 10,000. Empirical data shows that 10% of bolts are found to be defective. If three or more defectives are found in the sample, that particular batch is rejected.
- Find the probability that a batch is rejected.
 - The cost to process the batch of 10,000 bolts is \$20.00. Each batch is then sold for \$38.00, or it is sold as scrap for \$5.00 if the batch is rejected. Find the expected profit per batch.

27. In a shooting competition, a competitor knows (that on average) she will hit the bulls-eye on three out of every five attempts. If the competitor hits the bulls-eye she receives \$10.00.

However, if the competitor misses the bulls-eye but still hits the target region she only receives \$5.00.

- What can the competitor expect in winnings on any one attempt at the target?
 - How much can the competitor expect to win after 20 attempts?
28. A company manufactures bolts which are packed in batches of 10,000. The manufacturer operates a simple sampling scheme whereby a random sample of 10 is taken from each batch. If the manufacturer finds that there are fewer than 3 faulty bolts the batch is allowed to be shipped out. Otherwise, the whole batch is rejected and reprocessed.
- If 10% of all bolts produced are known to be defective, find the proportion of batches that will be reprocessed.
 - Show that if $100p\%$ of bolts are known to be defective, then $P(\text{Batch is accepted}) = (1 - p)^8(1 + 8p + 36p^2)$, $0 \leq p \leq 1$
 - Using a graphics calculator, sketch the graph of $P(\text{'Batch is accepted'})$ versus p .

Describe the behaviour of this curve.

29. Large batches of screws are produced by TWIST'N'TURN Manufacturers Ltd. Each batch consists of N screws and has a proportion p of defectives. It is decided to carry out an inspection of the product, by selecting 4 screws at random and accepting the batch if there is no more than one defective, otherwise the batch is rejected.
- Show that $P(\text{Accepting any batch}) = (1 - p)^3(1 + 3p)$.
 - Sketch a graph showing the relationship between the probability of accepting a batch and p (the proportion of defectives).

30. A quality control process for a particular electrical item is set up as follows:

A random sample of 20 items is selected. If there is no more than one faulty item the whole batch is accepted. If there are more than two faulty items the batch is rejected. If there are exactly two faulty items, a second sample of 20 items is selected from the same batch and is accepted only if this second sample contains no defective items.

Let p be the proportion of defectives in a batch.

- Show that the probability, $\Phi(p)$, that a batch is accepted is given by:

$$\Phi(p) = (1 - p)^{19}[1 + 19p + 190p^2(1 - p)^{19}], 0 \leq p \leq 1.$$

- b Find the probability of accepting this batch if it is known that 5% of all items are defective.
- c If 200 such batches are produced each day, find an estimate of the number of batches that can be expected to be rejected on any one day.

Challenging question!

31. Given that the random variable X denotes the number of successes in n Bernoulli trials, with probability of success on any given trial represented by p :
- a find $E(X|X \geq 2)$.
 - b show that $\sigma \leq \frac{1}{2}\sqrt{n}$.

Exercise 5.9.2

1. If Z is a standard normal random variable, find:

c $p(Z \geq 0.5)$ d $p(Z \leq 1.2)$ e $p(Z \geq 1.5)$ f $p(Z \leq 2)$

2. If Z is a standard normal random variable, find:

c $p(Z \geq -0.5)$ d $p(Z \leq -1.2)$ e $p(Z \geq -1.5)$ f $p(Z \leq -2)$

3. If Z is a standard normal random variable, find:

c $p(1.5 \leq Z < 2.1)$

4. If Z is a standard normal random variable, find:

c $p(-1.5 \leq Z < -0.1)$

5. If X is a normal random variable with mean $\mu = 8$ and variance $\sigma^2 = 4$, find:

c $p(X < 9.5)$

6. If X is a normal random variable with mean $\mu = 100$ and variance $\sigma^2 = 25$, find:

c $p(X < 95)$

7. If X is a normal random variable with mean $\mu = 60$ and standard deviation $\sigma = 5$, find:

c $p(50 \leq X < 55)$

17. For a normal variable, X , $\mu = 196$ and $\sigma = 4.2$. Find:

c $p(193.68 < X < 196.44)$

32. At a Junior track and field meet it is found that the times taken for children aged 14 to sprint the 100 metres race are normally distributed with a mean of 15.6 seconds and standard deviation of 0.24 seconds. Find the probability that the time taken for a 14 year old at the meet to sprint the 100 metres is:

i less than 15 seconds.

ii at least 16 seconds.

iii between 15 and 16 seconds.

On one of the qualifying events, eight children are racing. What is the probability that six of them will take between 15 and 16 seconds to sprint the 100 metres?

33. Rods are manufactured to measure 8 cm. Experience shows that these rods are normally distributed with a mean length of 8.02 cm and a standard deviation of 0.04 cm.

Each rod costs \$5.00 to make and is sold immediately if its length lies between 8.00 cm and 8.04 cm. If its length exceeds 8.04 cm it costs an extra \$1.50 to reduce its length to 8.02 cm. If its length is less than 8.00 cm it is sold as scrap metal for \$1.00.

a What is the average cost per rod?

b What is the average cost per usable rod?

34. The resistance of heating elements produced is normally distributed with mean 50 ohms and standard deviation 4 ohms.
- Find the probability that a randomly selected element has resistance less than 40 ohms.
 - If specifications require that acceptable elements have a resistance between 45 and 55 ohms, find the probability that a randomly selected element satisfies these specifications.
 - A batch containing 10 such elements is tested. What is the probability that exactly 5 of the elements satisfy the specifications?
 - The profit on an acceptable element, i.e. one that satisfies the specifications, is \$2.00, while unacceptable elements result in a loss of \$0.50 per element. If \$ P is the profit on a randomly selected element, find the profit made after producing 1000 elements.
- 35.
- Find the mean and standard deviation of the normal random variable X , given that $P(X < 50) = 0.05$ and $P(X > 80) = 0.1$.
 - Electrical components are mass-produced and have a measure of 'durability' that is normally distributed with mean μ and standard deviation 0.5.

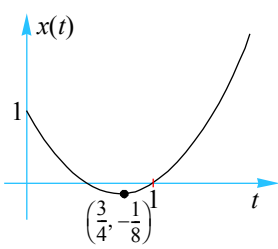
The value of μ can be adjusted at the control room. If the measure of durability of an item scores less than 5, it is classified as defective. Revenue from sales of non-defective items is \$ S per item, while revenue from defective items is set at $\frac{1}{10}S$. Production cost for these components is set at $\frac{1}{10}\mu S$. What is the expected profit per item when μ is set at 6?
36. From one hundred first year students sitting the end-of-year Botanical Studies 101 exam, 46 of them passed while 9 were awarded a high distinction.
- Assuming that the students' scores were normally distributed, determine the mean and variance on this exam if the pass mark was 40 and the minimum score for a high distinction was 75.

Some of the students who failed this exam were allowed to sit a 'make-up' exam in early January of the following year. Of those who failed, the top 50% were allowed to sit the 'make-up' exam.
 - What is the lowest possible score that a student can be awarded in order to qualify for the 'make-up' exam.
37. The heights of men in a particular country are found to be normally distributed with mean 178 cm and a standard deviation of 5 cm. A man is selected at random from this population.
- Find the probability that this person is:
 - at least 180 cm tall
 - between 177 cm and 180 cm tall.
 - Given that the person is at least 180 cm, find the probability that he is:
 - at least 184 cm
 - no taller than 182 cm.
 - If ten such men are randomly selected, what are the chances that at least two of them are at least 176 cm?

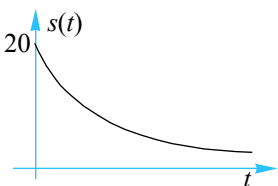
Exercise 6.1.1

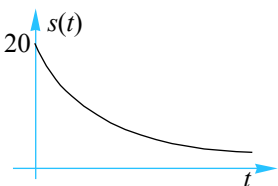
- 1 a $\frac{3}{4}$ b $\frac{3a}{4b}$ c -1 d 1
 e $-\frac{15}{8}$ f 0
- 2 a 4 b 0.2 c 0.027 d 0.433
 e -0.01 f 6.34 g 6.2 h 0
- 3 a 6 m/s b 30 m/s c $11 + 6h + h^2 \text{ m/s}$
- 4 12 m/s
- 5 $8 + 2h$
- 6 -3.49°C/sec
- 7 a $127\pi \text{ cm}^3/\text{cm}$
 b i $19.6667\pi \text{ cm}^3/\text{cm}$ ii $1.9967\pi \text{ cm}^3/\text{cm}$ iii $0.2000\pi \text{ cm}^3/\text{cm}$
- 8 1.115
- 9 a -7.5°C/min b $t = 2 \text{ to } t = 6$
- 10 a 28 m b 14 m/s c average speed
 d 49 m e 49 m/s
- 11 a $\$1160, \$1345.6, \$1560.90, \$1810.64, \$2100.34$ b $\$220.07 \text{ per year}$

Exercise 6.1.2

- 1 a $h + 2$ b $4 + h$ c $\frac{-1}{1+h}$ d $3 - 3h + h^2$
- 2 a 2 b 4 c -1 d 3
- 3 a $2a + h$ b $-(2a + h)$ c $(2a + 2) + h$ d $3a^2 + 1 + 3ah + h^2$
 e $-(3a^2 + 3ah + h^2)$ f $3a^2 - 2a + (3a - 1)h + h^2$
 g $\frac{-2}{a(a+h)}$ h $\frac{1}{(a-1)(a-1+h)}$ i $\frac{1}{\sqrt{a+h} + \sqrt{a}}$
- 4 a  b i 3 ms^{-1} ii 2 ms^{-1} iii 1.2 ms^{-1}
 d Find (limit) as $h \rightarrow 0$ e $4t - 3$

5 a 1; 1 b $2a + h; 2a$ c $3a^2 + 3ah + h^2; 3a^2$ d $4a^3 + 6a^2h + 4ah^2 + h^3; 4a^3$

6 a  b i 20 cm² ii 17.41 cm² iii 2.59



Exercise 6.1.3

1 a 3 b 8 c $\frac{1}{9}$ d 1.39

e -1 f $\frac{17}{16}$

2 a 4.9 m b $4.9(h^2 + 2h)$ m c 9.8 m/s

3 a $8x$ b $10x$ c $12x^2$ d $15x^2$

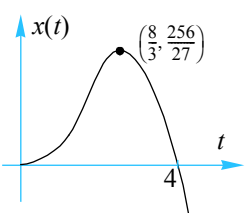
e $16x^3$ f $20x^3$

4 a $4x$ b -1 c $-1 + 3x^2$ d $-x^{-2}$

e $-2(x + 1)^{-2}$ f $0.5x^{-1/2}$

5 a 1 ms^{-1} b $(2 - a) \text{ ms}^{-1}$

6 a  b i 5 ms^{-1} ii 4 ms^{-1} c $8t - 3t^2 \text{ ms}^{-1}$ d $\frac{8}{3} \text{ sec}$



Exercise 6.2.1

- 1 **a** $5x^4$ **b** $9x^8$ **c** $25x^{24}$ **d** $27x^2$
- e** $-28x^6$ **f** $2x^7$ **g** $2x$ **h** $20x^3 + 2$
- i** $-15x^4 + 18x^2 - 1$ **j** $-\frac{4}{3}x^3 + 10$
- k** $9x^2 - 12x$ **l** $3 + \frac{2}{5}x + 4x^3$
-
- 2 **a** $\frac{3}{x^4}$ **b** $\frac{3}{2}\sqrt{x}$ **c** $\frac{5}{2}\sqrt{x^3}$ **d** $\frac{1}{3^3\sqrt{x^2}}$
- e** $\frac{2}{\sqrt{x}}$ **f** $9\sqrt{x}$ **g** $\frac{1}{\sqrt{x}} + \frac{3}{x^2}$ **h** $\frac{3}{2}\sqrt{x} - \frac{1}{2\sqrt{x^3}}$
- i** $\frac{10}{3^3\sqrt{x}} - 9$ **j** $5 - \frac{1}{2\sqrt{x}} - \frac{8}{5x^3}$ **k** $\frac{4}{\sqrt{x}} - \frac{15}{x^6} + \frac{1}{2}$ **l** $-\frac{1}{2\sqrt{x^3}} - \frac{1}{\sqrt{x}} + x^2$
-
- 3 **a** $\frac{3}{2}\sqrt{x} + \frac{1}{\sqrt{x}}$ **b** $4x^3 + 3x^2 - 1$ **c** $3x^2 + 1$ **d** $\frac{1}{x^2}$
- e** $\frac{1}{\sqrt{x^3}}$ **f** $\frac{1}{2} - \frac{1}{4\sqrt{x^3}}$ **g** -7 **h** $2x - \frac{8}{x^3}$
- i** $2x - \frac{2}{x^2} - \frac{4}{x^5}$ **j** $\frac{1}{2}\sqrt{\frac{3}{x}} + \frac{1}{6\sqrt{x^3}}$ **k** $2x - \frac{12}{5}\sqrt[5]{x} + \frac{2}{5^5\sqrt{x^3}}$
- l** $\frac{3}{2\sqrt{x}}\left(\frac{1}{x} + 1\right)\left(\frac{1}{\sqrt{x}} - \sqrt{x}\right)^2$

Exercise 6.2.2

- 1 **a** $48t^3 - \frac{1}{2\sqrt{t}}$ **b** $2n - \frac{2}{n^2} - \frac{4}{n^5}$ **c** $\frac{3}{2}\sqrt{r} + \frac{5}{6\sqrt[6]{r}} - \frac{1}{\sqrt{r}}$
- d** $2\theta - \frac{9}{2}\sqrt{\theta} + 3 - \frac{1}{2\sqrt{\theta}}$ **e** $40 - 3L^2$ **f** $-\frac{100}{v^3} - 1$
- g** $6l^2 + 5$ **h** $2\pi + 8h$
-
- 2 **a** $\frac{8}{3t^3}$ **b** $2\pi r - \frac{20}{r^2}$ **c** $\frac{5}{2}s^{3/2} + \frac{3}{s^2}$
- d** $-\frac{6}{t^4} + \frac{2}{t^3} - \frac{1}{t^2}$ **e** $-\frac{4}{b^2} + \frac{1}{2b^{3/2}}$ **f** $3m^2 - 4m - 4$

Exercise 6.2.3

- 1 **a** $3x^2 - 5x^4 + 2x + 2$ **b** $6x^5 + 10x^4 + 4x^3 - 3x^2 - 2x$
- c** $-\frac{4}{x^5}$ **d** $6x^5 + 8x^3 + 2x$
- 2 **a** $\frac{2}{(x-1)^2}$ **b** $\frac{1}{(x+1)^2}$ **c** $\frac{1-x^2-2x}{(x^2+1)^2}$
- d** $\frac{-(x^4+3x^2+2x)}{(x^3-1)^2}$ **e** $\frac{2x^2+2x}{(2x+1)^2}$ **f** $\frac{1}{(1-2x)^2}$
- 3 **a** $(\sin x + \cos x)e^x$ **b** $\ln x + 1$ **c** $e^x(2x^3 + 6x^2 + 4x + 4)$
- d** $4x^3 \cos x - x^4 \sin x$ **e** $-\sin^2 x + \cos^2 x$ **f** $2x \tan x + (1+x^2)\sec^2 x$
- g** $\frac{4}{x^3}(x \cos x - 2 \sin x)$ **h** $e^x(x \cos x + x \sin x + \sin x)$
- i** $(\ln x + 1 + x \ln x)e^x$
- 4 **a** $\frac{\sin x - x \cos x}{\sin^2 x}$ **b** $\frac{-[\sin x(x+1) + \cos x]}{(x+1)^2}$ **c** $\frac{e^x}{(e^x+1)^2}$
- d** $\frac{2x \cos x - \sin x}{2x\sqrt{x}}$ **e** $\frac{\ln x - 1}{(\ln x)^2}$ **f** $\frac{(x+1) - x \ln x}{x(x+1)^2}$
- g** $\frac{xe^x + 1}{(x+1)^2}$ **h** $\frac{-2}{(\sin x - \cos x)^2}$ **i** $\frac{x^2 - x + 2x \ln x}{(x + \ln x)^2}$
- 5 **a** $-5e^{-5x} + 1$ **b** $4 \cos 4x + 3 \sin 6x$ **c** $-\frac{1}{3}e^{-\frac{1}{3}x} - \frac{1}{x} + 18x$
- d** $25 \cos 5x + 6e^{2x}$ **e** $4 \sec^2 4x + 2e^{2x}$ **f** $-4 \sin(4x) + 3e^{-3x}$
- g** $\frac{4}{4x+1} - 1$ **h** 0 **i** $\frac{1}{2} \cos\left(\frac{x}{2}\right) - 2 \sin 2x$
- j** $7 \cos(7x-2)$ **k** $\frac{1}{2\sqrt{x}} - \frac{1}{x}$ **l** $\frac{1}{x} + 6 \sin 6x$
- 6 **a** $2x \cos x^2 + 2 \sin x \cos x$ **b** $2 \sec^2 2\theta - \frac{\cos \theta}{\sin^2 \theta}$ **c** $\frac{1}{2\sqrt{x}} \cos \sqrt{x}$
- d** $\frac{1}{x^2} \sin\left(\frac{1}{x}\right)$ **e** $-3 \sin \theta \cdot \cos^2 \theta$ **f** $e^x \cos(e^x)$

- g** $\frac{1}{x} \sec^2(\log_e x)$ **h** $\frac{-\sin 2x}{\sqrt{\cos 2x}}$ **i** $-\cos \theta \cdot \sin(\sin \theta)$
- j** $4 \sin \theta \cdot \sec^2 \theta$ **k** $-5 \cos 5x \cdot \csc^2(5x)$ **l** $-6 \csc^2(2x)$
- 7 a** $2e^{2x+1}$ **b** $-6e^{4-3x}$ **c** $-12xe^{4-3x^2}$
- d** $\frac{1}{2} \sqrt{e^x}$ **e** $\frac{1}{2\sqrt{x}} e^{\sqrt{x}}$ **f** e^{2x+4}
- g** $2xe^{2x^2+4}$ **h** $-\frac{6}{e^{3x+1}}$ **i** $(6x-6)e^{3x^2-6x+1}$
- j** $\cos(\theta)e^{\sin \theta}$ **k** $2 \sin(2\theta)e^{-\cos 2\theta}$ **l** $2x$
- m** $\frac{2e^{-x}}{(e^{-x}+1)^2}$ **n** $3(e^x+e^{-x})(e^x-e^{-x})^2$ **o** e^{x+2}
- p** $(-2x+9)e^{-x^2+9x-2}$
- 8 a** $\frac{2x}{x^2+1}$ **b** $\frac{\cos \theta + 1}{\sin \theta + \theta}$ **c** $\frac{e^x + e^{-x}}{e^x - e^{-x}}$ **d** $\frac{1}{x+1}$
- e** $\frac{3}{x}(\ln x)^2$ **f** $\frac{1}{2x\sqrt{\ln x}}$ **g** $\frac{1}{2(x-1)}$ **h** $\frac{-3x^2}{1-x^3}$
- i** $\frac{1}{2(x+2)}$ **j** $\frac{-2 \sin x \cos x}{\cos^2 x + 1}$ **k** $\frac{1}{x} + \cot x$ **l** $\frac{1}{x} + \tan x$
- 9 a** $\ln(x^3+2) + \frac{3x^3}{x^3+2}$ **b** $\frac{\sin^2 x}{2\sqrt{x}} + 2\sqrt{x} \sin x \cos x$ **c** $-\frac{1}{\sqrt{\theta}} \sin \sqrt{\theta} \cdot \cos \sqrt{\theta}$
- d** $(3x^2 - 4x^4)e^{-2x^2+3}$ **e** $-(\ln x + 1) \sin(x \ln x)$ **f** $\frac{1}{x \ln x}$
- g** $\frac{(2x-4) \cdot \sin(x^2) - 2x \cdot \cos(x^2)(x^2-4x)}{(\sin^2 x)^2}$ **h** $\frac{10(\ln(10x+1)-1)}{[\ln(10x+1)]^2}$
- i** $(\cos 2x - 2 \sin 2x)e^{x-1}$ **j** $2x \ln(\sin 4x) + 4x^2 \cot 4x$ **k** $(\cos \sqrt{x} - \sin \sqrt{x}) \frac{1}{2\sqrt{x}} e^{-\sqrt{x}}$
- l** $-(2 \sin x + 2x \cos x) \cdot \sin(2x \sin x)$ **m** $\frac{e^{5x} + 2(9-20x)}{(1-4x)^2}$ **n** $\frac{\cos^2 \theta + \sin^2 \theta \ln(\sin \theta)}{\sin \theta \cos^2 \theta}$

o $\frac{x+2}{2(x+1)\sqrt{x+1}}$

p $\frac{2x^2+2}{\sqrt{x^2+2}}$

q $\frac{10x^3+9x^2+4x+3}{3(x+1)^{2/3}}$

r $\frac{3x^2(3x^3+1)}{2\sqrt{x^3+1}}$

s $\frac{2}{x^2+1} - \frac{1}{x^2} \ln(x^2+1)$

t $\frac{2}{x(x+2)}$

u $\frac{2-x}{2x^2\sqrt{x-1}}$

v $\frac{-x^2+x-9}{\sqrt{x^2+9}} \cdot e^{-x}$

w $\frac{7x^3-12x^2-8}{2\sqrt{2-x}}$

x $nx^{n-1} \ln(x^n-1) + \frac{nx^{2n-1}}{x^n-1}$

10 $x = 1$

11 0

12 0

13 1

14 $-2e$

15 a $\cos^2 x - \sin^2 x$

b $\frac{\pi}{180} \cos x^\circ$

c $-\frac{\pi}{180} \sin x^\circ$

16 b i $2x \sin x \cos x + x^2 \cos^2 x - x^2 \sin^2 x$

ii $e^{-x^3} (2 \cos 2x \ln \cos x - 3x^2 \sin 2x \ln \cos x - \sin 2x \tan x)$

17 a i $-\frac{3}{x} (\ln x)^2$

ii $-\frac{3x^2}{1-x^3}$

b i $-2e^{-2x} \cdot \cos(e^{-2x})$

ii $-2x \cos x^2 \cdot e^{-\sin x^2}$

18 $-\frac{1}{5}k$

19 $x = a, b, \frac{mb+na}{m+n}$

20 $\{\theta: n \tan \theta^m \cdot \tan \theta^n = m \theta^{m-n}\}$

21 a $-4 \csc(4x)$

b $2 \sec(2x) \tan(2x)$

c $3 \cot(3x) \csc(3x)$

d $-3 \sin(3x)$

e $\csc^2\left(\frac{\pi}{4} - x\right)$

f $-2 \sec(2x) \tan(2x)$

22 a $2x \sec(x^2) \tan(x^2)$

b $\sec^2 x$

c $\tan x$

d $-3 \cot^2 x \csc^2 x$

e $x \cos x + \sin x$

f $-2 \cot x \csc^2 x$

g $4x^3 \csc(4x) - 4x^4 \cot(4x) \csc(4x)$

h $2 \cot x \sec^2(2x) - \csc^2 x \tan(2x)$

i $\frac{\sec x \tan x - \sin x}{2\sqrt{\cos x + \sec x}}$

23 a $e^{\sec x} \sec x \tan x$

b $e^x \sec(e^x) \tan(e^x)$

c $e^x \sec(x) + e^x \sec(x) \tan(x)$

d $\frac{-\csc^2(\log x)}{x}$

e $-5 \csc(5x) \sec(5x)$

f $\frac{\cot(x)}{x} - \csc^2(x) \log x$

g $-\cos x \cot(\sin x) \csc(\sin x)$

h $-\cos(\csc x) \cot x \csc x$

i 0

Exercise 6.2.4

- 1 a $\frac{2}{4x^2+1}$ b $\frac{1}{\sqrt{9-x^2}}$ c $\frac{-2}{\sqrt{1-4x^2}}$ d $\frac{4}{\sqrt{1-16x^2}}$
- e $\frac{2}{x^2+4}$ f $\frac{1}{\sqrt{2x-x^2}}$ g $\frac{-1}{\sqrt{16-x^2}}$ h $\frac{1}{\sqrt{4-(x+1)^2}}$
- i $\frac{1}{(4-x)^2+1}$ j $\frac{-1}{\sqrt{4x-x^2}}$ k $\frac{6}{4x^2+9}$ l $\frac{-1}{\sqrt{-x^2+x+2}}$
- 2 a $\frac{2x}{x^4+1}$ b $\frac{1}{2\sqrt{x-x^2}}$ c $\frac{1}{2\sqrt{x^3-x^2}}$ d $\frac{-\sin x}{\sqrt{1-\cos^2 x}} = \begin{cases} -1 & \text{if } \sin x > 0 \\ 1 & \text{if } \sin x < 0 \end{cases}$
- e $\frac{1}{2x\sqrt{x-1}}$ f $\frac{1}{\sqrt{1-x^2}\sin^{-1}x}$ g $\frac{e^x}{1+e^{2x}}$ h $\frac{1}{\sqrt{e^{2x}-1}}$
- i $\frac{e^{\arcsin x}}{\sqrt{1-x^2}}$ j $\frac{-4}{(4x^2+1)[\tan^{-1}(2x)]^2}$ k $\frac{-1}{\sqrt{1-x^2}(\sin^{-1}(x))^{3/2}}$
- l $\frac{2}{\sqrt{1-x^2}(\cos^{-1}(x))^3}$ m $\frac{-4x}{\sqrt{1-4x^2}}$ n $\frac{-4x}{\sqrt{1-4x^2}}$
- o $\frac{-1}{x^2\sqrt{1-x^2}}$
- 3 a $\tan^{-1}x + \frac{x}{1+x^2}$ b $\frac{x - \sqrt{1-x^2}\sin^{-1}x}{x^2\sqrt{1-x^2}}$ c $\frac{x + \sqrt{1-x^2}\cos^{-1}x}{(\cos^{-1}x)^2\sqrt{1-x^2}}$
- d $\frac{-2x^2\tan^{-1}x + x - 2\tan^{-1}x}{x^3(x^2+1)}$ e $\frac{2x^2\log x + \sqrt{1-x^4}\sin^{-1}(x^2)}{x\sqrt{1-x^4}}$
- f $\frac{-\sqrt{1-x}\cos^{-1}\sqrt{x}-\sqrt{x}}{2x^{3/2}\sqrt{1-x}}$ g $e^x\tan^{-1}(e^x) + \frac{e^{2x}}{1+e^{2x}}$ h $2x\tan^{-1}\left(\frac{x}{2}\right) + 2$
- i $1 - \frac{x}{\sqrt{4-x^2}}\sin^{-1}\left(\frac{x}{2}\right)$
- 4 $0, k = \frac{\pi}{2}$
- 6 b $k = \frac{\pi}{2}$
- 7 a $f'(x) = \frac{-\pi}{x\sqrt{x^2-\pi^2}}, x > \pi$ and $\frac{\pi}{x\sqrt{x^2-\pi^2}}, x < -\pi$; $\text{dom}(f) =]-\infty, -\pi[\cup]\pi, \infty[$
- b $f'(x) = \frac{1}{x\sqrt{2x-1}}, x > \frac{1}{2}$; $\text{dom}(f') = \left] \frac{1}{2}, \infty[\right.$, $\text{dom}(f) = \left[\frac{1}{2}, \infty[\right.$

c $f'(x) = \frac{1}{\sqrt{1-x^2}} \cos^{-1}\left(\frac{x}{2}\right) - \frac{1}{\sqrt{4-x^2}} \sin^{-1}(x), -1 < x < 1; \text{dom}(f) = [-1, 1]$

d $f'(x) = -\frac{2}{x^2+1}, x > 0$ and $\frac{2}{x^2+1}, x < 0; \text{dom}(f) =]-\infty, \infty[$

e $f'(x) = \frac{a}{\sqrt{1-a^2x^2}}, |x| < \frac{1}{a}; \text{dom}(f) = \left[-\frac{1}{a}, \frac{1}{a}\right]$

f $f'(x) = \frac{2}{\sqrt{1-x^2}}, -\frac{1}{\sqrt{2}} < x < \frac{1}{\sqrt{2}}$ and $f'(x) = \frac{-2}{\sqrt{1-x^2}}, -1 < x < -\frac{1}{\sqrt{2}}$ or $\frac{1}{\sqrt{2}} < x < 1; \text{dom}(f) = [-1, 1]$

g $f'(x) = \frac{2}{x^2+1}, x > 0$ and $\frac{-2}{x^2+1}, x < 0; \text{dom}(f) =]-\infty, \infty[$

h $f'(x) = \frac{2}{x^2+1}, |x| < 1$ and $\frac{-2}{x^2+1}, |x| > 1; \text{dom}(f) =]-\infty, \infty[$

8 a $\frac{nx^{n-1}}{1+x^{2n}} + \frac{n}{1+x^2}(\arctan x)^{n-1}$ b 0 c $2\sqrt{1-x^2}$ d $\frac{1}{2\sqrt{(a-x)(x-b)}}$

e $\frac{1}{2(1+x^2)}$ f $\frac{1}{x^2+1}$

9 a $x \geq 0$ b $\frac{-1}{(x+1)\sqrt{x}}, x > 0$

Exercise 6.2.5

1 a $(\ln 4)4^x$ b $(\ln 3)3^x$ c $(\ln 8)8^x$ d $3(\ln 5)5^x$
 e $7(\ln 6)6^x$ f $2(\ln 10)10^x$ g $(\ln 6)6^{x-2}$ h $3(\ln 2)2^{3x+1}$
 i $-5(\ln 7)7^{3-x}$

2 a $x(\ln 3)3^x + 3^x$ b $4 \cos(2x)2^x + 2 \ln(2) \sin(2x)2^x$ c $\ln(5)5^x e^{-x} - 5^x e^{-x}$
 d $2 \times 8^{-x} - \ln(8)8^{-x}x^2$ e $\frac{(1+4^x) - (x+2)\ln(4)4^x}{(1+4^x)^2}$ f $-\sin x 5^x + \ln(5)5^x \cos x$

3 a $\frac{1}{(\ln 5)x}$ b $\frac{1}{(\ln 10)x}$ c $\frac{1}{(\ln 4)x}$ d $\frac{1}{(\ln 9)(x+1)}$
 e $\frac{2x}{(\ln 2)(x^2+1)}$ f $\frac{1}{2(\ln 5)(x-5)}$ g $\log_2 x + \frac{1}{\ln 2}$ h $(\ln 3)3^x \log_3 x + \frac{3^x}{(\ln 3)x}$

i $(\ln a)a^x \log_a x + \frac{a^x}{(\ln a)x}$

j $\frac{(\ln a)^2 x a^x \log_a x - a^x}{(\ln a)x(\log_a x)^2}$

k $\frac{(\ln(10))\log_{10}(x+1) - 1}{\ln(10)(\log_{10}(x+1))^2}$

l $\frac{(\ln(2))2\log_2 x - 2}{\ln(2)(\log_2 x)^2}$

4 $\frac{1}{\ln 2}$

5 $0, -\frac{2}{\ln 2}$

6 $\frac{1 - \ln 3}{3}$

7 $\pi 2^{-\pi} \sqrt{3} + \frac{\sqrt{3}\pi \ln \pi}{2}$

8 1.25

9 a $20 + 10 \ln 10$ **b** $(\ln 4)\cos(1)$ **c** $\frac{1}{2}$ **d** $10 - \frac{10}{\ln 10}$

10 a $4 \times 5^{4x+1} \ln 5$ **b** $3^{x-x^3}(1-3x^2)\ln 3$ **c** $2(10^{2x-3})\ln 10$

d $9\sqrt{x-x}\left(\frac{1}{2\sqrt{x}} - 1\right)\ln 9$ **e** $-2\cos(2x) + 1 \ln 2 \sin 2x$ **f** $\frac{-4\sqrt{\cos 2x} \ln 4 \sin 2x}{\sqrt{\cos 2x}}$

g $2^x \cos 2^x \ln 2$ **h** $2^{\sin x} \cos x \ln 2$ **i** $-7\left(\frac{1}{x} - 2x\right)(2+x^{-2})\ln 7$

11 a $\frac{2 \cot 2x}{\ln 2}$ **b** $\frac{x}{(x^2-1)\ln 5}$ **c** $\frac{1}{2(\sqrt{x}-10)\sqrt{x}\ln 10}$

d $\frac{-4 \sec^2 2x}{\ln 2(4-2 \tan 2x)}$ **e** $\frac{1}{2\sqrt{x-x^2} \sin^{-1} \sqrt{x} \ln 2}$ **f** $\frac{-1}{((1-x^2)+1)\tan^{-1}(1-x)\ln 3}$

g $\frac{3x^2}{(x^3-3)\ln 3}$ **h** $\frac{-1}{2(2-x)\ln 2}$ **i** $-\frac{1}{2 \ln 10} \tan\left(\frac{x}{2} - 2\right)$

12 a $x^x(\ln x + 1)$ **b** $x^{\sin x}\left(\cos x \ln x + \frac{\sin x}{x}\right)$ **c** $(1 - \ln x)x^{x^{\frac{1}{2}-2}}$ **d** $2 \ln(x)x^{\ln x - 1}$

Exercise 6.2.6

- 1 a** $20x^3$ **b** $48(1+2x)^2$ **c** $\frac{2}{x^3}$ **d** $\frac{2}{(1+x)^3}$
- e** 2 **f** $\frac{6}{(x-2)^3}$ **g** $\frac{42}{x^8}$ **h** $24(1-2x)$
- i** $\frac{1}{x^2}$ **j** $\frac{2(x^2+1)}{(1-x^2)^2}$ **k** $-16 \sin 4\theta$ **l** $2 \cos x - x \sin x$
- m** $6x^2 \cos x + 6x \sin x - x^3 \sin x$ **n** $\frac{1}{x}$ **o** $\frac{10}{(2x+3)^3}$
- p** $6xe^{2x} + 12x^2e^{2x} + 4x^3e^{2x}$ **q** $\frac{8 \sin 4x - 15 \cos 4x}{e^x}$
- r** $2 \cos x^2 - 4x^2 \sin x^2$ **s** $\frac{-48(x^2+2x^5)}{(4x^3-1)^3}$ **t** $\frac{10}{(x-3)^3}$
- 2 a** $\frac{-2x}{(x^2+1)^2}$ **b** $\frac{x}{(1-x^2)^{3/2}}$ **c** $\frac{-x}{(1-x^2)^{3/2}}$ **d** $\frac{2}{(x^2+1)^2}$
- e** $\frac{2x-1}{4(x-x^2)^{3/2}}$ **f** $\frac{2x-3x^2}{4\sqrt{(x^3-x^2)^3}}$
- 3** $\frac{6 \ln x - 5}{x^4}, \frac{n^2 \ln x + n \ln x - 2n - 1}{x^{n+2}}$
- 4** $f'(x) = -\frac{1}{(x+1)^2}, f''(x) = \frac{2}{(x+1)^3}, f^{(iii)}(x) = -\frac{6}{(x+1)^4}, f^{(iv)}(x) = \frac{24}{(x+1)^5}$
 $f^{(v)}(x) = -\frac{120}{(x+1)^6}, \dots, f^{(n)}(x) = (-1)^n \frac{n!}{(x+1)^{n+1}}$
- 5** $f(x) = \left(\frac{x+1}{x-1}\right)^n \Rightarrow f^n(x) = \frac{4n(n+x)}{(x^2-1)^2} \left(\frac{x+1}{x-1}\right)^n$
- 7 a** $a^n e^{ax}$ **b** $\frac{(-1)^n 2^n n!}{(2x+1)^{n+1}}$
- c** $n = 2k : y^{(n)}(x) = (-1)^k a^{2k} \sin(ax+b), k = 1, 2, \dots$
 $n = 2k-1 : y^{(n)}(x) = (-1)^{k+1} a^{2k-1} \cos(ax+b), k = 1, 2, \dots$
- 8 a** $2 + \frac{1}{8\sqrt{2}}$ **b** $\frac{3+\pi}{2}$
- 9** -1 $[0, 1.0768[\cup]3.6436, 2\pi]$

Exercise 6.2.7

- 1 a $-2x$ b $\frac{-x}{y}$ c $\frac{1}{x^3y}$ d $\frac{y}{x+1}$
- e $\frac{-ye^x}{1+e^x}$ f $\frac{\sin x - y}{x}$ g $-x$ h $\frac{1-3x^4y}{x^5}$
- i $\frac{-y\cos x + 2}{\sin x}$ j -1 k $\frac{4x^3}{3y^2+1}$ l $\sqrt{x+y} - 1$

2 (1,5), 0

4 $\left(\frac{3-2\sqrt{10.6}}{2}, \frac{80+4\sqrt{265}}{40}\right), \left(\frac{3+2\sqrt{10.6}}{2}, \frac{80-4\sqrt{265}}{40}\right)$

5 a $y = \frac{x \pm \sqrt{5x^2 - 80}}{2}$ c $\frac{dy}{dx} = \frac{2x+y}{2y-x}$ d $\frac{5x \pm \sqrt{5x^2 - 80}}{2\sqrt{5x^2 - 80}}$

e Hyperbola

6 a Dom = Ran = $[-2,2]$ b $\frac{-x^3}{y^3}$ c $\frac{-x^3}{(\sqrt[4]{16-x^4})^3}$ d small

e Dom = Ran = $[-k,k]$ f $\frac{dy}{dx} = \frac{x^{2n-1}}{y^{2n-1}}$

7 a $\frac{-y}{p\gamma}$ b $\frac{n(m-1)x^{m-2}}{m(n+1)y^n}$

8 a $\frac{1}{11}$ b -1

9 a $\frac{y}{xy-x}$ b $\frac{(1+y^2)(\tan^{-1}y - 1)}{1-x+y^2}$

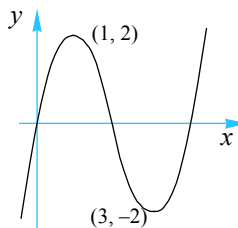
10 a undefined b At (0.8042, 0.5), grad = 1.32; at (0.0646, 0.5), grad = 3.74

Exercise 6.3.1

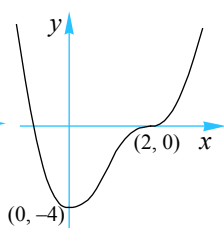
- 1 **a** $y = 7x - 10$ **b** $y = -4x + 4$ **c** $4y = x + 5$
 d $16y = -x + 21$ **e** $4y = x + 1$ **f** $4y = x + 2$
 g $y = 28x - 48$ **h** $y = 4$
- 2 **a** $7y = -x + 30$ **b** $4y = x - 1$ **c** $y = -4x + 14$
 d $y = 16x - 79$ **e** $2y = 9 - 8x$ **f** $y = -4x + 9$
 g $28y = -x + 226$ **h** $x = 2$
- 3 **a** $y = 2ex - e$ **b** $y = e$ **c** $y = \pi$ **d** $y = -x$
 e $y = x$ **f** $ey = (2e - 1)x - e^2 + 2e - 1$
 g $y = ex$ **h** $y = 2x + 1$
- 4 **a** $2ey = -x + 2e^2 + 1$ **b** $x = 1$ **c** $x = \pi$ **d** $y = x - 2\pi$ **e** $y = -x + \pi$
 f $(2e - 1)y = -ex + 3e^2 - 4e + 1$ **g** $ey = -x$ **h** $2y = -x + 2$
- 5 A: $y = 28x - 44$, B: $y = -28x - 44$, Isosceles. $z \equiv (0, a^2 - 3a^4)$
- 6 2 sq. units, $y = 2x = 1$
- 7 $4y = 3x$
- 8 $by = \sqrt{a^2 - b^2}x$
- 9 $y = 4x - 9$
- 10 $y = \log_e 4$
- 11 $8y = 4(\pi + 2)x - \pi^2$; $4(\pi + 2)y = -8x + 4\pi + \pi^2$
- 12 A: $y = -8x + 32$, B: $y = 6x + 25$, $(\frac{1}{2}, 28)$
- 13 $y = -x$, Tangents: $y = \frac{1}{2}, y = -\frac{1}{2} \left(-\frac{1}{2}, \frac{1}{2}\right), \left(\frac{1}{2}, -\frac{1}{2}\right)$ tangent and normal meet at $(0.5, -0.5)$
- 14 **a** $y = 3x - 7$ **b** $Q \equiv (2, -1)$
- 15 $m = -2, n = 5$
- 16 **a** $y = 4x - 2$ **b** $37y = 26x + 70$
 c $16y = x + 65$ **d** $y = \frac{4}{\pi} + \frac{\pi^2}{4(\pi - 2)} - \frac{\pi^2}{4(\pi - 2)}x$ **e** $5y = 6x - 1$
- 17 **a** $y = 1$ **b** At $(1, 2) y = 2$; At $(-1, -2) y = -2$
- 18 **a** $l_1: 3y = -2x + 1, l_2: 2y = 3x + 5$ **b** $l_1: 2y = x, l_2: y = -2x + 5$
 c $l_1: 6y = x + 16, l_2: y = -6x + 15$
- 19 $(\frac{2}{3}, 1)$

Exercise 6.3.2

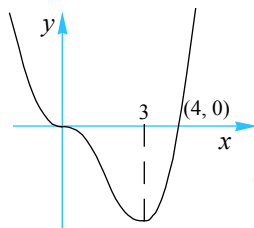
1 a



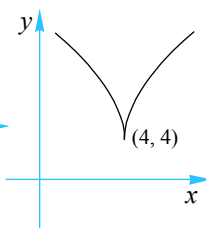
b



c



d



2 a max at (1, 4)

b min at $(-\frac{9}{2}, -\frac{81}{4})$

c min at (3, -45) max (-3, 63)

d max at (0, 8), min at (4, -24)

e max at (1, 8), min at (-3, -24)

f min at $(\frac{1+\sqrt{13}}{3}, \frac{70-26\sqrt{13}}{27})$, max at $(\frac{1-\sqrt{13}}{3}, \frac{70+26\sqrt{13}}{27})$

g min at (1, -1)

h max at (0, 16), min at (2, 0), min at (-2, 0)

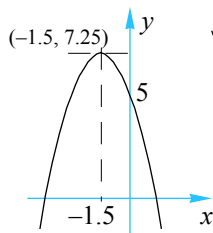
i min at (1, 0) max at $(-\frac{1}{3}, \frac{32}{27})$

j min at $(\frac{4}{9}, -\frac{4}{27})$

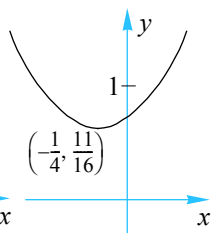
k min at (2, 4), max at (-2, -4)

l min at (1, 2), min at (-1, 2)

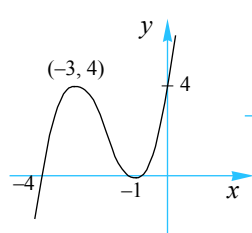
3 a



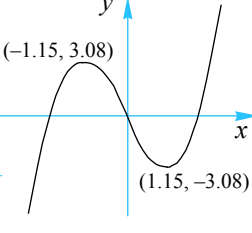
b



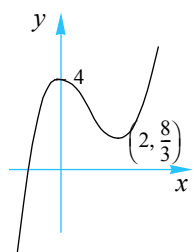
c



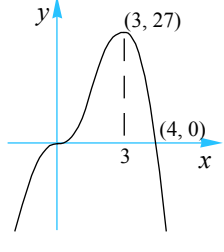
d



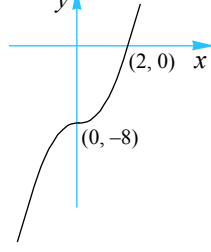
e



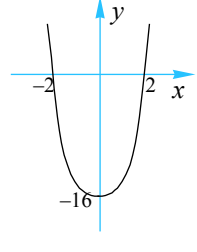
f



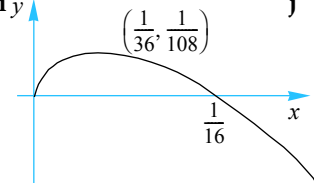
g



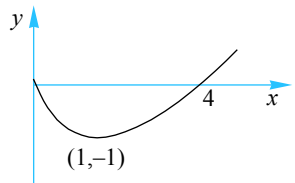
h



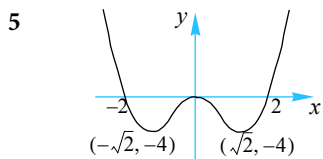
i



j

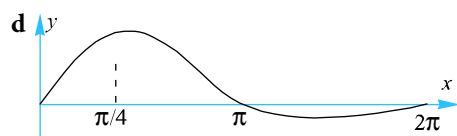


4 min at (1, -3), max at (-3, 29), non-stationary infl (-1, 13)



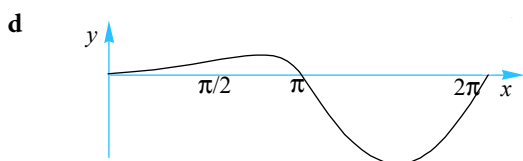
6 a i $(\cos x - \sin x)e^{-x}$ ii $-2\cos x \cdot e^{-x}$ b i $\frac{\pi}{4}, \frac{5\pi}{4}$ ii $\frac{\pi}{2}, \frac{3\pi}{2}$

c Inf. $\left(\frac{\pi}{2}, e^{-\frac{\pi}{2}}\right)$ $\left(\frac{3\pi}{2}, -e^{-\frac{3\pi}{2}}\right)$



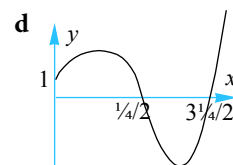
7 a i $e^x(\sin x + \cos x)$ ii $2e^x \cos x$ b i $x = \frac{3\pi}{4}, \frac{7\pi}{4}$ ii $x = \frac{\pi}{2}, \frac{3\pi}{2}$

c St. pts. $\left(\frac{3\pi}{4}, \frac{1}{\sqrt{2}}e^{\frac{3\pi}{4}}\right), \left(\frac{7\pi}{4}, -\frac{1}{\sqrt{2}}e^{\frac{7\pi}{4}}\right)$ Infl. pts. $\left(\frac{\pi}{2}, e^{\frac{\pi}{2}}\right), \left(\frac{3\pi}{2}, -e^{\frac{3\pi}{2}}\right)$



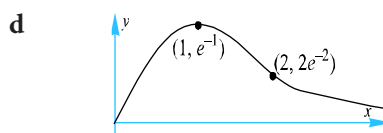
8 a i $e^x(\cos x - \sin x)$ ii $-2\sin x \cdot e^x$ b i $\frac{\pi}{4}, \frac{5\pi}{4}$ ii $0, \pi, 2\pi$

c St. pts. $\left(\frac{\pi}{4}, \frac{1}{\sqrt{2}}e^{\frac{\pi}{4}}\right), \left(\frac{5\pi}{4}, -\frac{1}{\sqrt{2}}e^{\frac{5\pi}{4}}\right)$ Inf. pts. $(0, 1), (\pi, -e^\pi), (2\pi, e^{2\pi})$



9 a i $(1-x)e^{-x}$ ii $(x-2)e^{-x}$ b i $x=1$ ii $x=2$

c St. pt. $(1, e^{-1})$ Inf. pt. $(2, 2e^{-2})$

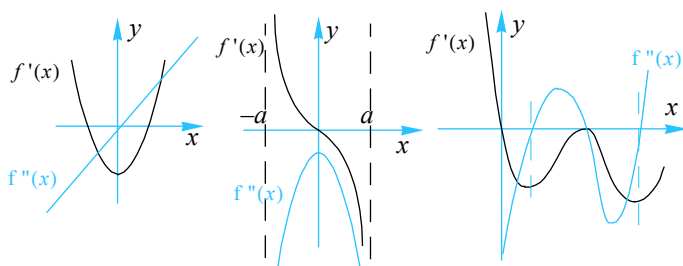


10 a 8 b 0 c 4 d $27\sqrt[3]{9} \approx 56.16$

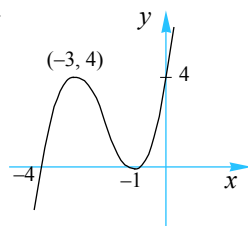
11 a min value -82 b max value 26

- 12 a pt A: i Yes ii non-stationary pt of inflect;
 pt B: i Yes ii Stationary point (local/global min);
 pt C: i Yes ii non-stationary pt of inflect.
 b pt A: i No ii. Local/global max;
 pt B: i No ii Local/global min;
 pt C: i Yes ii Stationary point (local max)
 c pt A: i Yes ii Stationary point (local/global max);
 pt B: i Yes ii Stationary point (local min);
 pt C: i Yes ii non-stationary pt of inflect.
 d pt A: i Yes ii Stationary pt (local/global max);
 pt B: i No ii Local min;
 pt C: i Yes ii Stationary point (local max)
 e pt A: i No ii Cusp (local min);
 pt B: i Yes ii Stationary pt of inflect;
 pt C: i Yes ii Stationary point (local max)
 f pt A: i Yes ii Stationary point (local/global max);
 pt B: i Yes ii Stationary point (local/global min);
 pt C: i No ii Tangent parallel to y -axis.
- 13 a i A ii B iii C b i C ii B iii A

- 14 a b c

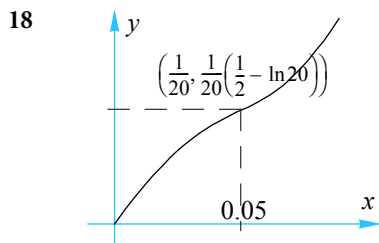


15 $y = x^3 + 6x^2 + 9x + 4$



16 $f(x) = \frac{1}{3}x^3 - x^2 - 3x - 6$

17 $f(x) = 3x^5 - 20x^3$



19 $m = -0.5, n = 1.5$

Exercise 6.3.3

1 a $4\pi r \text{ cm}^2\text{s}^{-1}$

b $4\pi \text{ cms}^{-1}$

2 $6 \text{ cm}^2\text{s}^{-1}$

3 a $\frac{dA}{dt} = -\frac{3}{2}\sqrt{2}x \text{ cm}^2\text{s}^{-1}$ ($x = \text{side length}$)

b $-\frac{3}{2}\sqrt{2} \text{ cms}^{-1}$

4 a $37.5 \text{ cm}^3\text{h}^{-1}$

b $30 \text{ cm}^2\text{h}^{-1}$

c $0.96 \text{ g}^{-1}\text{cm}^3\text{h}^{-1}$

5 $\sim 0.37 \text{ cms}^{-1}$

6 $-0.24 \text{ cm}^3\text{min}^{-1}$

7 a 0.035 ms^{-1}

b 0.035 ms^{-1}

8 $8\pi \text{ cm}^3\text{min}^{-1}$

9 854 kmh^{-1}

10 $\frac{53}{6}$

11 2 rad s^{-1}

12 a $V = h^2 + 8h$

b $\frac{4}{15} \text{ m min}^{-1}$

c $0.56 \text{ m}^2\text{min}^{-1}$

13 $\frac{3\sqrt{10}}{200} \text{ m min}^{-1}$

14 $10\sqrt{2} \text{ cm}^3\text{s}^{-1}$

15 0.9 ms^{-1}

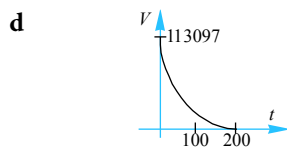
16 -3.92 ms^{-1}

17 a $x = 30 - 0.15t$

b $[0, 200]$

c i $1531 \text{ cm}^3\text{s}^{-1}$

ii $15.90 \text{ cm}^2\text{s}^{-1}$



18 $\sim 1.24 \text{ ms}^{-1}$

19 $\sim 0.0696 \text{ ms}^{-1}$

20 a $y = \sqrt{119 + 20t - 4t^2}$

b $\sim 0.516 \text{ ms}^{-1}$

21 a 0.095 cms^{-1}

b $0.6747 \text{ cm}^2\text{s}^{-1}$

22 a i $x = 70t$

ii $y = 80t$

b $130t$

c 130 kmh^{-1}

d 14.66 kmh^{-1}

23 -0.77 ms^{-1}

24 0.40 ms^{-1}

25 3.2 ms^{-1}

26 0.075 m min^{-1}

27 $1.26^\circ \text{ per sec}$

28 $\frac{5}{2564} \approx 0.002 \text{ rad per second}$

29 **a** $9\% \text{ per second}$ **b** $6\% \text{ per second}$

30 0.064

31 8211 per year

32 $4\% \text{ per second}$

33 $-0.25 \text{ rad per second}$

Exercise 6.4.1

- 1 a $\frac{1}{4}x^4 + c$ b $\frac{1}{8}x^8 + c$ c $\frac{1}{6}x^6 + c$ d $\frac{1}{9}x^9 + c$
- e $\frac{4}{3}x^3 + c$ f $\frac{7}{6}x^6 + c$ g $x^9 + c$ h $\frac{1}{8}x^4 + c$
- 2 a $5x + c$ b $3x + c$ c $10x + c$ d $\frac{2}{3}x + c$
- e $-4x + c$ f $-6x + c$ g $-\frac{3}{2}x + c$ h $-x + c$
- 3 a $x - \frac{1}{2}x^2 + c$ b $2x + \frac{1}{3}x^3 + c$ c $\frac{1}{4}x^4 - 9x + c$ d $\frac{2}{5}x + \frac{1}{9}x^3 + c$
- e $\frac{1}{3}x^{3/2} + \frac{1}{x} + c$ f $x^{5/2} + 4x^2 + c$ g $\frac{1}{3}x^3 + x^2 + c$ h $x^3 - x^2 + c$
- i $x - \frac{1}{3}x^3 + c$
- 4 a $\frac{1}{3}x^3 - \frac{1}{2}x^2 - 6x + c$ b $\frac{1}{4}x^4 - \frac{2}{3}x^3 - \frac{3}{2}x^2 + c$ c $\frac{1}{4}(x-3)^4 + c$
- d $\frac{2}{5}x^5 + \frac{1}{2}x^4 + \frac{1}{3}x^3 + \frac{1}{2}x^2 + c$ e $x + \frac{1}{2}x^2 - \frac{2}{3}x^{3/2} - \frac{2}{5}x^{5/2} + c$
- f $\frac{2}{7}x^{7/2} + \frac{4}{5}x^{5/2} + \frac{2}{3}x^{3/2} - 2x + c$
- 5 a $\frac{1}{2}x^2 - 3x + c$ b $2u^2 + 5u + \frac{1}{u} + c$ c $-\frac{1}{x} - \frac{2}{x^2} - \frac{4}{3x^3} + c$
- d $\frac{1}{2}x^2 + 3x + c$ e $\frac{1}{2}x^2 - 4x + c$ f $\frac{1}{3}t^3 + 2t - \frac{1}{t} + c$
- 6 a $\frac{4}{7}\sqrt{x^7} + 2\sqrt{x} - 5x + c$ b $\frac{1}{3}x^3 + \frac{1}{2}x^2 - \frac{4}{7}x^{7/2} - \frac{4}{5}x^{5/2} + c$
- c $-\frac{1}{2z^2} + \frac{2}{z} + 2z^2 + z + c$ d $\frac{1}{2}t^4 + t + c$
- e $\frac{2}{5}\sqrt{t^5} - 2\sqrt{t^3} + c$ f $\frac{1}{3}u^3 + 2u^2 + 4u + c$

8 a $\frac{1}{8}(2x+3)^4 + c$ b $3\sqrt{x^2+4} + c$

Exercise 6.4.2

1 a $\frac{1}{5}e^{5x} + c$ b $\frac{1}{3}e^{3x} + c$ c $\frac{1}{2}e^{2x} + c$

d $10e^{0.1x} + c$ e $-\frac{1}{4}e^{-4x} + c$ f $-e^{-4x} + c$

g $-0.2e^{-0.5x} + c$ h $-2e^{1-x} + c$ i $5e^{x+1} + c$

j $e^{2-2x} + c$ k $3e^{x/3} + c$ l $2\sqrt{e^x} + c$

2 a $4\log_e x + c, x > 0$ b $-3\log_e x + c, x > 0$ c $\frac{2}{5}\log_e x + c, x > 0$

d $\log_e(x+1) + c, x > -1$ e $\frac{1}{2}\log_e x + c, x > 0$ f $x - 2\log_e x - \frac{1}{x} + c, x > 0$

g $\frac{1}{2}x^2 - 2x + \log_e x + c, x > 0$ h $3\ln(x+2) + c$

3 a $-\frac{1}{3}\cos(3x) + c$ b $\frac{1}{2}\sin(2x) + c$ c $\frac{1}{5}\tan(5x) + c$ d $\cos(x) + c$

4 a $-\frac{1}{2}\cos(2x) + \frac{1}{2}x^2 + c$ b $2x^3 - \frac{1}{4}\sin(4x) + c$ c $\frac{1}{5}e^{5x} + c$

d $-\frac{4}{3}e^{-3x} - 2\cos\left(\frac{1}{2}x\right) + c$ e $3\sin\left(\frac{x}{3}\right) + \frac{1}{3}\cos(3x) + c$

f $\frac{1}{2}e^{2x} + 4\log_e x - x + c, x > 0$ g $\frac{1}{2}e^{2x} + 2e^x + x + c$

h $\frac{5}{4}\cos(4x) + x - \log_e x + c, x > 0$ i $\frac{1}{3}\tan(3x) - 2\log_e x + 2e^{x/2} + c, x > 0$

j $\frac{1}{2}e^{2x} - 2x - \frac{1}{2}e^{-2x} + c$ k $\frac{1}{2}e^{2x+3} + c$

l $-\frac{1}{2}\cos(2x + \pi) + c$ m $\sin(x - \pi) + c$

n $-4\cos\left(\frac{1}{4}x + \frac{\pi}{2}\right) + c$ **o** $2\left(\frac{e^x + 2}{\sqrt{e^x}}\right) + c$

5 a $\frac{1}{16}(4x-1)^4 + c$ **b** $\frac{1}{21}(3x+5)^7 + c$ **c** $-\frac{1}{5}(2-x)^5 + c$

d $\frac{1}{12}(2x+3)^6 + c$ **e** $-\frac{1}{27}(7-3x)^9 + c$ **f** $\frac{1}{5}\left(\frac{1}{2}x-2\right)^{10} + c$

g $-\frac{1}{25}(5x+2)^{-5} + c$ **h** $\frac{1}{4}(9-4x)^{-1} + c$ **i** $-\frac{1}{2}(x+3)^{-2} + c$

j $\ln(x+1) + c, x > -1$ **k** $\ln(2x+1) + c, x > -\frac{1}{2}$ **l** $-2\ln(3-2x) + c, x < \frac{3}{2}$

m $3\ln(5-x) + c, x < 5$ **n** $-\frac{3}{2}\ln(3-6x) + c, x < \frac{1}{2}$ **o** $\frac{5}{3}\ln(3x+2) + c, x > -\frac{2}{3}$

6 a $-\frac{1}{2}\cos(2x-3) - x^2 + c$ **b** $6\sin\left(2 + \frac{1}{2}x\right) + 5x + c$ **c** $\frac{3}{2}\sin\left(\frac{1}{3}x-2\right) + \ln(2x+1) + c$

d $10\tan(0.1x-5) - 2x + c$ **e** $2\ln(2x+3) + 2e^{-\frac{1}{2}x+2} + c$ **f** $-\frac{2}{2x+3} - \frac{1}{2}e^{2x-\frac{1}{2}} + c$

g $x + \ln(x+1) - 4\ln(x+2) + c$ **h** $2x - 3\ln(x+2) + \frac{1}{2}\ln(2x+1) + c$

i $-\frac{1}{2x+1} + \ln(2x+1) + c$

7 a $f(x) = \frac{1}{6}\sqrt{(4x+5)^3}$ **b** $f(x) = 2\ln(4x-3) + 2$

c $f(x) = \frac{1}{2}\sin(2x+3) + 1$ **d** $f(x) = 2x + \frac{1}{2}e^{-2x+1} + \frac{1}{2}e$

8 14 334

9 13.19ms^{-1} or 1.19ms^{-1}

10 2.66 cm

11 $2e^{x/2} - \frac{1}{2}\sin(2x) - 2$

12 a $p = \frac{a}{a^2 + b^2}, q = -\frac{b}{a^2 + b^2}$

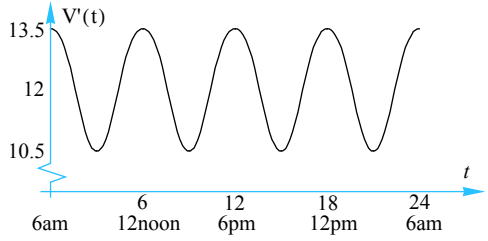
b $\frac{1}{13}e^{2x}(2 \sin 3x - 3 \cos 3x) + c$

13 a $0.25a$

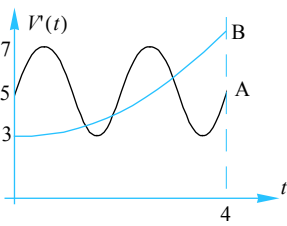
b $a \times \left(\frac{1}{2}\right)^{8/3} \approx 0.1575a$

14 b 666 g

15 a  b 73.23% c ~25.24 litres



16 a  b 7000 c 1.16 day d 2 days



Exercise 6.5.1

- 1 a $x^2 + x + 3$ b $2x - \frac{1}{3}x^3 + 1$ c $\frac{8}{3}\sqrt{x^3} - \frac{1}{2}x^2 - \frac{40}{3}$
- d $\frac{1}{2}x^2 + \frac{1}{x} + 2x - \frac{3}{2}$ e $(x+2)^3$ f $\frac{3}{4}\sqrt[3]{x^4} + \frac{1}{4}x^4 + x$
- g $\frac{1}{3}x^3 + 1$ h $x^4 - x^3 + 2x + 3$
- 2 $\frac{1}{2}x^2 + \frac{1}{x} + \frac{5}{2}$
- 3 \$3835.03
- 4 9.5
- 5 $\frac{251}{3}\pi \text{ cm}^3$
- 6 292
- 7 $\frac{5}{7}\sqrt{x^3} + \frac{23}{7}$
- 8 1, -8
- 9 $P(x) = 25 - 5x + \frac{1}{3}x^2$
- 10 $N = \frac{20000}{201}t^{2.01} + 500, t \geq 0$
- 11 a $y = -\frac{2}{5}x^2 + 4x$ b $y = \frac{1}{6}x^3 + \frac{5}{4}x^2 + 2x$
- 12 $y = 2(x^3 + x^2 + x)$
- 13 $f(x) = -\frac{3}{10}x^3 + \frac{49}{10}x - \frac{13}{5}$
- 14 Vol ~ 43 202 cm³
- 15 110 cm²

Exercise 6.5.2

- 1 a $\frac{15}{2}$ b $\frac{38}{3}$ c $\frac{5}{36}$ d -8
- 2 a $\frac{35}{24}$ b $\frac{8}{5}\sqrt{2} - 2$ c -2 d 0
- e $\frac{1}{20}$ f $-\frac{4}{3}$ g $\frac{7}{6}$ h $\frac{5}{6}$
- i $\frac{20}{3}$ j 0 k $\frac{20}{3}$ l $-\frac{\sqrt{2}}{3}$

- 4 **a** e **b** $2(e^{-2} - e^{-4})$ **c** 0 **d** $2(e - e^{-1})$
- e** $e^2 + 4 - e^{-2}$ **f** $\frac{1}{2}(e - e^5)$ **g** $2\sqrt{e} - 3$
- h** $\frac{1}{4}(16e^{1/4} - e^4 - 15)$ **i** $\frac{1}{2}(e^{-1} - e^3)$
- 6 **a** $3\ln 2$ **b** $2\ln 5$ **c** $4 + 4\ln 3$ **d** $\frac{1717}{4}$
- e** $\frac{3}{2}\ln 3$ **f** $2\ln 2$ **g** $\frac{3}{4}$ **h** $4\ln 2 - 2$ **i** $\ln 2$
- 8 **a** 1 **b** $\frac{3\sqrt{3}}{2}$ **c** $\frac{\sqrt{3}}{2}$ **d** -2
- e** $\frac{\pi^2}{32} - 1$ **f** 0 **g** 0 **h** $\frac{\sqrt{3}}{2} - \frac{1}{2}$
- i** 0 **j** 2
- 9 **a** $\frac{31}{5}$ **b** $\frac{7\sqrt{7}}{3} - \sqrt{3}$ **c** 0 **d** $\frac{5}{72}$
- e** $3^3\sqrt{2} - \frac{3}{2}$ **f** $1 - \ln 2$ **g** $\frac{76}{15}$ **h** $\frac{16}{15}$
- i** $\frac{2}{3}(e+1)^{3/2}(1 - e^{-3/2})$
- 10 $\ln\left(\frac{21}{5}\right)$
- 11 $\sin 2x + 2x \cos 2x ; 0$
- 12 **a** $2m - n$ **b** $m + a - b$ **c** $-3n$ **d** $m(2a - b)$ **e** na^2
- 13 **a** $e^{0.1x} + 0.1xe^{0.1x} ; 10xe^{0.1x} - 100e^{0.1x} + c$
- b i** 99 accidents **ii** $N = 12t + 10te^{0.1t} - 100e^{0.1t} + 978$
- 14 **a** 1612 subscribers **b** 46 220
- 15 **b** ~524 flies

Exercise 6.5.3

- 1 **a** 4 sq.units **b** $\frac{32}{3}$ sq.units **c** 4 sq.units
 d 36 sq.units **e** $\frac{1}{6}$ sq.units
- 2 **a** e sq.units **b** $\frac{1}{2}(e^4 - 2 - e^2)$ sq.units **c** $2(e + e^{-1} - 2)$ sq.units
 d $2(e^2 - 2 - e)$ sq.units
- 3 **a** $\ln\left(\frac{5}{4}\right)$ sq.units **b** $2\ln 5$ sq.units **c** $3\ln 3$ sq.units **d** 0.5 sq.units
- 4 **a** 2 sq.units **b** $\frac{\pi}{2}$ sq.units **c** $\frac{3}{8}\pi^2 + \sqrt{2} - 2$ sq.units
 d $\sqrt{2}$ sq. units **e** $4\sqrt{3}$ sq.units
- 6 12 sq. units
- 7 $4\left(\sqrt{3} - \frac{1}{3}\right)$ sq.units.
- 8 $\ln 2 + 1.5$ sq.units.
- 9 2 sq.units.
- 10 $\frac{37}{12}$ sq. units
- 11 **a** 0.5 sq. units **b** 1 sq. unit **c** $2(\sqrt{6} - \sqrt{2})$ sq. units
- 12 $\frac{8}{3}$
- 13 $-2\tan 2x; \frac{1}{4}\ln 2$ sq.units
- 14 **a** $\frac{9}{2}$ sq. units **b** 3 sq. units
- 15 **a** 1 sq.unit **b** 10 sq. units
- 16 **a** $x\ln x - x + c$ **b** 1 sq. unit
- 17 $\frac{14}{3}$ sq. units
- 18 **a** $\frac{7}{6}$ sq. units **b** $\frac{9}{2}$ sq. units
- 19 **a i** $\frac{15}{4}$ sq. units **ii** $\frac{45}{4}$ sq. units
- 20 $\frac{22}{3}$ sq. units

- 21 **b i** $e^{-1} + e^{-2}$ sq. units **ii** 1 sq. unit **iii** $2\ln(2)$ sq. units
- 22 **b** 3.05 sq. units
- 23 **a** $2y = 3ax - a^3$ **b** $\frac{1}{15}a^5$ sq. units
- 24 **a** $1 - e^{-1}$ sq. units **b** e^{-1} sq. units **c** $1 - e^{-e^{-1} - 1} - e^{-1} \sim 0.10066$ sq. units

Exercise 6.5.4

All values are in cubic units.

- 1 21π
- 2 $p\ln 5$
- 3 $\frac{4}{5}\pi$
- 4 $\frac{\pi}{2}(e^{10} - e^2)$
- 5 π^2
- 6 $\frac{\pi}{2}$
- 7 $\frac{109}{3}\pi$
- 8 $\pi\left(\frac{8}{3} - 2\ln 3\right)$
- 12 $\frac{\pi}{2}(5 - 5\sin 1)$
- 13 $\frac{251}{30}\pi$
- 14 **a** 40π **b** $\frac{242}{5}\pi$
- 15 **a** $\frac{8}{35}\pi$ **b** $\frac{\pi}{4}$
- 16 **a** $\frac{9}{2}\pi$ **b** $\frac{88}{5}\sqrt{3}\pi$
- 17 $\frac{3\pi}{4}$
- 18 $k = 1$
- 19 $4\pi^2 a^2$
- 20 $k = \frac{\pi}{2}$
- 21 **b i** $\frac{\pi a}{2(1+a^2)}$ **ii** $\frac{8\pi}{15}\sqrt{\frac{a}{1+a^2}}\left(\frac{3a^2+2}{1+a^2}\right)$
- 22 **a** Two possible solutions: solving $a^3 - 6a^2 - 36a + 204 = 0$, $a = 4.95331$; solving $a^3 - 6a^2 - 36a - 28 = 0$, then $a = -0.95331$
- b** $a = \frac{100}{\pi}$
- 23 $\frac{28}{15}\pi$
24. **a** $\frac{1472}{15}\pi$ **b** 64π **c** $\frac{576}{5}\pi$

Exercise 6.6.1

1 **a** $x = t^3 + 3t + 10, t \geq 0$ **b** $x = 4 \sin t + 3 \cos t - 1, t \geq 0$ **c** $x = t^2 - 4e^{-\frac{1}{2}t} + 2t + 4, t \geq 0$

2 **a** $x = t^3 - t^2, t \geq 0$ **b** 100 **c** $100\frac{8}{27}$ m

3 **a** $x = -\frac{2}{3}(4+t)^{3/2} + 2t + 8$ **b** 6.92 m

4 $\frac{125}{6}$ m

5 $\frac{125}{49}$ s; 63.8 m

6 **a** $\frac{\pi}{6}$ s **b** $\frac{\pi}{2} - 1$ m

7 80.37 m

8 **a** $s(t) = \frac{160}{\pi} \left[1 - \cos\left(\frac{\pi}{16}t\right) \right], t \geq 0$ **b** 86.94 m

c -6.33 m **d** 116.78 m

9 **a** $v = 4 + k - \frac{k}{t^2}, t > 0$ **b** $k = 2$ **c** 52.2 m

10 **b** 0.0893 m

Example 6.1.4

The concentration of a drug, in milligrams per millilitre, in a patient's bloodstream, t hours after an injection, is approximately modelled by the function:

$$t \mapsto \frac{2t}{8+t^2}, t \geq 0$$

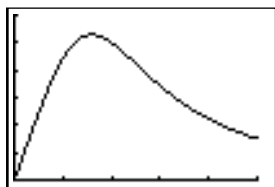
Find the average rate of change in the concentration of the drug present in a patient's bloodstream:

- a during the first hour
- b during the first two hours
- c during the period $t = 2$ to $t = 4$.

To help us visualise the behaviour of this function we will make use of the TI-83.

Begin by introducing the variable C , to denote the concentration of the drug in the patient's bloodstream t hours after it is administered.

So that $C(t) = \frac{2t}{8+t^2}, t \geq 0$.



Initially the concentration is 0 milligrams per millilitre. The concentration after 1 hour is given by $C(1) = \frac{2 \times 1}{8 + 1^2} = \frac{2}{9} \approx 0.22$.

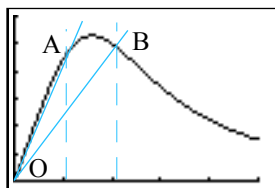
Therefore, the average rate of change in concentration (C_{ave}) during the first hour is given by $C_{ave} = \frac{0.22 - 0}{1 - 0} = 0.22$. Note: the units are $mg/mL/hr$.

The concentration 2 hours after the drug has been administered is $C(2) = \frac{2 \times 2}{8 + 2^2} = 0.25$. That is, 0.25 mg/ml .

Therefore, the average rate of change in concentration with respect to time is: $C_{ave} = \frac{0.25 - 0}{2 - 0} = 0.125$.

Notice that although the concentration has increased (compared to the concentration after 1 hour), the rate of change in the concentration has actually decreased!

This should be evident from the graph of $C(t)$ versus t .



The slope of the straight line from the origin to $A(1, 0.22)$, m_{OA} , is greater than the slope from the origin O to the point $B(2, 0.25)$, m_{OB} .

That is $m_{OA} > m_{OB}$.

The average rate of change in concentration from $t = 2$ to $t = 4$ is given by $\frac{C(4) - C(2)}{4 - 2}$.

$$\text{Now, } \frac{C(4) - C(2)}{4 - 2} = \frac{\frac{2 \times 4}{8 + 4^3} - 0.250}{4 - 2} \approx \frac{0.111 - 0.250}{2} = -0.0694$$

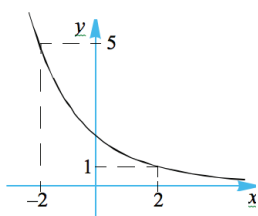
Therefore, the average rate of change of concentration is -0.070 mg/ml/hr ,

i.e. the overall amount of drug in the patient's bloodstream is decreasing during the time interval $2 \leq t \leq 4$.

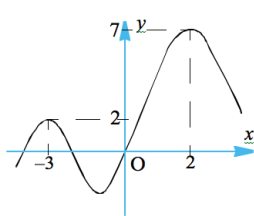
Exercise 6.1.1

1. For each of the following graphs determine the average rate of change over the specified domain.

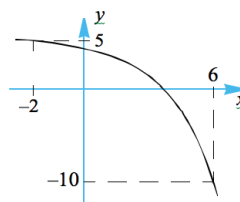
c $x \in [-2, 2]$



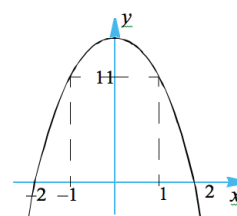
d $x \in [-3, 2]$



e $x \in [-2, 6]$



f $x \in [-1, 1]$



8. For the case where r is 20 cm,

- a find the average rate of increase in the amount of water inside the bowl with respect to its height, h cm, as the water level rises from 2 cm to 5 cm.
- b Find the average rate of increase in the amount of water inside the bowl with respect to its height, h cm, as the water level rises by
 - i 1 cm
 - ii 0.1 cm
 - iii 0.01 cm.

9. An amount of money is placed in a bank and is accumulating interest on a daily basis. The table below shows the amount of money in the savings account over a period of 600 days.

| t (days) | 100 | 200 | 300 | 400 | 500 | 600 | 700 |
|------------------|------|------|------|------|------|------|------|
| $\$D/\text{day}$ | 1600 | 1709 | 1823 | 1942 | 2065 | 2194 | 2328 |

- a Plot the graph of $\$D$ versus t (days).
- b Find the average rate of change in the amount in the account during the period of 100 days to 300 days.

10. The temperature of coffee since it was poured into a cup was recorded and tabulated below.

| | | | | | |
|---------|----|----|----|----|---|
| t min | 0 | 2 | 4 | 6 | 9 |
| T °C | 60 | 50 | 30 | 10 | 5 |



- a Plot these points on a set of axes that show the relationship between the temperature of the coffee and the time it has been left in the cup.
 - b Find the average rate of change of temperature of the coffee over the first 4 minutes.
 - c Over what period of time is the coffee cooling the most rapidly?
11. The displacement, d metres, of an object, t seconds after it was set in motion is described by the equation:

$$d = 4t + 5t^2, \text{ where } t \geq 0.$$

- a Find the distance that the object travels in the first 2 seconds of its motion.
 - b Find the average rate of change of distance with respect to time undergone by the object over the first 2 seconds of its motion.
 - c What quantity is being measured when determining the average rate of change of distance with respect to time?
 - d How far does the object travel during the 5th second of motion?
 - e Find the object's average speed during the 5th second.
12. A person invests \$1000 and estimates that, on average, the investment will increase each year by 16% of its value at the beginning of the year.
- a Calculate the value of the investment at the end of each of the first 5 years.
 - b Find the average rate at which the investment has grown over the first 5 years.

Exercise 6.1.2

5. For each of the functions, f , given below, find the gradient of the secant joining the points $P(a, f(a))$ and $Q(a + h, f(a + h))$ and hence deduce the gradient of the tangent drawn at the point P .

a $f(x) = x$ b $f(x) = x^2$

c $f(x) = x^3$ d $f(x) = x^4$.

Hence deduce the gradient of the tangent drawn at the point $P(a, f(a))$ for the function $f(x) = x^n, n \in N$.

6. The healing process of a certain type of wound is measured by the decrease in surface area that the wound occupies on the skin. A certain skin wound has its surface area modelled by the equation $S(t) = 20 \times 2^{-0.1t}$ where S sq. cm is the unhealed area t days after the skin received the wound.

a Sketch the graph of $S(t) = 20 \times 2^{-0.1t}, t \geq 0$.

b i What area did the wound originally cover?

ii What area will the wound occupy after 2 days?

iii How much of the wound healed over the two day period?

iv Find the average rate at which the wound heals over the first two days.

c How much of the wound would heal over a period of h days?

d Find the rate at which the wound heals:

i immediately after it occurs

ii one day after it occurred.

Exercise 6.2.2

2. Differentiate the following with respect to the independent variable:

a $v = \frac{2}{3}\left(5 - \frac{2}{t^2}\right)$

b $S = \pi r^2 + \frac{20}{r}$

c $q = \sqrt{s^5} - \frac{3}{s}$

d $h = \frac{2 - t + t^2}{t^3}$

e $L = \frac{4 - \sqrt{b}}{b}$

f $W = (m - 2)^2(m + 2)$

Exercise 6.2.3

3. Differentiate the following.

g $\frac{4}{x^2} \times \sin x$

h $xe^x \sin x$

i $xe^x \log_e x$

4. Differentiate the following.

g $\frac{e^x - 1}{x + 1}$

h $\frac{\sin x + \cos x}{\sin x - \cos x}$

i $\frac{x^2}{x + \log_e x}$

5. Differentiate the following.

f $\cos(-4x) - e^{-3x}$

g $\log_e(4x + 1) - x$

h $\log_e(e^{-x}) + x$

i $\sin\left(\frac{x}{2}\right) + \cos(2x)$

j $\sin(7x - 2)$

k $\sqrt{x} - \log_e(9x)$

l $\log_e(5x) - \cos(6x)$

6. Differentiate the following.

i $\cos(\sin \theta)$

j $4 \sec \theta$

k $\operatorname{cosec}(5x)$

l $3 \cot(2x)$

7. Differentiate the following.

k $e^{-\cos(2\theta)}$

l $e^{2 \log_e(x)}$

m $\frac{2}{e^{-x} + 1}$

n $(e^x - e^{-x})^3$

o $\sqrt{e^{2x+4}}$

p e^{-x^2+9x-2}

8. Differentiate the following.

i $\log_e\left(\frac{1}{\sqrt{x+2}}\right)$

j $\log_e(\cos^2 x + 1)$

k $\log_e(x \sin x)$

l $\log_e\left(\frac{x}{\cos x}\right)$

9. Differentiate the following.

i $\frac{\cos(2x)}{e^{1-x}}$

j $x^2 \log_e(\sin 4x)$

k $e^{-\sqrt{x}} \sin \sqrt{x}$

l $\cos(2x \sin x)$

m $\frac{e^{5x+2}}{1-4x}$

n $\frac{\log_e(\sin \theta)}{\cos \theta}$

o $\frac{x}{\sqrt{x+1}}$

p $x\sqrt{x^2+2}$

q $(x^3 + x)^3 \sqrt{x+1}$

r $(x^3 - 1) \sqrt{x^3 + 1}$

s $\frac{1}{x} \log_e(x^2 + 1)$

t $\log_e\left(\frac{x^2}{x^2 + 2x}\right)$

u $\frac{\sqrt{x-1}}{x}$

v $e^{-x} \sqrt{x^2 + 9}$

w $(8 - x^3)\sqrt{2 - x}$ x $x^n \ln(x^n - 1)$

15. Find: c $\frac{d}{dx}(\cos x^\circ)$

17. a Given that $f(x) = 1 - x^3$ and $g(x) = \log_e x$, find: i $(f \circ g)'(x)$ ii $(g \circ f)'(x)$

b Given that $f(x) = \sin(x^2)$ and $g(x) = e^{-x}$, find: i $(f \circ g)'(x)$ ii $(g \circ f)'(x)$

21. Differentiate the following.

e $y = \cot\left(\frac{\pi}{4} - x\right)$ f $y = \sec(2x - \pi)$

22. Differentiate the following.

g $x^4 \operatorname{cosec}(4x)$ h $\tan 2x \cot x$ i $\sqrt{\sec x + \cos x}$

23. Differentiate the following.

| | | |
|----------------------------------|----------------------------------|-----------------------------------|
| a $e^{\sec x}$ | b $\sec(e^x)$ | c $e^x \sec x$ |
| d $\cot(\ln x)$ | e $\ln(\cot 5x)$ | f $\cot x \ln x$ |
| g $\operatorname{cosec}(\sin x)$ | h $\sin(\operatorname{cosec} x)$ | i $\sin x \operatorname{cosec} x$ |

Exercise 6.2.4

1. Differentiate with respect to x , each of the following.

g $\arccos\left(\frac{x}{4}\right)$

h $\arcsin\left(\frac{x+1}{2}\right)$

i $\tan^{-1}(x-4)$

j $\arcsin\left(\frac{2-x}{2}\right)$

k $\arctan\left(\frac{2x}{3}\right)$

l $\arccos\left(\frac{2x-1}{3}\right)$

2. Differentiate with respect to x , each of the following.

i $e^{\arcsin x}$

j $\frac{2}{\arctan(2x)}$

k $\frac{2}{\sqrt{\arcsin(x)}}$

l $\frac{1}{[\arccos x]^2}$

m $\cos(\sin^{-1}(2x))$

n $\sin(\arccos(2x))$

o $\tan(\arccos x)$

3. Differentiate with respect to x , each of the following.

g $e^x \arctan e^x$

h $(4+x^2)\arctan\left(\frac{x}{2}\right)$

i $\sqrt{4-x^2}\sin^{-1}\left(\frac{x}{2}\right)$

7. Differentiate the following and find the implied domain for each of $f(x)$ and $f'(x)$.

d $f(x) = \sin^{-1}\left(\frac{1-x^2}{1+x^2}\right)$

e $f(x) = \arcsin(ax), a \in \mathbb{R}$

f $f(x) = \arcsin(2x\sqrt{1-x^2})$

g $f(x) = \cos^{-1}\left(\frac{1-x^2}{1+x^2}\right)$

h $f(x) = \sin^{-1}\left(\frac{2x}{1+x^2}\right)$

8. Differentiate the following.

a $\arctan(x^n) + [\arctan(x)]^n$

b $\arcsin x + \arcsin \sqrt{1-x^2}$

c $x\sqrt{1-x^2} + \arcsin x$

d $\tan^{-1} \sqrt{\frac{x-b}{a-x}}, b < x < a$

e $\arctan[x - \sqrt{1+x^2}]$

f $\cot^{-1} x$

9. Given that $f: [-1, 1] \rightarrow \mathbb{R}$, where $f(x) = \arcsin(x)$ and $g(x) = \frac{1-x}{1+x}, x \in A$.

Find the largest set A such that $(f \circ g)(x)$ exists.

Exercise 6.2.5

10. Differentiate the following.

g $\sin(2^x)$

h $2^{\sin x}$

i $\frac{1}{7^x} - 2x$

11. Differentiate the following.

g $\log_3(x^3 - 3)$

h $\log_2(\sqrt{2-x})$

i $\log_{10}\left(\cos\left(\frac{x}{2} - 2\right)\right)$

12. Find the derivative of:

a x^x

b $x^{\sin x}$

c $x^{\left(\frac{1}{x}\right)}$

d $x^{\ln x}$

Hint: Let $y = f(x)$ and then take log base e of both sides.

Exercise 6.2.6

1. Find the second derivative of the following functions.

m $f(x) = x^3 \sin x$ n $y = x \ln x$ o $f(x) = \frac{x^2 - 1}{2x + 3}$ p $y = x^3 e^{2x}$

q $f(x) = \frac{\cos(4x)}{e^x}$ r $y = \sin(x^2)$ s $f(x) = \frac{x}{1 - 4x^3}$ t $y = \frac{x^2 - 4}{x - 3}$

7. Find the n th derivative of:

a e^{ax} b $y = \frac{1}{2x + 1}$ c $\sin(ax + b)$

8. a Find $f''(2)$ if $f(x) = x^2 - \sqrt{x}$. b Find $f''(1)$ if $f(x) = x^2 \tan^{-1}(x)$.

9. Find the rate of change of the gradient of the function $g(x) = \frac{x^2 - 1}{x^2 + 1}$ where $x = 1$.

10. Find the values of x where the rate of change of the gradient of the curve $y = x \sin x$ for $0 \leq x \leq 2\pi$ is positive.

Exercise 6.3.1

6. Find the equation of the tangent and the normal to the curve $x \mapsto x + \frac{1}{x}, x \neq 0$ at the point (1, 2).
Find the coordinates of the points where the tangent and the normal cross the x - and y -axes, and hence determine the area enclosed by the x -axis, the y -axis, the tangent and the normal.
7. Find the equation of the normal to the curve $y = \sqrt{25 - x^2}$ at the point (4, 3).
8. Show that every normal to the curve $y = \sqrt{a^2 - x^2}$ will always pass through the point (0, 0).
9. Find the equation of the tangent to the curve $y = x^2 - 2x$ that is parallel to the line with equation $y = 4x + 2$.
10. Find the equation of the tangent to the curve $x \mapsto \log_e(x^2 + 4)$ at the point where the curve crosses the y -axis.
11. Find the equation of the tangent and the normal to the curve $x \mapsto x \tan(x)$ where $x = \frac{\pi}{4}$.
12. The straight line $y = -x + 4$ cuts the parabola with equation $y = 16 - x^2$ at the points A and B.
a Find the coordinates of A and B.
b Find the equation of the tangents at A and B, and hence determine where the two tangents meet.
13. For the curve defined by:

$$x \mapsto \frac{x}{x^2 + 1}$$

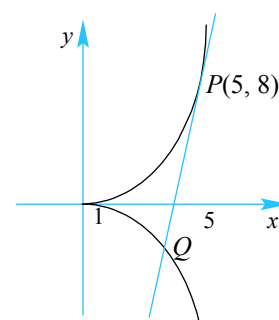
find the equation of the normal at the origin, and the equations of the tangents that are parallel to the x -axis. Find also the points where the tangents and the normal intersect.

14. The figure shows the curve whose equation is given by:

$$y^2 = (x - 1)^3$$

The tangent drawn at the point $P(5, 8)$ meets the curve again at the point Q.

- a Find the equation of the tangent at the point P.
b Find the coordinates of Q.



15. The line L and the curve C are defined as follows:

$$L: y = 4x - 2 \text{ and } C: y = mx^3 + nx^2 - 1$$

The line L is a tangent to the curve C at $x = 1$.

- Using the fact that L and C meet at $x = 1$, show that $m + n = 3$.
- Given that L is a tangent to C at $x = 1$, show that $3m + 2n = 4$.
- Hence, solve for m and n .

16. For each of the following curves, find the equation of the normal at the points indicated:

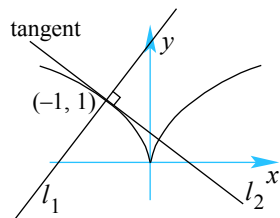
- $x^2 + 2y^2 = 9$ at the point $(1, 2)$.
- $2xy - \sqrt{x^2 + y^2} = 19$ at the point $(3, 4)$.
- $4(x + y) + 3xy = 0$ at the point $(-1, 4)$.
- $x = \tan\left(\frac{x}{y}\right)$ at the point $\left(1, \frac{4}{\pi}\right)$
- $x^2 + 3xy^2 - 4 = 0$ at the point $(1, 1)$.

17. For the curve $x^2 + y^2 - xy = 3$, find:

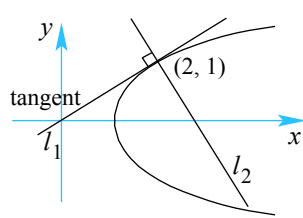
- the equation of the normal at $(2, 1)$.
- the equations of the tangents to the curve that are parallel to the x -axis.

18. Find the equation of the lines l_1 and l_2 in each of the following situations.

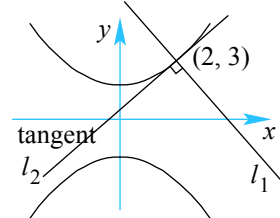
a $x^2 - y^3 = 0$



b $x - y^2 = 1$



c $4y^2 - x^2 = 32$



19. Find the point of intersection of the tangents to the curve $y^2 - 3xy + x^3 = 3$ at the points where $x = -1$.

Exercise 6.3.2

2. Find the coordinates and nature of the stationary points for the following:

j $y = x\sqrt{x} - x, x \geq 0$ k $g(x) = x + \frac{4}{x}, x \neq 0$ l $f(x) = x^2 + \frac{1}{x^2}, x \neq 0$

3. Sketch the following functions:

e $f(x) = \frac{1}{3}x^3 - x^2 + 4$ f $y = 4x^3 - x^4$ g $y = x^3 - 8$
 h $y = x^4 - 16$ i $y = x - 4x\sqrt{x}, x \geq 0$ j $f(x) = x - 2\sqrt{x}, x \geq 0$

8. A function f is defined by $f: x \mapsto e^x \cos x$, where $0 \leq x \leq 2\pi$.

- a Find: i $f'(x)$ ii $f''(x)$
 b Find the values of x for which:
 i $f'(x) = 0$ ii $f''(x) = 0$.
 c Using parts a and b, find the points of inflection and stationary points for f .
 d Hence, sketch the graph of f .

9. A function f is defined by $f: x \mapsto xe^{-x}$, where $x > 0$.

- a Find: i $f'(x)$ ii $f''(x)$
 b Find the values of x for which:
 i $f'(x) = 0$ ii $f''(x) = 0$
 c Using parts a and b, find the points of inflection and stationary points for f .
 d Hence, sketch the graph of f .

10. a Find the maximum value of the function $y = 6x - x^2, 4 \leq x \leq 7$.

b Find the minimum value of the function $y = 6x - x^2, 2 \leq x \leq 6$.

c Find the maximum value of the function $y = 2x - x^3, -2 \leq x \leq 6$.

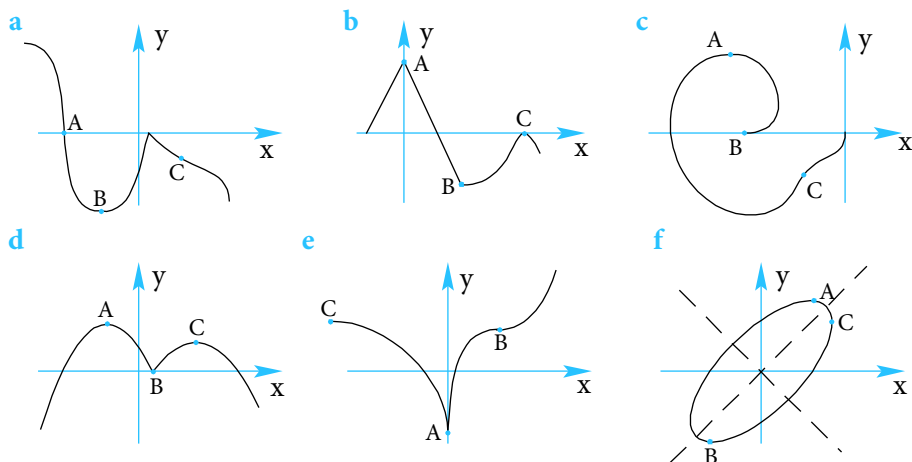
d Find the maximum value of the function $y = 36x - x^4, 2 \leq x \leq 3$.

11. For the function $f(x) = \frac{1}{3}x^3 - x^2 - 3x + 8, -6 \leq x \leq 6$, find:

- a its minimum value. b its maximum value.

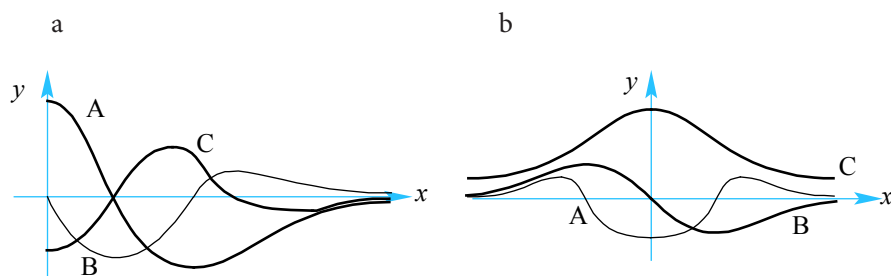
12. For each of the labelled points on the following graphs state:

- i whether the derivative exists at the point.
- ii the nature of the curve at the point.

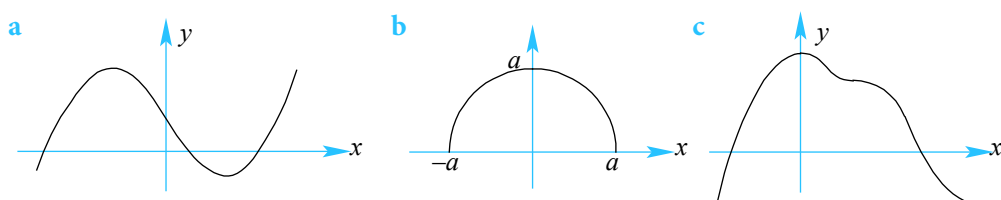


13. Identify which graph corresponds to:

- i $f(x)$
- ii $f'(x)$
- iii $f''(x)$



14. For each of the functions, $f(x)$, sketch: i $f'(x)$ ii $f''(x)$



15. The curve with equation $y = ax^3 + bx^2 + cx + d$ has a local maximum where $x = -3$ and a local minimum where $x = -1$. If the curve passes through the points $(0, 4)$ and $(1, 20)$ sketch the curve for $x \in \mathbb{R}$.

16. The function $f(x) = ax^3 + bx^2 + cx + d$ has turning points at $(-1, -\frac{13}{3})$ and $(3, -15)$. Sketch the graph of the curve $y = f(x)$.

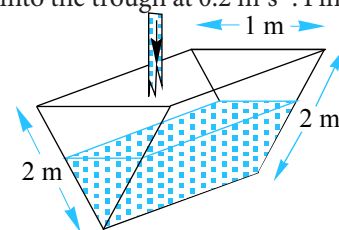
17. The function $f: x \mapsto \mathbb{R}$, where $f(x) = ax^5 + bx^3 + cx$ has stationary points at $(-2, 64)$, $(2, -64)$ and $(0, 0)$. Find the values of a , b and c and hence sketch the graph of f .

18. Sketch the graph of the curve defined by the equation $y = x(10x - \ln x)$, $x > 0$ identifying, where they exist, all stationary points and points of inflection.

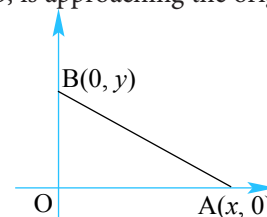
19. Find m and n so that $f'(1)$ exists for the function $f(x) = \begin{cases} mx^2 + n & \text{if } x \leq 1 \\ \frac{1}{x} & \text{if } x > 1 \end{cases}$.

Exercise 6.3.3

17. A solid ball of radius 30 cm is dissolving uniformly in such a way that its radius is x cm, and is decreasing at a constant rate of 0.15 cm/s, t seconds after the process started.
- Find an expression for the radius of the ball at any time t seconds.
 - Find the domain of x .
 - Find the rate of change of:
 - the volume of the ball 10 seconds after it started to dissolve.
 - the surface area when the ball has a volume of 100π cm³.
 - Sketch a graph of the volume of the ball at time t seconds.
18. A fisherman is standing on a jetty and is pulling in a boat by means of a rope passing over a pulley. The pulley is 3 m above the horizontal line where the rope is tied to the boat. At what rate is the boat approaching the jetty if the rope is being hauled at 1.2 m/s, when the rope measures 12 m?
19. A trough, 4 m long, has a cross-section in the shape of an isosceles triangle. Water runs into the trough at 0.2 m³s⁻¹. Find the rate at which the water level is rising after 10 seconds if the tank is initially empty.



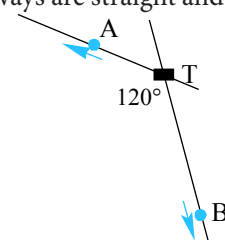
20. A line, 12 m long, meets the x -axis at A and the y -axis at B. If point A, initially 5 m from O, is approaching the origin, O, at 2 m/s, find:
- an expression for y in terms of the time, t seconds, since point A started to move.
 - the rate at which B is moving when A has travelled 2 m.



21. The volume V cm³ of water in a container at time t seconds, when the depth of water in the container is x cm is given by the relationship

$$V = \frac{1}{3}(x + 3)^3 - 9, 0 \leq x \leq 5.$$

- Find the rate at which the water level is increasing after 5 seconds if water flows into the container at 1.2 cm³s⁻¹.
 - Find the rate of change of the area of the surface of the water after 5 seconds if water is still flowing into the container at 1.2 cm³s⁻¹.
22. Two cars, A and B, leave their hometown, T, at the same time but on different freeways. The freeways are straight and at 120° to each other and the cars are travelling at 70 km/h and 80 km/hr respectively. Given that x km and y km are the distances travelled by the cars A and B respectively t hours after they leave T:
- find an expression in terms of t for the distance travelled by car:
 - A
 - B
 - find an expression in terms of t for the distance apart cars A and B are after t hours.
 - How fast are cars A and B moving apart after 5 hours?
 - After travelling for 5 hours, the driver of car B decides to head back to T. How fast are the cars moving apart 3 hours after car B turns back?



23. A girl approaches a tower 75 m high at 5 km/hr. At what rate is her distance from the top of the tower changing when she is 50 m from the foot of the tower?
24. Jenny is reeling in her kite, which is maintaining a steady height of 35 m above the reel. If the kite has a horizontal speed of 0.8 m/s towards Jenny, at what rate is the string being reeled in when the kite is 20 m horizontally from Jenny?
25. A kite 60 metres high, is being carried horizontally away by a wind gust at a rate of 4 m/s. How fast is the string being let out when the string is 100 m long?
26. Grain is being released from a chute at the rate of 0.1 cubic metres per minute and is forming a heap on a level horizontal floor in the form of a circular cone that maintains a constant semi-vertical angle of 30° . Find the rate at which the level of the grain is increasing 5 minutes after the chute is opened.
27. A radar tracking station is located at ground level vertically below the path of an approaching aircraft flying at 850 km/h and maintaining a constant height of 9,000 m. At what rate in degrees is the radar rotating while tracking the plane when the horizontal distance of the plane is 4 km from the station.
28. A weather balloon is released at ground level and 2,500 m from an observer on the ground. The balloon rises straight upwards at 5 m/s. If the observer is tracking the balloon from his fixed position, find the rate at which the observer's tracking device must rotate so that it can remain in-line with the balloon when the balloon is 400 m above ground level.
29. The radius of a uniform spherical balloon is increasing at 3% per second.
- Find the percentage rate at which its volume is increasing.
 - Find the percentage rate at which its surface area is increasing.
30. A manufacturer has agreed to produce x thousand 10-packs of high quality recordable compact discs and have them available for consumers every week with a wholesale price of $\$k$ per 10-pack. The relationship between x and k has been modelled by the equation $x^2 - 2.5kx + k^2 = 4.8$

At what rate is the supply of the recordable compact discs changing when the price per 10-pack is set at $\$9.50$, 4420 of the 10-pack discs are being supplied and the wholesale price per 10-pack is increasing at 12 cents per 10-pack per week?

31. It has been estimated that the number of housing starts, N millions, per year over the next 5 years will be given by:

$$N(r) = \frac{8}{1 + 0.03r^2},$$

where $r\%$ is the mortgage rate. The government believes that over the next t months, the mortgage rate will be given by:

$$r(t) = \frac{8.6t + 65}{t + 10}.$$

Find the rate at which the number of housing starts will be changing 2 years from when the model was proposed.

32. The volume of a right circular cone is kept constant while the radius of the base of the cone is decreasing at 2% per second. Find the percentage rate at which the height of the cone is changing.
33. The radius of a sector of fixed area is increasing at 0.5 m/s. Find the rate at which the angle in radians of the sector is changing when the ratio of the radius to the angle is 4.

Exercise 6.4.1

6. Find the indefinite integral of the following.

a $\sqrt[4]{x^3} + \frac{1}{\sqrt{x}} - 5$

b $\sqrt{x}(\sqrt{x} - 2x)(x + 1)$

c $\frac{1}{z^3} - \frac{2}{z^2} + 4z + 1$

d $\left(2t + \frac{3}{t^2}\right)\left(t^2 - \frac{1}{t}\right) + \frac{3}{t^3}$

e $\frac{(t-2)(t-1)}{\sqrt{t}} - \frac{2}{\sqrt{t}}$

f $\frac{u^3 + 6u^2 + 12u + 8}{u + 2}$

7. Given that $f(x) = ax^n$, $n \neq -1$ and $g(x) = bx^m$, $m \neq -1$ show that:

a $\int [f(x) + g(x)] dx = \int f(x) dx + \int g(x) dx$

b $\int [f(x) - g(x)] dx = \int f(x) dx - \int g(x) dx$

c $\int kf(x) dx = k \int f(x) dx$

d $\int [f(x)g(x)] dx \neq \left(\int f(x) dx\right)\left(\int g(x) dx\right)$

e $\int \frac{f(x)}{g(x)} dx \neq \frac{\int f(x) dx}{\int g(x) dx}$

8. a Show that $\frac{d}{dx}((2x + 3)^4) = 8(2x + 3)^3$. Hence find $\int (2x + 3)^3 dx$.

b Show that $\frac{d}{dx}(\sqrt{x^2 + 4}) = \frac{x}{\sqrt{x^2 + 4}}$. Hence find $\int \frac{3x}{\sqrt{x^2 + 4}} dx$.

Exercise 6.4.2

9. The acceleration, in m/s^2 of a body in a medium is given by $\frac{dv}{dt} = \frac{3}{t+1}$, $t \geq 0$. The particle has an initial speed of 6 m/s, find the speed (to 2 d.p) after 10 seconds.

10. The rate of change of the water level in an empty container, t seconds after it started to be filled from a tap is given by the relation:

$$\frac{dh}{dt} = 0.2\sqrt[3]{t+8}, t \geq 0$$

where h cm is the water level. Find the water level after 6 seconds.

11. The gradient function of the curve $y = f(x)$ is given by $e^{0.5x} - \cos(2x)$. Find the equation of the function, given that it passes through the origin.

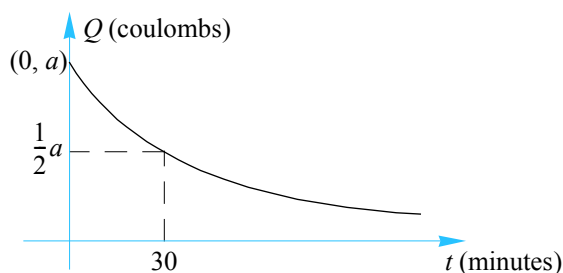
12. a Given that $\frac{d}{dx}(e^{ax}(p \sin bx + q \cos bx)) = e^{ax} \sin bx$, express p and q in terms of a and b .

b Hence find $\int e^{2x} \sin 3x dx$.

13. The rate of change of the charge, Q , in coulombs, retained by a capacitor t minutes after charging, is given by $\frac{dQ}{dt} = -ake^{-kt}$.

Using the graph shown, determine the charge remaining after

- a one hour
- b 80 minutes



14. a Show that $\frac{d}{dx}(x \ln(x+k)) = \frac{x}{x+k} + \ln(x+k)$, where k is a real number.

b For a particular type of commercial fish, it is thought that a length-weight relationship exists such that their rate of change of weight, w kg, with respect to their length, x m, is modelled by the equation:

$$\frac{dw}{dx} = 0.2 \ln(x+2)$$

Given that a fish in this group averages a weight of 650 gm when it is 20 cm long, find the weight of a fish measuring 30 cm.

15. The rate of flow of water, $\frac{dV}{dt}$ litres/hour, pumped into a hot water system over a 24-hour period from 6:00 am, is modelled by the relation:

$$\frac{dV}{dt} = 12 + \frac{3}{2} \cos \frac{\pi}{3} t, t \geq 0.$$

- a Sketch the graph of $\frac{dV}{dt}$ against t .
- b For what percentage of the time will the rate of flow exceed 11 litres/hour.
- c How much water has been pumped into the hot water system by 8:00 a.m.?
16. The rates of change of the population size of two types of insect pests over a 4-day cycle, where t is measured in days, has been modelled by the equations:

$$\frac{dA}{dt} = 2\pi \cos \pi t, t \geq 0 \quad \text{and} \quad \frac{dB}{dt} = \frac{3}{4} e^{0.25t}, t \geq 0$$

where A and B represent the number of each type of pest in thousands.

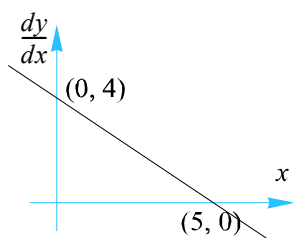
Initially there were 5000 insects of type A and 3000 insects of type B .

- a On the same set of axes sketch the graphs, $A(t)$ and $B(t)$ for $0 \leq t \leq 4$.
- b What is the maximum number of insects of type A that will occur?
- c When will there first be equal numbers of insects of both types?
- d For how long will the number of type B insects exceed the number of type A insects during the four days?

Exercise 6.5.1

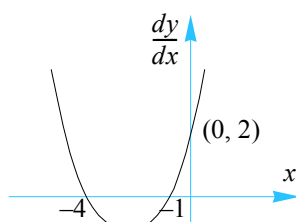
11. Sketch the graph of $y = f(x)$ for each of the following:

a



Where the curve passes through the point $(5, 10)$.

b



Where the curve passes through the point $(0, 0)$.

12. Find $f(x)$ given that $f''(x) = 12x + 4$ and that the gradient at the point $(1, 6)$ is 12.

13. Find $f(x)$ given that $f'(x) = ax^2 + b$, where the gradient at the point $(1, 2)$ is 4, and that the curve passes through the point $(3, 4)$.

14. The rate at which a balloon is expanding is given by

$$\frac{dV}{dt} = kt^{4.5}, t \geq 0,$$

where t is the time in minutes since the balloon started to be inflated and $V \text{ cm}^3$ is its volume. Initially the balloon (which may be assumed to be spherical) has a radius of 5 cm. If the balloon has a volume of 800 cm^3 after 2 minutes, find its volume after 5 minutes.

15. The area, $A \text{ cm}^2$, of a healing wound caused by a fall on a particular surface decreases at a rate given by the equation:

$$A'(t) = -\frac{35}{\sqrt{t}}$$

where t is the time in days. Find the initial area of such a wound if after one day the area measures 40 cm^2 .

Exercise 6.5.2

6. Evaluate the following definite integrals (giving exact values).

g $\int_0^1 \frac{2}{(x+1)^3} dx$

h $\int_2^4 \left(\sqrt{x} - \frac{2}{\sqrt{x}} \right)^2 dx$

i $\int_3^4 \frac{2x+1}{2x^2-3x-2} dx$

8. Evaluate the following definite integrals (giving exact values).

e $\int_0^{\frac{\pi}{4}} (x - \sec^2 x) dx$

f $\int_0^{\frac{\pi}{2}} 2 \cos\left(4x + \frac{\pi}{2}\right) dx$

g $\int_{-\pi}^{\pi} \left(\sin\left(\frac{x}{2}\right) + 2 \cos(x) \right) dx$

h $\int_0^{\frac{\pi}{12}} \sec^2\left(\frac{\pi}{4} - 2x\right) dx$

i $\int_0^{\pi} \cos(2x + \pi) dx$

13. a Find $\frac{d}{dx}(xe^{0.1x})$. Hence, find $\int xe^{0.1x} dx$.

b Following an advertising initiative by the Traffic Authorities, preliminary results predict that the number of alcohol-related traffic accidents has been decreasing at a rate of $-12 - te^{0.1t}$ accidents per month, where t is the time in months since the advertising campaign started.

i How many accidents were there over the first six months of the campaign?

ii In the year prior to the advertising campaign there were 878 alcohol-related traffic accidents. Find an expression for the total number of accidents since the start of the previous year, t months after the campaign started.

14. The rate of cable television subscribers in a city t years from 1995 has been modelled by the equation $\frac{2000}{\sqrt{(1+0.4t)^3}}$.

a How many subscribers were there between 1998 and 2002?

b If there were initially 40 000 subscribers, find the number of subscribers by 2010.

15.

a Find $\frac{d}{dt} \left(\frac{800}{1+24e^{-0.02t}} \right)$.

b The rate at which the number of fruit flies appear when placed in an environment with limited food supply in an experiment was found to be approximated by the exponential model:

$$\frac{384e^{-0.02t}}{(1+24e^{-0.02t})^2}, t \geq 0$$

where t is the number of days since the experiment started. What was the increase in the number of flies after 200 days?

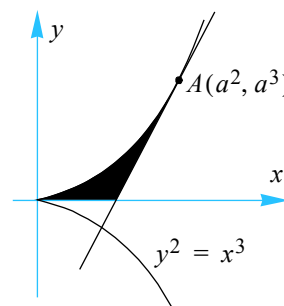
Exercise 6.5.3

20. Find the area of the region bounded by the curves with equations $y = \sqrt{x}$, $y = 6 - x$ and the x -axis.
21. a Sketch the graph of the function $f(x) = |e^x - 1|$.
 b Find the area of the region enclosed by the curve $y = f(x)$,
 i the x -axis and the lines $x = -1$ and $x = 1$.
 ii the y -axis and the line $y = e - 1$.
 iii and the line $y = 1$. Discuss your findings for this case.
22. a On the same set of axes, sketch the graphs of $f(x) = \sin\left(\frac{1}{2}x\right)$ and $g(x) = \sin 2x$ over the interval $0 \leq x \leq \pi$.
 b Find the area of the region between by the curves $y = f(x)$ and $y = g(x)$ over the interval $0 \leq x \leq \pi$, giving your answer correct to two decimal places.

23. Consider the curve with equation $y^2 = x^3$ as shown in the diagram.

A tangent meets the curve at the point $A(a^2, a^3)$.

- a Find the equation of the tangent at A.
 b Find the area of the shaded region enclosed by the curve, the line $y = 0$ and the tangent.



24. a On a set of axes, sketch the graph of the curve $y = e^{x-1}$ and find the area of the region enclosed by the curve, the x -axis and the lines $x = 0$ and $x = 1$.
 b Hence evaluate $\int_{e^{-1}}^1 (\ln x + 1) dx$.
 c Find the area of the region enclosed by the curves $y = e^{x-1}$ and $y = \ln x + 1$ over the $e^{-1} \leq x \leq 1$.

Exercise 6.5.4

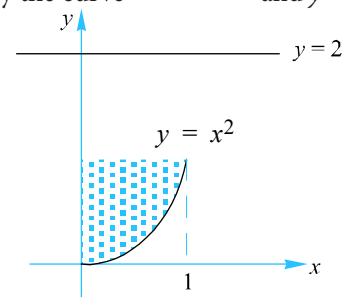
Extension problems

23. Find the volume of the solid of revolution generated when the shaded region shown below is revolved about the line $y=2$.

24. Find the volume of the solid of revolution generated by revolving the region enclosed by the curve $y = 4 - x^2$ and $y = 0$ about:

- a the line $y = -3$
- b the line $x = 3$
- c the line $y = 7$.

In each case, draw the shape of the solid of revolution.



25. Show why the arc length, L units, of a curve from:

$x = a$ to $x = b$ is given by:

$$L = \int_a^b \sqrt{1 + [f'(x)]^2} dx .$$

