

**B**

C-19

VIKRAM

GENERAL KNOWLEDGE

Question Papers

with Lesson Plan

CLASS - 4**Formative Assessment : I****Formative Assessment : II****Formative Assessment : III****Formative Assessment : IV****Summative Assessment : I****Summative Assessment : II****Summative Assessment : III****Total Pages : 32**

Note : These Question Papers are meant for students, using Vikram Text Books and Summative Assessment Papers are also complement for schools. The price of Rs. 2/- against Formative Assessment Papers also charged nominally towards transportation and handling charges only and to avoid misuse/wastage.

Total : 1 Set**No. of Students : 1**

LESSON PLAN

CLASS : 4

	Months	Vikram General Knowledge
		Lessons
FA – I	June – July	Lessons : 1 – 6
FA – II	August	Lessons : 7 – 13
SA – I	September	Lessons : 1 – 19
FA – III	October – November	Lessons : 20 – 34
SA – II	December	Lessons : 1 – 41
FA – IV	January – February	Lessons : 42 – 49
	March	Revision
SA – III	April	Lessons : 1 – 57



FORMATIVE ASSESSMENT - I

Class - 4 :: Vikram General Knowledge

Syllabus :
Text Book : (1 to 6 Lessons)
Page No's. 7 - 13

25

Time : 1 Hour

Max.Marks : 25

Vikram
Text Book - 4

Name :

Section :

Roll No.

A. Read the clues carefully and fill in the blanks :

[5 × 1 = 5 M]

- 1) is a plant that is usually found near the sea.
- 2) is an edible fungus. It has no chlorophyll and cannot produce its own food.
- 3) are the oldest living plants on earth.
- 4) Cricket bats are made from long slender branches of the tree.
- 5) The longest leaves belong to the plants.

B. Write the names of the following rare flowers.

[5 × 1 = 5 M]

1.



Flower that produce heat

2.



Water platter flower

3.



This plant produced volatile oil that catches fire readily in hot weather.

4.



Leaves of this creeper drop when they are touched

5.




World's largest flower

C. Read the description and fill in the blanks with correct answers. [5 × 1 = 5 M]

- 1) The trees are found in Australia. Their leaves contain oil that has strong smell and is used in medicines, such as cough drops. The wood of these trees is used to make furniture.




2) People grow trees mainly for their fluid, called latex. After a cut is made in the bark, latex flows out of the cut which is collected by the farmers in a cup. It is used to make sheets of rubber for making tyres, hoses, shoe soles and balls.




3) There are many pores on the surface of the leaf known as In most plants these pores are open all day and are closed all night. Their main function is to allow carbon dioxide and oxygen to move in and out of the leaf.



4) is so named from the movements of its leaves that 'mimic' animal sensitivity. Usually most species of this plant are herbs; some are woody climbers and a few are trees. They are often prickly.



5) A is a dense group of trees that constitute a more or less continuous layer of plants. These trees whose top meet horizontally form a solid green cover.



D. Fill in the blanks with the correct name of the plants.

[10 × 1 = 10 M]

- 1) The anti-bacterial properties of this tree are used for making bathing soaps and toothpastes.
- 2) Medicines are made from this herb for stomach disorders, cough drops, mouthwash etc.
- 3) The oil from the pods of this plant is used as an essence in ice-creams and milkshakes.
- 4) Seeds of this plant are crushed to make cooking oil
- 5) A blue dye is produced from the leaves of this plant.
- 6) This tree produces green fleshy fruit which is rich in vitamin C and is used as hair conditioner
- 7) We get a cooling effect from the leaves of this plant. The leaves display an orange colour when crushed and applied on hands.
- 8) From this plant, we get quinine drug which is used for curing Malaria.
- 9) This plant is a soft, fluffy staple fiber that grows in a ball. Cotton clothes are made from this plant.
- 10) The sap of this tree is used to make tyres, erasers, slippers etc.





FORMATIVE ASSESSMENT - II

Class - 4 :: Vikram General Knowledge

Syllabus :
Text Book : (7 to 13 Lessons)
Page No's. 14 - 22

25

Time : 1 Hour

Max.Marks : 25

Vikram
Text Book - 4

Name :


Section :

Roll No.

- A. Read the description and identify the following dinosaur. You may take help from the help box. [5 × 1 = 5 M]

Triceratops, Stegosaurus, Elasmosaurus, Branchiosaurus, Tyrannosaurus

1.




It was the Carnivore. It could have run as fast as 50 kms per hour.

2.



It was the biggest dinosaur-as tall as 12 metres and weigh upto 45 tones.

3.




It looked fierce but it was a herbivore. It had three big and sharp horns on its head.

4.



It had a long snake-like neck. It lived in water and could swim very fast. Its favourite food was fish.


5.



It had a long spikes on its tail. The plates on its back may have worked like solar panels.

B. These were some animals on the Earth which are believed to have existed in Pre - historic times. Fill in the blocks to name them. [3 × 1 = 3 M]


1.



This was one of the earliest vertebrates that could fly :

P [] [] R [] [] [] C [] Y []

2.



An immense elephant - like animal with long, shaggy hair and huge, curved tusks.

M [] [] [] O [] []

3.



This is a Pre - historic animal which was believed to have teeth as long as sabres.


S [] [] R [] []

[] O [] [] [] E []

T [] [] [] R

C. There are many types of animals. Some of them birds, insects, reptiles, amphibians and mammals. Write their names in its suitable category. [10 × ½ = 5M]





INSECTS

BIRDS

REPTILES

AMPHIBIANS

MAMMALS

D. Read about us and identify us.

[5 × 1 = 5M]

1) You must have read about Rikki - tikki - tavi in The Jungle Book ? I am a small mammal but I can kill deadly snakes.

__ O __ __ OO __ __

2) Remember Nemo from the movie Finding Nemo ? Well that's who I am ! I am a fish with orange and white stripes.

__ __ O __ N __ IS __

3) I am a rat-like animal with spines on my body. The spines help to protect me from my enemies.

P __ RC __ __ I __ E


4) I am an Australian, small, furry animal. I am a marsupial too.

K __ __ L __

5) My name actually means 'whale-horse'. I am a large mammal living in the Arctic. You can easily recognise me because of my large tusk.

__ _ I __ _ S

E. Complete the crossword with the help of the clues given below. [7 × 1 = 7M]



Down :

- 1) This insect carries germs of malaria and yellow fever.
- 2) An insect with hard feelers, some insects are tiny but others are quite large.
- 4) This tiny insect can carry heavy loads.
- 6) It is an insect with fastest flying speed.

Across :

- 3) This insect has no ears. It hears sound with its feelers.
- 5) These jumping insects make a shrill chirping sound.
- 7) It is also known as 'white ant'. It builds castles of mud and lives in colonies.





FORMATIVE ASSESSMENT - III

Class - 4 :: Vikram General Knowledge

Syllabus :
Text Book : (20 to 34 Lessons)
Page No's. 31 - 47

25

Time : 1 Hour

Max.Marks : 25

Vikram
Text Book - 4

Name :

Section :

Roll No.

A. Fill in the following sentences after selecting the correct word from the given options. [6 × 1/2 = 3 M]

- 1) Ajay _____ (made / maid) several good suggestions.
- 2) Amit took a _____ (loan / lone) to buy a car.
- 3) The teacher asked us to wear _____ (plain / plane) clothes.
- 4) My grand father told me the _____ (tail / tale) of a fox.
- 5) There is a _____ (whole / hole) in the bucket.
- 6) The teacher gave less homework to _____ (lesson / lessen) the burden on the students.

B. Write the antonyms for given words.

[10 × 1/2 = 5 M]

- | | | | |
|------------|----------------------|----------------|----------------------|
| 1. Like | <input type="text"/> | 6. Reversible | <input type="text"/> |
| 2. Appear | <input type="text"/> | 7. Usual | <input type="text"/> |
| 3. Formal | <input type="text"/> | 8. Correct | <input type="text"/> |
| 4. Movable | <input type="text"/> | 9. Perfect | <input type="text"/> |
| 5. Regular | <input type="text"/> | 10. Convenient | <input type="text"/> |

- C. Write the name of Parliament of each country in the blank space. Select your answers from the Help box. [4 × 1 = 4 M]

Lok Sabha and Rajya Sabha, Diet, States General, Sejm

1. Poland _____
2. Japan _____
3. The Netherlands _____
4. India _____

- D. Look the pictures of some magnificent landmarks around the world. Read the descriptions and write their names in the blanks. [3 × 1 = 3 M]

Stone henge, Forbidden city, The Great Pyramid

- 1) This is one of the world's largest palace complex situated in Beijing, China.

_____ .




- 2) These megalithic ruins are located in Southern England. These were perhaps used to tell the time in that period.

_____ .



- 3) This is the tallest man-made structure in the world and listed as one of the seven wonders of the ancient world.

_____ .



E. Given below are pictures of some great personalities who achieved first time in the history of mankind. [3 × 1 = 3 M]

Alexander the Great, Richard E. Byrd, Vijaya Lakshmi Pandit

1)



First European who invaded India :

2)



First Woman President of U.N. General Assembly :

3)




First man who flied both North and South Poles :

F. Quotes are group of words or phrases that someone has said or written.

[4 × 1 = 4 M]


Albert Einstein, William Shakespeare, Mahatma Gandhi, Abraham Lincoln

1)



"Cowards die many times before their death; the valiant never taste of death but once".

2)




"The person who reads too much and uses his brain too little will fall into lazy habits of thinking."

3)



"You can fool all the people some of the time and some of the people all the time but you cannot fool all the people all the time."

4)



"You must be the change you wish to see in the world".

G. Match the columns to complete these proverbs.

[3 × 1 = 3 M]

Column 'A'

1) Honesty is the

2) Hope for the best

3) Charity begins

Column 'B'

a) at home.

b) best policy

c) prepare for the worst.





Class - 4 :: Vikram General Knowledge

Syllabus :
Text Book : (42 to 49 Lessons)
Page No's. 58 - 65

25

Time : 1 Hour

Max.Marks : 25

Vikram
Text Book - 4

Name :

Section :

Roll No.


A. Read the statements given below and write True or False to find out how good friend you are . [5 × 1 = 5 M]

- 1) You can tell your friend's secrets to others.
- 2) You always remember your friend's birthday.
- 3) A good friend shares a secret with you.
- 4) You should not share anything with your friends.
- 5) You can argue with friend.

B. Read the descriptions given below and write the names of sports. Select your answer from the help box. [5 × 1 = 5 M]

Gymnastic, Kung Fu, Swimming, Golf, Croquet

1.




This water sport has strokes such as freestyle, butterfly, backstroke and breaststroke.

2.



This sport is played with clubs and balls. In this sport, the player tries to hit the ball into a series of holes in the least number of strikes.

3.




The players of this sport use wooden hammers to hit balls through rings that are fixed to the ground different distances. _____

4.



Parallel bars, trampoline, pommel horse and balancing beams are some of the equipments used in this varied sport where one can score a perfect 10 _____

5.



This is a Chinese way of fighting without arms. It is also a form of exercise combined with self-discipline. _____

C. What are the names of following sports personalities better known as :

[5 × 1 = 5 M]

P.T. Usha, Viswanathan Anand, Kapildev, Anil Kumble, Harbhajan Singh

1. Harayana Hurrincance



2. Payolli Express



3. The Turbanator



4. Jumbo



5. The Lightning Kid





D. Here are some famous Indian directors. Write their names with the help from the Help box given below. [5 × 1 = 5 M]

Mani Ratnam, Satyajit Ray, Raj Kapoor, Karan Johar, Guru Dutt


1)



2)



3)



4)

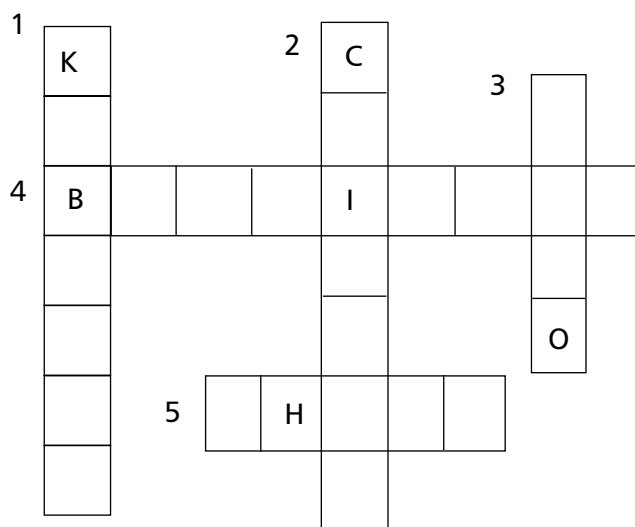


5)



E. Read the clues and fill in the crossword to name the sports.

[5 × 1 = 5 M]



Down :

- 1) This ancient game is the national game of Bangladesh and the state game of Punjab and Andhra Pradesh.
- 2) This game is played during the Indian Premier League (IPL).
- 3) It is played on horseback.

Across :

- 4) It is played with a racquet and a shuttle cock.
- 5) Vishwanathan Anand is the world champion of this indoor sport.





SUMMATIVE ASSESSMENT - I

Class - 4 :: Vikram General Knowledge

Syllabus :
Text Book : (1 to 19 Lessons)
Page No's. 7 - 29

50

Time : 2½ Hours

Max.Marks : 50

Vikram
Text Book - 4

Name :

Section :

Roll No.

A. Pick your answers from the help box.

[5 × 1 = 5 M]

Rajasthan, Thar, Meghalaya, Madhya Pradesh, Kumbh

1) The name of which state means :

a) The abode of clouds

b) The adobe of kings / rajas

2) The Indian state having the largest areas of forest land.

3) The largest desert of India which across the state of Bhupen Hazarika Bridge Rajasthan.

4) Which big mela takes place at Haridwar on the banks of the river. Ganga; at Ujjain on the banks of the river Spira; at Nashik on the banks of the river Godavari; and at Prayag (Allahabad), where the rivers Ganga, Yamuna and Saraswathi meet.

B. Read the clues of some Indians and write their names in given space. [5 × 1 = 5 M]

Kamal Hassan, Tulsidas, Mahendra Singh Dhoni, Aryabatta, KiranBedi

1) Author of Ramacharitmanas

2) South Indian actor who has acted in the Bollywood films too

3) Mathematician

4) First woman police officer

5) Cricketer


C. Match the following artists with the art they are related to. [5 × 1 = 5 M]

- | | | |
|------------------------|-----|------------------------|
| 1. Ustad Zakir Hussain | () | a. Singer and composer |
| 2. Shreya Ghoshal | () | b. Actor |
| 3. Kajal Agarwal | () | c. Tabla Maestro |
| 4. Ranvir Singh | () | d. Singer |
| 5. Shankar Mahadevan | () | e. Actress |


D. Look at the pictures and write their location. You may take help from the help box. [4 × 1 = 4 M]

Madurai, Kashmir, Amritsar, Hyderabad


1)




2)



3)




4)




E. Read the clues and identify the bird. You may take help from the help box. [4 × 1 = 4 M]

Ostrich, Penguin, Emu, Kiwi

1) The bird is a great swimmer which is seen in the Antarctic region with a bluish back top and white abdomen.




2) It is a small, furry nocturnal bird found in the ever-green forests of Newzealand.



3) It is the national bird of Australia.



4) The fastest running bird found mainly in the deserts of Africa.






F. Identify flowers and write their names. You may take help from the help box.

[3 × 1 = 3 M]

Moon flower, Wolffia Globosa, waterlilly


- 1) World's smallest flower 2) The large rounded white flowers stay open all night 3) Water platter flower



G. Read the clues carefully and fill in the blanks with the help of pictures.

[5 × 1 = 5 M]

- 1) is a very juicy stick. When matured, sugar and jaggery are prepared from its juice.
- 2) is a kind of grass that grows very fast. It is the favourite food of Panda's.
- 3) is an edible fungus. It has no chlorophyll and cannot produce its own food.
- 4) The sick and spiny leaves of the tree make it difficult to climb, even for a monkey.
- 5) is a plant that is usually found near the sea.



H. Read about us and identify us.

[3 × 1 = 3 M]

1) I am one of the deadliest snakes found in South Africa. I kill by coiling around my prey so tightly that it cannot breathe.

B _ A
C _ _ S _ _ IC _ _



2) I am covered in an armour made of hardened skin. My name means 'little armoured one' in Spanish.

A _ MA _ _ L _ _



3) We are known for our black and white stripes ! We are found in Africa. We often greet each other by nose - to - nose contact. We can also communicate with each other using calls and facial expressions. __ _ B _ A



I. Match the following persons with the awards they have won. [6 × 1 = 6 M]

- | | | |
|------------------------|--------|--|
| 1) Rabindranadh Tagore | () | a) Miss Universe |
| 2) Aishwarya Rai | () | b) Padma Bhushan |
| 3) Sushmitha Sen | () | c) Grammy Award for Best song composed for a motion picture. |
| 4) Mother Teresa | () | d) Nobel Prize for Literature. |
| 5) Aamirkhan | () | e) Nobel Prize for peace. |
| 6) A.R. Rehman | () | f) Miss World |

J. Fill in the blanks with the correct name of plants. You will find the name of plants in the help box. [6 × 1 = 6 M]

Amla, Rubber, Indigo, Cotton, Henna, Neem

- 1) The sap of this tree is used to make tyres, erasers, slippers etc.
- 2) This plant is a soft, fluffy staple fiber that grows in a ball. Cotton clothes are made from this plant.
- 3) The anti-bacterial properties of this tree are used for making bathing soaps and toothpastes.
- 4) This tree produces green fleshy fruit which is rich in vitamin C and is used as hair conditioner.
- 5) We get a cooling effect from the leaves of this plant. The leaves display an orange colour when crushed and applied on hands.
- 6) A blue dye is produced from the leaves of this plant.

K. Read the questions and answer them. [4 × 1 = 4 M]

- 1) Which of these places is one of the most important pilgrimage destination for Jains ?
 a) Madurai b) Tanjore c) Shravanabelgola
- 2) Which of the following is not a popular language in South India ? ()
 a) Tulu b) Telugu c) Dogri
- 3) In which state are the Jog Falls located ? ()
 a) Tamilnadu b) Karnataka c) Kerala
- 4) The Onam festival is celebrated in honour of ()
 a) Mahabali b) Rama c) Tirupati ()





SUMMATIVE ASSESSMENT - II

Class - 4 :: Vikram General Knowledge

Syllabus :
Text Book : (1 to 41 Lessons)
Page No's. 7 - 57

50

Time : 2½ Hours

Max.Marks : 50

Vikram
Text Book - 4

Name :

Section :

Roll No.

A. Name the measuring instruments that help you in the following fields.

[5 × 1 = 5 M]

Lactometer, Audiometer, Stethoscope, Barometer, Thermometer

1) Respiratory sound

2) Hearing

3) Specific gravity of milk

4) Air pressure

5) Temperature

B. Unscramble the letters to get the correct words.

[5 × 1 = 5 M]

- (MILEA) is a system for sending and receiving messages electronically over a computer network.
- A computer's (RDHA KISD) is the main storage area for programs, documents and other files.
- A (WOBRSER) is a program that allows you to view websites on the internet.
- The machinery and electronic parts of a computer are together called (DHWAERAR).
- (OLEGOG) is the most popular and most widely used search engine that allows us to search for information on the internet.

C. Match the following diseases with the parts they affect.

[5 × 1 = 5 M]

Diseases		Affected part
1) Cataract	()	a) Lungs
2) Jaundice	()	b) Legs
3) Pneumonia	()	c) eye
4) Rheumatism	()	d) Liver
5) Polio	()	e) Joints

D. Find the answers to the following questions using the help box. [4 × ½ = 2 M]

Passport, Peahen, Pigeon, Pronoun

1) An International identity card.

2) Bird used for carrying messages in olden days.

3) The masculine gender of this bird is peacock.

4) The word used instead of a noun.

E. Read the descriptions and write the names of authors.

[4 × 1 = 4 M]

Munshi PremChand, Jawaharlal Nehru, R.K. Narayan, Khuswant Singh

1) He was the creator of Swami and his friends.

2) His real name was Dhanpat Rai Sri Vastava. The famous film Shatranj ke Khiladi was based on his novel.

3) Though Kashmiri by birth, all his literary works were in English. Bharat ek Khoj, the famous TV serial was based on his writing discovery of India.

4) His newspaper column, with malice towards one and all is still popular with the readers.

F. Read the descriptions and write the names of these women who are famous for their achievements in politics. [4 × 1 = 4 M]

Bidhya Devi Bhandari, Indira Gandhi, Benazir Bhutto, Pratibha Devi Singh Patil

1) She was the first woman Prime Minister of India. She was the daughter of Pt. Jawaharlal Nehru, the first Prime Minister of Independent India.



2) She is the second and current President of Nepal and Commander in Chief of Nepalese army. She is the first to hold the office.



3) She is the first woman President of India. A lawyer by profession, she is a former deputy Chairperson of the upper house of Parliament, the Rajya Sabha.



4) She was the Prime Minister of Pakistan and the first woman to be elected head of a Muslim country in modern times.



G. Read the information about the human body parts and identify each body part and label it correctly. [5 × 1 = 5 M]

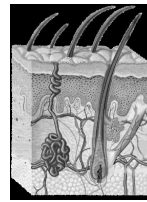
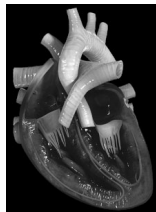
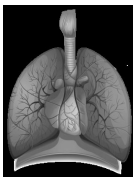
a) This organ pumps blood through our body.

b) The organ that controls our body.

c) This organ helps us breath.

d) Glands that help to cool the skin.

e) They carry messages between the brain and other parts of the body.



Lungs

Heart

Brain

Sweat glands

Nerves

H. Write the meaning of the following idioms and phrases. Pick your answer from the help box. [4 × 1 = 4 M]

Very poor, very rapidly, success and failure during one's life, To work very well

1) Ups and downs of life






2) To work like a charm

3) From hand to mouth

4) By leaps and bounds

I. Given below is a list of countries that had achieved independence from colonial rule. Unscramble the names of their colonizers and write them in the blanks.

[5 × 1 = 5 M]

Country		Independence day	Freedom attained from
1) Algeria		5 July 1962	CNRAEF _____
2) Cuba		20 May 1902	TIEDNU ESATST _____
3) Finland		6 December 1917	SRIUAS _____
4) Myanmar		4 January 1948	TUIEND DKIONMG _____
5) Peru		28 July 1821	ASIPN _____

J. Write the names of the inventors who invented the following. [4 × 1 = 4 M]


1) Antiseptic

2) Insulin

3) Penicillin

4) Cholera vaccine


5) Thermometer




Louis Pasteur



Frederick Banting



Galileo Galilei



Alexander Fleming




Joseph Lister


K. Look at the pictures and write their location. You may take help from the help box. [4 × 1 = 4 M]

New Delhi, Allahabad, Mumbai, Ahmedabad

1.




2.



3.




4.




L. Read the description and identify the following dinosaur. [3 × 1 = 3 M]

Compsognathus, Tyrannosaurus, Stegosaurus


1)



2)



3)







SUMMATIVE ASSESSMENT - III

Class - 4 :: Vikram General Knowledge

Syllabus :
Text Book : (1 to 57 Lessons)
Page No's. 7 - 74

50

Time : 2½ Hours

Max.Marks : 50

Vikram
Text Book - 4

Name :

Section :

Roll No.

A. Circle the odd one out.

[6 × ½ = 3 M]

- 1) Mother, Friend, Brother, Daughter
- 2) Red, Dark, Blue, Green
- 3) Hill, mountain, Pond, Plateau
- 4) Apple, Mango, Cabbage, Orange
- 5) Tortoise, Crab, Frog, Fish
- 6) Lake, Forest, Ocean, River

B. Look at the pictures and read the description given beside them. Identify the natural disasters and write their names below each picture. Pick your answer from the Help box.

[4 × 1 = 4 M]

Flood, Tsunami, Earthquake, Cloud burst

1)



2)



3)



4)



C. i) Match the country with which the following meals are associated.

[4 × ½ = 2 M]

- | | | |
|-------------|-----|--------------|
| 1) Malaria | () | a) Pancrease |
| 2) Typhoid | () | b) Bronchi |
| 3) Diabetes | () | c) Spleen |
| 4) Asthma | () | d) Intestine |


ii) Match the following artists which the art they are related to [4 × ½ = 2 M]

- | | | |
|-------------------------|-----|------------------|
| 1) Sudha Chandran | () | a) Sarod Maestro |
| 2) M.F. Hussain | () | b) Actress |
| 3) Ustad Amjad Ali Khan | () | c) Bharatanatyam |
| 4) Kajal Agarwal | () | d) Painter |


iii) Match the following diseases with the parts they affect. [6 × ½ = 3 M]

- | | | |
|------------------|-----|----------------|
| 1) Uttappam | () | a) Germany |
| 2) Rice and Fish | () | b) Thailand |
| 3) Pizza | () | c) Afghanistan |
| 4) Hamburger | () | d) India |
| 5) Kabab | () | e) Italy |
| 6) Red curry | () | f) Bangladesh |


iv) Match the pictures given below with the Phobia they describe. [4 × ½ = 2 M]

- 1)  () a) Mysophobia


fear of spiders

- 2)  () b) aerophobia

fear of water

- 3)  () c) hydrophobia

fear of germs and dirt

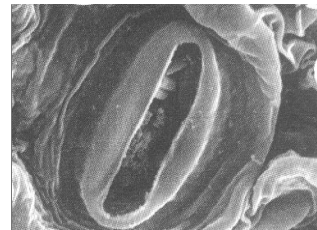



- 4)  () d) arachnophobia

fear of being on an airplane

D. Read the description and fill in the blanks with the correct answer. You may take help from the help box. [4 × 1 = 4 M]



Canopy, Stomata, Mimosa, Rubber



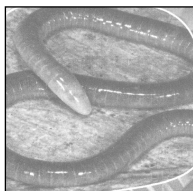
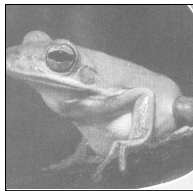
- 1) is so named from the movements of its leaves that 'mimic' animal sensitivity. Usually most species of this plant are herbs; some are woody climbers and few are trees. They are often prickly.
- 2) People grow trees mainly for their fluid, called latex. After a cut is made in the bark, latex flows out of the cut which is collected by the farmers in a cup. It is used to make sheets of rubber for making tyres, hoses, shoe soles and balls.
- 3) A is a dense group of trees that constitute a more or less continuous layer of plants. These trees whose top meet horizontally form. A solid green cover.
- 4) There are many pores on the surface of the leaf known as In most plants these pores are open all day and are closed all night. Their main function is to allow carbon dioxide and oxygen to move in and out of the leaf.

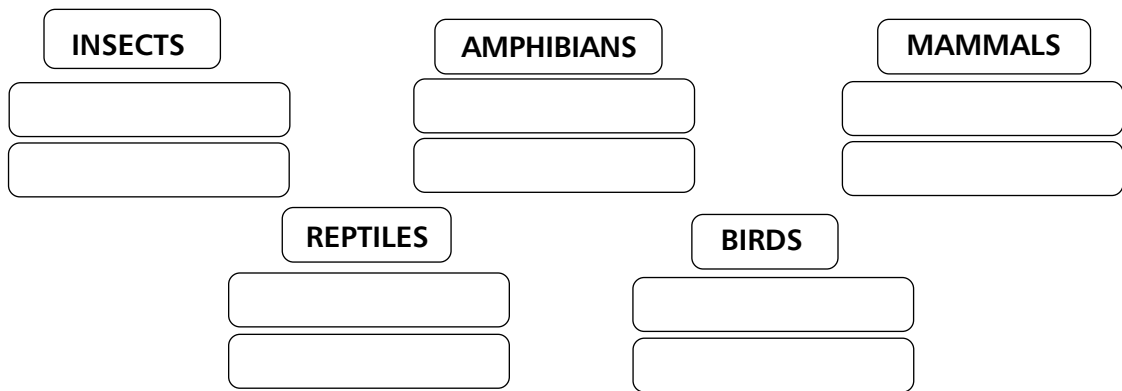


E. There are many types of animals. Some of them are birds, insects, reptiles, amphibians and mammals. Write their names in its suitable category.

[10 × ½ = 5 M]







F. There are many birds that inspite of having wings do not fly. These birds prefer to swim or run. Some birds have flippers instead of wings. [4 × 1 = 4M]

Rhea, Lyall's wren, Dodo, Kakapo


1) It is an extinct flightless bird of Mauritius.




2) It is the largest nocturnal parrot of New Zealand that lives on the ground but is a good climber.



3) This is a large flightless bird with three-toed feet found in South Africa.



4) It is the world's smallest flightless song bird.




G. Fill in the following sentences after selecting the correct word from the given options. [4 × ½ = 2M]

- 1) We (peel/ peal) the cucumber with a knife.
- 2) A man uses a (razor / raiser) to shave his beard.
- 3) Her face became (pale / pall) because of fear.
- 4) The king was very (rude / root) and arrogant.

H. Complete the crossword with the specialists of different fields. Select your answers from the help box. [5 × 1 = 5 M]

Geologist, Ecologist, Astronomer, Ornithologist, Pathologist



Across :

- 1) One who specialises in the history of the Earth.
- 4) One who studies diseases and their diagnosis.
- 5) One who studies birds.

Down :

- 2) One who studies how animals and plants interact with their environment.
- 3) One who studies stars, planets and galaxies.

I. Read the clues and fill in the letters to name the sports. [5 × 1 = 5 M]

1) It is played on horseback.

			O
--	--	--	---

2) Tiger woods plays this game.

			F
--	--	--	---

3) It is played with a curved stick and a ball.

H					
---	--	--	--	--	--

4) Vishwanathan Anand is the world champion of this indoor sport.

	H			
--	---	--	--	--

5) For this sport you need a pool.

	w			M		
--	---	--	--	---	--	--

J. i) Write the group of letters which will come next in the following series.

1) MNOP NOPM OPMN [6 × ½ = 3 M]

2) ABCD DABC CDAB

ii) What is the next number in the series ?

3) 9456 6945 5694

4) 8327 3278 2783

iii) Complete the series by filling the blanks.

5) a) 30 b) 45 c) d) e) 90

6) a) 20.50 b) 30.50 c) d) e) 60.50

K. Read the statements given below and write True or False to find out how good friend you are. [4 × ½ = 2 M]

1) You can call your friend an idiot because she / he does not do well in class.

2) A good friend shares a secret with you. _____

3) You should share your happy and sad moments with your friends. _____

4) If your friend is sad you should go out and play with someone else. _____

L. Given below are pictures of some wonders of natural world. Read the descriptions and name these places. Select your answer from the help box. [4 × 1 = 4 M]

Superior lake, Amazon, Himalayas, Victoria

1) It is the largest river in the world in terms of the volume of water it contains. It is located in South America. It flows through Brazil, Peru, parts of Bolivia, Ecuador, Colombia and Venezuela. _____



2) It is the largest freshwater lake in the world by surface area. It is the largest, coldest and the deepest of the five great lakes of North America. It lies between the United States and Canada.



3) It is the largest lake in Africa. It is bordered by Kenya, Tanzania and Uganda.



4) It is the highest mountain range in the world. It stretches for about 2,500 km from west to east. Most of it lies in China, India, Nepal and Bhutan.

