

**B**

C-19

VIKRAM

GENERAL KNOWLEDGE

Question Papers

with Lesson Plan

CLASS - 2**Formative Assessment : I****Formative Assessment : II****Formative Assessment : III****Formative Assessment : IV****Summative Assessment : I****Summative Assessment : II****Summative Assessment : III****Total Pages : 36**


Note : These Question Papers are meant for students, using Vikram Text Books and Summative Assessment Papers are also complement for schools. The price of Rs. 2/- against Formative Assessment Papers also charged nominally towards transportation and handling charges only and to avoid misuse/wastage.

Total : 1 Set**No. of Students : 1**

LESSON PLAN

CLASS : 2

	Months	Vikram General Knowledge
		Lessons
FA – I	June – July	Lessons : 1 – 5
FA – II	August	Lessons : 6 – 10
SA – I	September	Lessons : 1 – 13
FA – III	October – November	Lessons : 14 – 23
SA – II	December	Lessons : 1 – 27
FA – IV	January – February	Lessons : 28 – 37
	March	Revision
SA – III	April	Lessons : 1 – 41



FORMATIVE ASSESSMENT - I

Class - 2 :: Vikram General Knowledge

Syllabus : (1 - 5 Lessons)

Text Book :

Page No's. 7 - 13

25

Time : 1 Hour

Max.Marks : 25

Vikram
Text Book - 2

Name :

Section :

Roll No.

- A. Can you find their names by reading its clue ? You may take help from the Help Box given below. [5 × 1 = 5 M]

Mountain, Desert, River, Forest, Island

1. A large stream of water flowing over land.



2. A large area of land covered with shrubs and trees.



3. A very high range of land often covered with snow.



4. An island or isle is any piece of sub-continental land that is surrounded by water.



5. A large area of this land covered with sand. Camel is ship of this.



B. Read the clues and write the correct name of these plants. You may take help from the Help Box. [8 × 1 = 8 M]

Rubber, Sugar Cane, Coconut, Banana, Sunflower, Mushroom, Wheat, Neem

1. We get sugar from it. We drink its juice also.



2. They are capped with an umbrella top and some of them are delicious to eat.



3. We get flour from it. We make bread and chapati from this plant.



4. When we cut bark of this tree we get milky fluid flows out from it. This fluid is used to make eraser, tyres and so on.



5. This tree leaves are used toward off insects. We get many medicines from it.



6. The stem of the flower can grow up to 3 meters tall, with a flower head that can be 30 cm wide. Cooking oil is made from the seeds of its flowers.



7. Every part of this tree can be used. Its leaves are used as plates.



8. We get oil from it. The trunk of this tree used to make furniture and we eat its fruit also.



C. Look at the pictures and write their name. You may take help from the Help Box.

[7 × 1 = 7 M]

Water Caltrop, Water Wheel Plant, Eel Grass, Quillwort, Fanwort, Lotus, Hydrilla.

1.



2.



3.



4.



5.



6.



7.




D. Write one example for each plant.

[5 × 1 = 5 M]

Rose, Mint, Mango, Pumpkin, Pea

1. Tree :
2. Shrubs :
3. Herb :
4. Creepers :
5. Climbers :





FORMATIVE ASSESSMENT - II

Class - 2 :: Vikram General Knowledge

Syllabus : (6 - 10 Lessons)

Text Book :

Page No's. 14 - 19

25

Time : 1 Hour

Max.Marks : 25

Vikram
Text Book - 2

Name :

Section :

Roll No.

A. Look at the pictures and write the correct sound of these animals. You may take help from Help Box. [6 × 1 = 6 M]

Bow-Wow, Buzz, Meow, Hiss, Quack-Quack, Moo

1.



2.



3.



4.



5.



6.



B. Look at the pictures and read its clues to identify the insect name. You may take help from the Help Box. [6 × 1 = 6 M]

Ladybird, Housefly, Mosquitoes, Silkworm, Honeybees, Grasshopper

1. They feed on the bugs that destroy our plants.



2. They are used as the primary producer of silk.



3. They do not bite.



4. They hide in the grass because their colour helps them meld into the background.





5. They produce honey.



6. The females suck our blood and they are



C. The babies are searching for their parents. Help the babies to reach their respective parents. [6 × 1 = 6 M]

1.



a)



2.



b)



3.



c)



4.



d)



5.



e)



6.




f)




D. Look at the pictures and write their food name here. You may take help from the Help Box.

[7 × 1 = 7 M]

Nuts, Insects, Fish, Bamboo, Milk, Meat, Bone





FORMATIVE ASSESSMENT - III

Class - 2 :: Vikram General Knowledge

Syllabus : (14 - 23 Lessons)

Text Book :

Page No. 26 - 38

25

Time : 1 Hour

Max.Marks : 25

**Vikram
Text Book - 2**

Name :

Section :

Roll No.

A. Answer the following riddles.

[3 × 1 = 3 M]

1. What should be broken before you can use it ?

2. What has a thumb and four fingers but is not alive ?


3. It starts out tall, but the longer it stands, the shorter it grows. What is it ?

B. Write the group names for these following. You may take help from the Help Box.

[6 × ½ = 3 M]

Ants, Sheep, Fish, Dolphins, Lions, Monkeys

1.



A Colony of

2.



A Shoal of

3.



A School of

4.



A Troop of

5.



A Flock of

6.



A Pride of

C. Write another homophone in the given space. You may take help from the Help Box. [6 × ½ = 3 M]

Won, Fare, Night, Bear, Damn, Weight

1. One 2. Fair
3. Bare 4. Knight
5. Wait 6. Dam

D. Fill in the blanks. You may take help from the Help Box. [3 × 1 = 3 M]

Good Friday, Lava and Kusha, 14

1. What were the names of the twin sons of Rama and Sita ?
2. On which day do Christians remember the death of Jesus ?
3. How many years lord Rama lived in forest ?

E. Look at the pictures of country people and write their native names. You may take help from the Help Box. [3 × 1 = 3 M]

Chinese, Mexicans, Russians, Guineas

1. 

China

2. 

Russia



3.



Mexico

F. Look at the pictures and read the clues to find their names. You may take help from the Help Box. [4 × 1 = 4 M]

Dolly, Neil Armstrong, A.R. Rehman, George Washington


1. An American astronaut stepped on the moon on July 20, 1969.



2. the lamb, was the first cloned animal.



3. was the first president of the USA.



4. is a great Musician / Singer from India. He has also won an Oscar Award.



G. Look at the pictures and write their capital name. You may take help from the Help Box. [3 × 1 = 3 M]



1.

United Kindom

London, Paris, New Delhi, Rome

.....



2.



India

.....

3.



France

.....

H. Write the names of the following places. You may take help from the Help Box.

[3 × 1 = 3 M]

Sahara Desert, Pacific Ocean, Vatican City

1.



Largest Ocean

2.




Largest Hot Desert

3.



Smallest Country





FORMATIVE ASSESSMENT - IV

Class - 2 :: Vikram General Knowledge

Syllabus : (28 - 37 Lessons)

Text Book :

Page No's. 44 - 55

25

Time : 1 Hour

Max.Marks : 25

Vikram
Text Book - 2

Name :





Section :

Roll No.

A. Look at the Traffic Signs and name them. You may take help from the Help Box.

[4 × 1 = 4 M]

No Parking, U - turn, No horn Please, School ahead

1. 
2. 
3. 
4. 

B. Fill in the blanks.

[4 × 1 = 4 M]

1. How many letters are there in the English Alphabet ?

2. To stop a train, we use which coloured flag ?

3. How many sides are there in a triangle ?

4. How many wheels are there in an Autorickshaw ?

C. Write the correct number in each blank according to the pattern. $[4 \times \frac{1}{2} = 2 \text{ M}]$

1.

3	6		12	15	18
---	---	--	----	----	----

2.

11	22	33		55	66
----	----	----	--	----	----

3.

120	100	80		40	20
-----	-----	----	--	----	----

4.

10	15	20	25		35
----	----	----	----	--	----

D. Name the following Sports women. You may take help from the Help Box.

$[4 \times 1 = 4 \text{ M}]$

P.V. Sindhu, Saina Nehwal, Mary Kom, Sania Mirza

1.



2.



3.



4.



E. Look at these cartoon characters and name them. You may take help from the Help Box. [5 × 1 = 5 M]

Chhota Bheem, Tom and Jerry, Doraemon, Ben 10, Mickey Mouse

1.




2.



3.



4.



5.



F. Name the pictures in each set. The first letters of the names will give you a game word. Write it in the blank. [3 × 1 = 3 M]


1.



2.



3.



G. Strike out the letters to find the name of some famous movies. [3 × 1 = 3 M]

1. Movies about Dinosaurs.

Strike out the letter Q. _____



J Q U Q Q R Q A Q S Q S Q I Q C Q Q P Q Q A Q R Q Q Q K Q Q Q

2. Movie about the Lion cub named 'Simba'.

Strike out the letter P. _____



L P I P O P N P P P K P P P I P N P P G


3. Movie about 'Panda'.

Strike out the letter O. _____



K O U O N O G O F U O P A O N O D O A O O





SUMMATIVE ASSESSMENT - I

Class - 2 :: Vikram General Knowledge

Syllabus : (1 - 13 Lessons)

Text Book :

Page No's. 7 - 25

50

Time : 2½ Hours

Max.Marks : 50

Vikram
Text Book - 2

Name :


Section :

Roll No.


A. Look at the pictures of the Presidents of India. Name them with the help of Help Box. [7 × 1 = 7 M]

Pratibha Patil, Zakir Husain, Rajendra Prasad, Neelam Sanjiva Reddy, A.P.J Abdul Kalam, Sarvepalli Radhakrishnan, Pranab Mukherjee


1.



2.



3.



4.



5.



6.



7.



B. Look at the pictures and write their name. You may take help from the Help Box. [8 × 1 = 8 M]

Red Fort, Meenakshi Temple, Victoria Memorial Hall, Taj Mahal, India Gate,
Mysore Palace, Lotus Temple, Charminar

1.



2.



3.



4.



5.



6.



7.



8.



C. Look at the pictures and write the name of the state. You may take help from the Help Box. [5 × 1 = 5 M]

Jammu and Kashmir, Gujarat, Punjab, Kerala, Tamil Nadu

1.



2.




3.



4.



5.



D. Read the clues and write the correct name of these plants. You may take help from the Help Box. [4 × 1 = 4 M]

Henna, Cotton, Coconut, Wheat

1. We use this plant for making clothes. Its clothes are mostly use in summer.



2. We get reddish brown dye from this plant. It is also used to colour hair, hands, fingernails and fabric.



3. We get flour from it. We make bread and chapati from this plant.



4. We get oil from it. The trunk of this tree used to make furniture and we eat its fruits also.



E. Can you find their names by reading its clue ? You may take help from the Help Box given below. [3 × 1 = 3 M]

Valley, Mountain, Forest

1. A large area of land covered with shrubs and trees.....



2. A very high range of land often covered with snow.



3. A low area between hills, often with a river running through it.
.....



F. Look at the pictures and write their names. You may take help from the Help Box.


[3 × 1 = 3 M]

Giant water lily, Marsilea, Water Wheel Plant

1.



2.



3.



G. Write two examples for each plant. You may take help from the Help Box.

[10 × 1/2 = 5 M]

Rose, Money plant, Mango, Watermelon, Mint, Cotton, Neem,
Pumpkin, Spinach, Bean

1. Creepers :

2. Climbers :

3. Trees :



4. Herb :

5. Shrubs :

H. Look at the pictures and write the correct sound of these animals. You may take help from the Help Box.

[5 × 1 = 5 M]

Neigh, Chirp-Chirp, Cluck-Cluck, Hiss, Quack-Quack



I. Look at the pictures and write their food name here. You may take help from the Help Box. [5 × 1 = 5 M]

Green chilli, Grass, Honey, Carrot, Banana



J. Look at the pictures and read its clues to identify the insects name. You may take help from the Help Box. [5 × 1 = 5 M]

Housefly, Mosquitoes, Silkworm, Termites, Honeybees

1. They feed on wood and destroy buildings.



2. They produce honey.



3. They do not bite.




4. They are used as the primary producer of silk.



5. The females suck our blood and they are often carriers of diseases.






SUMMATIVE ASSESSMENT - II

Class - 2 :: Vikram General Knowledge

Syllabus : (1 - 27 Lessons)

Text Book :

Page No's. 7 - 43



Time : 2½ Hours

Max.Marks : 50

Vikram
Text Book - 2

Name :

Section :

Roll No.

A. Here are some clues for those words which are starts from Letter 'T'. Read the clues and identify their names. You may take help from the Help Box.

[6 × 1 = 6 M]

TOY, TORTOISE, TRAIN, TRUCK, TIME, TABLE

1. Used to load goods in it.

--	--	--	--	--	--

2. We eat our dinner on dining.

--	--	--	--

3. We like to play with it.

--	--	--

4. Do your homework on

--	--	--	--

5. This animal moves too slow.

--	--	--	--	--	--	--	--


6. Need to go one place to another place.

--	--	--	--	--

B. Look at the pictures of inventors and match them with their famous inventions.

[4 × 1 = 4 M]


1.



Charles Babbage

Airplane

3.



Thomas Edison

Computer


2.



Wright Brothers
(Orville and Wilbur)

Electric Bulb

4.



James Watt

Steam Engine

C. Look at the pictures and read the clues to identify these tools. You may take help from the Help Box. [4 × 1 = 4 M]

Axe, Scissors, Hammer, Screwdriver

1. A wood cutter uses it to cut down tree.

2. A mason uses it to break things or hitting nails.

3. A mechanic uses it to drive a screw into place or remove it.

4. A tailor uses it for cutting cloth. _____



D. Look at the pictures and write the correct sound of these animals. You may take help from the Help Box. [3 × 1 = 3 M]

Moo, Meow - Meow, Buzz

1.



2.



3.



E. These babies are searching for their parents. Help the babies to reach their respective parents. [4 × 1 = 4 M]

1.



a)



2.



b)



3.



c)



4.



d)




F. Look at the pictures and write their capital name. You may take help from the Help Box given. [3 × 1 = 3 M]


Baghdad, Rome, Dhaka



Italy



Iraq



Bangladesh

G. Write the names of the following places. You may take help from the Help Box. [3 × 1 = 3 M]

Russia, Nile River, Arctic Ocean

1. Largest Country



2. Smallest Ocean



3. Longest River



H. Write another homophone in the given space. You may take help from the Help Box. [5 × 1 = 5 M]

Roll, Add, Ley, To, Pale

1. Ad
2. Lay
3. Role
4. Too
5. Pail

I. Write the group names for these following. You may take help from the Help Box. [3 × 1 = 3 M]

Chicks, Wolves, Bees

1. A clutch of _____



2. A Swarm of _____



3. A pack of _____



J. Read the clues and write the correct name of these plants. You may take help from the Help Box. [4 × 1 = 4 M]

Mushroom, Neem, Sugar Cane, Henna

1. They are capped with an umbrella top and some of them are delicious to eat.

2. We get reddish brown dye from this plant. It is also used to colour hair, hands, finger nails and fabric.

3. This tree leaves are used to ward off insects. We get many medicines from it.

4. We get sugar from it. We drink its juice also

K. Look at the pictures and write their food name here. You may take help from the Help Box. [4 × 1 = 4 M]

Carrot, Meat, Fish, Bone

1.





2.



3.



4.



L. Look at the pictures and find their name. You may take help from the Help Box.

[4 × 1 = 4 M]

Golden Temple, Qutub Minar, Sun Temple, Khajuraho Temple

1.



2.



3.





4.




M. Look at the pictures and read the clues to find their names. You may take help from the Help Box. [3 × 1 = 3 M]


Louise Brown, Martin Luther King Jr, Yuri Gagarin

1.  , was the youngest person to win the Nobel Peace Prize in the year 1964.

2.  is the first test tube baby.

3.  of USSR was the first man to land in space on April 12, 1961.





A. Match the pictures that go together by drawing lines with different crayon colours.

[5 × 1 = 5 M]

1.



a)



2.



b)



3.



c)



4.



d)



5.



e)




B. Look at the pictures and write their action words. You may take help from the Help Box.

[6 × ½ = 3 M]

Crying, Reading, Writing, Drinking, Eating, Laughing

1.



2.




3.



4.



5.



6.



C. Identify the people shown below by looking at their uniforms. You may take help from the Help Box. [5 × 1 = 5 M]

Policeman, Nurse, Sweeper, Advocate, Postman



D. Name the pictures in each set. The first letters of the names will give you a new word. Write it in the blank. [4 × 1 = 4 M]

1.



2.



3.



4.



E. Here is some number pattern. Write the correct number in each blank according to the pattern. [2 × ½ = 1 M]

1.

2.

F. Fill in the blanks. [3 × 1 = 3 M]

1. While working on a computer, do you use a mouse or a rat ?


2. Which is the largest 3-digit number ?


3. Name the lizard which can change its colour according to its surroundings.

G. Look at the Traffic Signs and name them. You may take help from the Help Box.

[3 × 1 = 3 M]


Steep hill ahead, Railroad crossing, Bridge ahead








H. Fill in the boxes of the crossword with the names of sports shown in the pictures. [5 × 1 = 5 M]



I. Name the pictures in each set. The first letters of the names will give you a game word. Write it in the blank. [2 × 1 = 2 M]

1.








2.






J. Look at these cartoon characters and name them. You may take help from the Help Box. [5 × 1 = 5 M]

Donald Duck, Popeye, Bugs Bunny, Dexter, Daffy Duck

1.  2.  3.  4.  5. 

K. Name the following Sports women. You may take help from the Help Box. [3 × 1 = 3 M]

Anju Bobby George, Sakshi Malik, P. V. Sindhu

1.  2.  3. 




L. Write the answer of these questions. You may take help from the Help Box. [3 × 1 = 3 M]

Earth, Pluto, Venus

1. Planet between Mercury and Earth is : _____
2. The third nearest planet to the Sun is : _____
3. Planet which is excluded from the Solar System is : _____

M. Look at the pictures of the Presidents of India. Name them with the help of Help Box. [3 × 1 = 3 M]

Ram Nath Kovind, Neelam Sanjiva Reddy, Varaha Venkata Giri

1.  2.  3. 

N. Can you find their names by reading its clue ? You may take help from the Help Box given below. [4 × ½ = 2 M]

Desert, River, Forest, Island

1. A large area of this land covered with sand. Camel is ship of this.

2. An island or isle is any piece of sub-continental land that is surrounded by water.

3. A large stream of water flowing over land.

4. A large area of land covered with shrubs and trees.

O. Look at the pictures and read its clues to identify the insects name. You may take help from the Help Box. [4 × ½ = 2 M]

Grasshoppers, Honeybees, Silkworm, Lady birds

1. They produce honey.

2. They are used as the primary producer of silk

3. They hide in the grass because their colour helps them meld into the background.

4. They feed on the bugs that destroy our plants.

P. Answer the following riddles.

[2 × ½ = 1 M]

1. Timmy's mother had three children. The first was named April, the next was named May. What was the name of the third child.

2. What has a thumb and four fingers but is not alive ?



