



C-18

RAINBOW TERM BOOK

CLASS - 3

Question Papers

with Lesson Plan

- ❖ English
- ❖ Mathematics
- ❖ Nature World (EVS)
- ❖ General Knowledge

Formative Assessment : I

Formative Assessment : II

Formative Assessment : III

Formative Assessment : IV

Summative Assessment : I

Summative Assessment : II

Summative Assessment : III

Total Pages : 96

Note : These Question Papers are meant for students, using Rainbow Termbooks. Summative Exam papers are as complement for schools. The price of Rs. 5/- against Formative Exam papers also charged nominally towards transportation and handling charges only and to avoid misusage/wastage.

Total : 1 Set

No. of Students : 1

LESSON PLAN

RAINBOW CLASS : 3 TERM BOOKS

	Months	Subjects			
		English	Mathematics	EVS	General knowledge
<u>Term – 1</u>					
FA – I	June – July	Lessons : 1, 2	Chapter : 1	Lessons : 1, 2	Lessons : 1 – 5
FA – II	August	Lesson : 3	Chapters : 2, 3	Lessons : 3, 4	Lessons : 6 – 10
SA – I	September	Lessons : 1 – 4	Chapters : 1 – 4	Lessons : 1 – 6	Lessons : 1 – 15
<u>Term – 2</u>					
FA – III	Oct. – Nov.	Lessons : 1, 2	Chapters : 1, 2	Lessons : 1 – 4	Lessons : 1 – 10
SA – II	December	Lessons : 1 – 4	Chapters : 1 – 4	Lessons : 1 – 6	Lessons : 1 – 15
<u>Term – 3</u>					
FA – IV	Jan. – Feb.	Lessons : 1, 2	Chapters : 1 – 3	Lessons : 1 – 4	Lessons : 1 – 7
	March		Revision		
SA – III	April	Lessons : 1 – 4	Chapters : 1 – 5	Lessons : 1 – 6	Lessons : 1 – 12



FORMATIVE ASSESSMENT - I

Class - III :: Vikram Rainbow English

25

Time : 1 Hour

Max.Marks: 25

Name :

Section :

Roll No.

I. Tick (✓) the right answer.

[2 x ½ = 1M]

1) In which plant did sparrows stuck their beaks and had water ?

- a) Red rose b) Cactus c) Sunflower

2) Which one of these flowers was proud of its beauty ?

- a) Lotus b) Sunflower c) Red rose

II. "Who said these statements and to whom ?

[3 x 1 = 3M]

1) "What a beautiful flower it is ! I wish, I were also so beautiful."

2) "Look at this ugly plant full of thorns!"

3) "Do not be so sad, we cannot have everything."

III. Fill in the blanks with the help of the words given in the box.

[6 x 1 = 6M]

appreciation, thorns, spring, cactus, insulting, purpose

1) The season had arrived.

2) The red rose heard its from pine tree.

3) The red rose had as well.

4) The red rose gave remarks on cactus.

5) The sparrows got water from the

6) Nothing in this world has been created without a

IV. Identify whether the following sentences are simple / Interrogative / Imperative / Exclamatory and write in the given space. [5 x 1 = 5M]

- 1) Some children are very naughty
- 2) Alas! He has lost his wallet
- 3) Where are your books ?
- 4) Wash your hands before every meal.
- 5) Where do you live ?

V. Answer the following questions. [5 x 2 = 10M]

- 1) How does the face of little maiden look like ?
- 2) What kind of voice has the little maiden ?
- 3) What is the name of the little maiden described in the poem ?
- 4) Why did the red rose look angrily at the pine tree ?
- 5) What did the cactus advise the red rose ?

FORMATIVE ASSESSMENT - I

Class - III :: Vikram Rainbow Mathematics

25

Time : 1 Hour

Max.Marks: 25

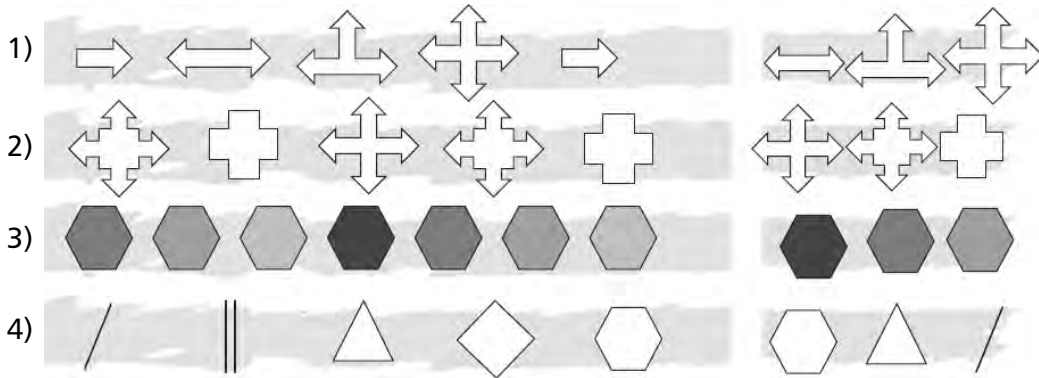
Name :

Section :

Roll No.



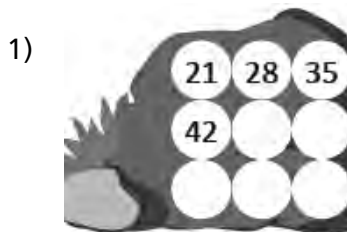
I. Circle the shape which will complete the pattern in the following pictures.

[4 x 1 = 4M]

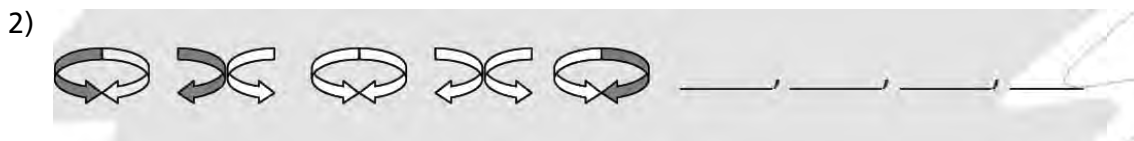


II. Recognise the rule of the following number patterns and complete the patterns.

[6 x 2 = 12M]



III. The following patterns follow a certain rule. Recognise the rule and complete the patterns. [3 x 3 = 9M]





FORMATIVE ASSESSMENT - I

Class - III :: Vikram Rainbow

Nature World (EVS)

25

Time : 1 Hour

Max.Marks: 25

Name :

Section :

Roll No.

I. Answer the following questions.

[5 x 2 = 10M]

1) Why is the brain called the 'master organ of the body ?'

Ans. _____

2) How are the lungs useful to us ?

Ans. _____

3) What is a single-parent family ?

Ans. _____

4) What is a family tree ?

Ans. _____

5) What makes a family ?

Ans. _____

II. Tick (✓) the correct answer.

[4 x 1 = 4M]

1) Two children born at the same time are called

twins

cousins

siblings

2) Our family is our first

park

market

school

3) Which part of our body has the brain ?

Head Neck Chest

4) Which organ pumps blood to all parts of our body ?

Brain Heart Liver

III. Tick (✓) the body parts that you can move and (x) that you can not. [8 x ½ = 4M]

- | | |
|-------------------------------|----------------------------------|
| 1. Eyes <input type="radio"/> | 2. Tongue <input type="radio"/> |
| 3. Skin <input type="radio"/> | 4. Fingers <input type="radio"/> |
| 5. Ears <input type="radio"/> | 6. Hair <input type="radio"/> |
| 7. Legs <input type="radio"/> | 8. Hands <input type="radio"/> |

IV. Write True or False.

[3 x 1 = 3M]

1. We learn values and manners from our family.
2. There are many members in a small family.
3. Caring and Sharing make a family happy.

V. Choose the correct words.

[4 x 1 = 4M]

1. We cannot see in light / dark
2. An adult has twenty / thirty-two teeth.
3. The chest is the front / back Part of our body.
4. The head is the uppermost / lowermost part of the body.



FORMATIVE ASSESSMENT - I

Class - III :: Rainbow General Knowledge

25

Syllabus :
Term 1 (Lessons 1 to 5)
Page No. 116 - 122

Time : 1 Hour

Max.Marks: 25

Name :

Section :

Roll No.

I. Write the name of these plants. You may take help from the help box.

[5 x 1 = 5M]

Roridula, Moccasins, Tropical Pitcher, Venus Flytrap, Triphyophyllum

1) I am a plant. I attract insects with my sweet scent. I am a



2) I am a plant. I capture insects with my sticky hairs. I am a

3) I am a plant. I produce long, sticky, "glandular" leaves that attract, capture and digest insects. I am a _____



4) I am a plant. I capture and eat those insects that come near to me. I am a _____

5) I am a plant. I eat not only insects, but small lizards, amphibians, and even mammals. I am a _____



II. Read the descriptions and write the tree name. Take help from the help box.

[5 x 1 = 5M]

Mango, Jamun, apple, Coconut, Neem, Banana

1) This tree bears purple fruits. It can help to strengthen our bone, make our skin healthy and control blood pressure and diabetes

.....



2) This tree is grown in Kashmir and Himachal Pradesh. Eat this fruit regularly to keep the doctor away.



3) The fruit of this tree is yellow and green in colour. Monkeys love to eat it.

4) The fruit of this tree is green. We drink the sweet and cold water inside it.



5) The fruit of this tree is very sweet. It is called the king of fruits.

III. Which part of the following plants do we eat ? Write 'L' for leaves, 'S' for seeds, 'F' for flowers, 'R' for roots in the box. [10 x 1 = 10M]

1)



2)





3)



4)



5)



6)



7)



8)



9)



10)



IV. Look at the pictures of plants and write their habitats. Pick your answer from the help box.

[5 x 1 = 5M]

Desert, Ponds, Swamps, Beaches, Dampsoil

1)



2)



3)



4)



5)





FORMATIVE ASSESSMENT - II

Class - III :: Vikram Rainbow English

25

Time : 1 Hour

Max.Marks: 25

Name :

Section :

Roll No.

I. Write 'T' for true statements and 'F' for false ones.

[4 x ½ = 2M]

- 1) Deepak belonged to a well-off family.
- 2) Deepak was an intelligent and honest student.
- 3) Every student was happy of Deepak's outstanding performance.
- 4) Abhishek, Vishnu and Udit were Deepak's good friends.

II. Fill in the blanks.

[5 x 1 = 5M]

enrolled maximise well-off mason friends

- 1) Naveen was a
- 2) Deepak was in a private school.
- 3) In order to her family income, Sarika also began to work.
- 4) Deepak had a few in the class.
- 5) All students except Deepak belonged to a family.

III. Define the following words.

[4 x 1 = 4M]

- 1) Florist : _____
- 2) Carpenter : _____
- 3) Hairdresser : _____
- 4) Optician : _____

IV. Fill in the blanks with the correct personal pronouns given in the brackets.

[3 x 2 = 6M]

- 1) Suman has (his / her) own flat in Delhi but (he / she) lives in another flat.

2) Ramesh has many friends. (them / they) are very good and often help (them / him) in need.

3) (I / My) have bought a chair but didn't notice that one of (its / her) arm is broken.

V. Answer the following questions.

[4 x 2 = 8M]

1) How much money did Naveen earn a day ?

2) Why did Deepak not go to school till the age of 5 years ?

3) Why was Deepak's application form for admission rejected ?

4) Why were Abhishek, Vishnu and Udit jealous of Deepak earlier ?



FORMATIVE ASSESSMENT - II

Class - III :: Vikram Rainbow Mathematics

25

Syllabus :
Term 1 (Lessons 2 & 3)
Page No. 42 - 59

Time : 1 Hour

Max.Marks: 25

Name :

Section :

Roll No.

I. Do as directed.


[6 x 1 = 6M]

- 1) Write the number for one thousand and ninety
- 2) Write the number name of 2873
- 3) Write the place and face value of the digit six in the given number 1692
- 4) Use $>$, $<$ or $=$
7645 7045
- 5) Write the smallest number by using the given digits 6, 4, 5, 1
- 6) Write the Roman Numeral for 10

II. Do as directed.

[5 x 2 = 10M]

- 1) Arrange the following numbers in ascending order.
9873, 9738, 9837, 8973
- 2) Arrange the following numbers in descending order.
1865, 1657, 2755, 2677
- 3) Fill in the missing digits. Also express the number on an abacus.



5459 = thousands + hundreds + tens +ones

4) Write the greatest and the smallest numbers by using the given digits.

a) 4, 8, 2, 3

b) 7, 4, 1, 0

5) Write the Indo-Arabic Numeral for the following Roman Numeral.

IX

XIX

XV

XX

III. Do as directed.

[3 x 3 = 9M]

1) Write the Roman Numeral for the following Indo-Arabic Numeral.

17

13

8

50

1000

500

2) Write the next ten numbers for

a) 3990

b) 8888

3) Write the five preceding numbers for

a) 4001

b) 3768



FORMATIVE ASSESSMENT - II

Class - III :: Vikram Rainbow

Nature World EVS

25

Time : 1 Hour

Max.Marks: 25

Name :

Section :

Roll No.

I. Answer the following questions.

[4 x 2 = 8M]

1) What is a balanced diet ?

Ans. _____

2) Why do we need food ?

Ans. _____

3) Why should we keep our house neat and clean ?

Ans. _____

4) What are pucca houses made of ?

Ans. _____

II. Complete the words.

[3 x 1 = 3M]

1) S _ _ _ _ is very rich in roughage.

2) Most of our food comes from P _ _ _ _ _ .

3) Food gives us e _ _ _ _ _ to work and play.

III. Tick (✓) the correct answer.

[4 x 1 = 4M]

1) Rangoli is very popular in

Haryana

Punjab

Kerala

2) A very tall building is called a

Palace

fort

Sky scraper

3) Grow foods are rich in

fats proteins minerals

4) Go foods are rich in

vitamins proteins Carbohydrates

IV. Match the following columns.

[5 x 1 = 5M]

Animals

Shelters

- | | | |
|-----------|-----|-------------|
| 1. Lion | () | a. burrow |
| 2. Rabbit | () | b. hive |
| 3. Bees | () | c. ant hill |
| 4. Bird | () | d. den |
| 5. Ants | () | e. nest |

V. Write the methods of cooking of the following food items.

[5 x 1 = 5M]

1. Cake _____
2. Corn _____
3. Samosa _____
4. Dosa _____
5. Idli _____

FORMATIVE ASSESSMENT - II

Class - III :: Rainbow General Knowledge

25

Syllabus :

Term 1 (Lessons 6 to10)

Page No. 123 - 129

Time : 1 Hour

Max.Marks: 25

Name :

Section :

Roll No.

I. Identify them by looking their body parts. Fill in the missing letters to get the names of these animals. [5 x 1 = 5M]

1)



STRIPES

T _ _ _ R

2)



HORNS

C _ _ W

3)



PAWS

C _ _ _

4)



POUCH

K _ _ G A _ _ _

5)



FUR

B _ _ A _

II. Read the clues and write the correct insect name. [5 x 1 = 5M]

[5 x 1 = 5M]

Housefly, Mosquito, Bee, Caterpillar, Cricket

1) Related to the grasshopper, it eats both plants and other insects. Its name is also the name of a sport.



2) This insect dances in a figure of eight pattern. Its sting is in its tail. The male is called a drone.

3) It is a tiny plant eating creature. It hatches from eggs laid on plants by the mother insect. It changes into a colourful insect.



4) It a small thin insect. If the female insect bites you, you may inflicted with malaria.

5) This insect breeds in garbage heaps. It is also a carrier of the cholera germ.



III. Here are some animals that are amazing in many ways. Identify them and write their names.

[5 x 1 = 5M]

1) This intelligent animal belongs to the family of apes and is very similar to man. _____



2) This animal can swim as well as run fast. It has strong paws and sharp claws to catch seal, fish and other prey. It is found in the Arctic region.

3) This animal is also known as Tibet's beast of burden. It has long hair all over its body. _____



4) This animal lives in underground tunnels that it buids for itself.

5) This sea animal has a horse shaped head and armored plates all over its body. _____



IV. Look at the pictures and write (R) for reptiles and (A) for amphibian write their name. [5 x 1 = 5M]

Snake, Tortoise, Lizard, Frog, Crocodile











V. Read the question and answer them with the help of pictures. [5 x 1 = 5M]

1) Which bird was used to carry messages from one place to another in olden days ?



2) Which animal has longest life ?

3) Which animal loves carrots and lives in burrow ?
.....



4) Which animal carries babies in its pouch ?

5) Which is the largest land animal ?





FORMATIVE ASSESSMENT - III

Class - III :: Vikram Rainbow English

25

Time : 1 Hour

Max.Marks: 25

Name :

Section :

Roll No.

I. Write 'T' for true and 'F' for false statements.

[4 x ½ = 2M]

- 1) The king of Udaipur got the judgement seat flown to his court.
- 2) The shepherd boy passed the judgement in such a strange voice that other boys were little frightened.
- 3) The angles asked the king to sit on the seat if he was worthy.
- 4) The credit for origin of 'Vikram Samvat' goes to the shepherd boy.

II. Fill in the blanks.

[5 x 1 = 5M]

- 1) There was a land in the village.
- 2) What is this, full of, we have no to stand and
- 3) "No, I am not", said the king.
- 4) The judgement was just and well by the concerned disputants.
- 5) Vikramaditya was well-known for his

III. Match the words that go together.

[6 x ½ = 3M]

- | | |
|--------------|-------------|
| 1. a long | a. cutter |
| 2. a wild | b. river |
| 3. a sun | c. message |
| 4. a wood | d. mango |
| 5. a juicy | e. rises |
| 6. an urgent | f. elephant |

IV. Look at the pictures and fill in the blanks with action words.

[5 x 1 = 5M]

1) My father is to office.



2) Sachin is the kite.

3) Rajini is with her doll.



4) The girl is

5) The boy is the horse.



V. Answer the following questions.

[5 x 2 = 10M]

1) Where did the shepherd boys take their cows to graze ?

2) What did the shepherd boy do after sitting on the mound ?

3) Why did the first angel ask the king not to sit on the seat ?

4) What did the second angel say ?

5) Who took the judgement seat away ?



FORMATIVE ASSESSMENT - III

Class - III :: Vikram Rainbow Mathematics

25

Time : 1 Hour

Max.Marks: 25

Name :

Section :

Roll No.

I. Do as directed.

[6 x 1 = 6M]

1) $243 - 0 = \dots\dots\dots$

2) $6841 - 1 = \dots\dots\dots$

3) 23

$\times 2$

4) $4 \times 1000 = \dots\dots\dots$

5) $1 \times \dots\dots\dots = 379$

6) 3333

$\times 3$

II. Do as directed.

[5 x 2 = 10M]

1) 5245

$(-) 2367$

2) Subtract 2389 from 3500

3) 128×9

4) 3569

$\times 8$

5) Write 12th table.

III. Do as directed.

[3 x 3 = 9M]

1) Rajesh earns ₹ 9500 per month. His monthly expenses amount to ₹ 7860. How much money is he able to save every month ?

2) 2 7 4

$$\begin{array}{r} \times \quad 78 \\ \hline \\ \hline \end{array}$$


3) On Teacher's Day, 8 children gave flowers to the their class teacher. Each gave 5 flowers. How many flowers has the teacher got ?



FORMATIVE ASSESSMENT - III

Class - III :: Vikram Rainbow

Nature World (EVS)



25

Syllabus :
Term 2 (Lessons 1 to 4)
Page No. 87 - 109

Time : 1 Hour

Max.Marks: 25

Name :	Section :	Roll No.
---------------	------------------	-----------------

I. Answer the following questions. [4 x 2 = 8M]

1) Why do birds have hollow and light bones ?

Ans. _____

2) Why do you need means of transport ?

Ans. _____

3) What do you understand by 'Means of Communication' ?

Ans. _____

4) Differentiate between indoor games and outdoor games.

Ans. _____

II. Tick (✓) the correct answer. [4 x 1 = 4M]

1) Which of the following birds cannot fly ?

Parrot Ostrich Pigeon

2) Which is the fastest means of transport ?

Train Ship Aeroplane

3) We can send printed messages through a

radio telephone fax machine

4) Playing games keep us

sad active sick

III. Name the bird that :

[4 x 1 = 4M]

- 1) Makes its nest in the hollow of a trees.
- 2) Collects pebbles and stones to make a nest.
- 3) Weaves grass in and out to make its nest.
- 4) Collect a few sticks to make a cup-shaped nest.

IV. Which means of transport would you choose to go from your house to the following places ? Write in the blanks.

[5 x 1 = 5M]

- 1) Market
- 2) School
- 3) Nani's house
- 4) Across a river
- 5) Across the sea

V. Write two examples of each of the following.

[4 x 1 = 4M]

- 1) Indoor games
- 2) Outdoor games



FORMATIVE ASSESSMENT - III

Class - III :: Rainbow General Knowledge

25

Syllabus :

Term 2 (Lessons 1 to 10)

Page No. 123 - 135

Time : 1 Hour

Max.Marks: 25

Name :

Section :

Roll No.

I. The following names are about continents and oceans. Fill in the missing letters with correct answers. [6 x 1 = 6M]

CONTINENTS

OCEANS

1) S _ U _ HA _ _ R _ C _

1) P _ C _ F _ _ _ C _ A _

2) A _ _ IC _

2) _ N _ I _ _ _ C _ A _

3) E _ _ O _ _

3) SO _ T _ E _ N _ _ E _ _

II. Look at the pictures of foods fondly eaten by different countries and write their names. [3 x 1 = 3M]

Potato chips, Masala Dosa, cholicrab

1) India



2) Singapore



3) United Kingdom

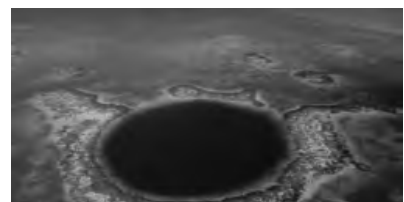


III. Read the descriptions and name the places using the help box given below.

[3 x 1 = 3M]

Amazon, Sahara, Pacific ocean

1) The deepest ocean.....



2) The largest River by volume.....



3) The biggest hot desert.....



IV. Look at the pictures of some great authors and write their books below each pictures. [3 x 1 = 3M]

Gitanjali, The golden Threshold, The Discovery of India

1) Sarojini Naidu.....



2) Jawaharlal Nehru.....



3) Rabindranath Tagore.....



V. Read the clues, identify the books and write their names in the blanks. Pick your answer from the help box. [3 x 1 = 3M]

Attendance Register, Diary, Dictionary

1) This book give meanings of words

2) This is used by teacher to mark you presence of absence

3) This book is used to record our daily activities



VI. Write full form of the abbreviations given below. You may take help from the help box. [3 x 1 = 3M]

United States of America, Very Important Person, Do It Yourself

- 1) D.I.Y.
- 2) U.S.A.
- 3) VIP.

VII. A few sets of words are given below. Each set of words can be grouped together under one name. Try to give one word common to each sets, using the help box.

[4 x 1 = 4M]

Fruits, Jewellery, Vegetables, Games

- | | | | |
|-----------|--------|----------|-------|
| 1) Chess | Ludo | Carrom | |
| 2) Potato | Onion | Cabbage | |
| 3) Apple | Mango | Orange | |
| 4) Earing | Bangle | Necklace | |





FORMATIVE ASSESSMENT - IV

Class - III :: Vikram Rainbow English

25

Time : 1 Hour

Max.Marks: 25

Name :

Section :

Roll No.

I. Fill in the blanks.

[5 x 1 = 5M]

- 1) The little boy began to when he saw all the men were busy in pulling the cow.
- 2) The painter's clothes were with yellow, pink and green colour.
- 3) Nikunj found an and took it to school.
- 4) Tapu tasted the and liked very much.
- 5) The milkman, in fit of, hit his pet cow.

II. Who said these statements and to whom ?

[3 x 1 = 3M]

- 1) "Put it on the mat, dear."
- 2) "Your name is Tapu."
- 3) "White on grey does not look good".

III. Fill in the blanks with the correct phrasal verbs.

[2 x 1 = 2M]

- 1) The flight will at 7:00 p.m.
- 2) Today, we have to the solution of this problem.

IV. 1) Rewrite these sentences using short forms.

[2 x 1 = 2M]

- a) You are not my friend.
- b) It is my pet.

2) Fill in the blanks with the helping verbs of simple past and future tense.

[3 x 1 = 3M]

- a) Last night, the dogs barking loudly.
- b) I there at this time tomorrow.
- c) you present yesterday ?

V. Answer the following questions.

[5 x 2 = 10M]

- 1) Why did Tapu like living at the school ?
- 2) How did the city council people help Tapu ?
- 3) Why was milkman's cow in a bad mood ?
- 4) How is milk helpful to children ?
- 5) Name all the people who pulled the cow.



FORMATIVE ASSESSMENT - IV

Class - III :: Vikram Rainbow Mathematics

25

Syllabus :
Term 3 (Lessons 1 to 3)
Page No. 35 - 73

Time : 1 Hour

Max.Marks: 25

Name :

Section :

Roll No.

I. Fill in the blanks.

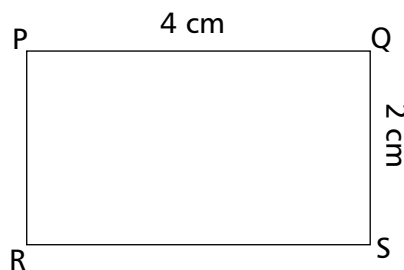
[6 x 1 = 6M]

- 1) A has no vertex and no edge.
- 2) 1 kg = g
- 3) 1 Hour = minutes
- 4) 1 Day = hours
- 5) A has only a curved surface.
- 6) Identify the shape of chalk box

II. Do as directed.

[5 x 2 = 10M]

- 1) Use a scale and pencil to draw the following segments.
 - a) 8 cm
 - b) 10 cm
- 2) Find the perimeter of the following figure.



3) kg g

5 291

(+) 4 568

4) l ml

9 053


(-) 7 164

- 5) Convert the following into hours 5 days 14 hours.

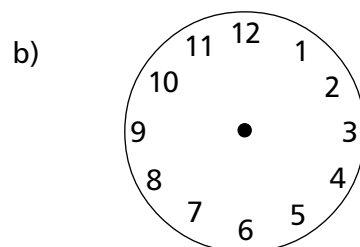
III. Do the following sums.

[3 x 3 = 9M]

- 1) Draw the hour and minute hand for the following clock faces to show the given time.



10 minutes past 5



20 minutes to 6

- 2) A bag containing rice, sugar and flour weighs 15kg. The weight of rice is 8kg 23g and that of flour is 5kg. What is the weight of sugar ?

- 3) Arrange in columns and add.

65 km 305 m ; 7km 3m ; 213 km 39 m



FORMATIVE ASSESSMENT - IV

Class - III :: Vikram Rainbow

Nature World (EVS)

25

Time : 1 Hour

Max.Marks: 25

Name :

Section :

Roll No.

I. Answer the following questions.

[4 x 2 = 8M]

1) How is a plan different from a map ?

Ans. _____

2) Why do animals need food ?

Ans. _____

3) Why do we wear clothes ?

Ans. _____

4) Why do we celebrate Republic day ?

Ans. _____

II. Tick (✓) the correct answer.

[4 x 1 = 4M]

1) Which is the most common dress for women ?

Saree Frock Lehanga

2) Which one is an omnivore ?

Horse Bear Sheep

3) The top of a map shows the

north south west

4) When did India become an independent country ?

1947 1960 1975

III. Match the following columns.

[5 x 1 = 5M]

Festivals		States
1. Bihu	()	a. West Bengal
2. Baisakhi	()	b. Assom
3. Pongal	()	c. Punjab
4. Onam	()	d. Tamilnadu
5. Durga puja	()	e. Kerala

IV. Choose the correct word.

[5 x 1 = 5M]

- 1) The Sun rises in the (east / west).
- 2) We can locate places with the help of (time / directions).
- 3) There are only primary colours (three / four).
- 4) People of wear colourful turbans (Bihar / Punjab).
- 5) Nurses and doctors wear (white uniforms / black uniforms).

V. Who am I.

[3 x 1 = 3M]

- 1) I have a long trunk. E_____
- 2) I chew the cud. C___
- 3) I have a long sticky. F___



FORMATIVE ASSESSMENT - IV

Class - III :: Rainbow General Knowledge

25

Syllabus :
Term 3 (Lessons 1 to 7)
Page No. 135 - 142

Time : 1 Hour

Max.Marks: 25

Name :	Section :	Roll No.
---------------	------------------	-----------------

I. Names of some cups and trophies are given below. Write the name of the sports they are associated with. Take help of help box. [3 x 1 = 3M]

Football, Badminton, Cricket

- 1) Thomas cup
- 2) ICC World cup
- 3) FIFA cup

II. Fill in the balnks with the words given in the box. [3 x 1 = 3M]

Andy Murray, USA, England

- 1) Where was the first cricket world cup held ?
- 2) Who won the wimbledon Men's singles title in 2016 ?
- 3) Which country does the Olympian legend Michael phelps belongs to ?

III. Every sports have their unique symbol. Write what the following symbols stand for. You may take help from the help box. [3 x 1 = 3M]

Cycling, Boxing, Diving

1)



2)





3)



IV. Look at the pictures given below and write the name of sports. Choose your answer from the help box. [2 x 1 = 2M]

Shooting, Football

1) 

2) 

V. Read the clues and answer them. You may take help from the help box.

[5 x 1 = 5M]

Singer, Security, Director, Producer, Make-up Artist

1) He invests money.



2) He instructs the actor.

3) He / She sings songs for actor



4) She applies make-up

5) He keeps star's fans off on the set.





VI. Tick (✓) the correct option.

[5 x 1 = 5M]

1) Sometimes / Always share your toys with your guest.



2) Welcome a guest with a knife / smile.



3) Never / Always forget to offer a glass of water



4) Never / Always ask your guest for a drink : tea, coffee, cold drink etc. and serve / not serve accordingly.



5) Talk politely / rudely and do / donot misbehave with your guest.

VII. Here are some useful tips for minor injuries. Match the following injuries with correct useful tips. [4 x 1 = 4M]

1) Finger cut



a) Give water with a little salt and sugar in it. Make the person be down in a cool place.

2) Heat stroke



b) Pinch the nose and hold it for 78 minutes till the bleeding stops. Wrap ice in a handkerchief and apply it to the nose.

3) Minor burn



c) Wash the cut, apply an antiseptic cream and cover it with a plaster or bandage to keep it clean.

4) Nose bleeding



d) Cool burns with cold water or ice and keep them clean and apply ointment.





SUMMATIVE ASSESSMENT - I

Class - III :: Vikram Rainbow English

50

Time : 2½ Hours

Max.Marks: 50

Name :

Section :

Roll No.

I. Tick (✓) the right answer.

[5 x ½ = 2½M]

1) Where did judges listen the complaints of people ?

- a) Market place b) Panchayat c) Village

2) Who did not belong to well-off family ?

- a) Udit b) Deepak c) Vishnu

3) In which plant did sparrows stuck their beaks and had water ?

- a) Red rose b) Cactus c) Sunflower

4) Who told the teacher about the loathsome act done by Abhishek, Vishnu and Udit ?

- a) Deepak b) Pankaj c) Manish

5) What was fixed to the bell when the rope was broken out ?

- a) Branches of tree b) Cotton Threads c) Grapevine

II. Write 'T' for true statements and 'F' for false statements.

[5 x ½ = 2½M]

- 1) Atri is the big town in Italy.
- 2) Judges had a grapevine fixed to the bell.
- 3) Deepak belonged to a well-off family.
- 4) Deepak was an intelligent and honest student.
- 5) Judges saw a donkey pulling the grapevine.

III. Fill in the blanks with the correct phrasal verbs.

[5 x 1 = 5M]

- 1) People who wanted to, rang the bell.
- 2) Deepak was in a private school.
- 3) The red rose heard its from pine tree.

- 4) The sparrows got water from the
- 5) The horse had his master welll for years.

IV. Who said these statements and to whom ? [5 x 1 = 5M]

- 1) "What a beautiful flower it is! I wish, I were also so beautiful."
- 2) "Do not be so sad, we cannot have everything."
- 3) "Why do you say so? In this garden, there are many beautiful flowers. You are only one of them."
- 4) "Look at this ugly plant full of thorns!"
- 5) "Yes, but the cactus does not like to see any birds be in pain."

V. Write the opposite of these words. [6 x ½ = 3M]

- 1) Ugly _____
- 2) Happy _____
- 3) Few _____
- 4) Praising _____
- 5) Cool _____
- 6) Proud _____

VI. Fill in the blanks with appropriate words from the brackets. [5 x 1 = 5M]

- 1) The divers dived at once in the (sea / see)
- 2) How much does this pumpkin ? (weigh / way)
- 3) A is held in our village every summer. (fare / fair)
- 4) We lots of ice-creams and chocolates. (eight / ate)
- 5) Can you solve this ? (some / sum)

VII. Define the following words. [2 x 1 = 2M]

- 1) Archaeologist : _____
- 2) Optician : _____

VIII. 1) Write the comparative and superlative degrees of the following. [5 x 1 = 5M]

Positive	Comparative	Superlative
a) Good	_____	_____

- b) Long _____
- c) Cheap _____
- d) Young _____
- e) Hot _____

2) Fill in the blanks with the correct personal pronouns given in the brackets.

[2 x 1 = 2M]

- a) Have (they / you) called ? (you / me) Sorry, (he / I) was listening music.
- b) (I / We) are the students of class third and driving a campaign of planting plants in (my / our) neighbourhood areas.

3) Identify whether the following sentences are simple / Interrogative / Imperative / Exclamatory and write in the given space. [3 x 1 = 3M]

- a) What a poor boy !
- b) Where are your books ?
- c) Drink plenty water.

IX. Answer the following questions.


[5 x 3 = 15M]

- 1) How does the face of little maiden look like ? What is the name of the little maiden described in the poem ?
- 2) What made the red rose felt ashamed ?
- 3) Why were Abhishek, Vishnu and Udit jealous of Deepak earlier ?
- 4) Whom did the horse belong to ? Why did he not take care of his horse ?
- 5) What did the judges decide ? Was the decision in the favour of horse ?



SUMMATIVE ASSESSMENT - I

Class - III :: Vikram Rainbow Mathematics



Syllabus :
Term 1 (Lessons 1 to 4)
Page No. 37 - 74

Time : 2½ Hours

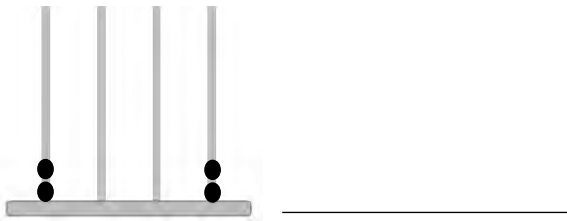
Max.Marks: 50

Name :	Section :	Roll No.
---------------	------------------	-----------------

I. Do as directed.

[10 x 1 = 10M]

- 1) $4597 + 1591 = \dots\dots\dots + 4597$
- 2) $783 + \dots\dots\dots + 4169 = \dots\dots\dots + 241 + 4169$
- 3) $6435 + 0 = 0 + \dots\dots\dots$
- 4) Write the number name of 8080
- 5) Write the number for six thousand four hundred twenty five
- 6) Write the number of the number shown on the abacus.




7) Use correct sign $<$, $>$ or $=$


$4044 \dots\dots\dots 4444$

8) Write the Roman numeral for 20

9) Circle the shape which will complete the pattern



10. Show the following number on an abacus



3521

II. Do as directed.

[5 x 3 = 15M]

1) Recognise the rule of the following number patterns and complete the patterns.

a)



b)



2) Arrange the following numbers in ascending order.

8006, 5522, 2525, 6008

6385, 5565, 5066, 4532

3) Arrange the following numbers in descending order.

a) 2769, 1834, 1572, 2813

b) 3086, 6308, 8603, 3860

4) a) H T O

5 4

7 3 5

(+) 6

b) T H H T O

6 7 2 7

(+) 1 2 4 6

5) a) H T O

6 2 4

4 3

(+) 1 5

b) T H H T O

3 5 7 4

(+) 2 3 5 8

III. Do as directed.

[5 x 4 = 20M]

1) Write in column form and add.

a) 409 + 38 + 105

b) 667 + 7 + 67

2) Add without regrouping using an abacus.

a) $3009 + 2780$

b) $8435 + 1344$

3) Add the following using an abacus

a) $3377 + 2266$

b) $7876 + 24$

4) Ramesh spends ₹ 9967 to buy a fridge and ₹ 5095 to buy a cooler. How much money did Ramesh spend ?

5) There are 4536 women and 5632 men in a village. How many people are there in the village ?

VI. Write the Roman Numerals for the following Indo - Arabic Numerals. [5M]

Indo - Arabic Numerals	Roman Numerals
13	
16	
10	
8	
7	
6	
50	
100	
500	
1000	



SUMMATIVE ASSESSMENT - I

Class - III :: Vikram Rainbow

Nature World (EVS)

50

Time : 2½ Hours

Max.Marks: 50

Name :

Section :

Roll No.

I. Answer the following questions.

[8 x 2 = 16M]

1) What are the various uses of water ?

Ans. _____

2) What is transpiration ?

Ans. _____

3) Why are stilt houses built on poles ?

Ans. _____

4) How are proteins helpful to our body ?

Ans. _____

5) When do members of a family meet with each other ?

Ans. _____

6) What is the main function of our mouth ?

Ans. _____

7) Why do plants have leaves ?

Ans. _____

8) Why cannot we use sea water ?

Ans. _____

II. Tick (✓) the correct answer.

[8 x 1 = 8M]

1) Glow foods are rich in

Proteins Vitamins Carbohydrates

2) If a family has only parents and their children, it is a

big family joint family small family

3) Taste buds are found on the

nose skin tongue

4) Which one is a Kachcha house ?

Hut Flat Bungalow

5) Which one is the solid form of water ?

Ice Steam Water vapour

6) Which plant does not contain chlorophyll ?

Rose Banana Mushroom

7) The tiny pores on the underside of a leaf are called

burrows stomata barks

8) The excess loss of water from our body may cause

cancer jaundice dehydration

III. Choose the correct words.

[8 x 1 = 8M]

1. People in live in huts. (cities / villages)
2. Monkeys and chimpanzees live on (poles / trees)
3. We should not water. (save / waste)
4. Plants need water for (growing / bathing)
5. Most leaves look (red / green)
6. Plants release during. (nitrogen / oxygen)
7. An adult has teeth. (twenty / thirty two)
8. We cannot see in (light / dark)



IV. Write the uses of the following leaves.

[3 x 1 = 3M]

- 1) Banana leaves
- 2) Leaves of henna
- 3) Coconut leaves

V. Write the methods of cooking of the following food items.

[5 x 1 = 5M]

- 1) Jilebi
- 2) Corn
- 3) Samosa
- 4) Dosa
- 5) Idli

VI. Write True or False.

[3 x 1 = 3M]

- 1) All twins look alike
- 2) We should respect our elders
- 3) There are many members in a small family

VII. Tick (✓) the body parts that you can move and cross (x) that you cannot.

[4 x 1/2 = 2M]

- 1) Tongue
- 2) Skin
- 3) Hands
- 4) Ears

VIII. Complete the words.

[2 x 1 = 2M]

- 1) Children need a lot of P _____ .
- 2) Water helps in the d _____ of food.

IX. Match the following.

[3 x 1 = 3M]

- | | | |
|---------|-----|------------|
| 1. Ants | () | a. hive |
| 2. Bird | () | b. Anthill |
| 3. Bees | () | c. nest |





SUMMATIVE ASSESSMENT - I

Class - III :: Rainbow General Knowledge

50

Time : 2½ Hours

Max.Marks: 50

Name :

Section :

Roll No.

I. I lie in the North-East region of India. Read the clue and guess my name.

Choose your from the help box.

[5 x 1 = 5M]

Arunachal Pradesh, Meghalaya, Nagaland, Assam, Kaziranga National park

- 1) My name means 'the home of clouds' in Sanskrit. I am
- 2) I am the natural home of the one - horned Rhinoceros. I am
- 3) I am the largest state in the north-east region. I am
- 4) My capital is Kohima. I am
- 5) My major festival is Bihu. I am

II. Tick (✓) the right answer.

[5 x 1 = 5M]

1) What is the traditional name given to an Indian ice-cream ?

a. Buji ka halwa

b. Kulfi

c. Coot

d. Daal

2) What is an Indian home made cheese called ?

a. Dahi

b. Paneer

c. Ghee

d. Puri

3) What do you call a dish having rice and coconut as the main ingredients ?

a. Chawal

b. Masala Chawal

c. Palak Chawal

d. Naryal Chawal

4) Chapthi's are made from which flour ?

- a. Rice flour b. Maida
c. Wheat flour d. Dal powder

5) What is 'Ghee' ?

- a. A type of chutney b. A flour made of chickpeas
c. Clarified butter d. A vegetable grown in Orissa

III. In the part some Indian cities and states were known by other names. Also some places had special names. [10 x 1/2 = 5M]

i. Find their old names by help of the help box.

Poone, Baroda, Jubbulpore, Cochin, Madras

New names

Old names

- 1) Vadodara
2) Chennai
3) Pune
4) Kochi
5) Jabalpur

ii. Find out their special names by help of the help box.

Places

Special Names


- 6) Hyderabad
7) Amritsar
8) Lucknow
9) Srinagar
10) Jammu & Kashmir

City of Nawabs, City of lakes, Goldencity, Twin city, Heaven of India



IV. Look at the pictures of plants and write their habitats. Pick your answer from the help box. [3 x 1 = 3M]

Cool and moist areas, Hot and Humid, Ponds







V. Which part of the following plants do we eat ? Write 'L' for Leaves, 'S' for seeds, 'F' for flower, 'R' for roots and 'S' for stems in the box. [6 x 1 = 6M]



VI. Read the descriptions and write the tree name. Take help from the help box.

[4 x 1 = 4M]

Neem, Jamun, Mango, Apple

1) This tree is grown in Kashmir and Himachal Pradesh. Eat this fruit regularly to keep the doctor away.



2) The fruit of this tree is bitter. Its leaves are used for medicinal purpose.



3) The tree bears purple fruits. It can help to Strengthen our bone, make our skin healthy and control blood pressure and diabetes.



4) The fruit of this tree is very sweet. It is called the king of fruits.

VII. Write the name of these plants. You may take help from the help box.

[4 x 1 = 4M]

Moccasins, Roridula, Brocchinia Reducta, Venus Flytrap

1) I am a plant. I produce a sweet odor, which along with the UV rays, attract ants and other insects. I am a
.....





2) I am a plant. I capture and eat those insects that come near to me.
I am a



3) I am a plant. I capture insects with my sticky hairs. I am a
.....



4) I am a plant. I attract insects with my sweet scent. I am a
.....

VIII. Read the question and answer them with the help of pictures. [5 x 1 = 5M]

1) Which animal cannot be seen in snow because of its white fur ?
.....



2) Which reptile loves to eat frogs ?



3) Which reptile can change its colour ?



4) Which animal resembles human beings ?



5) Which animal is the greatest enemy of snake ?



IX. Identify them by looking their body parts. Fill in the missing letters to get the names of these animals ? [5 x 1 = 5M]



1) T _ _ _ _ _



2) S _ _ _ _



3) H _ _ _ _



4) L _ _ P _ _ _



5) E _ E _ A _ _

X. Write the name of these festivals. You may take help from the help box.

[3 x 1 = 3M]

Durgapuja, Shivaratri, Urs

1) It is celebrated during the month of either February or March, depending upon the last of the Hindu month of phagun. Devotees of Lord Shiva come along to Mahadeo temple of Satpura Range.

Ans.

2) This festival is celebrated in Ajmer. It is celebrated at the dargah of sufi saint Khwaja Moinuddin chishti to commemorates his symbolic union with God.

Ans.

3) This is one of the largest and the most splendid festivals in the country. On this day, idols of Durga are taken in elaborate procession to be immersed in the river.

Ans.



IX. Read the clues and write the correct insect name.

[2 x 1 = 2M]

1) It is a flying champion. Millions of years ago it was as large as a bird. while resting, its wings are fully open .

.....



2) It is a small thin insect. If the female insect bites you, you may inflicted with malaria

XII. Look at the picture and write (R) for reptiles and (A) for amphibian with their names. [3 x 1 = 3M]

Turtle, chameleon, Salamander



1.

2.



3.





SUMMATIVE ASSESSMENT - II

Class - III :: Vikram Rainbow English

50

Time : 2½ Hours

Max.Marks: 50

Name :

Section :

Roll No.

I. Tick (✓) the right answer.

[5 x 1 = 5M]

1) Who got few bruises when tree knocked down by a storm ?

- a) Gardener b) Mr.Kamal c) Vanshika

2) Who are our real friends ?

- a) Animals b) Birds c) Trees

3) Who was well-known for his justice ?

- a) Vikramaditya b) Shepherd boy c) King

4) Was the king worthy to sit on the seat of king Vikramaditya ?

- a) Yes b) No c) Don't know

5) Which plants are used for making bags, ropes, carpets and pillows ?

- a) Rose and Jasmine plants
 b) Cotton and Jute plants
 c) Wheat and maize plants

II. Fill in the blanks.

[5 x 1 = 5M]

1) The flowers of small plants make our beautiful.

2) Trees give to people, birds and animals.

3) Vikramaditya was well-known for his

4) There was a land in the village.

5) No time to wait till her can. Enrich that her eyes began.

III. Who said these statements and to whom ?

[5 x 1 = 5M]

1) "I don't like trees."

2) "They are our real friends. You like jam, marmalade and fruit salad, don't you ?

- 3) "How do trees purify the air ?".
- 4) "They give us oxygen and take carbondioxide."
- 5) "Now I have come to know how useful trees and plants are. We should plant more and more trees!"

IV. Some words can have more than one meaning. Read the following sentences carefully and write the words in the space provided. [4 x 1 = 4M]

- 1) main stem of a tree; large box with a lid for storing things
- 2) the first season of the year when new leaves and flowers grow; water that gushes out from the Earth
- 3) a space for playing some games like tennis; a buliding or room where a judge hears cases that are argued by lawyers
- 4) a sort of book where photographs are kept; a collection of songs on a CD

V. Write 'T' for true and 'F' for false statements. [3 x 1 = 3M]

- 1) The king of Udaipur got the judgement seat flown to his court.
- 2) The shepherd boy passed the judgement in such a strange voice that other boys were little frightened.
- 3) The credit for origin of 'Vikram Samvat' goes to the shepherd boy.

VI. Match the words that go together. [6 x ½ = 3M]

- | | |
|--------------|-------------|
| 1. a long | a. cutter |
| 2. a wild | b. river |
| 3. a sun | c. message |
| 4. a wood | d. mango |
| 5. a juicy | e. rises |
| 6. an urgent | f. elephant |

VII.1. Fill in the blanks with is / are / am. [5 x 1 = 5M]

- a) The teacher in the school.
- b) The lion and other animals in their cages.
- c) I not popular in my school.
- d) the children in the park ?
- e) This dog mad.

2. Look at the pictures and fill in the blanks with action words.

[5 x 1 = 5M]

a) The servant is bag for his master.



b) Sam is milk.

c) My mother is food in the kitchen.



d) The shopkeeper is his goods.

e) Sarvesh is in the pool.



VIII. Answer the following questions.

[5 x 3 = 15M]

- 1) How many serving men does the poet keep ? Name all of them.
- 2) When does the poet let the six men rest ? Why does the poet give the six men food to eat ?
- 3) What did the shepherd boy do after sitting on the mound ?
- 4) How do trees purify the air ?
- 5) What things do we get from trees ?



SUMMATIVE ASSESSMENT - II

Class - III :: Vikram Rainbow Mathematics

50

Syllabus :
Term 2 (Lessons 1 to 4)
Page No.29 - 84

Time : 2½ Hours

Max.Marks: 50

Name :

Section :

Roll No.

I. Do as directed.

[10 x 1 = 10M]

1) $\frac{3}{12}$ $\frac{4}{12} = \frac{7}{12}$ Fill in the box with the correct sign.

2) $\frac{1}{3}$ of 24 =

3) $\frac{5}{9} - \frac{3}{9} = \dots\dots\dots$

4) Tick (✓) the unit fractions in the following group.

$$\frac{2}{1}, \frac{1}{6}, \frac{3}{8}, \frac{1}{2}$$

5) $36 \div 6 \dots\dots\dots$

6) $29 \times \dots\dots\dots = 40 \times \dots\dots\dots$

7) $100 \times 100 = \dots\dots\dots$

8) $\dots\dots\dots - 0 = 2691$

9) $\quad\quad\quad 3000$

$\quad\quad\quad (-)2000$

10) $6841 - 1 = \dots\dots\dots$

II. Do as directed.

[5 x 3 = 15M]

1) Write 16th table.

2) Subtract 7215 from 9108

3) $\quad\quad\quad 68$

$\quad\quad\quad (\times)24$

4) Write the two division statements for the following multiplication statements.

a) $13 \times 3 = 39$

b) $5 \times 15 = 75$

5) $126 \div 9$

III. Do as directed.

[5 x 4 = 20 M]

1) Write the next five equivalent fractions.

a) $\frac{1}{5}$

b) $\frac{1}{8}$

2) a) Write the following fractions in descending order.

$$\frac{6}{7}, \frac{6}{10}, \frac{6}{11}, \frac{6}{9}, \frac{6}{8}$$

b) Write the fractions in ascending order.

$$\frac{2}{7}, \frac{5}{7}, \frac{3}{7}, \frac{6}{7}, \frac{4}{7}$$

3) 2096 apple trees are to be planted in rows. 8 saplings are to be planted in each row.

How many rows will there be ?

4) A box can hold 8 pencils. How many pencils are there in 24 boxes ?

5) An office spends ₹ 2367 on stationery, ₹ 7832 on electricity. How much more money is spent on electricity than on stationery ?

IV. Divide and complete the following table.

[5M]

Statement	Dividend	Divisor	Quotient	Remainder
1) $96 \div 5$				
2) $73 \div 6$				



SUMMATIVE ASSESSMENT - II

Class - III :: Vikram Rainbow

Nature World (EVS)

Time : 2½ Hours

Max.Marks: 50

50

Name :

Section :

Roll No.

I. Answer the following questions.

[8 x 2 = 16M]

1) Why should we not touch electrical gadgets with wet hands ?

Ans. _____

2) Who are orphans ? Why do they need an orphanage ?

Ans. _____

3) Why do birds build nests ?

Ans. _____

4) What are the advantages of the Internet ?

Ans. _____

5) Why should we follow the rules of the game ?

Ans. _____

6) What are the most commonly used fuels ?

Ans. _____

7) What do you understand by the term 'differently - abled people' ?

Ans. _____

8) Why should we not leave our toys and shoes on the floor ?

Ans. _____

II. Tick (✓) the correct answer.

[8 x 1 = 8M]

1) Which organ does not work properly in mentally challenged people ?

Heart Liver Brain

2) A visually challenged person cannot properly.

speak hear see

3) First aid is given to a/a

poor beggar injured

4) There are colours in the traffic light.

two three four

5) Which one is an outdoor game ?

Ludo Carrom Football

6) Which of the following services is not available these days ?

Courier Telegram Speedpost

7) Which city has metro rail service ?

Delhi Patna Chandigarh

8) Which bird does not make a nest ?

Crow Cuckoo Sparrow

III. Put the following means of transport into the proper columns. [12 x 1/2 = 6M]

Aeroplane	Ship	Car	Ferry	Steamer	Bicycle
Scooter	Boat	Bus	Train	Rocket	Helicopter

Means of Land transport	Means of Water transport	Mean of Air transport
1.	1.	1.
2.	2.	2.
3.	3.	3.
4.	4.	4.

IV. Write the following means of communication in the proper columns.

[6 x 1 = 6M]

telephone radio mobile newspaper television postcard

To send messages to an individual	To send messages to masses
1.	1.
2.	2.
3.	3.

V. Write two ways you can help these people.

[2 x 2 = 4M]

1) Old _____

2) Blind _____

VI. Write Yes or No.

[3 x 1 = 3M]

1) Do you get off a moving bus ?

2) Do you climb on desks ?

3) Do you cross the road at the Zebra crossing ?

VII. Choose the correct word.

[3 x 1 = 3M]

1) Professional players play games to earn (money / fame)

2) Outdoor games are exercise for our body. (good / bad)

3) Recreation makes us feel (tired / fresh)

VIII. From the sounds given below can you write which vehicle it is ? [4 x 1 = 4M]

1) Chhuk - Chhuk

2) Tup - Tup

3) Pon - Pon

4) Tring - Tring



SUMMATIVE ASSESSMENT - II

Class - III :: Rainbow General Knowledge

50

Syllabus :

Term 2 (Lessons 1 to15)

Page No. 123 - 140

Time : 2½ Hours

Max.Marks: 50

Name :	Section :	Roll No.
---------------	------------------	-----------------

I. Read these questions related to human body and answer them choose your answer from the help box. [5 x 1 = 5M]

Brain, Eyes, Nose, Heart, 2

- 1) How many lungs does the human body have ?
- 2) Which organ helps us to smell ?
- 3) Which is the master organ of our body ?
- 4) Which is the organ to sight ?
- 5) Which organ in our body pumps blood ?

II. The following names are about continents and oceans. Fill in the missing letters with correct answers. [6 x 1 = 6M]

Continents

Oceans

- 1) _ N _ _ R _ T _ _ A
- 2) A _ ST _ A _ I _
- 3) _ S _ A
- 4) _ _ R _ H _ M _ R _ C _

- 1) A _ C _ I _ _ C _ _ N
- 2) A _ L _ N _ _ CO _ _ _ N

III. Look at the pictures of foods fondly eaten by different countries and write their names. [4 x 1 = 4M]

Tacos, French Toast, Chickenparam, Somlam



- 1) Thailand
- 2) Australia



3) Mexico

4) Hongkong

IV. Read the descriptions and name the places using the help box given below.

[5 x 1 = 5M]


Chail, Burj Khalifa, Angel Falls, Vatican city, Mt Everest

1) The Tallest Man-made structure



2) The smallest country

3) The highest water fall



4) The highest Mountain peak

5) The highest cricket ground



V. Read the clues, identify the books and write their names in the blanks. Pick your answer from the help box.

[5 x 1 = 5M]

Cheque Book, Magazine, Pass Book, Atlas, Encyclopedia

1) This book shows our bank statement.

2) This book gives locations of places on maps.

3) This book gives information about various subjects.

4) This is printed every week, fortnight, month, quarter etc.

5) This book is used to deposit and withdraw money from bank.

VI. Look at the pictures of some great authors and write their books below each pictures. [3 x 1 = 3M]

The Story of my Experiments with Truth, The Jungle Book, The Faraway Tree

1) Rudyard kipling



2) Enid Blyton

3) Mahatma Gandhi



VII. Write full form of the abbreviations given below. You may take help from the help box. [4 x 1 = 4M]

Member of Parliament, United Kingdom, Vice President, Personal Assistant

1) U.K.

2) PA

3) MP

4) VP

VIII. A few sets of words are given below. Each set of words can be grouped together under one name. Try to give one word common to each set, using the help box.

[5 x 1 = 5M]

Stationery, Metals, Vehicles, Currency, Utensils

1) Yen Rupee Euro

2) Cups Plates Spoons

3) Silver Iron Gold

4) Pens Pencils Eraser

5) Cars Scooter Auto

IX. Solve the crossword with the help of clues

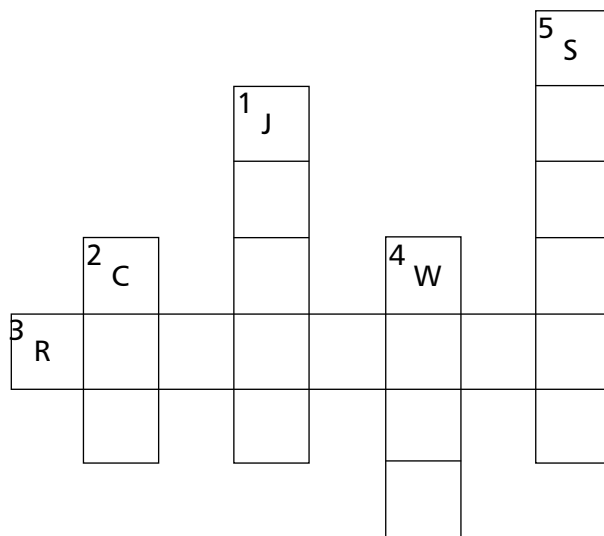
[5 x 1 = 5M]

Down :

- 1) A pair of denim trousers is also called a pair of
- 2) We wear this to protect our head from cold.
- 4) Sweaters are made of this material.
- 5) Pants but not full.

Across :

- 3) We wear it to protect from rain.



X. Identify the types of doctor. Whom we consult when we have problem with these body parts.

[3 x 1 = 3M]

Orthodontist, Dermatologist, Cardiologist

- 1) My grandfather often complains of extreme tiredness and discomfort in his chest. He consult to



- 2) I have crooked teeth. I consult to



- 3) My father has red rashes on his skin. He went to the

XI. Look at the following things and write the units in which they are measured. You may take help from the help box. [6 x ½ = 3M]

Litre, Dozen, Kilogram, Metre, Degree Centigrade, Newton



1) Temperature



2) Milk



3) Banana



4) Force



5) Cloth



6) Sugar

XII. We use different means of transport to move in land, air or water. Read the descriptions and match them with the means of transportation. [4 x ½ = 2M]

1) A common means of transportation in some mountain regions. It is used to carry tourists up and down a mountain.

a)



2) Commonly known as a space vehicle, it is shaped like a pen and has taken men to the moon.

b)



3) A high - speed train first made in Japan.

c)



4) A special kind of ship that can travel under water like a fish.

d)





SUMMATIVE ASSESSMENT - III

Class - III :: Vikram Rainbow English

50

Time : 2½ Hours

Max.Marks: 50

Name :

Section :

Roll No.

I. Tick (✓) the right answer.

[6 x ½ = 3M]

1) Who is the faithful companion of Nitin ?

- a) Bruzo b) Sethji c) Divya

2) What do CRY do to generate money during festival seasons ?

- a) Designing and selling of rangolis
 b) Designing and selling of cards
 c) Selling of sweets

3) Whose muscles were gleaming in the Sun ?

- a) Milkman b) Wrestler c) Ice cream man

4) What did come out of the box ?

- a) Big egg b) Small egg c) Baby dinosaur

5) How did Tapu make the city clean ?

- a) By eating all the garbage of city.
 b) By carrying all the garbage to another city.
 c) By sweeping all the garbage to the garbage dump.

6) Who made the cow move from the road ?

- a) Little boy b) Milk man c) Painter

II. Fill in the blanks.

[5 x 1 = 5M]

- 1) Nitin, a little boy has no and no home.
- 2) Rippan's first office was his at his home.
- 3) The policeman and the milkman pulled, and prayed to the cow.
- 4) Tapu was the dinosaur in the world.
- 5) When Nitin's bag is filled up, he takes it to a man called

III. Who said these statements and to whom ? [3 x 1 = 3M]

- 1) "I have the strength of ten horses, so this should be fun."
- 2) "Mother cow, please get up. The children are waiting for their milk to help them grow strong."
- 3) "Now we know where we can get food for Tapu. He can eat all our garbage."

IV. Complete the words with the help of letters given in the below box.[6 x 1/2 = 3M]

bled in ill itch star row

- | | |
|-----------------|----------------|
| 1) nib | 4) tw ed |
| 2) doz g | 5) ve |
| 3) sp ing | 6) g ing |

V. Choose the correct letters given within the brackets and complete the acronyms given below. [2 x 1/2 = 1M]

- 1) Postal Index Number
PI (N /M)
- 2) United Nations International Children's Emergency Fund
UNICE (F / K)

VI. Fill in the blanks with correct phrasal verbs. [5 x 1 = 5M]

- 1) The teacher took the children to art gallery.
They each painting very eagerly.
- 2) We should a walk every morning.
- 3) Today, we have to the solution of this problem.
- 4) Meera told her sister to and complete her project.
- 5) Sakshi has decided to all her bad habits.

VII. Write 'T' for true statements and 'F' for false statements. [5 x 1 = 5M]

- 1) Nitin has a big house.
- 2) During the day, Nitin roams around collecting plastic objects and polythene bags from garbage bins.
- 3) Nitin has a dream to go to school like other children.

4) Unfortunately, there are only two children like Nitin and Divya in India, who do not enjoy the rights recognised by United Nations.

5) Rippan Kapoor died of cancer in 1994 at the age of forty.

VIII. 1. Fill in the blanks with the correct prepositions.

[5 x 1 = 5M]

- a) The monkey was sitting the wall.
- b) Who is your brother all these boys ?
- c) My uncle has come UK.
- d) Who is standing Radhika and Chitra ?
- e) I can see an aeroplane the sky.

2. Rewrite these sentences using short forms.

[2 x 1 = 2M]

- a) I shall not come with you.
- b) He was not playing in the park.

3. Fill in the blanks with the helping verbs of simple past and future tense.

[3 x 1 = 3M]

- a) These boys in the fair yesterday.
- b) Madhu a good teacher in future.
- c) I in the playground.

IX. Answer the following questions.

[5 x 3 = 15M]

- 1) What are the basic rights of children ?
- 2) Why does the poet call the world beautiful ?
- 3) Whose buttons and buckles were gleaming bright ?
- 4) Why was everyone happy at the end ?
- 5) Who is Nitin and what does he do ?

SUMMATIVE ASSESSMENT - III

Class - III :: Vikram Rainbow Mathematics

50

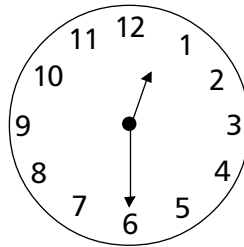
Time : 2½ Hours

Max.Marks: 50

Name :
Section :
Roll No.
I. Fill in the blanks.

[10 x 1 = 10M]

- 1) ₹ 26 = paise
- 2) When the minute hand moves from 12 to 6, it has covered minutes.
- 3) Read the time in the clock in two ways.



- 4) 1000 ml = l
- 5) 1 kilometre = metre.
- 6) The surfaces of a cuboid are identical.
- 7) Identify the shape of Tubelight
- 8) Convert the following into metre and centimetre 965 cm
- 9) 1 Hr = minutes.
- 10) m cm

5 36

(+) 4 22

II. Do as directed.

[5 x 3 = 15M]

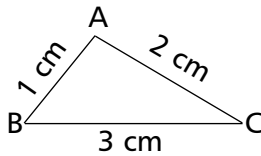
- 1) Write in column form and subtract. ₹ 324.25 from ₹ 927.46
- 2) ₹ 513 ÷ 9

3) ₹ 87.25×8

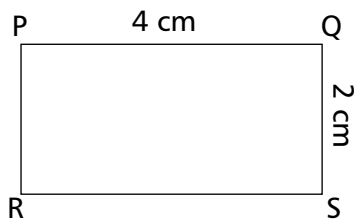
4) Convert the following minutes into seconds 18 minutes 44 seconds.

5) Find the perimeter of the following figure.

a)



b)



III. Do the following sums.

[5 x 4 = 20M]

1) Ravi filled 20l of petrol in his car tank at the start of his journey. How much petrol was used up if at the end of his journey, there was 5l 234ml of petrol left in the tank ?

2) Convert

a) 2 days 3 hours into hours

b) 36 minutes 22 seconds into seconds

3) Priya has ₹ 150 with her. She buys a book for ₹ 48.25, pencils for ₹ 6.00 and eraser for ₹ 5.00. How much money is left with her ?

4) On a trip, 6 boys spend ₹ 123.18. How much money did each boy spend ?

5) Ranjana weighs 42kg 346g and Neela weighs 46kg 280g. What is the total weight of the two girls ?

IV. A grocery store sells the following items in a day in the given amount. Express the data in the form of a pictograph. [5M]

Rice	Wheat flour	Sugar	Tea powder	Oil
40kg	25kg	15 kg	5 kg	30 kg



SUMMATIVE ASSESSMENT - III

Class - III :: Vikram Rainbow

Nature World (EVS)

50

Time : 2½ Hours

Max.Marks: 50

Name :

Section :

Roll No.

I. Answer the following questions.

[8 x 2 = 16M]

1) Why is there no life on the moon ?

Ans. _____

2) Why are morning and evening cooler than noon ?

Ans. _____

3) What are constellations ? Give some examples.

Ans. _____

4) Which factors bring changes in weather ?

Ans. _____

5) Why is Holi called 'festival of colours' ?

Ans. _____

6) Who wear uniforms ?

Ans. _____

7) Why do carnivores have long, sharp and pointed teeth ?

Ans. _____

8) What are the main directions and sub-directions ?

Ans. _____

II. Tick (✓) the correct answer.

[8 x 1 = 8M]

1) Which one is a Scavenger ?

Snake Zebra Vulture

2) Mundu - blouse is the common dress of women in

Assam Odisha Kerala

3) When did India become a republic ?

1947 1950 1960

4) Which is hottest part of the day ?

Morning Noon Evening

5) Which one is a Star ?

Earth Moon Sun

6) How many major directions are there ?

Three Four Six

7) The most pleasant season is

Monsoon Summer Spring

8) People who study about the stars and moon are called

astronuts astronomers geologists

III. Write True or False.

[6 x 1 = 6M]

1) The stars have their own light.

2) Rain makes the weather hot in winters.

3) The moon is bigger than the earth.

4) Weather is pleasant during storms.

5) Astronauts go into space in a space craft.

6) Weather forecast in useful for farmers.

IV. Choose the correct word.

[5 x 1 = 5M]

- 1) The Sun sets in the (east / west).
- 2) A compass tells us (directions / time).
- 3) The cap of is famous for its embroidery (Goa / Himachal Pradesh).
- 4) Salwar - Kameez is a popular dress for (men / women).
- 5) There are sub-directions (four / eight).

V. Which festivals are related with the following ?

[5 x 1 = 5M]

- 1) Crackers
- 2) Santa Claus
- 3) Colours
- 4) Effigies
- 5) Langar

VI. Match the following.

[5 x 1 = 5M]

- | | | |
|--------------|-----|-----------|
| 1. Rabbit | () | a. Insect |
| 2. Dog | () | b. Flower |
| 3. Cat | () | c. Carrot |
| 4. Butterfly | () | d. Milk |
| 5. Frog | () | e. bone |

VII. Write the dresses of women of these states.

[2 x 1 = 2M]

- 1) Gujarat
- 2) Punjab

VIII. Who am I.

[3 x 1 = 3M]

- 1) I swallow my food whole. C _____
- 2) I am nature's friend. V _____
- 3) I have a long trunk. E _____

Name :

Section :

Roll No.

I. Answer these riddles with the help of pictures.

[5 x 1 = 5M]

1) What is it that we swallow to live, but when it swallows us, we die ?



2) What is black when clean and white when dirty ?.....



3) What starts with the letter 't' is filled with 't' and ends with 't' ?



4) What is a white man with a black hat ?



5) What can run but can't walk ?.....

II. Write the missing signs.

[5 x 1 = 5M]

1) $300 \square 5 \square 4 = 301$

2) $40 \square 5 \square 73 = 118$

3) $77 \square 2 \square 146 = 300$

4) $128 \square 8 \square 10 = 160$

5) $7 \square 7 \square 49 = 0$

III. Arrange the following words in the alphabetical order.

[2 x 1 = 2M]

1) egg

tea

wheat

coffee

2) eight

seven

three

one

IV. Tick (✓) the correct option to answer the following.

[3 x 1 = 3M]

1) If two semicircles are joined, what would you get ?

an oval

a circle

2) What will you add to a glass of lemonade to make it chilled ?

ice

water

3) If two equal squares are joined, what would you get ?

1 rectangle

2 squares

V. Tick (✓) the one which not belongs to the group in each row.

[2 x 1 = 2M]

1) Car, Scooter, Truck

Cycle

Bus

Grapes

2) Christmas, Onam, Diwali

Dussehra

Holi

Snail

VI. These words are not in the correct order. Can you put them in ascending order.

[5 x 1 = 5M]

1) Week

Month

Day

Year

.....

2) Word

Paragraph

Alphabet

Sentence

.....

3) Noon

Night

Morning

Evening

.....

4) Child Adult Baby Teenage

5) Minute Day Hour Second

VII. Answer the following questions.

[5 x 1 = 5M]

i) If A is 2, B is 3, C is 5, D is to find the value of the following.

1) $D \times A - C = \dots\dots\dots$

2) $D \times B \times A = \dots\dots\dots$

3) $D \div A \times B = \dots\dots\dots$

4) $A + C \times D = \dots\dots\dots$

5) $A \times B + C = \dots\dots\dots$

VIII. Name of some cups and trophies are given below. Write the name of the sports they are associated with. Take help of help box. [3 x 1 = 3M]

Golf, Sailing, Boat, Racing

1) America's cup

2) Nehru Trophy

3) Walker cup

IX. Every sports have their unique symbol. Write what the following symbols stands for. You may take help from help box. [5 x 1 = 5M]

Archery, Weightlifting, Skiing, Yachting, Rowing



1)



2)



3)



4) 5)

X. Look at the pictures given below and write the name of sports. Choose your answer from the help box. [3 x 1 = 3M]

LongJump, VolleyBall, Swimming



1) 2) 3)

XI. Read the clues and answer them. You may take help from help box.[5 x 1 = 5M]

Script writer, Costume Designer, Gaffer, Cameraman, Producer



1) 2) 3)



4) 5)

XII. Tick (✓) the correct option.

[5 x 1 = 5M]

1) Always Vanish / Wish as soon as you meet your guest.



2) Offer a Seat / duster and make your guest comfortable.

3) When a guest leaving, see him off till he roof / gate of your house and bid him goodbye.



4) Never / Always ask you guest to visit again.



5) Sometimes / Always share your toys with your guest.

XIII. Complete the series.

[2 x 1 = 2M]