

GENERAL KNOWLEDGE

Question Papers

C - 19

CLASS - 2

FORMATIVE ASSESSMENT PAPERS

- * FORMATIVE ASSESSMENT - I
- * FORMATIVE ASSESSMENT - II
- * FORMATIVE ASSESSMENT - III
- * FORMATIVE ASSESSMENT - IV

SUMMATIVE ASSESSMENT PAPERS

- * SUMMATIVE ASSESSMENT - I
- * SUMMATIVE ASSESSMENT - II
- * SUMMATIVE ASSESSMENT - III

TOTAL PAGES : 32

NO. OF SETS : 02
NO. OF STUDENTS : 02

Note : These Question Papers are meant for students, using Real Life General Knowledge Formative and Summative Assessment papers are as complement for schools. The price of ₹ 4/- against Formative Assessment papers also charged nominally towards transportation and handling charges only and to avoid misuse/wastage.

FORMATIVE ASSESSMENT - I

Class - II : Vikram Real Life General Knowledge

25

Syllabus:

(I, II Chapters)

(Pg. No.s : 5 - 19)

Time : 1 Hour]

[Max. Marks : 25

Name :

Class :

Section :

Roll No.

I. Write 'W' for wild animals, 'P' for pet animals and 'F' for farm animals. (5 × 1 = 5)



II. Look at the following animals. Write how they move. (5 × 1 = 5)

(trot, swim, fly, runs, slither)



III. Name the young ones of the animals given below. (5 × 1 = 5)

(Kangaroo, Hen, cat, goat, Dog)



A kitten grows into a



A chick grows into a



A puppy grows into a




A joey grows into a



A kid grows into a

IV. Write the names of the animals given below.

(5 × 1 = 5)



Zebra, Giant panda,
Polar bear, Girafee,
Deer,

V. Write the names of your favourite things.

(5 × 1 = 5)

1. My favourite bird.
2. My favourite food.
3. My favourite dish.
4. My favourite dress.
5. My favourite pet.



Name :

Class :

Section :

Roll No.

I. Complete the sentences with words from the bracket.

(5 × 1 = 5)

(Cotton, Root, Air, Coconut, Wheat)

1. We eat the of the carrot plant.
2. We get oil by crushing the
3. Plants give us fresh and cool
4. We make clothes from the fibers of the plant.
5. We eat the grains of the plant.

II. Look at the following pictures and name the plant.

(5 × 1 = 5)



III. Name the nuts given below.

(5 × 1 = 5)

(Beetalnut, Cashewnut, Pista, Almond, Coconut)



1. _____

2. _____

3. _____

4. _____

5. _____

IV. Name the roots given below.

(5 × 1 = 5)

(Radish, Sweet Potato, Garlic, Carrot, Onion)



1. _____

2. _____

3. _____

4. _____

5. _____

V. Complete the following words with the help of the pictures.

(5 × 1 = 5)

1. B

--	--	--	--	--	--

 L



2. P

--	--	--	--

 T

--	--	--

 O



3. G

--	--	--	--	--

 S



4. T

--	--	--	--	--

 O



5. A P

--	--	--	--



☆☆☆

Name :

Class :

Section :

Roll No.

I. Answer the questions about our body. Pick and tick the right one. (5 × 1 = 5)

1. At which part you can bend ?

- a) joints () b) heart () c) brain () d) kidneys ()

2. You touched a hot object. Which sense organ helps you feel 'pain' ?

- a) nose () b) leg () c) skin () d) eyes ()

3. Which sense organ covers the entire body ?

- a) nose () b) skin () c) eyes () d) ears ()

4. How many bones are there in human body ?

- a) 204 () b) 205 () c) 206 () d) 207 ()

5. Name the part that helps us to hear.

- a) nose () b) ears () c) eyes () d) skin ()

II. Complete the following sentences.

east, The sun, ball, far, round (5 × 1 = 5)

1. The sun is big and

2. The sun is from us.

3. The sun is hot of fire.

4. gives us light and heat.

5. The sun rises in the

III. Write the name under each road sign. (5 × 1 = 5)

(Cycle track, Men at work, No left turn, Pedestrian path, School ahead)



IV. Name the parts of computer given below.

(5 × 1 = 5)

(CPU, Printer, Key board, Monitor, Mouse)












V. Name the tool with the help of pictures and statements.

(5 × 1 = 5)

(Tape, Stethoscope, Screwdrivers, Brush, Thermometer)



1. It is used to tighten screws.

.....

2. A tailor need it.

.....

3. A painter uses it.

.....

4. It is used to measure temperautre of human body.

.....

5. It is used to check heart beats.

.....

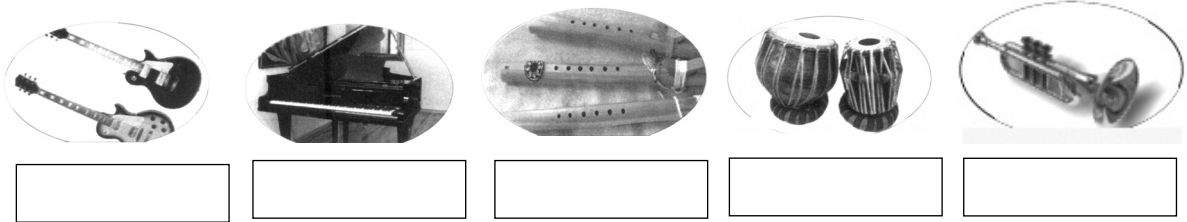


Name :	Class :	Section :	Roll No.
--------	---------	-----------	----------

II. Identify the musical instruments and write the correct name of the instrument.

(5 × 1 = 5)

(Guitar, Piano, Clarinet, Flute, Tabla)



II. Write the names of the monuments and the place it is located.

(5 × 1 = 5)

1. This monument is in

This is the



2. These caves are located at

These are called

3. This memorial located at

This is the




4. This monument is in

This is the

5. This temple is located in

This is called as



III. Name the person with the help of description.

(5 × 1 = 5)

(Mahatma Gandhi, Vallabhai Patel, Bhagat Singh, Sarojini Naidu, Jawaharlal Nehru)

1. He was as strong as iron.
2. He is called Bapu.
3. He is called Chacha.
4. This singh is Sardar.
5. She is the nightingale of India.

IV. How many golden good habits you have. Put the tick mark (✓)


(10 × 1 = 10)

1. Listen carefully to your teachers and elders.
2. Wear neat clothes.
3. Go to school daily.
4. Reach school on time.
5. Get up early in the morning. Go to bed early.
6. Help the old and needy.
7. Share your things with your friends.
8. Speak politely.
9. Do your work on your own.
10. Always speak the truth.



SUMMATIVE ASSESSMENT - I

Class - II : Vikram Real Life
General Knowledge



Syllabus:
(I - IV Chapters)
(Pg. No.s : 5 - 33)

Time : 2½ Hours]

[Max. Marks : 50

Name :

Class :

Section :

Roll No.

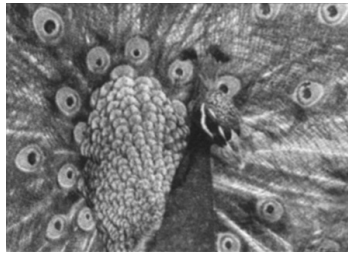
I. Write names of the birds.

(5 × 2 = 10)


1)



2)



3)



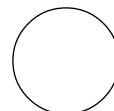
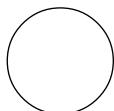

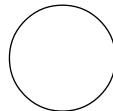
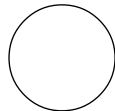
4)



5)



II. Write (W) for wild animals, (P) for pet animals and (F) for farm animals. (5 × 2 = 10)



III. Answer the following questions.

(5 × 2 = 10)

1. What is your favourite book ?

Ans.

2. What is the reptile changes its colour to escape from the enemies ?

Ans.

3. What are nuts ?

Ans.

4. What is your favourite bird ?

Ans.

5. This bird can be trained to immitate human voice. Name the bird.

Ans.

IV. Complete the sentences with words from the box.

(5 × 2 = 10)

(Cotton, Seed, Medicines, Root, Bamboo, Air, Coconut, Wheat)

1. We get oil by crushing the _____ .
2. We make paper from the _____ plant.
3. We eat the _____ of the carrot plant.
4. We eat the grains of the _____ plant.
5. Plants give us fresh and cool _____

V. Choose the correct word from the box and complete it.

(5 × 2 = 10)


(eyes, neck, head, mountain, head)

1. The _____ of a needle.
2. The _____ of a bottle.
3. The _____ K of a coin.
4. The _____ of a coin.
5. The _____ of a mountain.



SUMMATIVE ASSESSMENT - II

**Class - II : Vikram Real Life
General Knowledge**



Syllabus:
(I - VII Chapters)
(Pg. No.s : 5 - 49)

Time : 2½ Hours]

[Max. Marks : 50

Name :

Class :

Section :

Roll No.

I. Write the name of the person with the help of clues. (5 × 2 = 10)

(Subhash Chandra Bose, Jawaharlal Nehru, Sarojini Naidu, Mahatma Gandhi, Vallabhai Patel)

1)



2)




3)



4)



5)



II. Fill in the blanks from the words given in the box. (5 × 2 = 10)

(The sun, far, nearest, ball, dark)

- _____ gives us light and heat.
- The sun is our _____ star.
- It gets _____ when the sun sets.
- The sun is hot _____ of fire.
- The sun is _____ from us.

III. Answer the following questions. (5 × 2 = 10)

- What is meant by sports ?

Ans.

2. This bird can see very easily at night. What is it ?

Ans.

3. What is the framework of a body ?

Ans.

4. What is your favourite food ?

Ans.

5. What are pairs ?

Ans.

IV. Choose the correct answer.

(5 × 2 = 10)

1. An ————— takes patients to hospital. ()

- a) ambulance b) police van

2. We post the letters in a ()

- a) Post office b) Post box

3. Aeroplanes land at ()

- a) Airport b) Railway station

4. Thieves are kept in a ()

- a) Jail b) Zoo

5. We get milk from ()

- a) dairy b) library

V. Match the following food items and persons who has to eat.

(5 × 2 = 10)

(A)

(B)

1. Srinivasan from Tamil Nadu ()

e) Malpuas

2. Chandra Babu from Andhra Pradesh ()

c) Biryani

3. Nanapatekar from Maharashtra ()

a) Dosa

4. Lalu Prasad Yadav from Bihar ()

b) Belpuri

5. Thakare from Maharashtra ()

d) Srikhand




Real Life

*General Knowledge
Text Book*

C - 19

SUMMATIVE ASSESSMENT - III

Class - II : Vikram Real Life
General Knowledge



Syllabus:
(1 - XII Chapters)
(Pg. No.s : 5 - 64)

Time : 2½ Hours]

[Max. Marks : 50

Name :

Class :

Section :

Roll No.

I. Write in the space provided what the animals give us.

(5 × 2 = 10)

1. Hens and Ducks gives us _____
2. Bees gives us _____
3. Sheep gives us _____
4. Silk worms gives us _____
5. Cows and Buffaloes gives us _____

II. Fill in the blanks with the clues given.

(5 × 2 = 10)

(Coldrinks, June, Sunny day, Cold, Rainy)

1. _____ season is also known as monsoon.
2. 23rd _____, is the longest day of the year.
3. On a _____, the weather is hot.
4. On a _____, the weather is pleasant.
5. We like _____ on the hot summer day.

III. Answer the following questions.

(5 × 2 = 10)

1. What is your favourite cartoon character ?

Ans.

3. Who is a musician ?

Ans.

2. What is your mother's name ?

Ans.

VIKRAM
Real Life

• GENERAL KNOWLEDGE • Question Papers

C - 19

CLASS - 2

FORMATIVE ASSESSMENT PAPERS

- * FORMATIVE ASSESSMENT - I
- * FORMATIVE ASSESSMENT - II
- * FORMATIVE ASSESSMENT - III
- * FORMATIVE ASSESSMENT - IV



SUMMATIVE ASSESSMENT PAPERS

- * SUMMATIVE ASSESSMENT - I
- * SUMMATIVE ASSESSMENT - II
- * SUMMATIVE ASSESSMENT - III

FORMATIVE ASSESSMENT - I

Class - II : Vikram Real Life

General Knowledge

25

Syllabus:

(I, II Chapters)

(Pg. No.s : 5 - 19)

Time : 1 Hour]

[Max. Marks : 25

Name :

Class :

Section :

Roll No.

I. Write 'W' for wild animals, 'P' for pet animals and 'F' for farm animals. (5 × 1 = 5)



II. Look at the following animals. Write how they move. (5 × 1 = 5)

(trot, swim, fly, runs, slither)



III. Name the young ones of the animals given below. (5 × 1 = 5)

(Kangaroo, Hen, cat, goat, Dog)



A kitten grows into a



A chick grows into a



A puppy grows into a




A joey grows into a



A kid grows into a

IV. Write the names of the animals given below.

(5 × 1 = 5)



Zebra, Giant panda,
Polar bear, Girafee,
Deer,

V. Write the names of your favourite things.

(5 × 1 = 5)

1. My favourite bird.
2. My favourite food.
3. My favourite dish.
4. My favourite dress.
5. My favourite pet.



Name :	Class :	Section :	Roll No.
---------------	----------------	------------------	-----------------

I. Complete the sentences with words from the bracket. (5 × 1 = 5)

(Cotton, Root, Air, Coconut, Wheat)

1. We eat the of the carrot plant.
2. We get oil by crushing the
3. Plants give us fresh and cool
4. We make clothes from the fibers of the plant.
5. We eat the grains of the plant.

II. Look at the following pictures and name the plant. (5 × 1 = 5)



III. Name the nuts given below. (5 × 1 = 5)

(Beetalnut, Cashewnut, Pista, Almond, Coconut)



1. _____

2. _____

3. _____

4. _____

5. _____

IV. Name the roots given below.

(5 × 1 = 5)

(Radish, Sweet Potato, Garlic, Carrot, Onion)



1. _____

2. _____

3. _____

4. _____

5. _____

V. Complete the following words with the help of the pictures.

(5 × 1 = 5)

1. B

--	--	--	--	--	--

 L



2. P

--	--	--	--

 T

--	--	--

 O



3. G

--	--	--	--	--

 S



4. T

--	--	--	--	--

 O



5. A P

--	--	--	--



☆☆☆

Name :

Class :

Section :

Roll No.

I. Answer the questions about our body. Pick and tick the right one. (5 × 1 = 5)

1. At which part you can bend ?

- a) joints () b) heart () c) brain () d) kidneys ()

2. You touched a hot object. Which sense organ helps you feel 'pain' ?

- a) nose () b) leg () c) skin () d) eyes ()

3. Which sense organ covers the entire body ?

- a) nose () b) skin () c) eyes () d) ears ()

4. How many bones are there in human body ?

- a) 204 () b) 205 () c) 206 () d) 207 ()

5. Name the part that helps us to hear.

- a) nose () b) ears () c) eyes () d) skin ()

II. Complete the following sentences.

east, The sun, ball, far, round

(5 × 1 = 5)

1. The sun is big and

2. The sun is from us.

3. The sun is hot of fire.

4. gives us light and heat.

5. The sun rises in the

III. Write the name under each road sign.

(5 × 1 = 5)

(Cycle track, Men at work, No left turn, Pedestrian path, School ahead)



IV. Name the parts of computer given below.

(5 × 1 = 5)

(CPU, Printer, Key board, Monitor, Mouse)












V. Name the tool with the help of pictures and statements.

(5 × 1 = 5)

(Tape, Stethoscope, Screwdrivers, Brush, Thermometer)



1. It is used to tighten screws.

.....

2. A tailor need it.

.....

3. A painter uses it.

.....

4. It is used to measure temperautre of human body.

.....

5. It is used to check heart beats.

.....



Name :

Class :

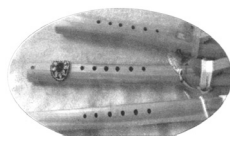
Section :

Roll No.

II. Identify the musical instruments and write the correct name of the instrument.

(5 × 1 = 5)

(Guitar, Piano, Clarinet, Flute, Tabla)



II. Write the names of the monuments and the place it is located.

(5 × 1 = 5)

1. This monument is in

This is the



2. These caves are located at

These are called

3. This memorial located at

This is the




4. This monument is in

This is the

5. This temple is located in

This is called as



III. Name the person with the help of description.

(5 × 1 = 5)

(Mahatma Gandhi, Vallabhai Patel, Bhagat Singh, Sarojini Naidu, Jawaharlal Nehru)

1. He was as strong as iron.
2. He is called Bapu.
3. He is called Chacha.
4. This singh is Sardar.
5. She is the nightingale of India.

IV. How many golden good habits you have. Put the tick mark (✓)


(10 × 1 = 10)

1. Listen carefully to your teachers and elders.
2. Wear neat clothes.
3. Go to school daily.
4. Reach school on time.
5. Get up early in the morning. Go to bed early.
6. Help the old and needy.
7. Share your things with your friends.
8. Speak politely.
9. Do your work on your own.
10. Always speak the truth.



SUMMATIVE ASSESSMENT - I

Class - II : Vikram Real Life
General Knowledge



Syllabus:
(I - IV Chapters)
(Pg. No.s : 5 - 33)

Time : 2½ Hours]

[Max. Marks : 50

Name :

Class :

Section :

Roll No.

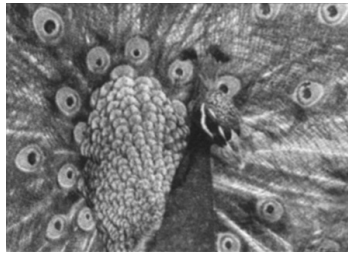
I. Write names of the birds.

(5 × 2 = 10)


1)



2)



3)



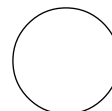
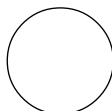

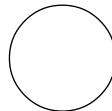

4)



5)



II. Write (W) for wild animals, (P) for pet animals and (F) for farm animals. (5 × 2 = 10)



III. Answer the following questions.

(5 × 2 = 10)

1. What is your favourite book ?

Ans.

2. What is the reptile changes its colour to escape from the enemies ?

Ans.

3. What are nuts ?

Ans.

4. What is your favourite bird ?

Ans.

5. This bird can be trained to immitate human voice. Name the bird.

Ans.

IV. Complete the sentences with words from the box.

(5 × 2 = 10)

(Cotton, Seed, Medicines, Root, Bamboo, Air, Coconut, Wheat)

1. We get oil by crushing the _____ .
2. We make paper from the _____ plant.
3. We eat the _____ of the carrot plant.
4. We eat the grains of the _____ plant.
5. Plants give us fresh and cool _____

V. Choose the correct word from the box and complete it.

(5 × 2 = 10)


(eyes, neck, head, mountain, head)

1. The _____ of a needle.
2. The _____ of a bottle.
3. The _____ K of a coin.
4. The _____ of a coin.
5. The _____ of a mountain.



SUMMATIVE ASSESSMENT - II

Class - II : Vikram Real Life General Knowledge



Syllabus:
(I - VII Chapters)
(Pg. No.s : 5 - 49)

Time : 2½ Hours]

[Max. Marks : 50

Name :

Class :

Section :

Roll No.

I. Write the name of the person with the help of clues. (5 × 2 = 10)

(Subhash Chandra Bose, Jawaharlal Nehru, Sarojini Naidu, Mahatma Gandhi, Vallabhai Patel)

1)



2)




3)



4)



5)



II. Fill in the blanks from the words given in the box. (5 × 2 = 10)

(The sun, far, nearest, ball, dark)

- _____ gives us light and heat.
- The sun is our _____ star.
- It gets _____ when the sun sets.
- The sun is hot _____ of fire.
- The sun is _____ from us.

III. Answer the following questions. (5 × 2 = 10)

- What is meant by sports ?

Ans.

2. This bird can see very easily at night. What is it ?

Ans.

3. What is the framework of a body ?

Ans.

4. What is your favourite food ?

Ans.

5. What are pairs ?

Ans.

IV. Choose the correct answer.

(5 × 2 = 10)

1. An ————— takes patients to hospital. ()

- a) ambulance b) police van

2. We post the letters in a ()

- a) Post office b) Post box

3. Aeroplanes land at ()

- a) Airport b) Railway station

4. Thieves are kept in a ()

- a) Jail b) Zoo

5. We get milk from ()

- a) dairy b) library

V. Match the following food items and persons who has to eat.

(5 × 2 = 10)

(A)

(B)

1. Srinivasan from Tamil Nadu ()

e) Malpuas

2. Chandra Babu from Andhra Pradesh ()

c) Biryani

3. Nanapatekar from Maharashtra ()

a) Dosa

4. Lalu Prasad Yadav from Bihar ()

b) Belpuri

5. Thakare from Maharashtra ()

d) Srikhand




Real Life

*General Knowledge
Text Book*

C - 19

SUMMATIVE ASSESSMENT - III

Class - II : Vikram Real Life
General Knowledge



Syllabus:
(I - XII Chapters)
(Pg. No.s : 5 - 64)

Time : 2½ Hours]

[Max. Marks : 50

Name :

Class :

Section :

Roll No.

I. Write in the space provided what the animals give us.

(5 × 2 = 10)

1. Hens and Ducks gives us _____
2. Bees gives us _____
3. Sheep gives us _____
4. Silk worms gives us _____
5. Cows and Buffaloes gives us _____

II. Fill in the blanks with the clues given.

(5 × 2 = 10)

(Coldrinks, June, Sunny day, Cold, Rainy)

1. _____ season is also known as monsoon.
2. 23rd _____, is the longest day of the year.
3. On a _____, the weather is hot.
4. On a _____, the weather is pleasant.
5. We like _____ on the hot summer day.

III. Answer the following questions.

(5 × 2 = 10)

1. What is your favourite cartoon character ?

Ans.

3. Who is a musician ?

Ans.

2. What is your mother's name ?

Ans.

