


CROSS-NUMBER PUZZLE 1



Cross-Number Discovery Puzzles 4 - © Celia Baron 2013

ACROSS:

A. $796 - 325$

C. The number of cents in 4 quarters and 6 pennies

E. A number that reads the same backwards and forwards

G. The perimeter of the triangle



J. An odd number

K. $26 + 26$

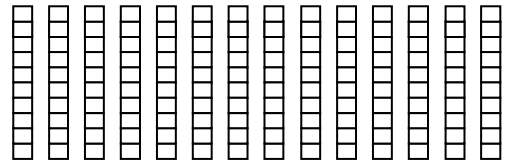
L. The number that means 4 tens and 12 ones

M. The next number in the pattern: 15, 18, 21, 24,

P. A number between 80 and 90

R. A number whose digits add to 4

T. The number shown by the blocks

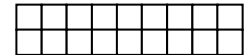


U. The number that means 14 tens

DOWN:

A. Choose the least number: 543, 453, 553, 455

B. The number of unit squares in the array



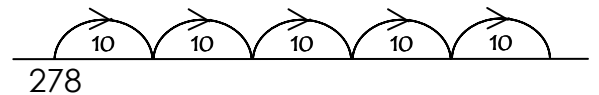
C. 2×9

D. $432 + 265$

F. $70 - 6$

H. A number with three odd digits

J. The number reached on the last hop



M. Write in standard form: $200 + 90 + 1$

N. The number of minutes in 1 hour and 30 minutes

Q. The hundred that 578 is closest to



R. $7 + 3 + 4 + 6 + 1 + 9$

S. $49 + \square = 60$