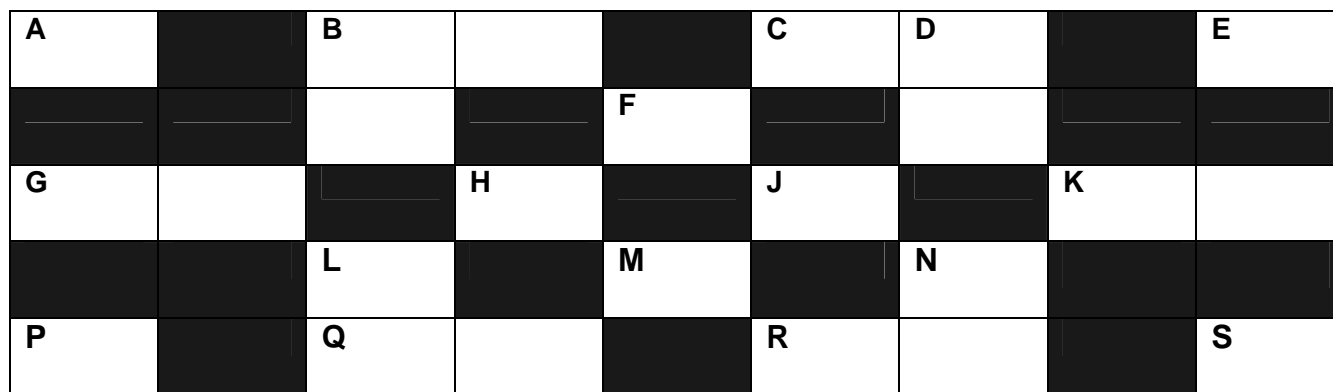


CROSS-NUMBER PUZZLE 1



Cross-Number Discovery Puzzles 1 - © Celia Baron 2013


ACROSS:

A. The number after 6

B. The number of beads

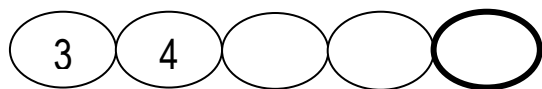


C. The number of dots on the domino

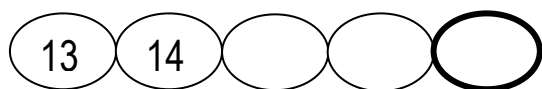


E. Choose the greatest number:
7, 6, 8, 5

F. The last number in the chain



G. The last number in the chain

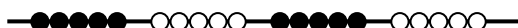


H. The number of fingers

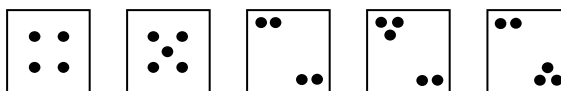


J. The number that is 1 more than 5

K. The number of beads



M. How many cards have 5 dots?



P. The first number in the chain



Q. The number of fingers



R. $5 + 5 = \square$

S. There are 3 dots hidden. How many are there in all?

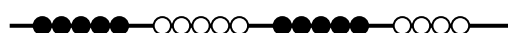


DOWN:

B. The number of sticks



D. The number of beads



L. Choose the greatest number:
9, 11, 10, 8

N. The number after 9