

# 2<sup>nd</sup> Grade Daily Math Practice

# math mats

## for June

Proud to Be **Primary**

20 Math  
Worksheets

4 Activities  
on Each  
Page

Spiral  
Review &  
Practice

2<sup>nd</sup> Grade  
Math  
Standards

No-Prep &  
Versatile

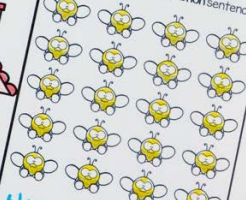
Name: \_\_\_\_\_

**Fact Families**  
Solve for the missing number. Then, fill in each Fact Family house.

Date: \_\_\_\_\_



**Arrays**  
Write the repeated addition sentence.



**Place Value Mystery Number**

The mystery number has 8 ones. It has 3 less tens than ones. It has 4 more hundred than tens. What is the mystery number?



9

hundreds

5

tens

8

ones



**Missing Addends**

Fill in the missing numbers

$$89 + \underline{11} = 100$$

$$17 + \underline{83} = 100$$



# Printable, NO-PREP math mats

20 Math Mats for each month. Every mat is different.  
Each mat covers 4 different math skills and standards.

Each section is clearly explained and represented.



Quick review activities build fluency with 2<sup>nd</sup> grade math standards.



Name: \_\_\_\_\_

## Arrays

Draw an array to match the repeated addition sentence.

$$4 + 4 + 4 + 4 + 4 = 20$$

## Comparing Numbers

Look at each number sentence. Write a number to make it true.

$938 > \underline{\quad}$



$163 < \underline{\quad}$

## 100 More and 100 Less

Write 100 more and 100 less.



\_\_\_\_\_

100 less

294

\_\_\_\_\_

100 more

Date: \_\_\_\_\_

## Story Problem

Jessica collected **53 seashells** on the beach. She uses **29 seashells** to decorate her sandcastle.

How many seashells does she have left?

## My Picture:

Draw or show your work to solve the story problem.



## My Equation

\_\_\_ - \_\_\_ = \_\_\_

## My Answer

\_\_\_ seashells

Bolded text helps students focus on important information.

Many story problems, as well as addition and subtraction fact practice are included.

© 2013 - Present - Eliza H. Proud to be Primary

www.proudto.beprimary.com


Seasonal clip art and math graphics used to illustrate.

Name: \_\_\_\_\_


Date: \_\_\_\_\_

### Fact Families

Solve for the missing number. Then, fill in each fact family house.



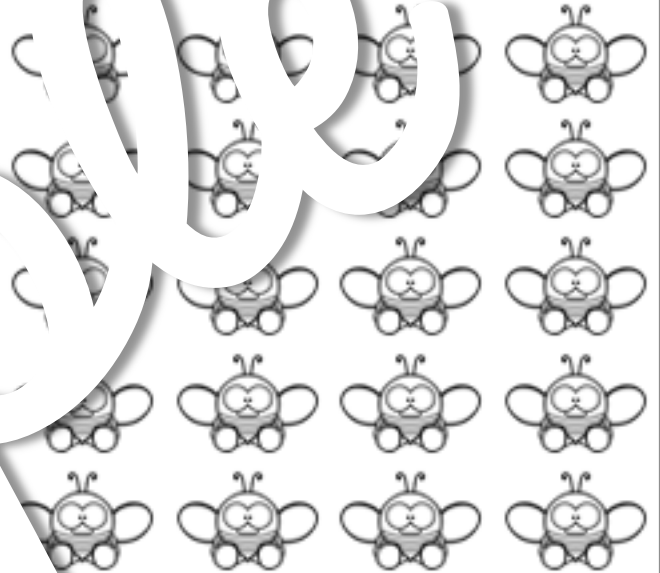
<input type="text"/>	+	<input type="text"/>	=	<input type="text"/>
<input type="text"/>	+	<input type="text"/>	=	<input type="text"/>
<input type="text"/>	-	<input type="text"/>	=	<input type="text"/>
<input type="text"/>	-	<input type="text"/>	=	<input type="text"/>



<input type="text"/>	+	<input type="text"/>	=	<input type="text"/>
<input type="text"/>	+	<input type="text"/>	=	<input type="text"/>
<input type="text"/>	-	<input type="text"/>	=	<input type="text"/>
<input type="text"/>	-	<input type="text"/>	=	<input type="text"/>

### Arrays

Write the repeated addition sentence.



\_\_\_\_\_ = \_\_\_\_\_

### Place Value Mystery Number

The mystery number has 3 tens and 8 ones. It has 3 less tens than hundreds. It has 1 more hundred than tens. What is the mystery number?



\_\_\_\_\_ hundreds      \_\_\_\_\_ tens      \_\_\_\_\_ ones



### Missing Addends

Fill in the missing numbers.

$$89 + \underline{\quad} = 100$$

$$17 + \underline{\quad} = 100$$



Name: \_\_\_\_\_

Date: \_\_\_\_\_


### Even and Odd

Draw an **even** or **odd** number of sprinkles on each ice cream cone.



### Measurement

Measure the starfish to the nearest centimeter.



### Number Patterns

Use what you know about **place value** to fill in the blanks in this pattern.

245, \_\_\_\_\_, 269, 281, 293, \_\_\_\_\_, \_\_\_\_\_, \_\_\_\_\_

### Fact Fluency

Write two addition and two subtraction sentences that equal 10.

\_\_\_\_ + \_\_\_\_ = 10

\_\_\_\_ + \_\_\_\_ = 10



\_\_\_\_ - \_\_\_\_ = 10

\_\_\_\_ - \_\_\_\_ = 10

Name:

Date:

### Story Problem

Arya is writing postcards to her friends while on vacation. She has **52 postcards**. She has **sent 27 postcards** so far.

How many postcards does she **have left**?

### My Picture:

Draw or show your work to solve the story problem.



My Equation

\_\_\_\_\_ - \_\_\_\_\_ = \_\_\_\_\_

My Answer

\_\_\_\_\_ postcards

### Money

Draw two different ways.

### Addition

Solve each addition problem. Regroup if needed.

$$\begin{array}{r} + 1 \\ 279 \\ \hline \end{array}$$



$$\begin{array}{r} + 385 \\ 530 \\ \hline \end{array}$$

### Subtraction

Solve each subtraction problem. Regroup if needed.

$$\begin{array}{r} - 859 \\ 246 \\ \hline \end{array}$$



$$\begin{array}{r} - 463 \\ 239 \\ \hline \end{array}$$



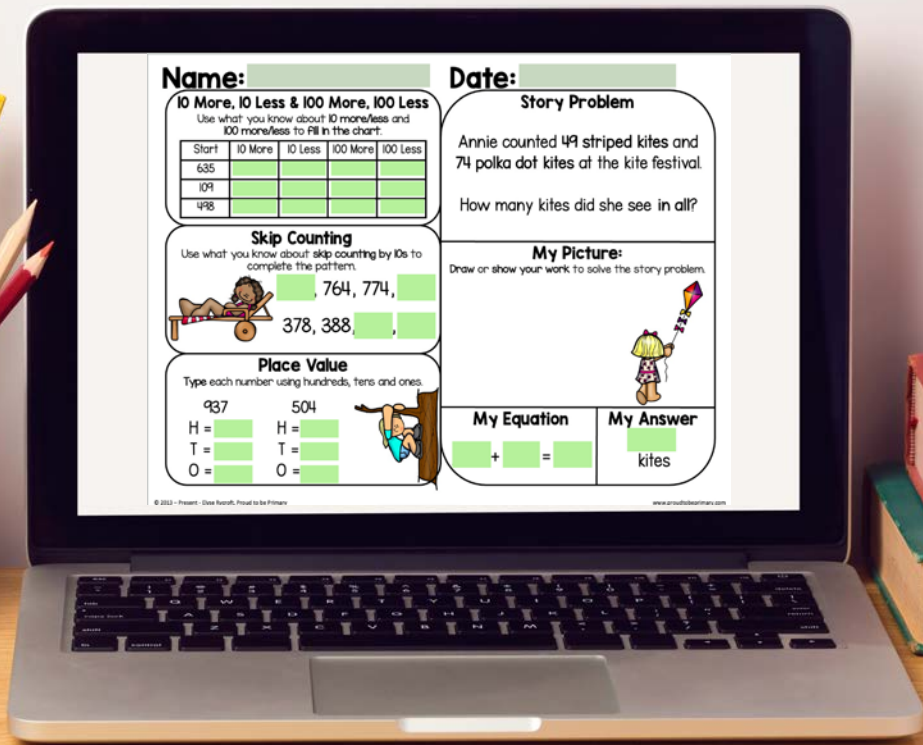
# Use math mats for...

- ♥ Independent practice
- ♥ Small group instruction
- ♥ Math journals
- ♥ Math Workshop
- ♥ Morning work
- ♥ Assessments
- ♥ Math centers
- ♥ Sub-plans
- ♥ Home practice

# math mats

Proud to be Primary

## Different Types of DIGITAL Slides



# Using with Google math mats

Here are a few examples of the different types in interactive slides.


**Name:** \_\_\_\_\_ **Date:** \_\_\_\_\_

**Story Problem**

There are 26 customers at the ice cream shop. 48 more customers arrive.

How many customers are at the ice cream shop in all?

**My Picture:**  
Draw or show your work to solve the story problem.




**My Equation**  
\_\_\_\_\_ + \_\_\_\_\_ = \_\_\_\_\_

**My Answer**  
\_\_\_\_\_ customers

**Place Value Mystery Number**



The mystery number has 3 tens. It has 4 more hundreds than tens. It has 1 more one than hundred. What is the mystery number?




\_\_\_\_\_ hundreds    \_\_\_\_\_ tens    \_\_\_\_\_ ones

**Adding Money**

Count each set of coins and add them together:

Set 1:     Set 2: 



Sum = \$ \_\_\_\_\_

© 2015 - Pearson Education, Inc. All rights reserved.

www.pearsoned.com


**Name:** \_\_\_\_\_ **Date:** \_\_\_\_\_

**Story Problem**

Ava is stargazing. She sees 48 stars. Then, she counts another 73.

How many stars did Ava see altogether?

**My Picture:**  
Draw or show your work to solve the story problem.



**My Equation**  
\_\_\_\_\_ + \_\_\_\_\_ = \_\_\_\_\_

**My Answer**  
\_\_\_\_\_ stars

**100 More, 100 Less**

Fill in 100 more and 100 less for each number:

100 Less	Start	100 More
_____	836	_____
_____	984	_____
_____	104	_____
_____	825	_____

**Ordering Numbers**

Order the numbers from greatest to least:

274    953    306    164    845

\_\_\_\_\_ greatest    \_\_\_\_\_ least

**Geometry**

Order the letters in June that are symmetrical:

JUNE


© 2015 - Pearson Education, Inc. All rights reserved.


www.pearsoned.com

**Name:** \_\_\_\_\_ **Date:** \_\_\_\_\_

**Even or Odd**

Count each set of objects. Type the total. Then, circle if the total is even or odd.

Set 1:  Total = \_\_\_\_\_ even odd

Set 2:  Total = \_\_\_\_\_ even odd

**Place Value**

Using the three digits, create the largest three-digit number and the smallest three-digit number possible. Then, find the difference.

Largest: \_\_\_\_\_    Smallest: \_\_\_\_\_    Difference = \_\_\_\_\_


\_\_\_\_\_    7    2    4    \_\_\_\_\_

**Story Problem**

There are 85 jellyfish swimming in the ocean. 27 more jellyfish come.

How many jellyfish are swimming altogether?

**My Picture:**  
Draw or show your work to solve the story problem.



**My Equation**  
\_\_\_\_\_ + \_\_\_\_\_ = \_\_\_\_\_

**My Answer**  
\_\_\_\_\_ jellyfish

© 2015 - Pearson Education, Inc. All rights reserved.

www.pearsoned.com



# Why You Need math mats

- This ONE math resource is all you need to spiral your math review in second grade.
- Build math fluency through repeated practice.
- 20 fun math activity pages with 4 different math skills and standards provide variety and keep interest high!
- Save time as your math review activities are ready for you!
- Help students learn to solve story problems and build fluency with quick math activities.
- This no-prep, versatile resource is great for math journals, warm-ups, independent practice, small groups, sub-plans, morning work, math centers, home practice, and more!



# Want a FREE Sample of math mats



GRAB A FREE SET OF  
MATH MATS FOR FREE!



Daily Math Practice  
**math mats**  
K-2 Sample

Proud to Be Primary

12 Math  
Worksheets

4 Activities  
on Each  
Page

Spiral  
Review &  
Practice

Covers K-2  
Math  
Standards

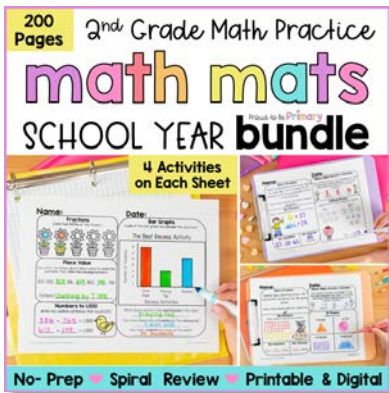
No-Prep &  
Versatile

I'd love for you to try this resource with your students to see if they are a perfect fit for your students!

[CLICK HERE TO  
GRAB YOUR  
FREE SAMPLE!](#)

Proud to Be Primary

# Learn More About math mats



*Love this resource?*  
Get 4 months for FREE  
with the 2nd Grade  
Math Mats BUNDLE for  
the school year.

Learn more about using  
Math Mats as spiral  
review in K-2!



Exciting, Quick & Effective  
**SPIRAL**  
Math Review Activities for K-2  
proudtobepimary.com