

# Lesson 23

## PLANE FIGURES

### Areas

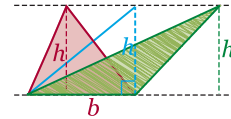


#### Most Valuable Points

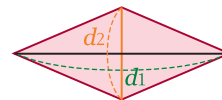
#### MVP 1 Area

(1) Triangle  $\Rightarrow A = \frac{1}{2} \times (\text{base}) \cdot (\text{height}) = \frac{1}{2} bh$

\* Same base and same height  $\Rightarrow$  Same area



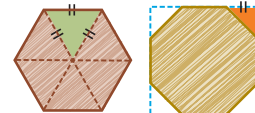
(2) Rhombus/Square ( $\leftarrow$  Perpendicular diagonals)  
 $\Rightarrow A = \frac{1}{2} \times (\text{diagonal}) \cdot (\text{diagonal}) = \frac{1}{2} d_1 d_2$



(3) Circle  $\Rightarrow A = (\text{radius})^2 \cdot \pi = r^2 \pi$

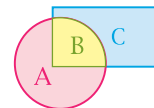
(4) Regular polygons

- Regular hexagon  $\Rightarrow 6 \times$  Equilateral triangle
- Regular Octagon  $\Rightarrow$  Square  $- 4 \times$  Isosceles right triangle



#### MVP 2 Application

Overlapping shape  $\Rightarrow$   $\begin{cases} \text{If } A + B = B + C, \text{ then } A = C \\ \text{If } A = C, \text{ then } A + B = B + C \end{cases}$



#### Most Valuable Problems

**MVP 1** If the perimeter of a semicircular region is numerically equal to the area of the semicircular region, then what is the radius of the semicircle?  
 ★★★

- (A) 1.31                      (B) 1.44                      (C) 2.00  
 (D) 2.27                      (E) 3.27

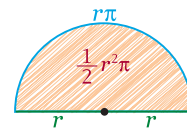
**Idea!** If the radius of the semicircle is  $r$ ,

the perimeter of the semicircle is  $2 \times r + \frac{1}{2} \times (2 \cdot r \cdot \pi) = 2r + r\pi = r(2 + \pi) \dots\dots ①$

and the area of the semicircle is  $\frac{1}{2} \times (r^2 \cdot \pi) = \frac{1}{2} r^2 \pi \dots\dots ②$

From ① and ②,  $r(2 + \pi) = \frac{1}{2} r^2 \pi \quad \therefore 2 + \pi = \frac{1}{2} r \pi$

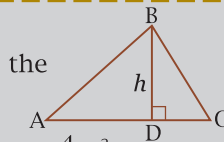
$\therefore r\pi = 4 + 2\pi \quad \therefore r = \frac{4 + 2\pi}{\pi} = 2 + \frac{4}{\pi} = 3.2732\dots\dots \approx 3.27$



**Ans** (E)

**MVP 2** In triangle ABC,  $\overline{BD} \perp \overline{AC}$  and  $BD = h$ .  
 If  $BD$  is 37.5% less than  $AC$ , then what is the area of triangle ABC?  
 ★★★

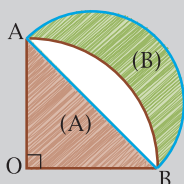
- (A)  $\frac{2h^2}{3}$                       (B)  $\frac{4}{3} h^2$                       (C)  $\frac{4}{5} h^2$   
 (D)  $\frac{8}{3} h^2$                       (E)  $\frac{5}{16} h^2$



**Ans** (C)

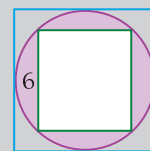
**3** In a greater circle with center O, a semicircle is constructed using segment  $\overline{AB}$  as its diameter as shown. What is the ratio of the areas of two shaded regions (A) to (B)?

- (A)  $\frac{2}{\pi}$
- (B)  $\frac{3}{\pi}$
- (C)  $\frac{\pi}{3}$
- (D)  $\frac{\sqrt{2}}{\pi}$
- (E) 1



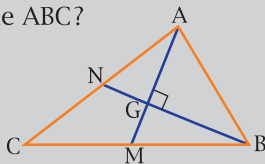
**6** In the square, the inscribed rectangle has side length 6. The length of that side is 75% of the side length of the circumscribed square. What is the sum of areas of the shaded regions?

- (A) 13.92
- (B) 15.26
- (C) 18.52
- (D) 22.96
- (E) 30.54



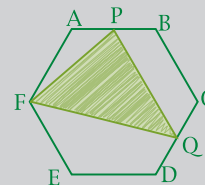
**4** In the figure, two medians  $\overline{AM}$  and  $\overline{BN}$  of triangle ABC are perpendicular. If  $AM = 7$  and  $BN = 9$ , then what is the area of triangle ABC?

- (A) 18
- (B) 35
- (C) 42
- (D) 56
- (E) 63



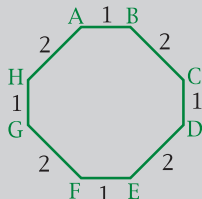
**7** In a regular hexagon ABCDEF with each side 4, P and Q are the midpoints of  $\overline{AB}$  and  $\overline{CD}$  respectively. What is the area of the triangle FPQ?

- (A) 16
- (B)  $9\sqrt{3}$
- (C) 18
- (D)  $10\sqrt{2}$
- (E) 20



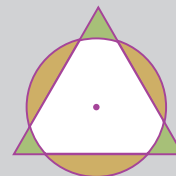
**5** If the sides of an octagon ABCDEFGH alternate in length as shown, what is the area of the octagon?

- (A)  $4 + 2\sqrt{2}$
- (B)  $5 + 4\sqrt{2}$
- (C)  $12 - 2\sqrt{2}$
- (D)  $8\sqrt{2}$
- (E)  $12\sqrt{2}$



**8** An equilateral triangle with each side of 4 and a circle share a common center. The total area of the regions that are inside the circle and outside the equilateral triangle is equal to the total area of the regions that are outside the circle and inside the triangle. What is the radius of the circle?

- (A) 1.32
- (B) 1.49
- (C) 1.68
- (D) 1.92
- (E) 2.09



# Lesson 36

# LOGARITHMS

## Operations



Most Valuable Points

### MVP 1 Operations of the logarithms in same bases

(1) Addition

$$\log a + \log b \Leftrightarrow \log ab$$

Expanded form      Single log form

ex.  $\log(a+b) + \log(a-b)$   
 $\Rightarrow \log(a+b)(a-b)$   
 $= \log(a^2 - b^2)$

(2) Subtraction

$$\log a - \log b \Leftrightarrow \log \frac{a}{b}$$

Expanded form      Single log form

ex.  $\log \sin x - \log \cos x$   
 $\Rightarrow \log \frac{\sin x}{\cos x} = \log \tan x$

(3) Power of antilog

$$n \log a \Leftrightarrow \log a^n$$

Expanded form      Single log form

ex.  $\frac{1}{2} \log 8 \Rightarrow \log 8^{\frac{1}{2}}$   
 $= \log \sqrt{8} = \log 2\sqrt{2}$

### MVP 2 Change of bases.

$$\log_a b = \frac{\log b}{\log a} = \frac{\ln b}{\ln a} = \frac{1}{\log_b a} = \log_{a^n} b^n$$

Base  $a$       Base 10      Base  $e$       Base  $b$       Base  $a^n$

ex.  $\log_5 3 \Rightarrow \frac{\log 3}{\log 5} = \frac{\ln 3}{\ln 5} = \frac{1}{\log_3 5}$   
 $\ln 10 \Rightarrow \log_e 10 = \frac{\log 10}{\log e} = \frac{1}{\log e}$

Most Valuable Problems

**MVP 1** If  $10^x = a$  and  $100^y = b$ , then which of the following expressions is equivalent to  $\frac{1}{2}x - y$ ?

- (A)  $\log \frac{a}{b}$       (B)  $\frac{\log a}{\log b}$       (C)  $\log \sqrt{\frac{a}{b}}$   
 (D)  $\frac{\log(a-b)}{2}$       (E)  $\log \frac{1}{\sqrt{a-b}}$

**Idea!** i)  $10^x = a \Rightarrow x = \log_{10} a = \log a$

ii)  $100^y = b \Rightarrow y = \log_{100} b = \log_{10^2} b = \frac{1}{2} \log_{10} b = \frac{1}{2} \log b$

From i) and ii),  $\frac{1}{2}x - y = \frac{1}{2} \log a - \frac{1}{2} \log b = \frac{1}{2} (\log a - \log b) = \frac{1}{2} \log \frac{a}{b} = \log \sqrt{\frac{a}{b}}$  **Ans** (C)

**MVP 2** What is the value of  $\log_2 2\sqrt{6} + \log_2 4\sqrt{3} - \log_2 6$ ?

- (A) -3      (B)  $-\frac{3}{2}$       (C)  $\frac{1}{2}$   
 (D)  $\frac{3}{2}$       (E)  $\frac{5}{2}$

**Ans** (E)

**3**  
☆☆☆

Which of the following must be true?

- I.  $(\log_2 4)^2 = \log_2 4^2$
- II.  $2^{\log_2 3} = 3^{\log_2 2}$
- III.  $(\log 5)^2 - (\log 2)^2 = \log \frac{5}{2}$

- (A) I only
- (B) II only
- (C) I and II only
- (D) I and III only
- (E) I, II and III

**6**  
☆☆☆

Which of the following is equivalent to the logarithmic expression

$$\log_2 xy^2 + 3\log_2 x - 2\log_2 y + 5\log_2 \frac{1}{x^2}?$$

- (A)  $\frac{2}{5} \log_2 x$
- (B)  $2\log_2 y$
- (C)  $3\log_2 y$
- (D)  $-6\log_2 x$
- (E)  $\frac{1}{6} \log_2 x$

**4**  
☆☆☆

If  $\log a = 0.5733$ , then what is the value of  $\log(0.0001 \times a^3)$ ?

- (A)  $-0.2801$
- (B)  $-1.2801$
- (C)  $-2.2801$
- (D)  $-2.7199$
- (E)  $-3.7199$

**7**  
☆☆☆

If  $f(x) = \log \sqrt{x}$  and  $g(x) = \frac{x}{100}$ , then  $f(g(x))$  could be expressed as

- (A)  $\log x - 1$
- (B)  $\log x - 2$
- (C)  $\frac{1}{2} \log x - 1$
- (D)  $\frac{1}{2} (\log x - 10)$
- (E)  $\frac{\log x}{50}$

**5**  
☆☆☆

If  $\log 2 = a$  and  $\log 3 = b$ , then what is the value of  $\log \cos 330^\circ$ ?

- (A)  $a + \frac{1}{2}b$
- (B)  $\frac{1}{2}b - a$
- (C)  $\frac{\sqrt{b}}{a}$
- (D)  $a - \frac{1}{2}b$
- (E)  $\frac{\sqrt{a}}{b}$

**8**  
☆☆☆

What is the value of

$$\log_2 5 \cdot \log_{25} \frac{1}{3} \cdot \log_{\sqrt{3}} 8?$$

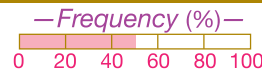
- (A)  $-3$
- (B)  $6$
- (C)  $12$
- (D)  $-\frac{1}{3}$
- (E)  $-\frac{3}{4}$



# Lesson 69

## PARAMETRIC EQUATIONS

### Graphs



My **V**ery **P**oints

#### MVP 1 Domains / Ranges of the parametric functions

$$\begin{cases} x = f(t) \\ y = g(t) \end{cases} \Rightarrow \begin{cases} \text{The range of } f(t) \Rightarrow \text{The interval of } x \text{ [← Domain]} \\ \text{The range of } g(t) \Rightarrow \text{The interval of } y \text{ [← Range]} \end{cases}$$

⇒ The interval of values of the eliminating parametric expression

..... Leaving the interval for  $x$  or  $y$

ex.

①  $x = 2t + 1 \Rightarrow t = \frac{x-1}{2} \rightarrow$  (All real values of  $t$ )  $\Rightarrow$  All values of  $x$

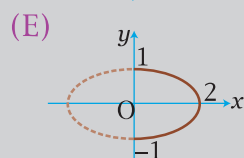
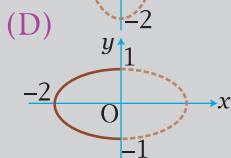
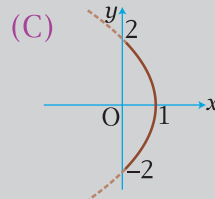
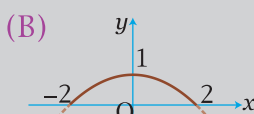
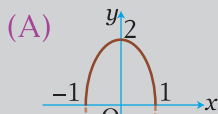
②  $x = t^2 - 1 \Rightarrow t^2 = x + 1 \rightarrow (t^2 \geq 0 \therefore x + 1 \geq 0) \Rightarrow x \geq -1$

③  $x = \sqrt{2t} + 1 \Rightarrow \sqrt{2t} = x - 1 \rightarrow (\sqrt{2t} \geq 0 \therefore x - 1 \geq 0) \Rightarrow x \geq 1$

④  $x = \sin^2\theta - 2 \Rightarrow \sin^2\theta = x + 2 \rightarrow (0 \leq \sin^2\theta \leq 1, 0 \leq x + 2 \leq 1) \Rightarrow -2 \leq x \leq -1$

Most **V**aluable **P**roblems

**MVP 1** What is the graph of the curve whose parametric equations are  $x = 2\sin t$  and  $y = \cos^2 t$ ?



**Idea!**  $\begin{cases} x = 2\sin t \Rightarrow \sin t = \frac{x}{2} \dots\dots ① & \text{Since } -1 \leq \sin t \leq 1, -1 \leq \frac{x}{2} \leq 1 \therefore -2 \leq x \leq 2 \\ y = \cos^2 t \dots\dots ② \end{cases}$

From ①<sup>2</sup> + ②,  $\sin^2 t + \cos^2 t = \left(\frac{x}{2}\right)^2 + y \therefore 1 = \frac{x^2}{4} + y \therefore y = -\frac{x^2}{4} + 1 \quad (-2 \leq x \leq 2)$

$\therefore$  The graph of  $y = -\frac{x^2}{4} + 1 \quad (-2 \leq x \leq 2)$  is represented by (B).

**Ans** (B)

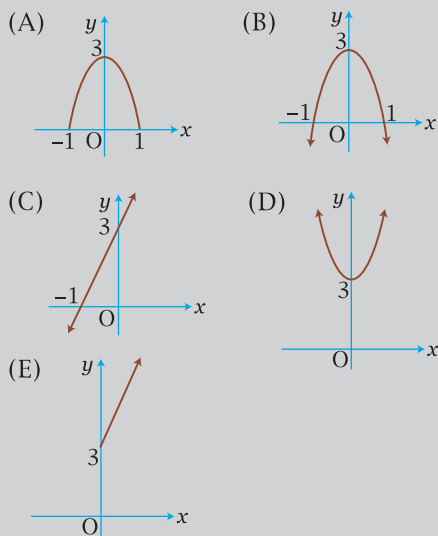
**MVP 2** Which of the following parametric equations have the same graph?

I.  $\begin{cases} x = 2\sin\theta \\ y = 2\cos\theta \end{cases}$       II.  $\begin{cases} x = t \\ y = \sqrt{4-t^2} \end{cases}$       III.  $\begin{cases} x = \sqrt{s} \\ y = \sqrt{4-s} \end{cases}$

- (A) I and II only      (B) I and III only      (C) II and III only  
(D) I, II and III      (E) None

**Ans** (E)

**3** Which of the following is the graph of the parametric equations  $\begin{cases} x = t^2 \\ y = 2t^2 + 3 \end{cases}$ ?



**4** What is the domain of the function defined by the parametric equations  $\begin{cases} x = t^2 + 2t \\ y = t^2 - 4t \end{cases}$ ?

- (A)  $\{x \mid x \geq 1\}$
- (B)  $\{x \mid x \geq -1\}$
- (C)  $\{x \mid x \geq 2\}$
- (D)  $\{x \mid x \geq -2\}$
- (E) All real numbers of  $x$ .

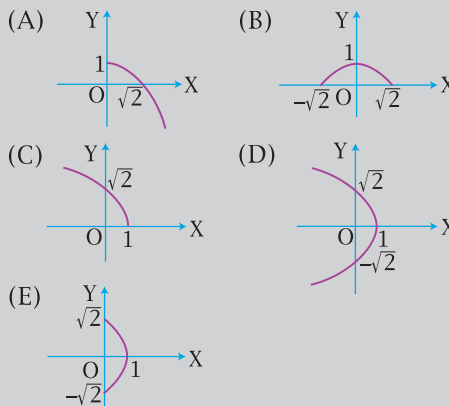
**5** Which of the following is the graph of parametric equations  $x = \sqrt{t+1}$  and  $y = 2\sqrt{t-1}$ ?

- (A) A straight line
- (B) A portion of a straight line
- (C) A parabola
- (D) A portion of a parabola
- (E) A portion of an ellipse.

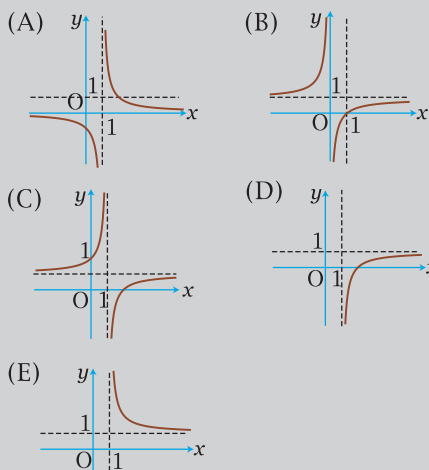
**6** If  $x = 3\cos^2\theta$  and  $y = 4\sin^2\theta$ , then what is the length of the locus of points  $(x, y)$ ?

- (A) 5
- (B)  $7\pi$
- (C) 10
- (D) 14
- (E)  $25\pi$

**7** If  $(x, y)$  represents a point on the graph  $y = -x + 2$ , then which of the following could be a portion of the graph of the set of points  $(\frac{y}{2}, \sqrt{x})$ ?



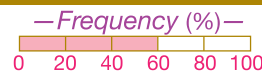
**8** If  $x = 1 + 2^t$  and  $y = 1 - 2^{-t}$ , which of the following is the graph of  $y = f(x)$ ?



# Lesson 77

## POLAR EQUATIONS

### Polar coordinates



Most Valuable Points

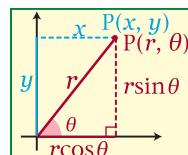
MVP

#### 1 Polar coordinates

Rectangular coordinate  $P(x, y) \Leftrightarrow$  Polar coordinate  $P(r, \theta)$

To the polar form  
 $x \Rightarrow r \cos \theta$   
 $y \Rightarrow r \sin \theta$

To the rectangular form  
 $r \Rightarrow \sqrt{x^2 + y^2}$   
 $\theta \Rightarrow \left[ \tan \theta = \frac{y}{x} \right]$



ex. What is the polar coordinates of the rectangular coordinates  $(-3, 3\sqrt{3})$ ?

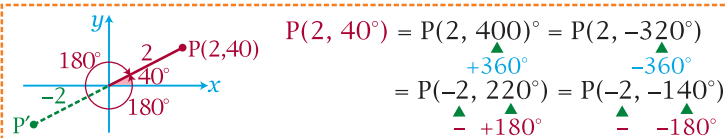
$i) r = \sqrt{(-3)^2 + (3\sqrt{3})^2} = \sqrt{9 + 27} = \sqrt{36} = 6$   
 $ii) \tan \theta = \frac{3\sqrt{3}}{-3} = -\sqrt{3} \therefore \theta = 120^\circ (= \frac{2\pi}{3})$

\* Polar coordinates  $(6, \frac{2\pi}{3}) \Rightarrow (6 \cos \frac{2\pi}{3}, 6 \sin \frac{2\pi}{3}) = (6 \cdot -\frac{1}{2}, 6 \cdot \frac{\sqrt{3}}{2}) = (-3, 3\sqrt{3})$

\* Same point of the polar form

$P(r, \theta) = (r, \theta \pm 2n\pi) = (-r, \theta \pm (2n - 1)\pi)$  (where  $n = 0, 1, 2, 3, \dots$ )

ex.



MVP

#### 2 Polar equations

i)  $r = \sqrt{x^2 + y^2} \Rightarrow r^2 = x^2 + y^2$     ii)  $r \cos \theta = x, r \sin \theta = y$

ex.

Polar equation		Rectangular Equation
$r = 5$	$r^2 = 25 \therefore x^2 + y^2 = 5^2$	$x^2 + y^2 = 25$
$r = \frac{2}{\cos \theta}$	$r \cos \theta = 2 \therefore x = 2$	$x = 2$
$r = 4 \cos \theta$	$r^2 = 4r \cos \theta \therefore x^2 + y^2 = 4x$	$x^2 + y^2 - 4x = 0$

Most Valuable Problems

MVP 1

What is the polar form of the curve  $xy = 2$ ?

- ★★★ (A)  $r^2 \sin 2\theta = 1$       (B)  $r^2 \sin 2\theta = 4$       (C)  $r^2 \sin 2\theta = 8$   
 (D)  $r^2 \sin 2\theta = \frac{1}{4}$       (E)  $r^2 \sin 2\theta = \frac{1}{16}$

Idea!

From the curve  $xy = 2$ ,  $(r \cos \theta)(r \sin \theta) = 2$  ( $\leftarrow x = r \cos \theta$  and  $y = r \sin \theta$ )

$\therefore r^2 \sin \theta \cdot \cos \theta = 2 \therefore r^2 (2 \sin \theta \cdot \cos \theta) = 4 \therefore r^2 \sin 2\theta = 4$

Ans (B)

MVP 2

What are the polar coordinates of the point  $(1, -\sqrt{3})$ ?

- ★★★ (A)  $(2, \frac{5\pi}{3})$       (B)  $(2, \frac{11\pi}{6})$       (C)  $(\sqrt{2}, \frac{2}{3}\pi)$   
 (D)  $(\sqrt{2}, \frac{5\pi}{3})$       (E)  $(2\sqrt{2}, \frac{11}{6}\pi)$

Ans (A)

**3**  
★★★

Which of the following points of polar coordinates is different from the others?

- (A)  $(-2, -150^\circ)$
- (B)  $(2, -330^\circ)$
- (C)  $(2, 30^\circ)$
- (D)  $(-2, 210^\circ)$
- (E)  $(-2, 390^\circ)$

**6**  
★★★

How many intersection points are in the two graphs of  $r = \cos\theta$  and  $r = \sin 2\theta$ ?

- (A) None
- (B) One
- (C) Two
- (D) Three
- (E) Four

**4**  
★★★

A and B are two points on the circle O. In polar coordinates, A is the point  $(6, \frac{\pi}{4})$  and B is the point  $(6, \frac{5\pi}{6})$ . What is the length of arc  $\widehat{AB}$  nearest to the integer?

- (A) 10
- (B) 11
- (C) 12
- (D) 13
- (E) 14

**7**  
★★★

What is the distance of two points of intersection of two graphs  $r = 2$  and  $r = \frac{1}{\sin\theta}$ ?

- (A) 1
- (B)  $\frac{\pi}{3}$
- (C)  $\sqrt{3}$
- (D) 2
- (E)  $2\sqrt{3}$

**5**  
★★★

Which of the following equations in rectangular form is equivalent to  $r^2 = 36 \sec 2\theta$ ?

- (A)  $x - y = \pm 6$
- (B)  $\frac{x^2}{6^2} - \frac{y^2}{6^2} = 1$
- (C)  $y = \pm \frac{6}{x}$
- (D)  $x = \pm 6$
- (E)  $x^2 + y^2 = 6^2$

**8**  
★★★

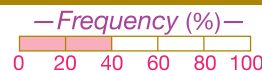
What is the length of the line segment whose endpoints have polar coordinates  $(-3, 75^\circ)$  and  $(4, -25^\circ)$ ?

- (A) 4.12
- (B) 4.56
- (C) 4.97
- (D) 5.29
- (E) 5.88

Lesson  
**85**

# SPACE

## Spheres



**Most Valuable Points**

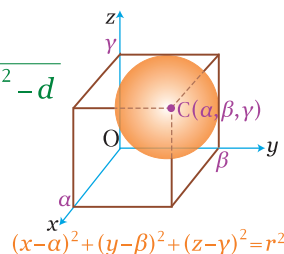
**MVP** ① Equations of the spheres

(1) General form .....  $x^2 + y^2 + z^2 + ax + by + cz + d = 0$

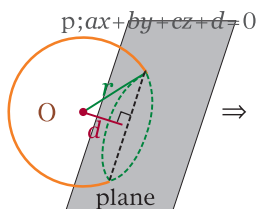
$$\Rightarrow \begin{cases} \text{① Center} = C\left(-\frac{a}{2}, -\frac{b}{2}, -\frac{c}{2}\right) \\ \text{② Radius} = \sqrt{\left(\frac{a}{2}\right)^2 + \left(\frac{b}{2}\right)^2 + \left(\frac{c}{2}\right)^2 - d} \end{cases}$$

(2) Standard form .....  $(x - \alpha)^2 + (y - \beta)^2 + (z - \gamma)^2 = r^2$

$$\Rightarrow \begin{cases} \text{① Center} = C(\alpha, \beta, \gamma) \\ \text{② Radius} = r \end{cases}$$



**MVP** ② Relationships of a circle and a line



Distance of the center of a circle and a line  $\geq$  Radius

$$d = \frac{|a\alpha + b\beta + c\gamma + d|}{\sqrt{a^2 + b^2 + c^2}} \quad \left[ \begin{array}{l} < r \Rightarrow \text{Intersecting} (\leftarrow \text{Circle}) \\ = r \Rightarrow \text{Tangent} \\ > r \Rightarrow \text{No intersecting} \end{array} \right.$$

**Most Valuable Problems**

**MVP**  
**1**

If a cube is inscribed in the sphere  $x^2 + y^2 + z^2 + 2x - 4z + 2 = 0$ , then what is the volume of the cube?

- (A) 1 (B)  $2\sqrt{2}$  (C) 8  
(D)  $3\sqrt{3}$  (E) 27

**Idea!** From the sphere  $x^2 + y^2 + z^2 + 2x - 4z + 2 = 0$ ,  $x^2 + 2x + y^2 + z^2 - 4z = -2$

$$\therefore (x + 1)^2 + y^2 + (z - 2)^2 = 1 + 4 - 2 \quad \therefore (x + 1)^2 + y^2 + (z - 2)^2 = (\sqrt{3})^3$$

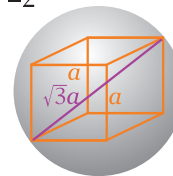
$\therefore$  The radius of the sphere is  $\sqrt{3}$ .

If each edge of the inscribed cube is  $a$ ,

the length of the space diagonal is  $\sqrt{a^2 + a^2 + a^2} = \sqrt{3}a$

Since the diameter of the sphere is equal to the space diagonal of the cube,  $2\sqrt{3} = \sqrt{3}a$

$\therefore a = 2 \quad \therefore$  The volume of the cube is  $a^3 = 2^3 = 8$



**Ans** (C)

**MVP**  
**2**

A sphere  $(x + 1)^2 + (y - 2)^2 + (z - 4)^2 = 4$  is tangent to

- (A) the  $y$ -axis (B) the  $z$ -axis (C) the  $xy$ -line  
(D) the  $yz$ -plane (E) the  $xz$ -plane

**Ans** (E)

- 3** MVP  
☆☆☆ What is the equation of the set of points that are 4 units from point  $(-1, 2, -3)$ ?
- (A)  $-x + \frac{y}{2} - \frac{z}{3} = 4$   
 (B)  $(-x)^2 + (2y)^2 + (-3z)^2 = 4^2$   
 (C)  $(x - 1)^2 + (y + 2)^2 + (z - 3)^2 = 2^2$   
 (D)  $x^2 + y^2 + z^2 + 2x - 4y + 6z = 4^2$   
 (E)  $x^2 + y^2 + z^2 + 2x - 4y + 6z - 2 = 0$

- 6** MVP  
☆☆☆ A sphere has points  $A(-3, 4, 2)$  and  $B(1, 2, -2)$  as endpoints of a diameter. Which of the following is the equation of the sphere?
- (A)  $x^2 + y^2 + z^2 + 2x - 6y + 1 = 0$   
 (B)  $x^2 + y^2 + z^2 - 2x + 6y + 1 = 0$   
 (C)  $x^2 + y^2 + z^2 + 2x - 6y + 7 = 0$   
 (D)  $x^2 + y^2 + z^2 - x + 3y + 7 = 0$   
 (E)  $x^2 + y^2 + z^2 + x - 3y + 7 = 0$

- 4** MVP  
☆☆☆ Which of the following points lies inside the sphere, with center at the origin, that passes through the point  $(-1, 2, 3)$ ?
- (A)  $(0, 0, 5)$   
 (B)  $(0, 2, 4)$   
 (C)  $(2, -2, 2)$   
 (D)  $(3, \sqrt{5}, 0)$   
 (E)  $(-1, 2, \sqrt{10})$

- 7** MVP  
☆☆☆ What is the distance of two intersection points of a sphere  $(x - 2)^2 + (y + 1)^2 + (z + 3)^2 = 3^2$  and the  $z$ -axis?
- (A) 2  
 (B) 4  
 (C) 6  
 (D) 8  
 (E) 10

- 5** MVP  
☆☆☆ What is the volume of the sphere of  $x^2 + y^2 + z^2 - 2x + 6y - 8z + 1 = 0$ ?
- (A) 26.2  
 (B) 46.8  
 (C) 78.5  
 (D) 104.7  
 (E) 523.6

- 8** MVP  
☆☆☆ A plane  $2x + y + 3z = 9$  intersects a sphere  $x^2 + y^2 + z^2 - 2x - 2y = 7$  in space and produces a circle. What is the area of the circle?
- (A) 3.14  
 (B) 6.28  
 (C) 14.05  
 (D) 15.71  
 (E) 21.06

## Most Valuable Processes & Solutions

ii) Obtuse triangle  $\Rightarrow$

$$\textcircled{1} 7 > k; 7^2 > 4^2 + k^2 \therefore 49 > 16 + k^2$$

$$\therefore k^2 > 33 \therefore k = 5, 4, 3, 2, \dots$$

$$\textcircled{2} k > 7; k^2 > 7^2 + 4^2 \therefore k^2 > 49 + 16$$

$$\therefore k^2 > 65 \therefore k = 9, 10, 11, \dots$$

From i) and ii),  $k = 4, 5, 9, 10$

$\therefore$  The number of integer values of  $k$  is 4.

**Ans** (A)

4 In the figure,  $\overline{BC}$  is a diameter.  $\therefore \angle A = 90^\circ$

In  $30^\circ$ - $60^\circ$ - $90^\circ$  right triangle ABC,

$$CB = 2 \cdot 3 = 6 \text{ and } AC = 3\sqrt{3}$$

$\therefore$  The perimeter of the

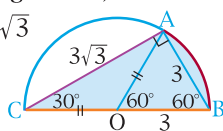
shaded region is

$$\widehat{AB} + BC + CA$$

$$= \frac{60^\circ}{360^\circ} \times (2 \cdot 3 \cdot \pi) + 2 \cdot 3 + 3\sqrt{3}$$

$$= \pi + 6 + 3\sqrt{3} = 14.337745 \dots \approx 14.34$$

**Ans** (D)



Lesson

22

23

5 In the figure, all sides of the pentagon ABCDE are the same lengths.

If each side of the pentagon is  $a$ ,

the area is  $a^2 + \frac{\sqrt{3}}{4}a^2$ .

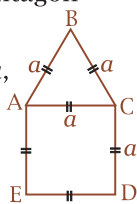
$$\therefore \left(1 + \frac{\sqrt{3}}{4}\right)a^2 = 100$$

$$\therefore a^2 = \frac{100}{1 + \frac{\sqrt{3}}{4}} \therefore a = \sqrt{\frac{100}{1 + \frac{\sqrt{3}}{4}}} = 8.3536 \dots$$

$\therefore$  The perimeter of the pentagon is

$$5a = 5 \times 8.3536 \dots = 41.768 \dots \approx 41.8$$

**Ans** (E)



6 If the length of the fourth side is  $x$ , since  $1 < 2 < 5$ ,

i) The longest side is 5

$$\Rightarrow x + 1 + 2 > 5 \therefore x > 2$$

ii) The longest side is  $x$

$$\Rightarrow 1 + 2 + 5 > x \therefore x < 8$$

From i) and ii),  $2 < x < 8$

$\therefore$  The interval of the perimeter is

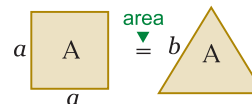
$$(1 + 2 + 5) + 2 < P < (1 + 2 + 5) + 8$$

$$\therefore 10 < P < 16$$

$\therefore$  The perimeter of the quadrilateral could be 11.

**Ans** (B)

7 In the figure, if each side of the square and the equilateral triangle are  $a$  and  $b$  respectively,



$$\begin{cases} A = a^2 & \therefore a = \sqrt{A} \\ A = \frac{\sqrt{3}}{4}b^2 & \therefore b^2 = \frac{4A}{\sqrt{3}} \end{cases} \therefore b = \frac{2\sqrt{A}}{\sqrt[4]{3}}$$

$$\therefore b = \frac{2\sqrt{A}}{\sqrt[4]{3}}$$

$\therefore$  The ratio of perimeters of the square to the equilateral triangle is  $4a : 3b$

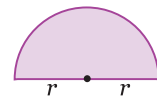
$$= 4\sqrt{A} : 3 \cdot \frac{2\sqrt{A}}{\sqrt[4]{3}} = 4 : \frac{6}{\sqrt[4]{3}} = 2 : \frac{3}{\sqrt[4]{3}}$$

$$= 2 \cdot \sqrt[4]{3} : 3 = 0.877 \dots \approx 0.88$$

**Ans** (D)

8 If the radius of the semicircle is  $r$ , the area is  $\frac{1}{2} \times r^2 \pi = 10 \therefore r^2 \pi = 20$

$$\therefore r^2 = \frac{20}{\pi} \therefore r = \sqrt{\frac{20}{\pi}} = \frac{2\sqrt{5}}{\sqrt{\pi}}$$



$\therefore$  The perimeter of the semicircular region is  $2r + \frac{1}{2} \times 2r\pi = 2r + r\pi = (2 + \pi)r$

$$= (2 + \pi) \cdot \frac{2\sqrt{5}}{\sqrt{\pi}}$$

If each side of the square is  $a$ ,

$$4a = (2 + \pi) \cdot \frac{2\sqrt{5}}{\sqrt{\pi}}$$

$$\therefore a = \frac{2\sqrt{5}(2 + \pi)}{4\sqrt{\pi}} = \frac{\sqrt{5}(2 + \pi)}{2\sqrt{\pi}}$$

$$\therefore \text{The area of the square is } a^2 = \frac{5(2 + \pi)^2}{4\pi}$$

$$= 10.51854 \dots \approx 10.52$$

**Ans** (B)

Lesson

23

## PLANE FIGURES

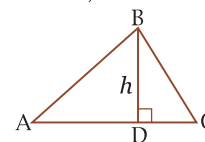
### Areas

2 Since  $h$  is 37.5% less than  $AC$ ,

$$h = \left(1 - \frac{37.5}{100}\right) \cdot AC$$

$$= \left(1 - \frac{3}{8}\right) AC = \frac{5}{8} AC$$

$$\therefore AC = \frac{8}{5} h$$



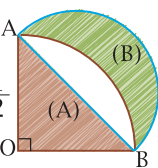
$\therefore$  The area of triangle ABC is  $\frac{1}{2} \times \frac{8}{5} h \cdot h$

$$= \frac{4}{5} h^2$$

**Ans** (C)

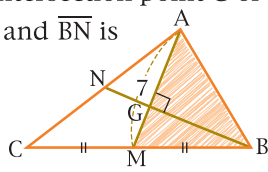
### Most Valuable Processes & Solutions

- 3** In the figure, if  $OA = OB = 1$ ,  
 $AB = \sqrt{1^2 + 1^2} = \sqrt{2}$   
 $\therefore$  The area of (A) is  $\frac{1}{2} \cdot 1^2 = \frac{1}{2}$   
 and the area of (B) is  
 $\frac{1}{2} \cdot 1^2 + \frac{1}{2} \cdot \left(\frac{\sqrt{2}}{2}\right)^2 \pi - \frac{1}{4} \cdot 1^2 \pi$   
 $= \frac{1}{2} + \frac{\pi}{4} - \frac{\pi}{4} = \frac{1}{2}$   
 $\therefore (A) : (B) = \frac{1}{2} : \frac{1}{2} = 1$



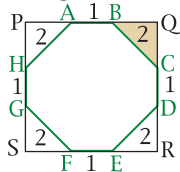
**Ans** (E)

- 4** In triangle ABC, the intersection point G of the two medians  $\overline{AM}$  and  $\overline{BN}$  is the center of gravity.  
 $\therefore NG : GB = 1 : 2$   
 $\therefore GB = \frac{2}{3} \times 9 = 6$   
 $\therefore$  The area of triangle ABM is  $\frac{1}{2} \cdot 7 \cdot 6 = 21$   
 Since  $CM = BM$ , the area of triangle ACM is the same as the area of triangle ABM.  
 $\therefore$  The area of triangle ABC is  $2 \times 21 = 42$ .



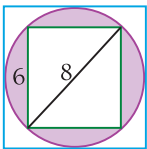
**Ans** (C)

- 5** In the figure, isosceles right triangle BQC,  
 $BQ = QC = \frac{2}{\sqrt{2}} = \sqrt{2}$   
 $\therefore$  The area of the octagon is  
 $(1 + 2\sqrt{2})^2 - 4 \times \frac{1}{2} (\sqrt{2})^2$   
 $= (1 + 4\sqrt{2} + 8) - 2 \cdot 2$   
 $= (9 + 4\sqrt{2}) - 4 = 5 + 4\sqrt{2}$



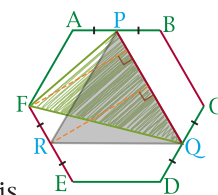
**Ans** (B)

- 6** If the side length of the circumscribed square is  $a$ ,  $a \times \frac{75}{100} = 6 \therefore a \times \frac{3}{4} = 6$   
 $\therefore a = 8$   $\therefore$  The length of a diagonal of the inscribed rectangle is  $a = 8$ .  
 $\therefore$  The other side length of the rectangle is  $\sqrt{8^2 - 6^2}$   
 $= \sqrt{64 - 36} = \sqrt{28} = 2\sqrt{7}$   
 $\therefore$  The area of the shaded regions is  
 $4^2 \pi - 6 \cdot 2\sqrt{7} = 16\pi - 12\sqrt{7} = 18.5165 \dots$   
 $\approx 18.52$



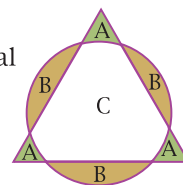
**Ans** (C)

- 7** In the figure,  $BC = 4$   
 and  $AD = 2 \times 4 = 8$   
 Since  $\overline{BC} \parallel \overline{AD}$ ,  
 $PQ = \frac{1}{2}(4 + 8) = 6$   
 In triangle FPQ, if  $\overline{PQ}$  is the base, the altitudes of  $\triangle FPQ$  and  $\triangle RPQ$  are the same. ( $\leftarrow R$  is the midpoint of  $\overline{EF}$ .)  
 $\therefore$  The area of triangle FPQ is equal to the area of equilateral triangle RPQ with each side 6.  
 $\therefore$  The area of triangle FPQ =  $\frac{\sqrt{3}}{4} \cdot 6^2 = 9\sqrt{3}$



**Ans** (B)

- 8** In the figure,  $3A = 3B$ .  
 The area of the equilateral triangle is  $C + 3A$ .  
 The area of the circle is  $C + 3B$ .  
 Since  $3A = 3B$ , the area of the equilateral triangle is equal to the area of the circle.  
 $\therefore \frac{\sqrt{3}}{4} \cdot 4^2 = r^2 \pi \therefore r^2 = \frac{4\sqrt{3}}{\pi}$   
 $\therefore r = \sqrt{\frac{4\sqrt{3}}{\pi}} = 1.48503 \dots \approx 1.49$



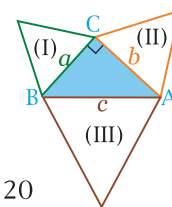
**Ans** (B)

Lesson  
**24**

## PYTHAGOREAN THEOREM

Concepts

- 2** In the figure, if  $BC = a$ ,  $CA = b$  and  $AB = c$ , the areas of 3 equilateral triangles are  
 $\frac{\sqrt{3}}{4} a^2 = \sqrt{3}$ ,  $\frac{\sqrt{3}}{4} b^2 = 4\sqrt{3}$   
 and  $\frac{\sqrt{3}}{4} c^2 = 5\sqrt{3}$   
 $\therefore a^2 = 4$ ,  $b^2 = 16$  and  $c^2 = 20$   
 Since  $a^2 + b^2 = c^2$ , the triangle ABC is a right triangle with  $C = 90^\circ$ . ( $\leftarrow a = 2$ ,  $b = 4$ ,  $c = 2\sqrt{5}$ )  
 $\therefore$  The area of triangle ABC is  
 $\frac{1}{2} \times a \cdot b = \frac{1}{2} \times 2 \cdot 4 = 4$



**Ans** (B)

Lesson  
**23**  
**24**



Most Valuable Processes & Solutions

Lesson  
36

LOGARITHMS  
Operations

$$\begin{aligned} 2 \quad & \log_2 2\sqrt{6} + \log_2 4\sqrt{3} - \log_2 6 \\ &= \log_2 \frac{2\sqrt{6} \cdot 4\sqrt{3}}{6} = \log_2 \frac{8\sqrt{18}}{6} \\ &= \log_2 \frac{8 \cdot 3\sqrt{2}}{6} = \log_2 4\sqrt{2} = \log_2 2^{\frac{5}{2}} = \frac{5}{2} \end{aligned}$$

**Ans** (E)

$$3 \quad \text{I. } (\log_2 4)^2 = 2^2 = 4 \text{ and } \log_2 4^2 = \log_2 16 = 4$$

$$\therefore (\log_2 4)^2 = \log_2 4^2$$

$$\begin{aligned} \text{II. If } 2^{\log\sqrt{3}} &= 3^{\log\sqrt{2}}, \log_2 2^{\log\sqrt{3}} = \log_3 3^{\log\sqrt{2}} \\ \therefore (\log\sqrt{3})(\log 2) &= (\log\sqrt{2})(\log 3) \\ \therefore \frac{1}{2} \log 3 \cdot \log 2 &= \frac{1}{2} \log 2 \cdot \log 3 \\ \therefore 2^{\log\sqrt{3}} &= 3^{\log\sqrt{2}} \end{aligned}$$

$$\begin{aligned} \text{III. } (\log 5)^2 - (\log 2)^2 \\ &= (\log 5 + \log 2)(\log 5 - \log 2) \\ &= \log 10 \cdot (\log 5 - \log 2) = 1 \cdot (\log 5 - \log 2) \\ &= \log \frac{5}{2} \end{aligned}$$

**Ans** (E)

$$\begin{aligned} 4 \quad & \log(0.0001 \times a^3) = \log 0.0001 + \log a^3 \\ &= \log 10^{-4} + 3 \log a = (-4) + 3 \times 0.5733 \\ &= -4 + 1.7199 = -2.2801 \end{aligned}$$

**Ans** (C)

$$\begin{aligned} 5 \quad & \log \cos 330^\circ = \log \cos (330^\circ - 360^\circ) \\ &= \log \cos (-30^\circ) = \log \cos 30^\circ = \log \frac{\sqrt{3}}{2} \\ &= \log \sqrt{3} - \log 2 = \frac{1}{2} \log 3 - \log 2 = \frac{1}{2} b - a \end{aligned}$$

**Ans** (B)

$$\begin{aligned} 6 \quad & \log_2 xy^2 + 3 \log_2 x - 2 \log_2 y + 5 \log_2 \frac{1}{x^2} \\ &= \log_2 xy^2 + 3 \log_2 x - 2 \log_2 y + 5 \log_2 x^{-2} \\ &= \log_2 xy^2 + \log_2 x^3 - \log_2 y^2 + \log_2 x^{-10} \\ &= \log_2 \frac{xy^2 \cdot x^3 \cdot x^{-10}}{y^2} = \log_2 x^{-6} = -6 \log_2 x \end{aligned}$$

**Ans** (D)

$$\begin{aligned} 7 \quad & f(g(x)) = \log \sqrt{\frac{x}{100}} = \log \frac{\sqrt{x}}{10} = \log \sqrt{x} - \log 10 \\ &= \log x^{\frac{1}{2}} - 1 = \frac{1}{2} \log x - 1 \end{aligned}$$

**Ans** (C)

$$\begin{aligned} 8 \quad & \log_2 5 \cdot \log_{25} \frac{1}{3} \cdot \log_{\sqrt{3}} 8 \\ &= \frac{\log 5}{\log 2} \cdot \frac{\log \frac{1}{3}}{\log 25} \cdot \frac{\log 8}{\log \sqrt{3}} \\ &= \frac{\log 5}{\log 2} \cdot \frac{\log 3^{-1}}{\log 5^2} \cdot \frac{\log 2^3}{\log 3^{\frac{1}{2}}} \\ &= \frac{\log 5}{\log 2} \cdot \frac{-\log 3}{2 \log 5} \cdot \frac{3 \log 2}{\frac{1}{2} \log 3} = \frac{-3}{2} \cdot \frac{1}{2} = -\frac{3}{4} \end{aligned}$$

**Ans** (A)

Lesson  
37

LOGARITHMS  
Functions / Equations

$$\begin{aligned} 2 \quad & \text{From the equation } \ln(x+2) = 1 + \ln x, \\ & \text{Anti } \log > 0 \Rightarrow \begin{cases} x+2 > 0 \Rightarrow x > -2 \dots\dots \textcircled{1} \\ x > 0 \dots\dots \textcircled{2} \end{cases} \\ & \text{From } \textcircled{1} \text{ and } \textcircled{2}, x > 0 \\ & \text{And } \ln(x+2) = \ln e + \ln x \\ & \therefore \ln(x+2) = \ln ex \quad \therefore x+2 = ex \\ & \therefore (e-1)x = 2 \quad \therefore x = \frac{2}{e-1} \\ & \text{Since } \frac{2}{e-1} > 0, x = \frac{2}{e-1} \end{aligned}$$

**Ans** (E)

$$\begin{aligned} 3 \quad & \text{From the equation } \log_3 x = \log_x 5, \\ & \frac{\ln x}{\ln 3} = \frac{\ln 5}{\ln x} \quad \therefore (\ln x)^2 = \ln 3 \cdot \ln 5 \\ & \therefore \ln x = \pm \sqrt{\ln 3 \cdot \ln 5} = \pm 1.32972 \dots \approx \pm 1.33 \\ & \therefore x \approx e^{1.33}, e^{-1.33} \approx 3.781, 0.264 \\ & \therefore \text{The sum of roots of the equation is} \\ & 3.781 + 0.264 = 4.045 \end{aligned}$$

**Ans** (A)

$$\begin{aligned} 4 \quad & f(x) = \frac{100^{\log x}}{\log 100^x} = \frac{100^{\log_{100} x^2}}{x \log 100} \\ &= \frac{x^2}{x \cdot 2} = \frac{x}{2} \quad (\leftarrow \text{Antilog } x > 0) \\ & \therefore f\left(\frac{1}{5}\right) = \frac{\frac{1}{5}}{2} = \frac{1}{10} \\ & \therefore \log f\left(\frac{1}{5}\right) = \log \frac{1}{10} = \log 10^{-1} = -1 \end{aligned}$$

**Ans** (B)

$$\begin{aligned} 5 \quad & \text{From the equation } 3^{x+3} = 135, \\ & \log 3^{x+3} = \log 135 \end{aligned}$$

Lesson  
36  
37

## Most Valuable Processes & Solutions

∴ The graph of  $(x-1)^2 + \frac{y^2}{2^2} = 1$   
 [← an ellipse with center at (1, 0)]  
 is represented by (A). **Ans** (A)

**8** From  $(x-y, x+y)$ ,  
 if  $\begin{cases} X = x-y \dots\dots ① \\ Y = x+y \dots\dots ② \end{cases}$   
 From ① + ②,  $X+Y = 2x \therefore x = \frac{X+Y}{2}$   
 From ① - ②,  $X-Y = -2y \therefore y = \frac{Y-X}{2}$   
 Since  $x^2 + y^2 = 1$ ,  $\left(\frac{X+Y}{2}\right)^2 + \left(\frac{Y-X}{2}\right)^2 = 1$   
 $\therefore \frac{X^2 + 2XY + Y^2}{4} + \frac{Y^2 - 2XY + X^2}{4} = 1$   
 $\therefore \frac{2(X^2 + Y^2)}{4} = 1 \therefore X^2 + Y^2 = 2$   
 $\therefore x^2 + y^2 = 2$  represents the set of all  
 points  $(x, y)$ . **Ans** (A)

Lesson  
**69**

### PARAMETRIC EQUATIONS

#### Graphs

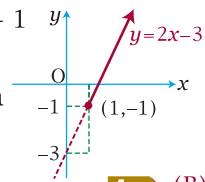
**2** I.  $\begin{cases} x = 2\sin\theta \Rightarrow x^2 = 4\sin^2\theta \dots\dots ① \\ y = 2\cos\theta \Rightarrow y^2 = 4\cos^2\theta \dots\dots ② \end{cases}$   
 From ① + ②,  $x^2 + y^2 = 4(\sin^2\theta + \cos^2\theta) = 4$   
 $\therefore x^2 + y^2 = 2^2$  (← Circle)  
 II.  $\begin{cases} x = t \Rightarrow t = x \dots\dots ① \\ y = \sqrt{4-t^2} \Rightarrow y = \sqrt{4-x^2} \dots\dots ② \end{cases}$   
 Since  $\sqrt{4-t^2} \geq 0$ ,  $y \geq 0$   
 From ① → ②,  $y = \sqrt{4-x^2} \therefore y^2 = 4-x^2$   
 $\therefore x^2 + y^2 = 2^2$  (←  $y \geq 0$ ; Semicircle)  
 III.  $\begin{cases} x = \sqrt{s} \Rightarrow s = x^2 \dots\dots ① \text{ Since } \sqrt{s} \geq 0, x \geq 0 \\ y = \sqrt{4-s} \Rightarrow y = \sqrt{4-x^2} \dots\dots ② \end{cases}$   
 Since  $\sqrt{4-s} \geq 0$ ,  $y \geq 0$   
 From ① → ②,  $y = \sqrt{4-x^2} \therefore y^2 = 4-x^2$   
 $\therefore x^2 + y^2 = 2^2$  (←  $x \geq 0, y \geq 0$ ; Quadrant)  
 $\therefore$  All the equations have different graphs. **Ans** (E)

**3**  $\begin{cases} x = t^2 \dots\dots ① \Rightarrow \text{Since } t^2 \geq 0, x \geq 0 \\ y = 2t^2 + 3 \dots\dots ② \end{cases}$   
 From ① → ②,  $y = 2x + 3$  ( $x \geq 0$ )

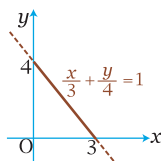
∴ The graph of  $y = 2x + 3$  ( $x \geq 0$ ) is  
 represented by (E). **Ans** (E)

**4** From  $\begin{cases} x = t^2 + 2t \\ y = t^2 - 4t \end{cases}$ ,  
 $x = t^2 + 2t = (t+1)^2 - 1 \geq -1 \therefore x \geq -1$   
 $\therefore$  The domain of the function is  $\{x \mid x \geq -1\}$   
**Ans** (B)

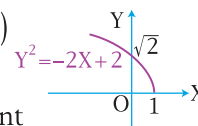
**5**  $\begin{cases} x = \sqrt{t} + 1 \Rightarrow \sqrt{t} = x - 1 \geq 0 \dots\dots ① \\ y = 2\sqrt{t} - 1 \Rightarrow 2\sqrt{t} = y + 1 \geq 0 \dots\dots ② \end{cases}$   
 Since  $\sqrt{t} \geq 0$ ,  $x \geq 1$   
 Since  $2\sqrt{t} \geq 0$ ,  $y \geq -1$   
 From ① → ②,  $2(x-1) = y+1$   
 $\therefore y = 2x - 3$  ( $x \geq 1$ )  
 The graph is a portion of a  
 straight line. **Ans** (B)



**6**  $\begin{cases} x = 3\cos^2\theta \Rightarrow \cos^2\theta = \frac{x}{3} \dots\dots ① \\ y = 4\sin^2\theta \Rightarrow \sin^2\theta = \frac{y}{4} \dots\dots ② \end{cases}$   
 Since  $0 \leq \cos^2\theta \leq 1$ ,  $0 \leq x \leq 3$   
 Since  $0 \leq \sin^2\theta \leq 1$ ,  $0 \leq y \leq 4$   
 From ① + ②,  $\cos^2\theta + \sin^2\theta = \frac{x}{3} + \frac{y}{4}$   
 $\therefore \frac{x}{3} + \frac{y}{4} = 1$  ( $0 \leq x \leq 3, 0 \leq y \leq 4$ )  
 In the graph,  
 the length of the locus of  
 the points is  $\sqrt{3^2 + 4^2} = 5$   
**Ans** (A)



**7** From  $\left(\frac{y}{2}, \sqrt{x}\right)$ , if  $X = \frac{y}{2}$  and  $Y = \sqrt{x}$ ,  
 since  $\sqrt{x} \geq 0$ ,  $Y \geq 0 \therefore y = 2X$  and  $x = Y^2$   
 From  $y = -x + 2$ ,  $2X = -Y^2 + 2$   
 $\therefore Y^2 = -2X + 2 \therefore Y^2 = 4 - \frac{1}{2}(X-1)$  (←  $Y \geq 0$ )  
 $\therefore$  The set of points  $\left(\frac{y}{2}, \sqrt{x}\right)$   
 represents a portion of  
 parabola with vertex point  
 (1, 0) as shown. **Ans** (C)



Lesson  
**68**  
**69**

8  $\begin{cases} x = 1 + 2^t \Rightarrow 2^t = x - 1 \dots\dots ① \\ \text{Since } 2^t > 0 \therefore x > 1 \\ y = 1 - 2^{-t} \Rightarrow y = 1 - \frac{1}{2^t} \dots\dots ② \end{cases}$

From ①  $\rightarrow$  ②,  
 $y = 1 - \frac{1}{x-1} \quad (x > 1)$   
 $\therefore$  The graph of  $y = f(x)$  is as shown.

**Ans** (C)

$\therefore n = -1, -2, -3$  and  $-6$   
 $\therefore x = 2^{-\frac{6}{(-1)}}, 2^{-\frac{6}{(-2)}}, 2^{-\frac{6}{(-3)}}$  and  $2^{-\frac{6}{(-6)}}$   
 $= (2^6, 2^3, 2^2$  and  $2 =) 64, 8, 4$  and  $2$   
 $\therefore$  There are four positive integer elements in the set A.

**Ans** (C)

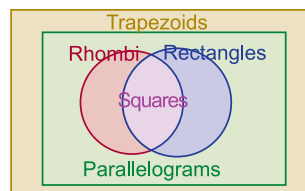
Lesson  
70

SETS  
Concept

2 From  $A = \{1, 3\}$  and  $B = \{0, 1\}$ ,  
 $a \in \{1, 3\}$  and  $b \in \{0, 1\}$   
 $\therefore c = a + 2b$   
 $= 1 + 2 \cdot 0, 1 + 2 \cdot 1, 3 + 2 \cdot 0, 3 + 2 \cdot 1$   
 $= 1, 3, 3, 5 \quad \therefore c = \{1, 3, 5\}$   
 $\therefore A \blacktriangle B = \{c | c = a + 2b\} = \{1, 3, 5\}$   
 $\therefore$  The set of  $A \blacktriangle B$  has 3 elements.

**Ans** (B)

6



In the diagram,  
 (A)  $\{\text{Rhombi}\} \subset \{\text{Trapezoids}\} \therefore A \subset B$   
 (B)  $\{\text{Parallelograms}\} \subset \{\text{Trapezoids}\} \therefore E \subset B$   
 (C)  $\{\text{Squares}\} \subset \{\text{Rhombi}\} \therefore C \subset A$   
 $\therefore A \cap C = C$   
 (D)  $\{\text{Rhombi}\} \cap \{\text{Rectangles}\} = \{\text{Squares}\}$   
 $\therefore A \cap D = C$   
 (E)  $\{\text{Rectangles}\} \subset \{\text{Parallelograms}\} \therefore D \subset E$   
 $\therefore D \cup E = E$

**Ans** (E)

Lesson  
69  
70

3  $S = \{P | P \text{ is a prime number less than } 10\}$   
 $= \{2, 3, 5, 7\}$   
 $\therefore$  The number of subsets of  $S$ , excluding itself is  $2^4 - 1 = 16 - 1 = 15$

**Ans** (C)

4 I. The set of the even integers  
 $= \{\dots, -4, -2, 0, 2, 4, 6, \dots\}$   
 $\therefore$  There is no least element in the set.

II. The set of the prime numbers  
 $= \{2, 3, 5, 7, 11, 13, \dots\}$   
 $\therefore 2$  is the least element in the set.

III. The set of positive rational numbers  
 $= \{\dots, \frac{1}{1000}, \frac{1}{100}, \frac{1}{10}, 1, \frac{3}{2}, \dots\}$   
 $\therefore$  There is no least element in the set.

**Ans** (B)

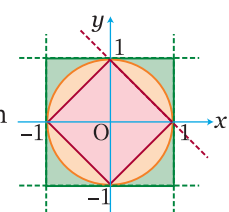
7 In the figure,  
 $A = \{(x, y) | x^2 + y^2 < 1\}$   
 $\Rightarrow$  Inside of the circle with diameter of 2

$B = \{(x, y) | |x| + |y| < 1\}$   
 $\Rightarrow$  Inside of the rhombus with diagonal of 2.

$C = \{(x, y) | |x| < 1 \text{ and } |y| < 1\}$   
 $\Rightarrow$  Inside of the square with side of 2.

$\therefore B \subset A \subset C$

**Ans** (B)



5 Since  $x = (\frac{1}{64})^{\frac{1}{n}} = (-\frac{1}{2^6})^{\frac{1}{n}} = (2^{-6})^{\frac{1}{n}} = 2^{-\frac{6}{n}}$ ,  
 $x$  is a positive integer, where  $n$  is a negative factor of 6. [ $\leftarrow -\frac{6}{n}$  is a positive integer]

8 The number of subsets with three elements is  ${}^7C_3 = \frac{7 \cdot 6 \cdot 5}{3 \cdot 2 \cdot 1} = 35$   
 These 35 subsets have all  $(35 \times 3 =) 105$  elements.  
 Each of 1, 2, 3, ..., 7 has  $(105 \div 7 =) 15$  times in appearance.  
 $\therefore$  The sum of the elements of the subsets A is  $15 \times (1 + 2 + \dots + 7) = 28 \times 15 = 420$

**Ans** (E)

## Most Valuable Processes & Solutions

- (A) Center  $\Rightarrow (-1, 2)$   
 (B) Foci  $\Rightarrow (0 - 1, \sqrt{2^2 + 1^2} + 2) = (-1, 2 \pm \sqrt{5})$   
 (C) Length of transverse axis  $\Rightarrow 2 \times 2 = 4$   
 (D) Eccentricity  $\Rightarrow \frac{\sqrt{5}}{2}$   
 (E) Length of latus rectum  $\Rightarrow \frac{2(-1)^2}{2} = 1$

**Ans** (E)

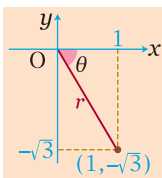
Lesson

77

### POLAR EQUATIONS

#### Polar coordinates

- 2 From the point  $(1, -\sqrt{3})$ ,  
 $r = \sqrt{x^2 + y^2} = \sqrt{1^2 + (-\sqrt{3})^2} = 2$   
 $\tan \theta = \frac{y}{x} = \frac{-\sqrt{3}}{1} = -\sqrt{3}$   
 $\therefore \theta = -\frac{\pi}{3}$



Since the point lies in the quadrant IV,  $\theta = 2\pi - \frac{\pi}{3} = \frac{5\pi}{3}$

- $\therefore$  The polar coordinates of the point  $(1, -\sqrt{3})$  is  $(2, \frac{5\pi}{3})$ .

**Ans** (A)

Lesson

76

77

- 3 Since  $(r, \theta) = (r, \theta \pm 2n\pi) = (-r, \theta \pm (2n-1)\pi)$  where  $r$  is an integer,  
 $(2, 30^\circ) = \left[ \begin{array}{l} (2, 30^\circ + 360^\circ) = (2, 30^\circ - 360^\circ) \\ (-2, 30^\circ + 180^\circ) = (-2, 30^\circ - 180^\circ) \end{array} \right.$   
 $\therefore (2, 30^\circ) = \left[ \begin{array}{l} (2, 390^\circ) = (2, -330^\circ) \\ (-2, 210^\circ) = (-2, -150^\circ) \end{array} \right.$   
 $\therefore$  The point  $(-2, 390^\circ)$  is different from the others.

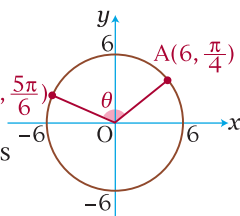
**Ans** (E)

- 4 In the figure,

$$\theta = \frac{5\pi}{6} - \frac{\pi}{4} = \frac{10\pi - 3\pi}{12} = \frac{7\pi}{12}$$

$\therefore$  The length of arc  $\widehat{AB}$  is

$$a = r\theta = 6 \times \frac{7\pi}{12} = \frac{7\pi}{2} = 10.9956 \dots \approx 11.$$



**Ans** (B)

- 5 From the equation  $r^2 = 36 \sec 2\theta$ ,  
 $r^2 = 36 \cdot \frac{1}{\cos 2\theta}$

$$\begin{aligned} \therefore r^2 \cdot \cos 2\theta &= 36 & \therefore r^2(\cos^2\theta - \sin^2\theta) &= 36 \\ \therefore (r\cos\theta)^2 - (r\sin\theta)^2 &= 36 & \therefore x^2 - y^2 &= 36 \\ \therefore \frac{x^2}{6^2} - \frac{y^2}{6^2} &= 1 & (\leftarrow \text{Hyperbola}) \end{aligned}$$

**Ans** (B)

- 6 From  $\begin{cases} r = \cos\theta \dots\dots \textcircled{1} \\ r = \sin 2\theta \dots\dots \textcircled{2} \end{cases}$ ,

Since  $\textcircled{1} = \textcircled{2}$ ,  $\cos\theta = \sin 2\theta$

$$\therefore \cos\theta = 2\sin\theta \cdot \cos\theta$$

$$\therefore 2\sin\theta \cdot \cos\theta - \cos\theta = 0$$

$$\therefore \cos\theta(2\sin\theta - 1) = 0$$

$$\therefore \cos\theta = 0 \text{ or } \sin\theta = \frac{1}{2}$$

$$\therefore \theta = \frac{\pi}{2}, \frac{3\pi}{2}, \frac{\pi}{6} \text{ and } \frac{5\pi}{6}$$

$$\therefore (r, \theta) = (\cos\theta, \theta)$$

$$= \left(0, \frac{\pi}{2}\right), \left(0, \frac{3\pi}{2}\right), \left(\frac{\sqrt{3}}{2}, \frac{\pi}{6}\right) \text{ and } \left(-\frac{\sqrt{3}}{2}, \frac{5\pi}{6}\right)$$

Since  $\left(0, \frac{\pi}{2}\right) = \left(0, \frac{3\pi}{2}\right)$ ,

there are 3 points of intersection in two graphs of  $r = \cos\theta$  and  $r = \sin 2\theta$

**Ans** (D)

- 7 i)  $r = 2 \Rightarrow r^2 = 4 \therefore r^2(\cos^2\theta + \sin^2\theta) = 4$   
 $\therefore (r\cos\theta)^2 + (r\sin\theta)^2 = 4 \therefore x^2 + y^2 = 4$   
 $\therefore x^2 + y^2 = 2^2$

ii)  $r = \frac{1}{\sin\theta} \Rightarrow r\sin\theta = 1 \therefore y = 1$

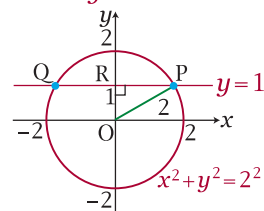
From i) and ii),

in the graph,

OP = 2 and OR = 1

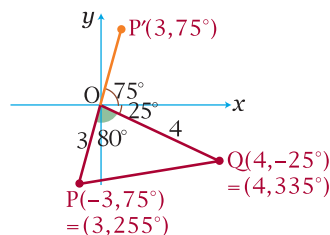
$$\therefore PR = \sqrt{2^2 - 1^2} = \sqrt{3}$$

$$\therefore PQ = 2\sqrt{3}$$



**Ans** (E)

- 8



If the figure,

$$P = (-3, 75^\circ) = (3, 180^\circ + 75^\circ) = (3, 255^\circ)$$

$$Q = (4, -25^\circ) = (4, 360^\circ - 25^\circ) = (4, 335^\circ)$$

$$\therefore \angle POQ = 335^\circ - 255^\circ = 80^\circ$$

In triangle POQ,

$$PQ^2 = 3^2 + 4^2 - 2 \cdot 3 \cdot 4 \cos 80^\circ = 25 - 24 \cos 80^\circ$$

$$\therefore PQ = \sqrt{25 - 24 \cos 80^\circ} = 4.5642 \dots \approx 4.56$$

**Ans** (B)

Lesson  
78

## POLAR EQUATIONS

### Complex numbers

2 From  $z = 2(\cos 50^\circ + i \sin 50^\circ)$ ,

$$\bar{z} = 2(\cos 50^\circ - i \sin 50^\circ)$$

$$= 2(\cos(-50^\circ) + i \sin(-50^\circ))$$

**Ans** (C)

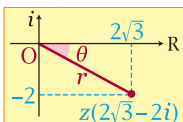
3 From the complex number  $z = 2\sqrt{3} - 2i$ ,

$$r = \sqrt{(2\sqrt{3})^2 + (-2)^2} = \sqrt{4 \cdot 3 + 4} = 4$$

$$\text{and } \tan \theta = \frac{-2}{2\sqrt{3}} = -\frac{1}{\sqrt{3}} \therefore \theta = -\frac{\pi}{6}$$

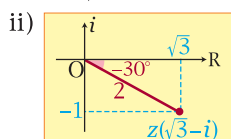
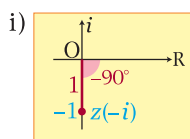
$$\therefore \theta = 2\pi - \frac{\pi}{6} = \frac{11}{6}\pi$$

$$\therefore z = 4\left(\cos \frac{11}{6}\pi + i \sin \frac{11}{6}\pi\right)$$



**Ans** (D)

4 From the complex number  $\frac{-i}{\sqrt{3} - i}$ ,



i)  $-i = \sqrt{0^2 + (-1)^2}(\cos(-90^\circ) + i \sin(-90^\circ))$   
 $= \cos(-90^\circ) + i \sin(-90^\circ)$

ii)  $\sqrt{3} - i$   
 $= \sqrt{(\sqrt{3})^2 + (-1)^2}(\cos(-30^\circ) + i \sin(-30^\circ))$   
 $= 2(\cos(-30^\circ) + i \sin(-30^\circ))$

From i) and ii),

$$\frac{-i}{\sqrt{3} - i} = \frac{\cos(-90^\circ) + i \sin(-90^\circ)}{2(\cos(-30^\circ) + i \sin(-30^\circ))}$$

$$= \frac{1}{2}[(\cos(-90^\circ) - (-30^\circ)) + (i \sin(-90^\circ) - (-30^\circ))]$$

$$= \frac{1}{2}(\cos(-60^\circ) + i \sin(-60^\circ))$$

**Ans** (E)

5 Since  $x = \cos 15^\circ + i \sin 15^\circ$ ,

$$x^{20} - \frac{1}{x^{20}} = x^{20} - x^{-20}$$

$$= (\cos 15^\circ + i \sin 15^\circ)^{20} - (\cos 15^\circ + i \sin 15^\circ)^{-20}$$

$$= (\cos 20 \cdot 15^\circ + i \sin 20 \cdot 15^\circ)$$

$$- (\cos(-20 \cdot 15^\circ) + i \sin(-20 \cdot 15^\circ))$$

$$= (\cos 300^\circ + i \sin 300^\circ)$$

$$- (\cos(-300^\circ) + i \sin(-300^\circ))$$

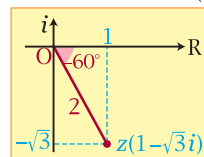
$$= (\cos 300^\circ + i \sin 300^\circ) - (\cos 300^\circ - i \sin 300^\circ)$$

$$= \cos 300^\circ + i \sin 300^\circ - \cos 300^\circ + i \sin 300^\circ$$

$$= 2i \sin 300^\circ = 2i \sin(-60^\circ) = 2i \cdot \left(-\frac{\sqrt{3}}{2}\right) = -\sqrt{3}i$$

**Ans** (E)

6 If the complex number  $z = (1 - \sqrt{3}i)^{\frac{3}{2}}$ ,



$$z = \left[\sqrt{1^2 + (-\sqrt{3})^2}(\cos(-60^\circ) + i \sin(-60^\circ))\right]^{\frac{3}{2}}$$

$$= [2(\cos(-60^\circ) + i \sin(-60^\circ))]^{\frac{3}{2}}$$

$$= 2^{\frac{3}{2}}(\cos(\frac{3}{2} \cdot (-60^\circ)) + i \sin(\frac{3}{2} \cdot (-60^\circ)))$$

$$= 2\sqrt{2}(\cos(-90^\circ) + i \sin(-90^\circ))$$

$$= 2\sqrt{2}(0 + i(-1)) = -2\sqrt{2}i$$

**Ans** (B)

7 From  $z = 2 + 2i$ ,

$$r = \sqrt{2^2 + 2^2} = \sqrt{8} = 2\sqrt{2}$$

$$\text{and } \tan \theta = \frac{2}{2} = 1 \therefore \theta = 45^\circ$$

$$\therefore (2 + 2i)^{\frac{1}{3}} = 2\sqrt{2}(\cos 45^\circ + i \sin 45^\circ)^{\frac{1}{3}}$$

$$= (2\sqrt{2})^{\frac{1}{3}}\left(\cos \frac{360^\circ k + 45^\circ}{3} + i \sin \frac{360^\circ k + 45^\circ}{3}\right)$$

$$= \sqrt{2}(\cos(120^\circ k + 15^\circ) + i \sin(120^\circ k + 15^\circ))$$

i)  $k = 0 \Rightarrow z_1 = \sqrt{2}(\cos 15^\circ + i \sin 15^\circ)$

ii)  $k = 1 \Rightarrow z_2 = \sqrt{2}(\cos 135^\circ + i \sin 135^\circ)$

$$[\leftarrow \cos(120^\circ + 15^\circ) + i \sin(120^\circ + 15^\circ)]$$

iii)  $k = 2 \Rightarrow z_3 = \sqrt{2}(\cos 255^\circ + i \sin 255^\circ)$

$$[\leftarrow \cos(240^\circ + 15^\circ) + i \sin(240^\circ + 15^\circ)]$$

**Ans** (D)

Lesson  
77  
78

## Most Valuable Processes & Solutions

Since the plane is parallel to the  $z$ -axis, the equation of the line is equal to the equation of the plane.

$$\therefore -2x + 3y = -6 \quad \therefore 2x - 3y = 6$$

**Ans** (A)

- 6 From two passing points  $A(2, -1, 4)$  and  $B(1, -3, 6)$ , the equation of the line  $\overline{AB}$  is

$$\frac{x-2}{1-2} = \frac{y-(-1)}{-3-(-1)} = \frac{z-4}{6-4}$$

$$\therefore \frac{x-2}{-1} = \frac{y+1}{-2} = \frac{z-4}{2}$$

Since the  $xy$ -plane is  $z = 0$ , if the intersection point  $P(a, b, 0)$ ,

$$\frac{a-2}{-1} = \frac{b+1}{-2} = \frac{0-4}{2} (= -2)$$

$$\therefore a - 2 = 2 \text{ and } b + 1 = 4$$

$$\therefore a = 4 \text{ and } b = 3 \quad \therefore P(4, 3, 0)$$

**Ans** (D)

- 7 From the plane  $20x + 15y + 6z = 60$ , the  $x$ -intercept ( $\leftarrow y = z = 0$ )

$$\Rightarrow 20x = 60 \quad \therefore x = 3$$

the  $y$ -intercept ( $\leftarrow z = x = 0$ )

$$\Rightarrow 15y = 60 \quad \therefore y = 4$$

the  $z$ -intercept ( $\leftarrow x = y = 0$ )

$$\Rightarrow 6z = 60 \quad \therefore z = 10$$

In the figure, the volume of the pyramid

$$O-ABC \text{ is } \frac{1}{3} \times \underbrace{\left(\frac{1}{2} \cdot 3 \cdot 4\right)}_{\text{Base}} \times \underbrace{10}_{\text{Height}} = \frac{1}{3} \cdot 6 \cdot 10 = 20$$

**Ans** (A)

- 8 From two planes  $\begin{cases} 2x + y - z = 13 \dots\dots ① \\ x - 2y + z = -4 \dots\dots ② \end{cases}$

$$\text{from } ① + ②, 3x - y = 9 \quad \therefore y = 3x - 9 \dots\dots ③$$

$$\text{from } ③ \rightarrow ①, 2x + (3x - 9) - z = 13$$

$$\therefore 5x - z = 22 \quad \therefore z = 5x - 22$$

$$\therefore (x, 3x - 9, 5x - 22)$$

$\therefore$  The equation of the line is

$$x = t, y = 3t - 9, z = 5t - 22$$

Since point  $(a, 3, b)$  lies on the line  $l$ ,

$$a = t, 3 = 3t - 9, b = 5t - 22$$

$$\therefore \begin{cases} 3 = 3a - 9 \quad \therefore 3a = 12 \quad \therefore a = 4 \\ b = 5a - 22 \quad \therefore b = 5 \cdot 4 - 22 \quad \therefore b = -2 \\ \therefore a + b = 4 + (-2) = 2 \end{cases}$$

**Ans** (B)

Lesson  
85

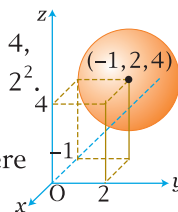
### SPACE Spheres

- 2 From the sphere

$$(x + 1)^2 + (y - 2)^2 + (z - 4)^2 = 4,$$

$$(x + 1)^2 + (y - 2)^2 + (z - 4)^2 = 2^2.$$

Since its center is  $(-1, 2, 4)$  and the radius is 2, the sphere is tangent to the  $xz$ -plane.



**Ans** (E)

- 3 Since the equation of the sets of the points is the equation of a sphere with radius 4 and the center  $(-1, 2, -3)$ ,

$$(x + 1)^2 + (y - 2)^2 + (z + 3)^2 = 4^2$$

$$\therefore x^2 + 2x + 1 + y^2 - 4y + 4 - z^2 + 6z + 9 = 16$$

$$\therefore x^2 + y^2 + z^2 + 2x - 4y + 6z - 2 = 0$$

**Ans** (E)

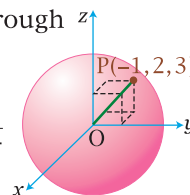
- 4 Since the sphere passes through

the point  $(-1, 2, 3)$ ,

the radius of the sphere is

$$OP = \sqrt{(-1)^2 + 2^2 + 3^2} = \sqrt{14}$$

$\therefore$  The equation of the sphere is  $x^2 + y^2 + z^2 = 14$



$$(A) (0, 0, 5) \Rightarrow 0^2 + 0^2 + 5^2 = 25 > 14 \quad [\leftarrow \text{Out}]$$

$$(B) (0, 2, 4) \Rightarrow 0^2 + 2^2 + 4^2 = 20 > 14 \quad [\leftarrow \text{Out}]$$

$$(C) (2, -2, 2) \Rightarrow 2^2 + (-2)^2 + 2^2 = 12 < 14 \quad [\leftarrow \text{In}]$$

$$(D) (3, \sqrt{5}, 0) \Rightarrow 3^2 + (\sqrt{5})^2 + 0^2 = 14 \quad [\leftarrow \text{On}]$$

$$(E) (-1, 2, \sqrt{10}) \Rightarrow (-1)^2 + 2^2 + (\sqrt{10})^2 = 15 > 14 \quad [\leftarrow \text{Out}]$$

$\therefore$  The point  $(2, -2, 2)$  lies inside the sphere.

**Ans** (C)

- 5 From the equation of the sphere

$$x^2 + y^2 + z^2 - 2x + 6y - 8z + 1 = 0,$$

$$x^2 - 2x + y^2 + 6y + z^2 - 8z + 1 = 0$$

Lesson  
84  
85

$\therefore (x-1)^2 + (y+3)^2 + (z-4)^2 = 1 + 9 + 16 - 1$   
 $\therefore (x-1)^2 + (y+3)^2 + (z-4)^2 = 5^2$   
 Since the radius of the sphere is 5, its  
 volume is  $\frac{4}{3}\pi \cdot 5^3 = 523.5987\cdots \approx 523.6$

**Ans** (E)

**6** Since A(-3, 4, 2) and B(1, 2, -2) are the endpoints of diameter, the center of the sphere is the midpoint of A and B.  
 $\therefore C\left(\frac{-3+1}{2}, \frac{4+2}{2}, \frac{2+(-2)}{2}\right) = (-1, 3, 0)$   
 Since the radius of the sphere is the length of  $\overline{AC}$ ,  $r = \sqrt{((-1) - (-3))^2 + (3 - 4)^2 + (0 - 2)^2}$   
 $= \sqrt{2^2 + (-1)^2 + (-2)^2} = \sqrt{9} = 3$

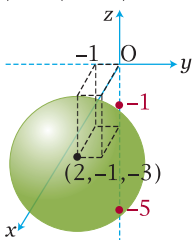
$\therefore$  The equation of the sphere is  
 $(x+1)^2 + (y-3)^2 + z^2 = 3^2$   
 $\therefore x^2 + 2x + 1 + y^2 - 6y + 9 + z^2 - 9 = 0$   
 $\therefore x^2 + y^2 + z^2 + 2x - 6y + 1 = 0$

**Ans** (A)

**7** Since the z-axis is  $x = y = 0$ , the z-intercepts of the sphere  $(x-2)^2 + (y+1)^2 + (z+3)^2 = 3^2$  are  $(-2)^2 + 1^2 + (z+3)^2 = 9$ .

$\therefore (z+3)^2 = 4 \quad \therefore z+3 = \pm 2$   
 $\therefore z = \pm 2 - 3 = -1, -5$

$\therefore$  The distance of the two z-intercepts is  
 $(-1) - (-5) = 4$ .



**Ans** (B)

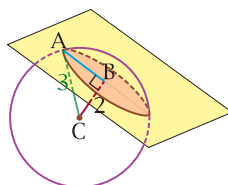
**8** From the sphere  $x^2 + y^2 + z^2 - 2x - 2y = 7$ ,  
 $x^2 - 2x + y^2 - 2y + z^2 = 7$ ,  
 $(x-1)^2 + (y-1)^2 + z^2 = 9$

$\therefore$  The center of the sphere C(1, 1, 0) and the radius CA = 3

$\therefore$  The distance of the center C(1, 1, 0) of the sphere and the plane  $2x + y + 2z = 9$  is  $\frac{|2 \cdot 1 + 1 + 2 \cdot 0 - 9|}{\sqrt{2^2 + 1^2 + 2^2}} = \frac{|3 - 9|}{3} = 2$

$\therefore$  The radius of the circle AB =  $\sqrt{3^2 - 2^2} = \sqrt{5}$   
 $\therefore$  The area of the circle is  $(\sqrt{5})^2 \pi = 5\pi = 15.708\cdots \approx 15.71$

**Ans** (D)



**Lesson 86 COUNTING Permutations**

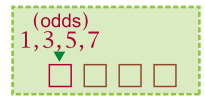
**2**  $\frac{(n+1)! - n!}{(n-1)!} = \frac{n!(n+1-1)}{(n-1)!} = \frac{n \cdot n!}{(n-1)!}$   
 $= \frac{n \cdot n \cdot \cancel{(n-1)!}}{\cancel{(n-1)!}} = n^2$

**Ans** (E)

**3**  $\frac{(3!)!}{(3!)^2} = \frac{(3 \cdot 2 \cdot 1)!}{(3 \cdot 2 \cdot 1)^2} = \frac{6!}{6^2}$   
 $= \frac{\cancel{6} \cdot 5 \cdot 4 \cdot 3 \cdot 2 \cdot 1}{\cancel{6} \cdot 6} = \frac{5 \cdot 4 \cdot \cancel{3} \cdot \cancel{2} \cdot 1}{\cancel{6}}$   
 $= 5 \cdot 4 = 5P_2 = nPr \quad \therefore n = 5 \text{ and } r = 2$   
 $\therefore n + r = 5 + 2 = 7$

**Ans** (C)

**4** From the seven digits 1, 2, 3, 4, 5, 6 and 7,  
 ${}^4P_1 \times {}^{7-1}C_3 \times 3!$   
 $\overset{\text{Odds}}{\uparrow} = 4 \times {}^6C_3 \times 3! = 4 \times {}^6P_3$   
 $= 4 \times 6 \cdot 5 \cdot 4 = 4 \times 120 = 480$



**Ans** (D)

**5** From the six digits 0, 1, 2, 3, 4 and 5,  
 i)  $1 \square \square \square \Rightarrow {}^3C_1 \times {}^4P_2 = 3 \times (4 \times 3) = \frac{36}{36\text{th}}$   
 $\quad \quad \quad \uparrow$   
 $\quad \quad \quad 0, 2, 4$   
 $\quad \quad \quad \text{Even}$   
 ii)  $2 \square \square \square \Rightarrow {}^2C_1 \times {}^4P_2 = 3 \times (4 \times 3) = \frac{36}{72\text{nd}}$   
 $\quad \quad \quad \uparrow$   
 $\quad \quad \quad 0, 4$   
 $\quad \quad \quad \text{Even}$   
 iii)  $3 0 \square \square \Rightarrow {}^2C_1 \times {}^3P_1 = 2 \times 3 = \frac{6}{78\text{th}}$   
 $\quad \quad \quad \uparrow$   
 $\quad \quad \quad 2, 4$   
 $\quad \quad \quad \text{Even}$   
 iv)  $3102 < 3104 < 3120, 3124 < 3140$   
 $\quad \quad \quad \uparrow \quad \quad \uparrow \quad \quad \uparrow \quad \quad \uparrow \quad \quad \uparrow$   
 $\quad \quad \quad 79\text{th} \quad 80\text{th} \quad 81\text{th} \quad 82\text{th} \quad 83\text{th}$

**Ans** (B)

**6** From 3 boys and 3 girls,  
 i)  $G B G B G B \Rightarrow 3! \times 3!$   
 $\quad \quad \quad \uparrow \quad \quad \uparrow$   
 $\quad \quad \quad \text{girls first} \quad \text{boys}$   
 ii)  $B G B G B G \Rightarrow 3! \times 3!$   
 $\quad \quad \quad \uparrow \quad \quad \uparrow$   
 $\quad \quad \quad \text{boys first} \quad \text{girls}$



From i) and ii),  
 $2 \times (3! \times 3!) = 2 \times (3 \cdot 2 \cdot 1) \times (3 \cdot 2 \cdot 1)$   
 $= 2 \times 6 \cdot 6 = 72$

**Ans** (C)

**7** i) Choosing one color for the bottom face.  
 $\Rightarrow {}^6C_1 = 6$   
 ii) Arranging the remaining five colors for

Lesson 85 86