

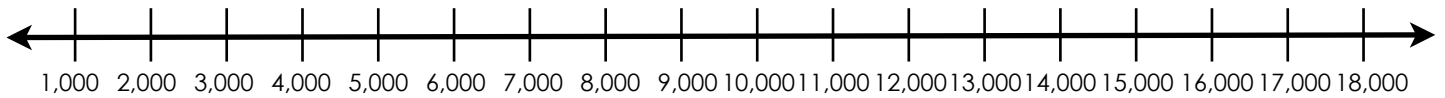

Name: _____

How many more?

Use the number line to help you decide how many more. Circle the correct answer.



5,000 is ___ more than 2,000 a) 7,000 b) 8,000 c) 3,000 d) 2,000



a) 14,000 is ___ more than 7,000 a) 5,000 b) 7,000 c) 10,000 d) 4,000

b) 13,000 is ___ more than 9,000 a) 4,000 b) 1,000 c) 6,000 d) 9,000

c) 10,000 is ___ more than 3,000 a) 6,000 b) 7,000 c) 13,000 d) 5,000

d) 12,000 is ___ more than 6,000 a) 18,000 b) 4,000 c) 9,000 d) 6,000

e) 13,000 is ___ more than 3,000 a) 10,000 b) 16,000 c) 2,000 d) 3,000

f) 17,000 is ___ more than 12,000 a) 15,000 b) 7,000 c) 5,000 d) 1,000

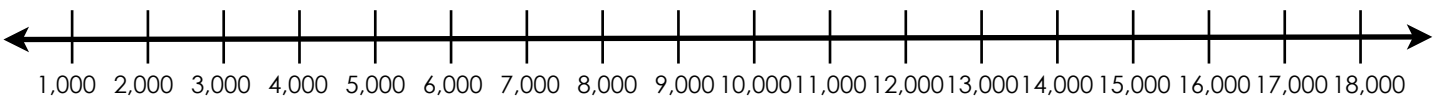
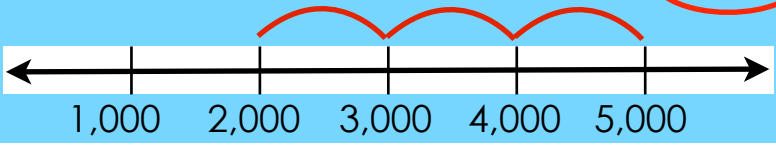
ANSWERS

How many more?

Use the number line to help you decide how many more. Circle the correct answer.



5,000 is ___ more than 2,000 a) 7,000 b) 8,000 **c) 3,000** d) 2,000



a) 14,000 is ___ more than 7,000 a) 5,000 **b) 7,000** c) 10,000 d) 4,000

b) 13,000 is ___ more than 9,000 **a) 4,000** b) 1,000 c) 6,000 d) 9,000

c) 10,000 is ___ more than 3,000 a) 6,000 **b) 7,000** c) 13,000 d) 5,000

d) 12,000 is ___ more than 6,000 a) 18,000 b) 4,000 c) 9,000 **d) 6,000**

e) 13,000 is ___ more than 3,000 **a) 10,000** b) 16,000 c) 2,000 d) 3,000

f) 17,000 is ___ more than 12,000 a) 15,000 b) 7,000 **c) 5,000** d) 1,000